

Name: \_\_\_\_\_ Date: \_\_\_\_\_ Period: \_\_\_\_\_

## Telling Military and Civilian Time

---

Under each clock, write out Military and Civilian time for the a.m.

1.




2.




3.



4.



5.



6.




7.



8.



9.




## Telling Military and Civilian Time


---

Under each clock, write out Military and Civilian time for the **p.m.**

1)



2)



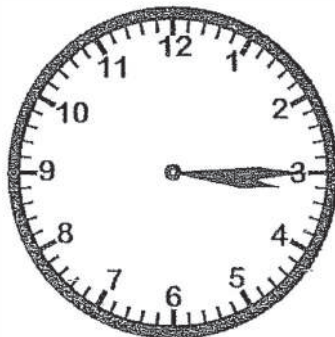
3)



4)



5)




6)



7)



8)



9)

