

# USA Studies Weekly—Ancient America to Reconstruction

## Teacher Supplement

Name \_\_\_\_\_  
USA Studies Weekly—Ancient America to Reconstruction

Date \_\_\_\_\_  
1st Quarter, Week 1

Read each question and the answer choices carefully. Then fill in the circle next to the best answer.

1. What is geography?
  - Ⓐ the study of living things
  - Ⓑ the study of Earth's processes and changes
  - Ⓒ the study of Earth's features
  - Ⓓ the study of plants
2. What is a large land mass called?
  - Ⓐ state
  - Ⓑ continent
  - Ⓒ equator
  - Ⓓ ocean
3. Choose the answer that correctly lists the seven continents.
  - Ⓐ Asia, Africa, North America, South America, Europe, Atlantic, Antarctica
  - Ⓑ Asia, Arctic, North America, South America, Europe, Australia, Antarctica
  - Ⓒ Asia, Africa, North America, South America, Europe, Australia, Antarctica
  - Ⓓ Asia, Africa, North America, South America, Europe, America, Antarctica
4. Which ocean is missing from this list: Atlantic, Pacific, Indian, Arctic?
  - Ⓐ Northern
  - Ⓑ Southern
  - Ⓒ Australian
  - Ⓓ Antarctic
5. Physical and political maps both have titles and show major cities. What is the main difference between them?
  - Ⓐ A political map shows the boundaries between political units while a physical map shows the features of an area.
  - Ⓑ A political map shows the number of electoral votes while a physical map shows physical features.
  - Ⓒ A physical map shows countries, states or territories while a political map does not.
  - Ⓓ A political map is used by politicians while a physical map is used by physicians.
6. You are on a camping trip with your family and you're trying to find the nearest campsite. You notice many different symbols on the map and you want to find out which one represents campsite locations. Which part of the map would you use?
  - Ⓐ legend
  - Ⓑ compass rose
  - Ⓒ map scale
  - Ⓓ lines of latitude and longitude

## USA Studies Weekly—Ancient America to Reconstruction

### Teacher Supplement

7. If you were traveling with your parents and they asked you to figure out the direction in which you were traveling, which part of the map would you use?
- Ⓐ legend
  - Ⓑ map scale
  - Ⓒ lines of latitude and longitude
  - Ⓓ compass rose
8. You're traveling on the highway with your family on the way to Washington, D.C. Your parents ask you to figure out how many more miles there are until you arrive. Which part of the map would you use?
- Ⓐ map scale
  - Ⓑ compass rose
  - Ⓒ lines of latitude and longitude
  - Ⓓ legend
9. The grid-like part of the map used to pinpoint locations is made up of \_\_\_\_\_.
- Ⓐ the legend
  - Ⓑ lines of latitude and longitude
  - Ⓒ the compass rose
  - Ⓓ the map scale
10. What is the third largest continent?
- Ⓐ Asia
  - Ⓑ Africa
  - Ⓒ North America
  - Ⓓ South America

11. How are the equator and the prime meridian alike? How are they different?

---

---

---

---

12. Explain why maps are important to people.

---

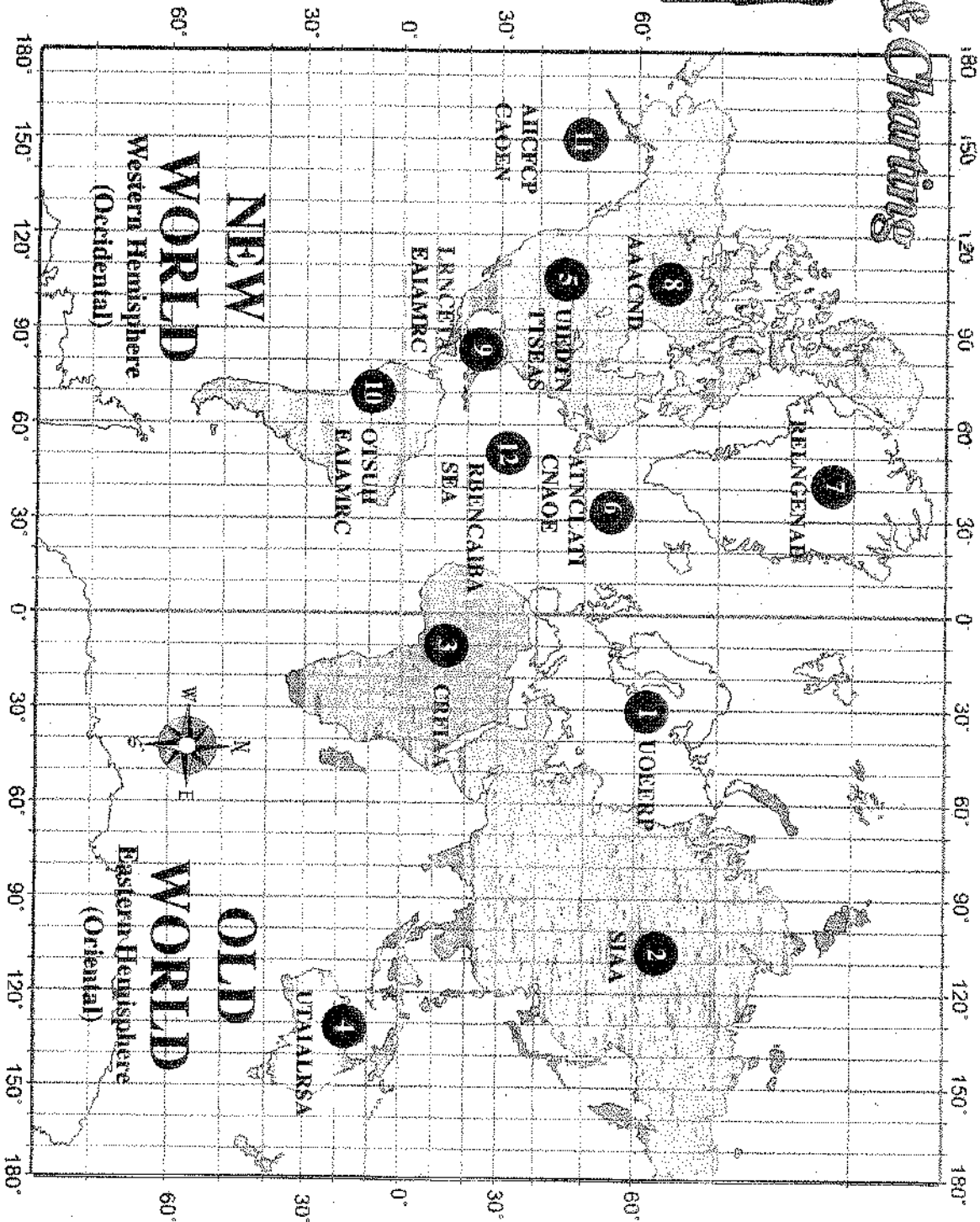

---

---

---

# Mapping & Charting

Unscramble the words on the map. Write them on the blanks below.



## Who Are Our Neighbors?

1. \_\_\_\_\_
2. \_\_\_\_\_
3. \_\_\_\_\_
4. \_\_\_\_\_
5. \_\_\_\_\_
6. \_\_\_\_\_
7. \_\_\_\_\_
8. \_\_\_\_\_
9. \_\_\_\_\_
10. \_\_\_\_\_
11. \_\_\_\_\_
12. \_\_\_\_\_
13. Use a red marker or crayon to highlight the countries \_\_\_\_\_

# Vocabulary & Word Games


Week 3 of 28 • Page 4

## ACROSS

3. the study of the Earth and its features
5. the part of a map that tells direction
8. imaginary line that divides Earth into northern and southern hemispheres
9. three-dimensional scale model of Earth

## DOWN

1. another name for a mapmaker
2. one-half of the Earth
4. A \_\_\_\_\_ map shows the landforms, water and features of a place.
6. A \_\_\_\_\_ map shows boundaries such as countries, states and cities.
7. a flat graphical representation of locations on Earth



As you read this week's lesson, circle or highlight all proper nouns with any color pen or highlighter. This will help you find some of the crossword answers and get ready for this week's test.