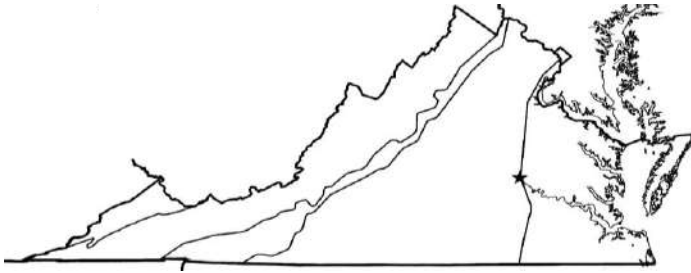


# Virginia Studies Spiral Review



Name \_\_\_\_\_

VS.2b, 10b

**1. Regions**

**Shade the Blue Ridge Mountains region on the map, and circle its products and industries below.**

farming	tourism	peanuts
tobacco	apples	military
coal mining	beef	recreation

VS.2e

**3. American Indians**

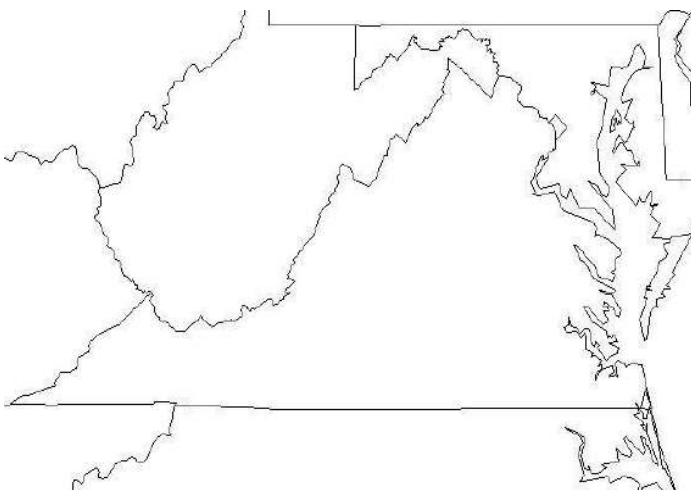
Below are the ways the American Indians survived throughout the year. **Circle** what they ate during the **Winter**.

hunted	fished	grew crops
harvested crops	preserved food for winter	
ate food stored in the fall	berries	

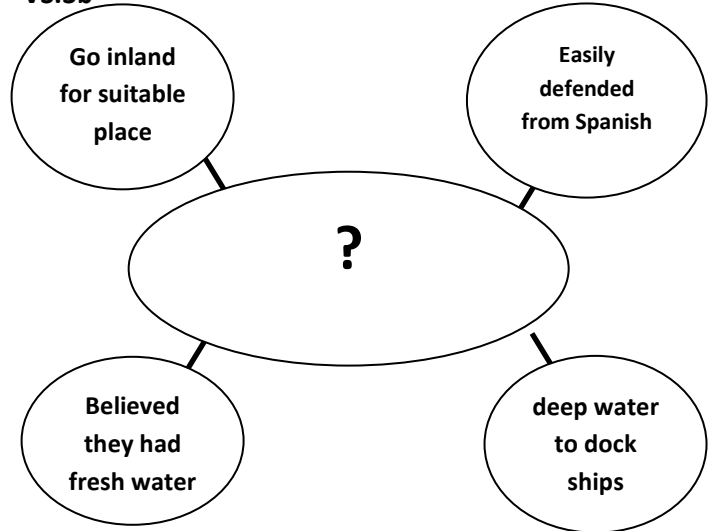
VS.2a

**5. Maps**

**Label Virginia and the five bordering states.**



VS.3b

**2. Graphic Organizer**

VS.2d

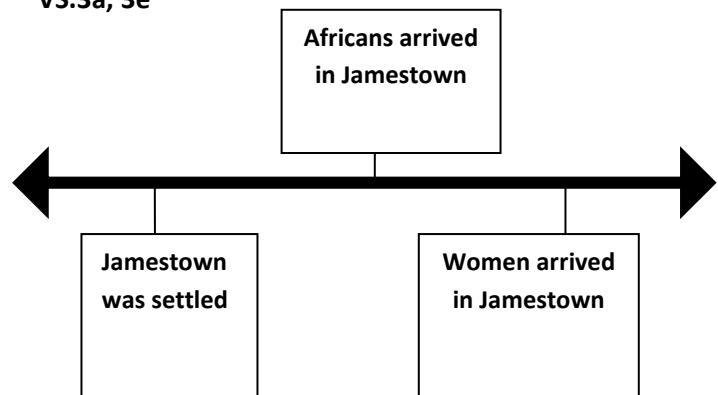
**4. People**

**I'm the explorer who called the people I found in North America "Indians" because I thought I was in the Indies.**

**Who am I?**

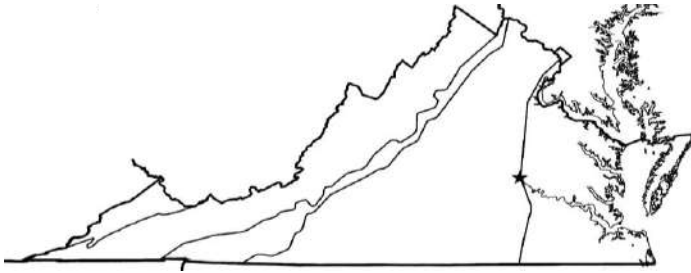
- a. Christopher Newport
- b. Juan Ponce de Leon
- c. Christopher Columbus
- d. King James III

VS.3a, 3e

**6. Jamestown**

**Directions: Write a year in each box that matches the description on the time line.**

VS.2b, 10b

**1. Regions**

Shade the Coastal Plain region on the map, and circle its products and industries below.

farming	tourism	peanuts
tobacco	seafood	military
ship building	beef	recreation

VS.2e

**3. American Indians**

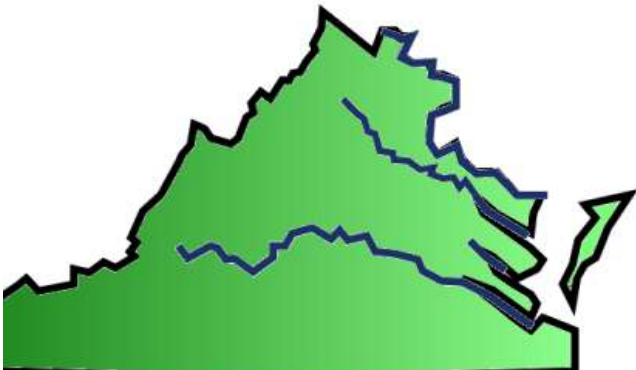
List the American Indian Language Groups. Circle the one that the Powhatan belonged to.

1. \_\_\_\_\_
2. \_\_\_\_\_
3. \_\_\_\_\_

VS.2c

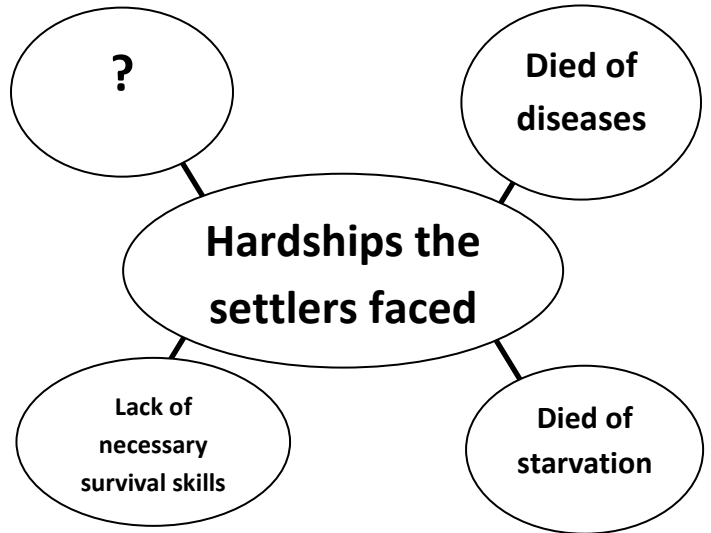
**5. Maps**

Label with the correct NUMBER the Virginia bodies of water.



- |                   |                   |                       |
|-------------------|-------------------|-----------------------|
| 1. Atlantic Ocean | 2. Chesapeake Bay | 3. York River         |
| 4. Potomac River  | 5. James River    | 6. Rappahannock River |

VS.3f

**4. Graphic Organizer**

VS.3c

**4. People**

I granted the charters to the Virginia Company of London establish a settlement in North America and extend English rights to the settlers.

Who am I?

- a. Virginia Company of London
- b. Powhatan
- c. Christopher Columbus
- d. King of England

VS.3e, 4a

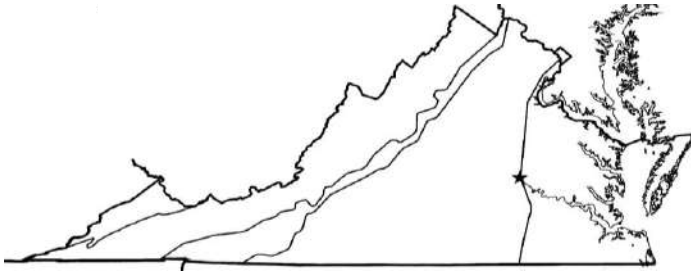
**6. Jamestown**

Circle ALL correct answers.

What was needed in order for Jamestown to have a successful economy?

artifacts	tobacco
slaves	buyers in England
women	Native Americans

VS.2b, 10b

**1. Regions**

Shade the Valley and Ridge region on the map, and circle its products and industries below.

farming	poultry	peanuts
apples	seafood	military
dairy	beef	horses

VS.2e

**3. American Indians**

\_\_\_\_\_ Siouan  
 \_\_\_\_\_ Iroquoian  
 \_\_\_\_\_ Algonquian

Directions: Put a number on each line for the language spoken in that area on the map.

VS.2c

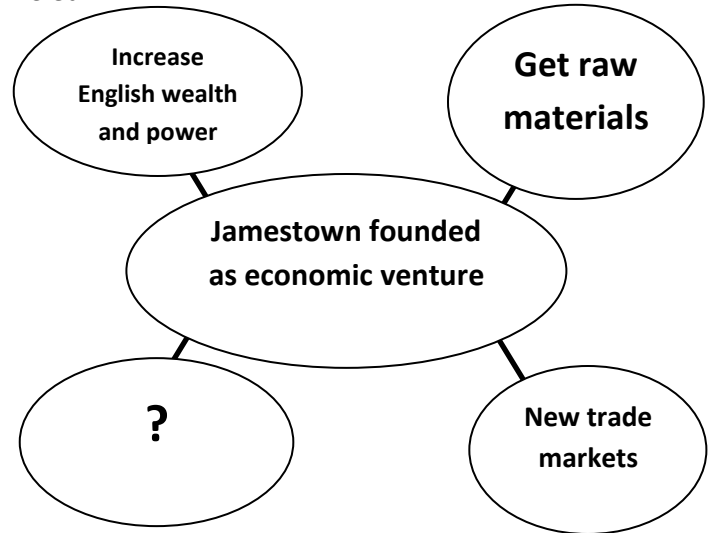
**5. Maps**

Label with the correct NUMBER the cities located along each river.



1. Alexandria	2. Richmond	3. Fredericksburg
4. Yorktown	5. Jamestown	

VS.3a

**1. Graphic Organizer**

VS.3g

**4. People**

I initiated trading relationships with the settlers of Jamestown and the American Indians.

Who am I?

- King of England
- Powhatan
- Christopher Columbus
- John Smith

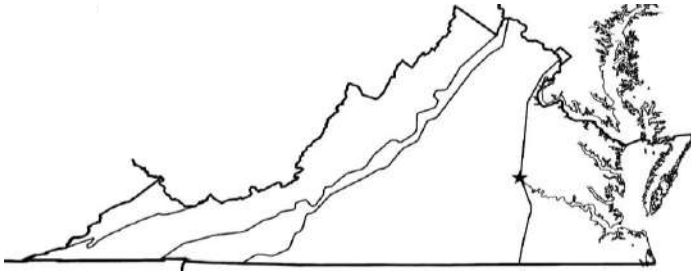
VS.3a, 3b

**6. Jamestown**

Directions: Fill in the blanks.

- Jamestown was found in \_\_\_\_\_.  
(year)
- Jamestown was primarily an \_\_\_\_\_ venture.
- During the settlers time Jamestown was a \_\_\_\_\_ bordered by water on three sides.
- Today Jamestown is an \_\_\_\_\_ on the James River.

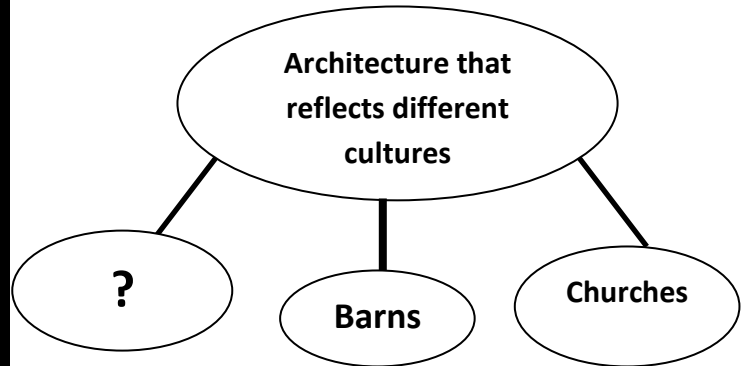
VS.2b, 10b

**1. Regions**

Shade the Piedmont region on the map, and circle its products and industries below.

farming	poultry	peanuts
apples	government	military
technology	beef	tobacco

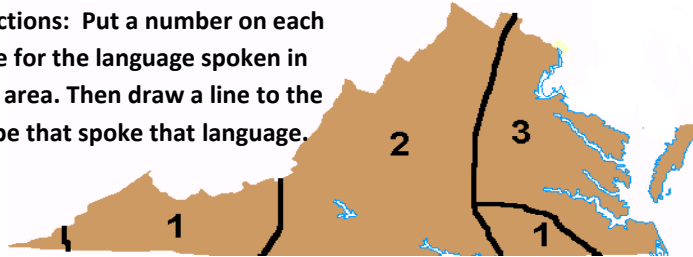
VS.3g

**1. Graphic Organizer**

VS.2e

**3. American Indians**

Directions: Put a number on each line for the language spoken in that area. Then draw a line to the tribe that spoke that language.



_____ Siouan	Powhatan
_____ Iroquoian	Monacan
_____ Algonquian	Cherokee

VS.4b

**4. People**

I served as a contact between the Native Americans and the English settlers.

Who am I?

- a. King of England
- b. Powhatan
- c. Pocahontas
- d. John Smith

VS.2c

**5. Maps**

Directions: Fill in the Blanks.



The \_\_\_\_\_  
region is a SOURCE of many rivers, which flow into the \_\_\_\_\_.

VS.3g


**6. Jamestown**

Directions: Choose ALL correct answers.

How did the Native Americans contribute to the survival of Jamestown?

- taught settlers survival skills
- made settlers clothing
- taught settlers how to grow crops
- gave settlers all their land
- had contact with the settlers
- let settlers live in their homes

VS.2b, 10b

**1. Regions**

Shade the **Coastal Plain** region on the map, and circle its **products and industries** below.

farming	poultry	peanuts
apples	government	military
technology	beef	tobacco

VS.2d

**3. American Indians**

List the American Indian Language Groups. Circle the one that the **Cherokee** belonged to.

1. \_\_\_\_\_
2. \_\_\_\_\_
3. \_\_\_\_\_

VS.2c

**5. Maps**

Label the river where Jamestown is located.



What other city is located on this river?

VS.3f

**4. Graphic Organizer**

VS.3a

**4. People**

We financed the settlement of Jamestown.

Who are we?

- a. Virginia Company of London
- b. Powhatan
- c. Christopher Columbus
- d. King of England

VS.3f

**6. Jamestown**  
Circle ALL correct answers.

What changes took place that resulted in survival of the settlers in Jamestown?

- |                         |                             |
|-------------------------|-----------------------------|
| arrival of supply ships | lack of safe drinking water |
| forced work program     | disease and starvation      |
| lack of survival skills | emphasis on agriculture     |

VS.2b

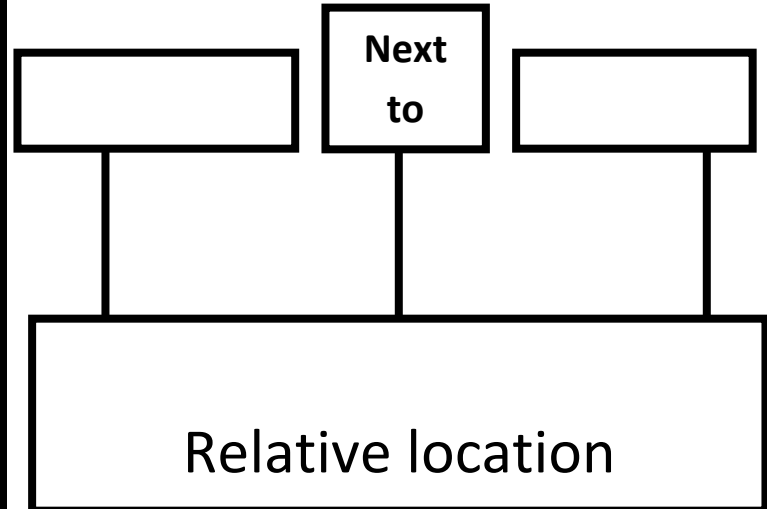
### 1. Regions

Label the Regions.



VS.2a

### 2. Graphic Organizer



VS.2d

### 3. American Indians

List two examples of artifacts that have been discovered in Virginia

---



---

VS.3f

### 4. People

I was a strong leader. I established the forced work program in Jamestown.

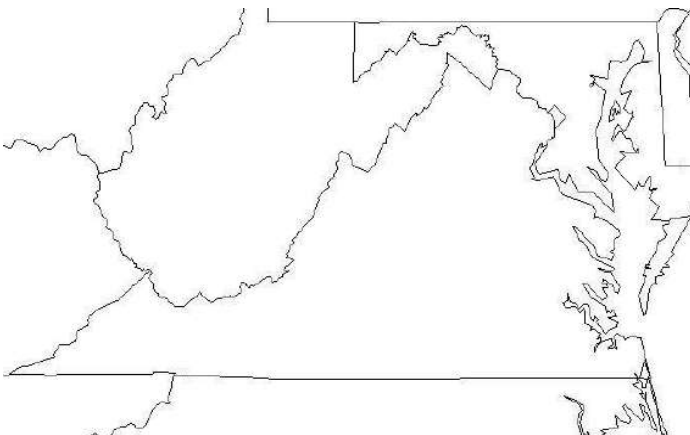
Who am I?

- a. George Washington
- b. Chief Powhatan
- c. John Smith
- d. King of England

VS.1i, 2b

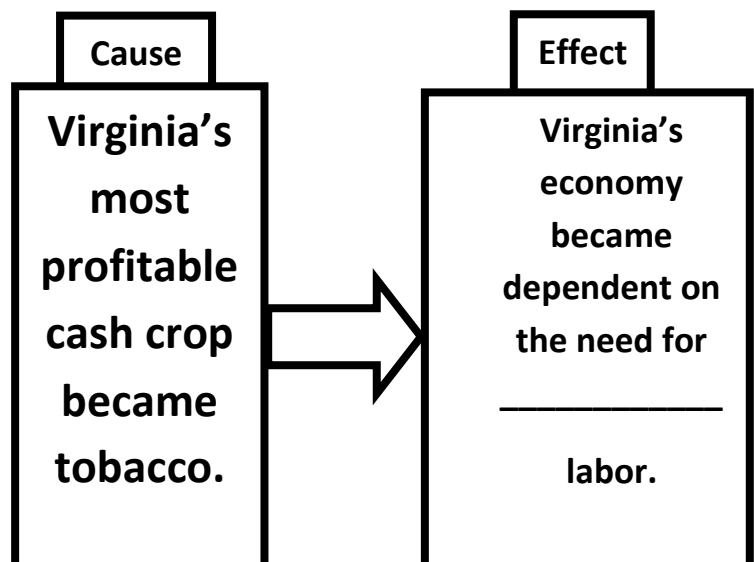
### 5. Maps

Draw and label the Fall Line, then label the state that is to the south of the Fall Line.



VS.1b, 4a

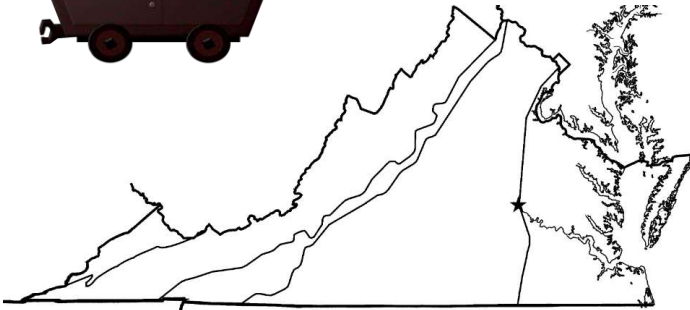
### 6. Jamestown



VS.2b

**1. Regions**

Label the region where this product is made.



VS.2f

**3. American Indians**

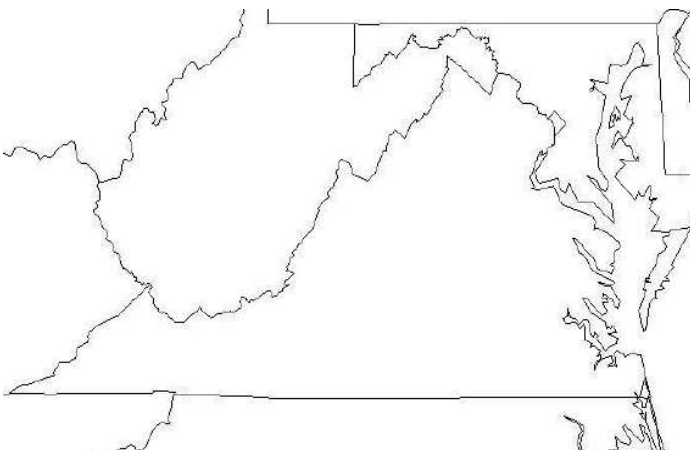
\_\_\_\_\_

was the headquarters of the leader  
Powhatan in 1607.

VS.4c

**5. Maps**

Label the cardinal directions. Draw arrows in the direction  
the population was moving when the capital was moved  
from Williamsburg to Richmond.



VS.3d

**2. Graphic Organizer**

Governor

Governor's  
council2 burgesses from  
each division of  
Virginia

\_\_\_\_\_

\_\_\_\_\_

VS.3f

**4. People**

I was a strong leader. I established the forced  
work program in Jamestown.

Who am I?

- a. George Washington
- b. Chief Powhatan
- c. John Smith
- d. King of England

VS.4c

**6. Jamestown**

Cause

-contaminated  
drinking water-unhealthy  
living conditions  
caused by  
diseases-Fires destroyed  
wooden and  
brick buildings

Effect

The capital  
was moved  
from

to

\_\_\_\_\_.



VS.2b

**1. Regions**

Label the region where this product is made.

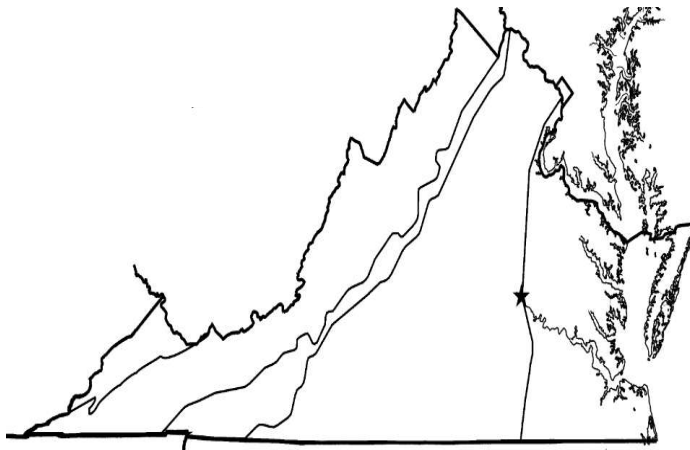


VS.3d

**3. Government**

\_\_\_\_\_ was the first elected legislative body in English America, giving settlers the opportunity to \_\_\_\_\_ their own government.

VS.4b

**5. Maps**Label the regions the English and Africans settled in.

VS.4a

**2. Graphic Organizer**

Slave  
Labor

Cash crop  
sold to  
England

Virginia colony  
depended on  
agriculture

\_\_\_\_\_

VS.3e

**4. People**

\_\_\_\_\_ made it possible to make the Jamestown settlement permanent. They arrived in the year \_\_\_\_\_.

\_\_\_\_\_ made it possible to expand the tobacco economy. They arrived in the year \_\_\_\_\_.

VS.4d

**6. Colonial Virginia**


Cause

Few  
people in  
Colonial  
Virginia  
had paper  
money.

Effect

People  
\_\_\_\_\_  
instead of  
using money  
to get what  
that needed.

VS.2b

**1. Regions**Label the regions where this product is made.

VS.5a

**3. Government**

British Parliament believed they had legal authority over the \_\_\_\_\_. They believe they had the right to \_\_\_\_\_ the colonies. \_\_\_\_\_ thought their local assemblies had legal authority. Colonists believe they should not be \_\_\_\_\_ since they had no legal \_\_\_\_\_ in Parliament. (\*Hint\* No taxation without representation)

VS.4e

**5. Drawing Conclusions**

What Colonial Virginia people are pictured here?



VS.4d

**2. Graphic Organizer****Cause**

Few people had paper money in Colonial Virginia.

**Effect**

Colonial Virginia had \_\_\_\_\_ banks.

VS.4d

**4. Vocabulary**

Money

Barter

Debt

Credit

Savings

\_\_\_\_\_ is currency including coins and paper bills.

\_\_\_\_\_ is buying a good or service now and paying for it later.

\_\_\_\_\_ is money put away to spend at a later time.

\_\_\_\_\_ is trading goods and services without using money.

\_\_\_\_\_ is a good or service owed to another person.

VS.4e

**6. Colonial Virginia**

Directions: Draw lines to match.

One room with dirt floor

Food

Choices were limited

Clothes

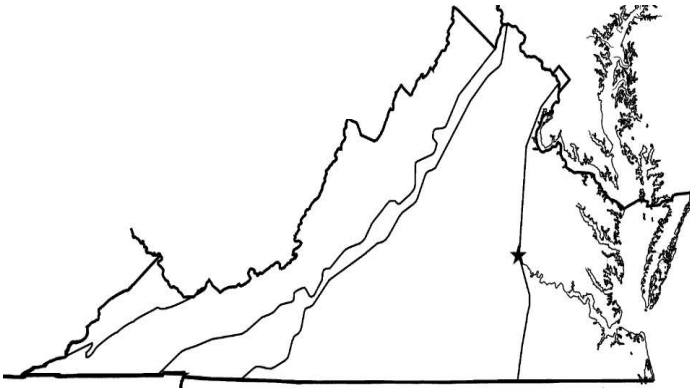
Handmade in your own household

Houses

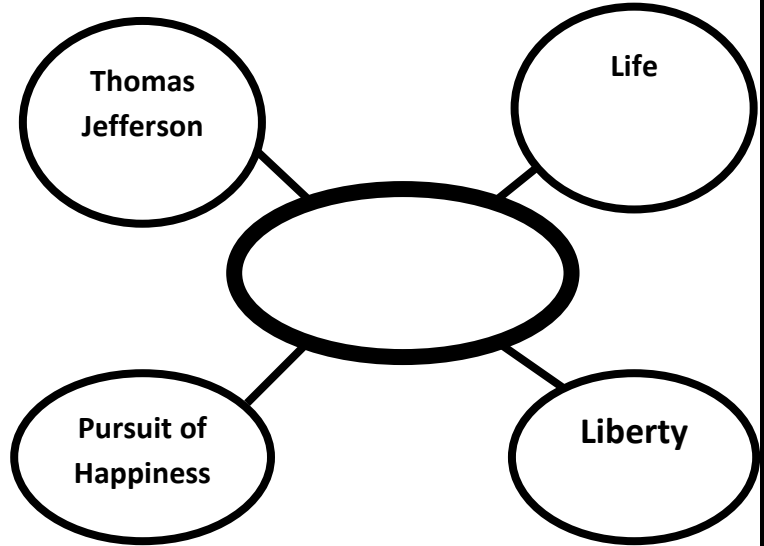
VS.2b

**1. Regions**

Label the region with flat land bordering the Atlantic Ocean and Chesapeake bay, east of the Fall Line.



VS.5a

**2. Graphic Organizer**

VS.5b

**3. Revolutionary War**

The Revolutionary War was fought between \_\_\_\_\_ and the

\_\_\_\_\_

\_\_\_\_\_ who were fighting for

\_\_\_\_\_.

VS.5b

**4. People**

I provided military leadership by serving as commander-in-chief of the Continental Army.

Who am I?

- a. Robert E. Lee
- b. Thomas Jefferson
- c. George Washington
- d. George Mason

VS.5b

**5. Drawing Conclusions**

Who would have fought for a better chance of freedom during the American

Revolution?

VS.5b

**6. Revolutionary War**

Directions: Draw lines to match.

Did not take  
either side

Patriots

Stayed loyal to  
Great Britain

Loyalists

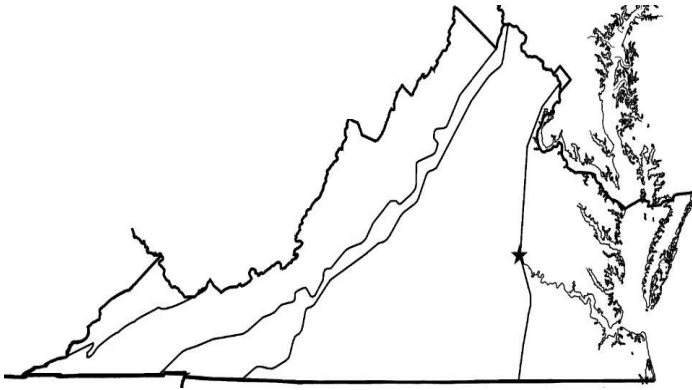
Fought for  
independence

Neutral

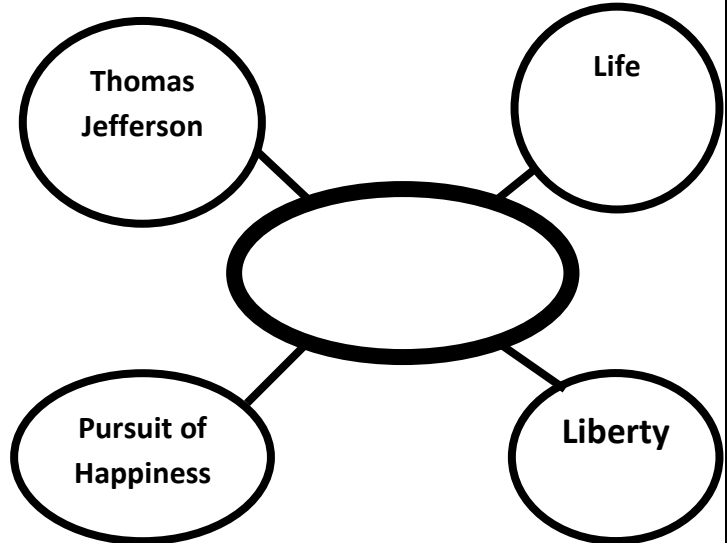
VS.2b

**1. Regions**

Label the region that includes the Great Valley of Virginia and other valleys separated by ridges, located west of the Blue Ridge Mountains.



VS.5a

**2. Graphic Organizer**

VS.5b

**3. Revolutionary War**

Circle all of the groups of people who fought for the Continental Army during the Revolutionary War.

Patriots

Loyalists

Women

Slaves

American Indians

Neutralists

VS.5b

**4. People**

I provided political leadership by expressing the reasons for colonial independence from Great Britain in the Declaration of Independence.

Who am I?

- a. Robert E. Lee
- b. Thomas Jefferson
- c. George Washington
- d. George Mason

VS.5b

**5. Drawing Conclusions**

What document inspired colonists to fight for independence in the Revolutionary War?

VS.5b

**6. Revolutionary War**

Directions: Draw lines to match.

"Give me liberty or give me death"

Women

Took on more responsibility to support the war effort

James Lafayette

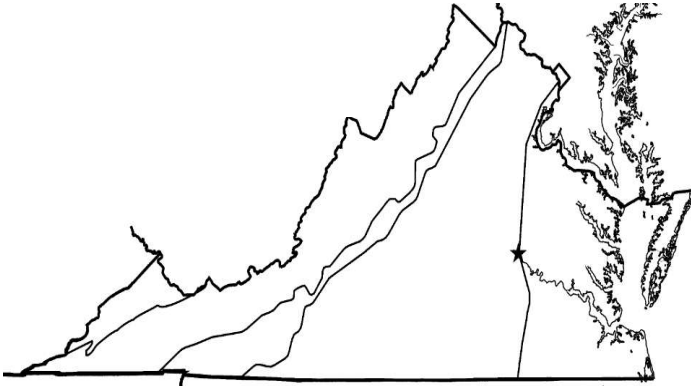
Fought for the Continental army, granted freedom

Patrick Henry

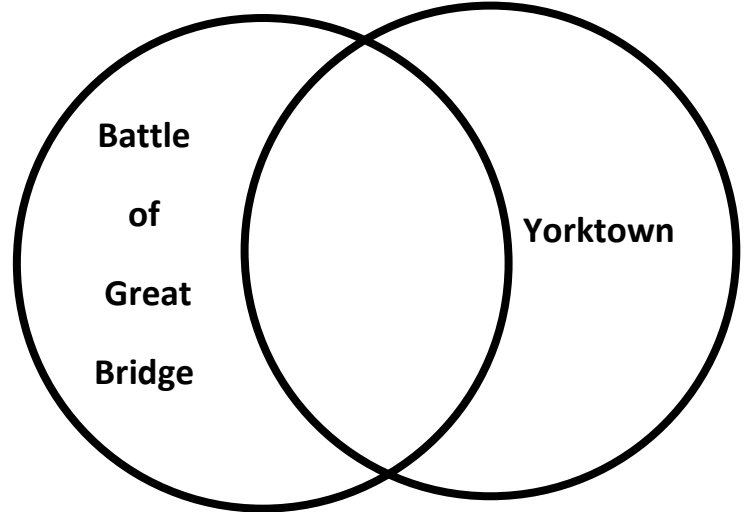
VS.2b,

**1. Regions**

Label the region that is located in Southwest Virginia.



VS.5c

**2. Graphic Organizer**

VS.5c

**3. Revolutionary War**

What was the first land battle of the  
American  
Revolution fought in Virginia?

VS.5c

**4. People**

I rode on horseback to Charlottesville to warn Thomas  
Jefferson the British were coming to arrest him and  
members of the General Assembly.

Who am I?

- a. James Lafayette
- b. Jack Jouett
- c. Woodrow Wilson
- d. James Madison

VS.5c

**5. Drawing Conclusions**

The \_\_\_\_\_  
Surrendered at \_\_\_\_\_,  
ending the Revolutionary War.

VS.5b

**6. Revolutionary War**

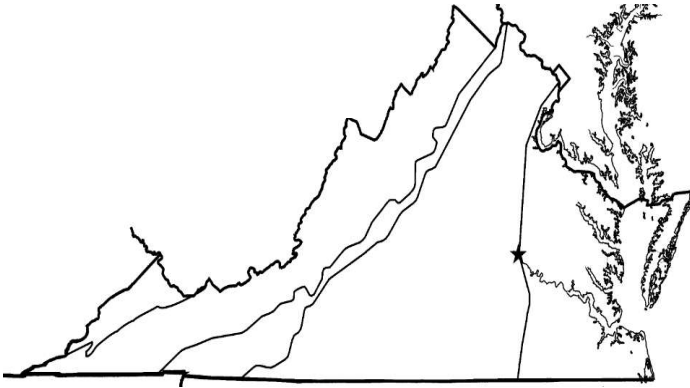
What document states that the authority to  
govern belongs to the people rather than the  
kings?

- a. The Charter
- b. The Declaration of Rights
- c. The Declaration of Independence
- d. The Constitution

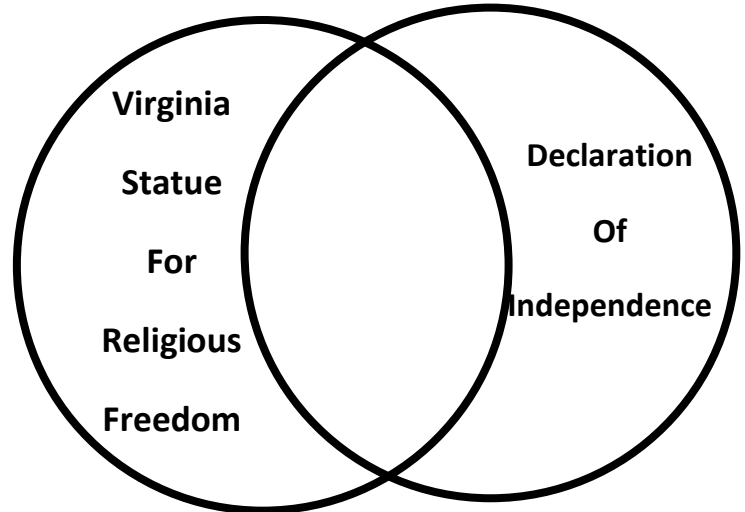
VS.2b,

**1. Regions**

Label the region that has rolling hills and is west of the Fall Line



VS.5a, 6a

**2. Graphic Organizer**

VS.6c

**3. Farming**

What caused farmers to move westward looking for new soil?

VS.6a

**4. People**

I am the "Father of Our Country".

Who am I?

- a. George Mason
- b. Thomas Jefferson
- c. Patrick Henry
- d. George Washington

VS.6a

**5. Drawing Conclusions**

James Madison kept good notes at the Constitutional Convention, and also helped many delegates come to agreements while writing the constitution. It is no wonder we call him the

\_\_\_\_\_  
\_\_\_\_\_.

VS.6a

**6. Documents**

What document written by Thomas Jefferson states that all people should be free to worship as they please?

- a. The Constitution
- b. The Declaration of Rights
- c. The Declaration of Independence
- d. The Statue for Religious Freedom

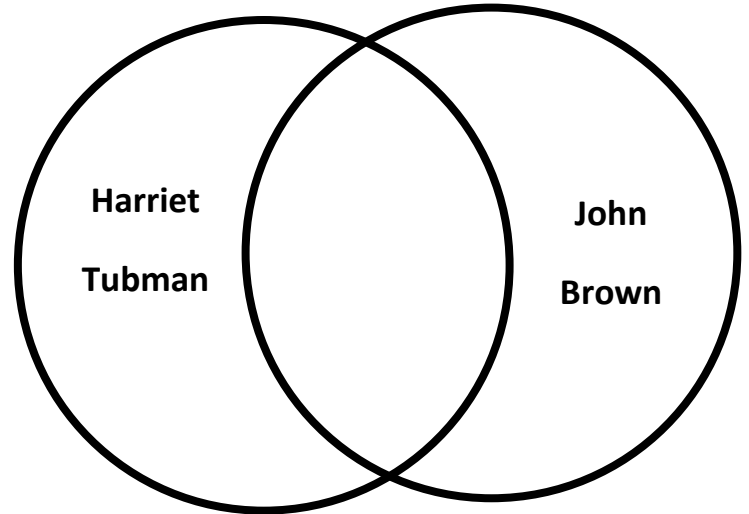
VS.7a

**1. North or South**

Label the picture with the name of the region whose economy was based on this.



VS.7a

**2. Graphic Organizer**

VS.7a

**3. Civil War**

Dear Sue,  
I received word today that the next group of escaping slaves would be arriving tomorrow night. I will be looking out for them to arrive; I will feed them, and keep them safe until they move on.

Ben

What is Ben talking about?

VS.7a

**4. People**

I campaigned to end slavery.

I am an \_\_\_\_\_.

VS.7b

**6. Civil War Battles**

The general of the Confederate Army was \_\_\_\_\_.

The general of the Union army was \_\_\_\_\_.

VS.7a

**5. Maps**

Draw an X on a free state.



VS.7a

**1. North or South**

Label the picture with the name of the region whose economy was based on this.



VS.7b

**2. Graphic Organizer**

Directions: Put the correct number in each box starting with 1 for the event that happened first, and ending with 4 for the event that happened last.

# Appomattox Court

# Battle of Bull Run

# Virginia secedes

# Election of 1860

VS.7a

**3. Civil War**

Dear George,

I sure hope the next new state added to the United States allows slavery. I plan on moving there and getting more farm land so I can make more money.

Kevin

Which region does Kevin live in?

VS.7a

**4. People**

My Election as President in 1860 caused many Southern states to secede from the Union.

Who am I?

VS.7a

**5. Maps**

Draw an X on a free state.




VS.7b

**6. Civil War Battles**

What sea battle is pictured below?

Who won the battle?





VS.7a, 7b

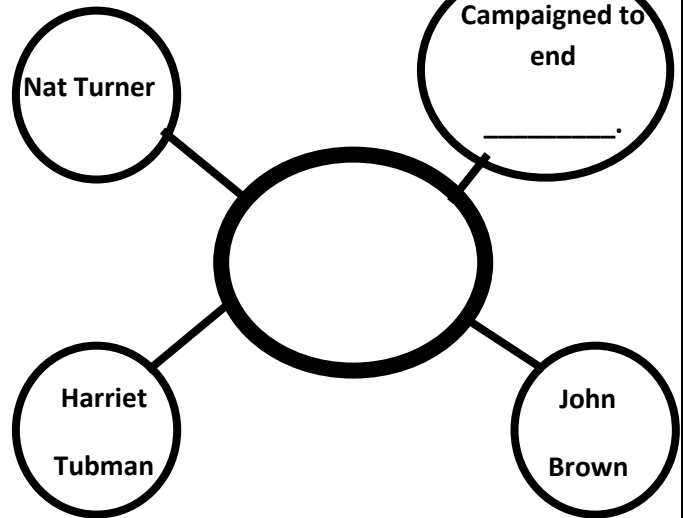
**1. North or South**

Industrialized	Free	Grant	Agriculture
Abolitionists	Lee	Lost	Slave

Using the word bank, write the terms under the correct location.

**North****South**

VS.7a

**2. Graphic Organizer**

VS.7a

**3. Civil War**

Dear Mike

I keep hearing rumors of a raid on the Harper's Ferry Armory. The goal is to start a slave rebellion. Wow, the leader of this raid must be brave to try this!

Mark

Who is Mark referring to?

VS.7b

**4. People**

The Civil War ended when I surrendered to Ulysses Grant at Appomattox Court House in April 1865.

Who am I?

VS.7a

**5. Maps**

Draw an X on a slave state, and then draw arrows to show the directions escaping slaves would travel.



VS.7b

**6. Civil War Battles**

Draw lines to match.

Fredericksburg

Lee defeated  
Union Troops

Stonewall  
Jackson

Confederate capital  
fell to Grant and was  
burned by  
Southerners.

Richmond

Battle of Bull Run

VS.8a

**1. Reconstruction**

Congress passed laws during Reconstruction in order to rebuild the \_\_\_\_\_ and bring the \_\_\_\_\_ states back into the \_\_\_\_\_.

VS.8a

**2. Graphic Organizer****Cause****Effect**

Millions of freed African Americans needed housing, jobs, food, clothes, and education.

The government created \_\_\_\_\_  
\_\_\_\_\_  
\_\_\_\_\_.

VS.8a

**3. Reconstruction**

The economy is in ruins! All the banks are closed, I cannot spend my money because it has no value, my plantation is destroyed, and so is the bridge from my house into town!

Where does this person live?

VS.8a

**4. Vocabulary**

What is sharecropping?

VS.7a

**5. Maps**

Circle the two states that used to be one before they disagreed over secession and slavery during the Civil War.



VS.8a

**6. Matching**

Draw lines to match.

Rebuilding

Helped newly freed slaves and other Virginians

Had no value

Reconstruction

Freedmen's Bureau

Money

VS.8a

## 1. Reconstruction

Circle the correct answer.

During Reconstruction men of all races could  
vote.

True

False

VS.8a

## 2. Graphic Organizer

Cause

Effect

Many  
people did  
not want  
African  
Americans  
voting.

(List two ways African  
Americans were kept  
from voting)

1.

2.

VS.8b

## 3. Vocabulary

What is an unfair difference in the treatment of  
people?

- a. segregation
- b. Jim Crow
- c. integration
- d. discrimination

VS.8b

## 4. Jim Crow

When we go to the store I cannot use the  
“white” bathroom, and I cannot drink out of  
their water fountain either. I don’t like our  
water fountain, the water isn’t cold!

What is the person experiencing?

VS.7a

## 5. Maps

Circle the region that won the Civil War.



VS.8b

## 6. Jim Crow

African Americans were forced to use  
separate and unequal facilities. List three  
examples.

1.

2.

3.

VS.8c

**1. Economic Growth**

What was the key to growth and expansion of  
agriculture and industry?

- a. Roads
- b. Cars
- c. Railroads
- d. Tobacco

VS.8c

**2. Graphic Organizer****Cause**

(Name the  
invention that  
made this  
happen)

**Effect**

**Small  
towns  
grew  
into  
cities.**

VS.8c

**3. Location**

Where were coal deposits found after the Civil  
War and Reconstruction?

- a. Roanoke City
- b. Richmond
- c. Tazewell County
- d. West Virginia

VS.8c

**4. Economic Growth**

Circle the correct picture.

Why were more and better roads needed?



VS.8c

**6. Economic Growth**

**After the Civil War and  
Reconstruction what crop and its  
products became important to the  
Virginia industries and economy  
again?**

VS.7a

**5. Maps**

Circle the region that lost the Civil War.



VS.9a

**1. 20<sup>th</sup> Century**

Virginia changed from an agricultural society to a \_\_\_\_\_ society.

- a. Tobacco
- b. Farming
- c. Industrial
- d. Railroad

VS.9a

**2. Graphic Organizer****Cause****Effect**

People moved  
from rural to  
urban areas  
for economic  
opportunities.

Virginia's  
\_\_\_\_\_  
grew.

VS.9a

**3. Location**Choose all correct answers.

During the 20<sup>th</sup> century which areas grew due to computer technology?

- a. Tidewater
- b. Richmond
- c. Tazewell County
- d. Appalachian Plateau
- e. Northern Virginia
- f. Roanoke City

VS.9a

**4. Economic Growth**

Circle the correct picture.

Which product's low prices would have encouraged Virginia to change from an agricultural to industrial society?



VS.8b

**5. Maps**

Circle the region where segregation mostly occurred.



VS.9b

**6. 20<sup>th</sup> Century**

1. I was a 20<sup>th</sup> century president who wrote a plan for world peace. Who am I?
2. I was a military leader who created an economic plan to ensure world peace. Who am I?

George C.  
MarshallWorked for  
worldWoodrow  
Wilson

3. \_\_\_\_\_

VS.8b

**1. Vocabulary**

The separation of people usually based on race  
or religion is known as--

- a. Discrimination
- b. Segregation
- c. Integration
- d. Racism

VS.9c

**2. Graphic Organizer****Cause****Effect**

After WWII  
African  
Americans  
demanded  
equal  
treatment and  
recognition of  
their rights as  
American  
Citizens.

The \_\_\_\_\_  
\_\_\_\_\_  
\_\_\_\_\_  
included the  
passing of laws that  
made racial  
discrimination  
illegal.

VS.9c

**3. Civil Rights**

In 1954 The United States Supreme Court ruled  
that “ \_\_\_\_\_ but \_\_\_\_\_ ”  
public schools were unconstitutional. All schools  
including ones in Virginia were ordered to  
desegregate.

VS.9c

**4. Desegregation**

Directions put the correct number in each box starting with 1 for  
the event that most likely happened first, and ending with 4 for  
the event that most likely happened last.

# Some schools closed to avoid integration

# Massive Resistance failed, Virginia's schools integrated

# Harry F. Byrd lead Massive Resistance against desegregation

# Virginia government established Massive Resistance

VS.9c

**5. Maps**

Put an X on a state that would have had segregated  
schools.



VS.9d

**6. Civil Rights**

I was a lawyer and civil rights leader  
who worked for equal rights for  
African Americans. I played a key role  
in Brown v. Board of Education.

Who am I?

VS.8b

## 1. Vocabulary

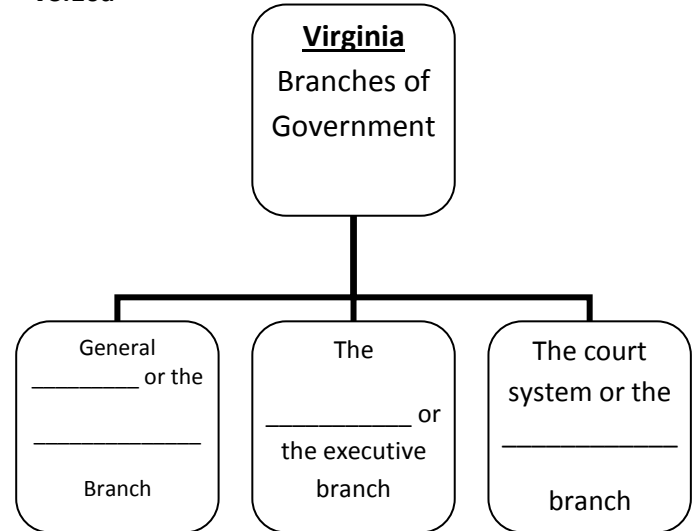
2.

What term means to abolish racial segregation?

- a. Discrimination
- b. Segregation
- c. Integration
- d. Desegregation

VS.10a

## 3. Graphic Organizer



VS.9d

3. Contributions of Citizens in the 20<sup>th</sup> and 21<sup>st</sup> centuries

Directions: Write the number of the person described below on the blank.

- |                       |                          |
|-----------------------|--------------------------|
| 1. Maggie L. Walker   | 2. Harry F. Byrd Sr.     |
| 3. Arthur R. Ashe Jr. | 4. A. Linwood Holton Jr. |
| 5. L. Douglas Wilder  |                          |

\_\_\_\_\_ First African American to be elected as a Governor in the United States, Governor of Virginia.

\_\_\_\_\_ Governor, "Pay As You Go" policy for road improvements, modernized Va state government.

\_\_\_\_\_ First African American woman bank president.

\_\_\_\_\_ Governor of Virginia, promoted racial equality, appointed more African Americans and women to positions in state government than previous governors.

\_\_\_\_\_ First African American winner of major men's single tennis championship, author, and eloquent speaker for social change.

VS.10c

## 4. Virginia Today

Fill in the blank with the correct vocabulary term.

Exports	communication
Technology	tourism
Federal government	raw materials

1. Virginia's transportation system moves \_\_\_\_\_ and finished products to markets.

1. Virginia \_\_\_\_\_ agricultural and manufactured products including poultry, tobacco, coal, and large ships to other places.

2. Virginia has a large number of \_\_\_\_\_ and other \_\_\_\_\_ industries, to keep us connected to others.

3. \_\_\_\_\_ is a major part of Virginia's economy. Because many federal workers live and/or work in Virginia the \_\_\_\_\_ has a significant impact on Virginia's economy.

**1. Jamestown**

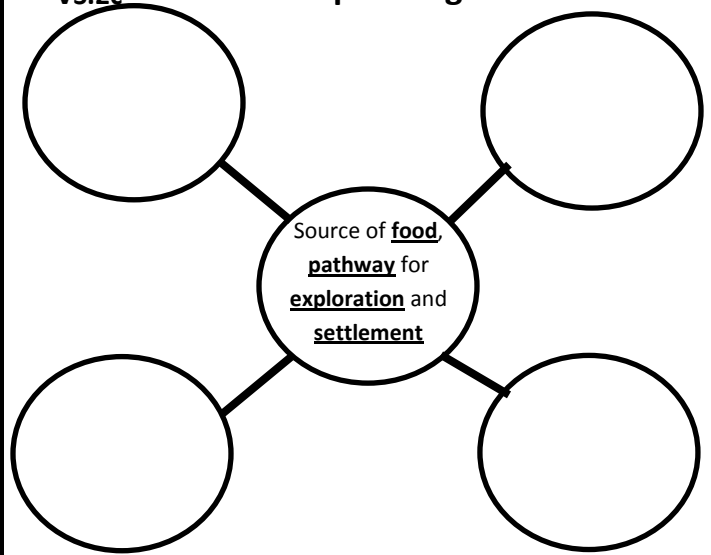
VS.3g

Over time the Native Americans realized the Jamestown settlement would continue to grow.

This caused the Native Americans to see the settlers as \_\_\_\_\_ who would take their \_\_\_\_\_.

- a. Friends, land
- b. Enemies, money
- c. Invaders, land
- d. Partners, money

VS.2c

**2. Graphic Organizer**

VS.5,6,7

**3. Civil & revolutionary Wars**

Directions: Fill in the blank, and then write the name of the war related to the information in the box below.

Declaration of Independence

Written by \_\_\_\_\_

VS.7a

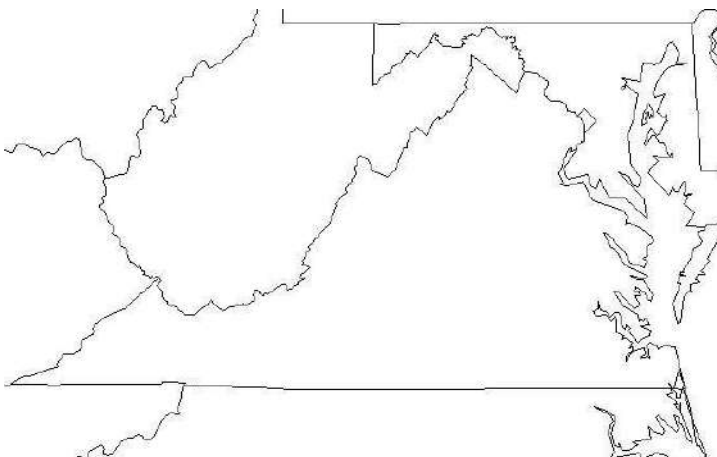
**4. Vocabulary**

I live in Colonial Virginia. I make a lot of money from my \_\_\_\_\_ crops. I do not like to spend my money; I like to keep it in case I need it. I make sure I am \_\_\_\_\_ my money.

VS.2c

**5. Maps**

Directions: Circle the body of water that provided transportation links between Virginia and other places such as Europe and Africa.



VS.7b

**6. People**

Who wrote this?

... all men are by nature equally free and independent, and have certain inherent rights, of which when they enter into a state of society, they cannot, by any compact, deprive or divest their posterity; namely, the enjoyment of life and liberty, with the means of acquiring and possessing property, and pursuing and obtaining happiness and safety.

—Virginia Declaration of Rights, 1776



VS.3a

**1. Settlement**

England wanted to establish an American colony to increase their \_\_\_\_\_ and \_\_\_\_\_.

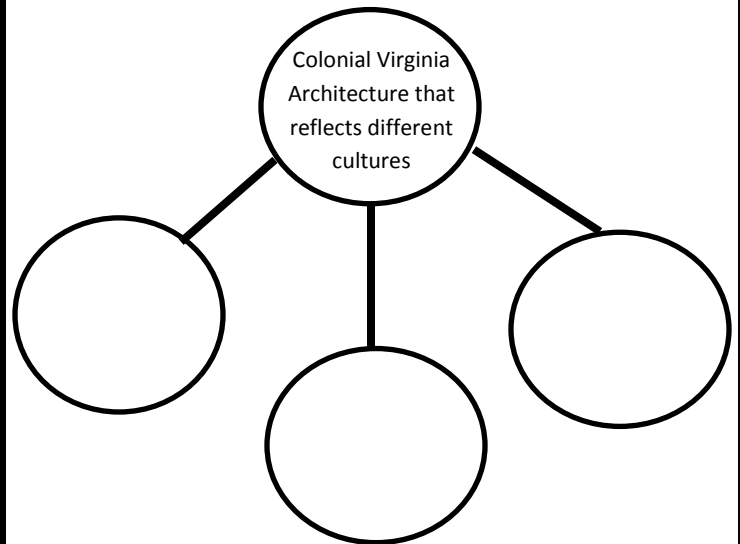
- a. Land, tobacco
- b. Enemies, wealth
- c. wealth, power
- d. raw materials, venture

VS.5,6,7 **3. Civil & revolutionary Wars**

Directions: Write the name of the war related to the information in the box below.

The western counties of Virginia disagreed over the issue of slavery, leading to the creation of West Virginia.

VS.4b

**2. Graphic Organizer**

VS.7a

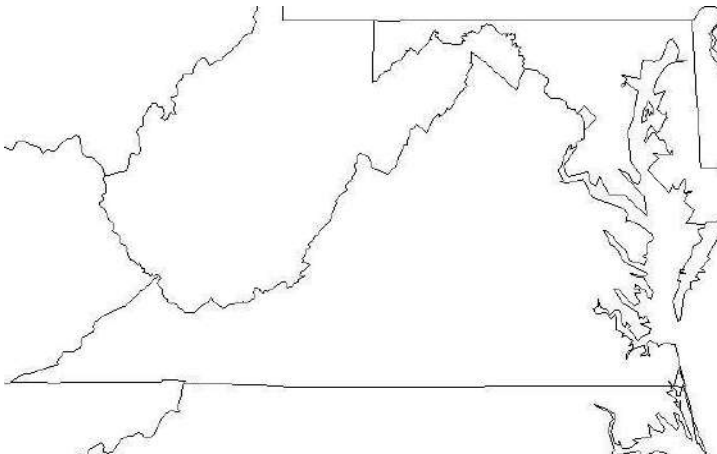
**4. Vocabulary**

I grow tobacco, and John makes clothes. Since neither of us have any money, so he gave me a pair of pants and I gave him tobacco. What is this an example of?

VS.2c

**5. Maps**

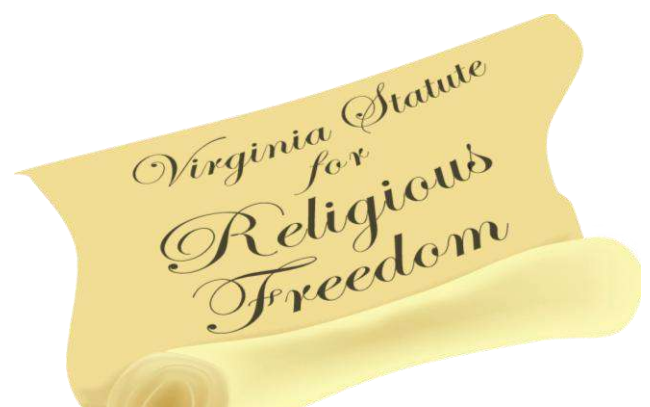
Directions: Circle the body of water that provided a safe harbor and was a source of food and transportation.



VS.6a

**6. People**

Who wrote this?



**1. Settlement & Jamestown**

VS.3a, e

Directions: Write a 1 in the box of the event that happened first, 2 second, 3 last. **THEN** circle the event that made it possible to expand the tobacco economy.

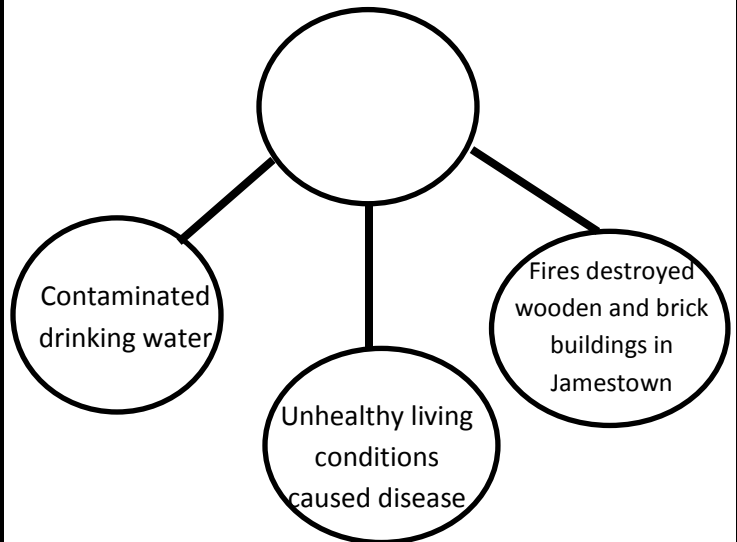
# Women arrived in Jamestown

# Africans arrived in Jamestown

# Settlers arrived in Jamestown

**2. Graphic Organizer**

VS.4c

**VS.5,6,7 3. Civil & revolutionary Wars**

Directions: Write the name of the war related to the information in the box below.

James Lafayette an enslaved African American successfully requested his freedom after the war.

VS.2d

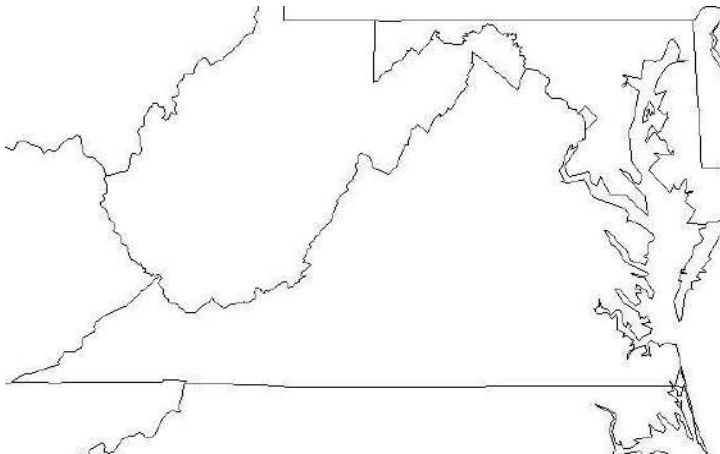
**4. Vocabulary**

I found some arrow heads and pottery in the Tidewater region. I have learned a lot about the Powhatan Indians from these \_\_\_\_\_.

VS.2c

**5. Maps**

Directions: Label the bordering states, and then circle the one to the south of Virginia.



VS.6a

**6. People****Who am I?**

First African American elected a governor in the United States, governor of Virginia.

**1. Native Americans**

VS.2e

Directions: complete the food the Indians ate or how they survived during each season.

**Winter**

- Hunted

-

**Spring**

- Hunted, picked berries

-

**Summer**

Grew crops (list three)

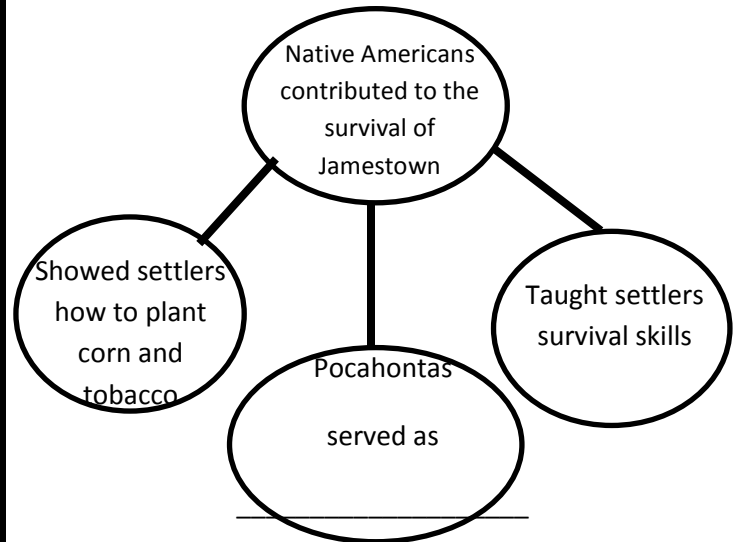
-

**Fall**

- Harvested crops

- Hunted food to \_\_\_\_\_

VS.4c

**2. Graphic Organizer**VS.5,6,7 **3. Civil & revolutionary Wars**

Directions: Fill in the blank, and then write the name of the war related to the information in the box below.

\_\_\_\_\_ campaigned to end slavery.

VS.2c

**4. Vocabulary**

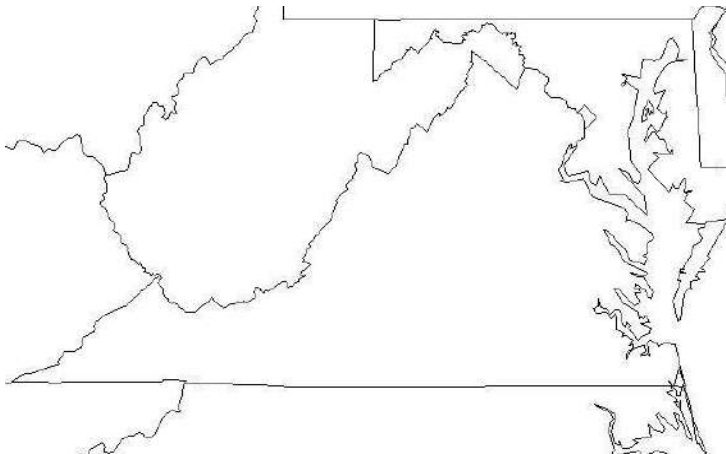
A piece of land bordered by water on three sides is a

\_\_\_\_\_.

VS.2c

**5. Maps**

Directions: Label the state that was created during the Civil War due to disagreements over slavery.



VS.6a

**6. People**

Who am I?

I played a key role in the *Brown v. Board of Education* decision.

**1. Settlement, Jamestown, Colonial Virginia**

VS.2c

Directions: List the city located along each river.

Potomac RiverRappahannock RiverYork RiverJames River

What body of water to all these rivers flow into?

VS.5,6,7 **3. Civil & revolutionary Wars**

Directions: Fill in the blank, and then write the name of the war related to the information in the box below.

\_\_\_\_\_

was the commander-in-chief of the Continental Army.

**5. Maps**

VS.2c

Directions: Draw an X on the region of Virginia where tobacco farming took place before the Revolutionary war, then draw arrows to show the directions farmers looked for new land since tobacco farming was hard on the soil.



VS.5a

**2. Graphic Organizer**Cause

England's Parliament believed it had legal authority over the colonies

Effect

\_\_\_\_\_ was written in the colonies and states the authority to govern belongs to the people.

VS.4d

**4. Vocabulary**

This month my share of the crop was not enough to cover the rent of the land I use. I am now in \_\_\_\_\_ to the land owner.

VS.6a

**6. People**

Who am I?

I spoke out against taxation without representation and my famous quote is "Give me liberty or give me death!"

**1. Settlement, Jamestown, Colonial Virginia**

VS.2c

Directions: List the river each city is located along.

AlexandriaFredericksburgYorktownJamestown

Many of these cities developed along the \_\_\_\_\_, the  
natural border between the Tidewater and Piedmont.

**VS.5,6,7 3. Civil & revolutionary Wars**

Directions: Fill in the blank, and then write the  
name of the war related to the information in  
the box below.

Abraham Lincoln's election caused southern  
states to \_\_\_\_\_.

VS.2b, 10b

**5. Maps**

Directions: Draw an X on the region of Virginia where  
recreation is an industry.



VS.2c

**2. Graphic Organizer**Cause

The Dismal Swamp has a verity of wildlife.

Effect

The Dismal Swamp was explored and surveyed  
by \_\_\_\_\_.

VS.4d

**4. Vocabulary**

I now get to go to school with my friend,  
even though she is white and I am an  
African American What a great day! We  
are so glad our schools were

\_\_\_\_\_.

VS.6a

**6. People****Who am I?**

I was the first African American  
woman to become a bank president in  
the United States.

**1. Reconstruction – Present Day**

VS.9c

What was the movement in which African Americans demanded equal treatment and recognition of their rights as American citizens?

**2. Graphic Organizer**

VS.8a

Cause

During Reconstruction Virginia's Economy was in ruins.

Effect

Virginia's money had \_\_\_\_\_.

**VS.5,6,7 3. Civil & revolutionary Wars**

Directions: Fill in the blank, and then write the name of the war related to the information in the box below.

I am fighting alongside my fellow colonists against England. I am a \_\_\_\_\_.

VS.8b

**4. Vocabulary**

I cannot afford the unfair \_\_\_\_\_  
\_\_\_\_\_ I am forced to pay when I go to vote! I hope they abolish those laws soon because I deserve to vote just like everyone else!

VS.2c

**5. Maps**

Directions: Label the peninsula bordered by the Atlantic ocean on the east and the Chesapeake Bay on the west.



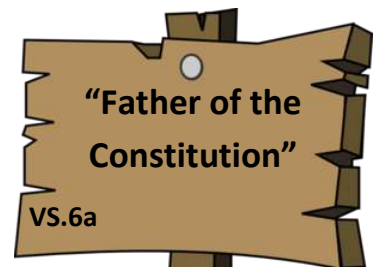
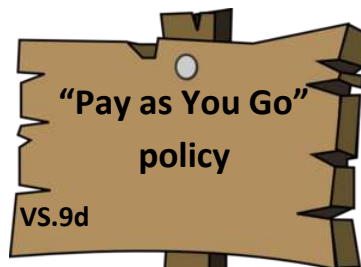
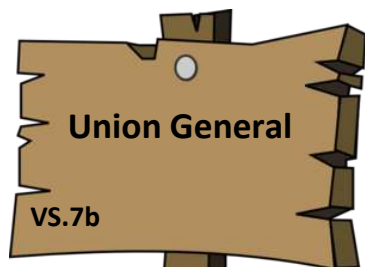

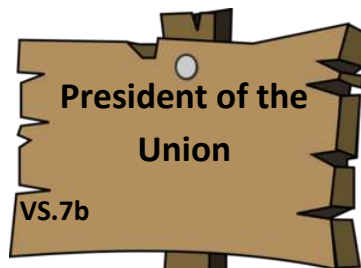
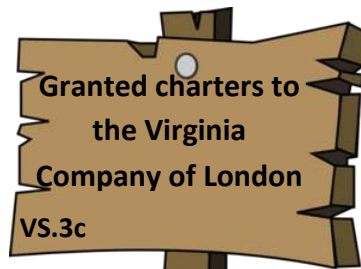

VS.5c

**6. People**

Who am I?

I rode on horseback to warn Thomas Jefferson, then governor of Virginia, that the British were coming to arrest him and members of the General Assembly.

Directions: In the box below each sign write the name of the person who is described.



**Directions: Write your answers in the box below each news article.**



VS.5b



VS.3e



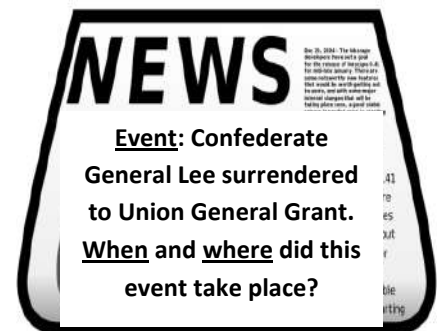
VS.3d



VS.3a



VS.7b



VS.7b



VS.7a



VS.3e



VS.5c



Directions: Complete each organizer with the name of the region described.

- Includes Great Valley of Virginia, and other valleys separated by ridges
- Located West of the Blue Ridge Mountains

- Located in Southwest Virginia
- Only a small part of the region is located in Virginia
- Part of the regions name means an area of elevated land that is flat on top

- Old rounded mountains
- Part of the Appalachian Mountain system
- Source of many rivers
- Located between the Piedmont and Valley and Ridge regions

- Flat Land located near the Atlantic Ocean and Chesapeake Bay
- East of the Fall Line

- Land at the foot of the hills
- Rolling hills
- West of the Fall Line

Directions: Each brochure page describes a region. Complete the page by writing the name of the region on the blank.

If you would like to spend a quiet night in a farm house overlooking our large farms then this is the region is for you. After your restful sleep the next morning you can pick your choice of recreation, hiking, bike riding, fishing, and many others. Come visit the

\_\_\_\_\_

region soon!



We have farms as far as you can see! Come take a tour of our many, many farms and leave with a free bag of our regions finest apples! Come visit the



\_\_\_\_\_

region soon!


Only in your region can you see our federal government in action. Also, they are using the latest new technology! If staying inside isn't your thing then you will love our beautiful outdoors, especially visiting our regions horse industry to see what a day in the life of a horse is like. Come visit the

\_\_\_\_\_

region soon!



Take a vacation and some see the newest ships our region has built. You will be amazed when you see how massive these new ships are. While you are here you also might like to tour one of our military bases. Come visit the



\_\_\_\_\_

region soon!





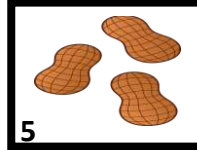

If you have ever wanted to know what a day in the life of a coal miner is like, then you have come to the right place. We have a portion of a coal mine shaft set up for guided tours! You even get to mine a little coal yourself to take home! Come visit the

\_\_\_\_\_

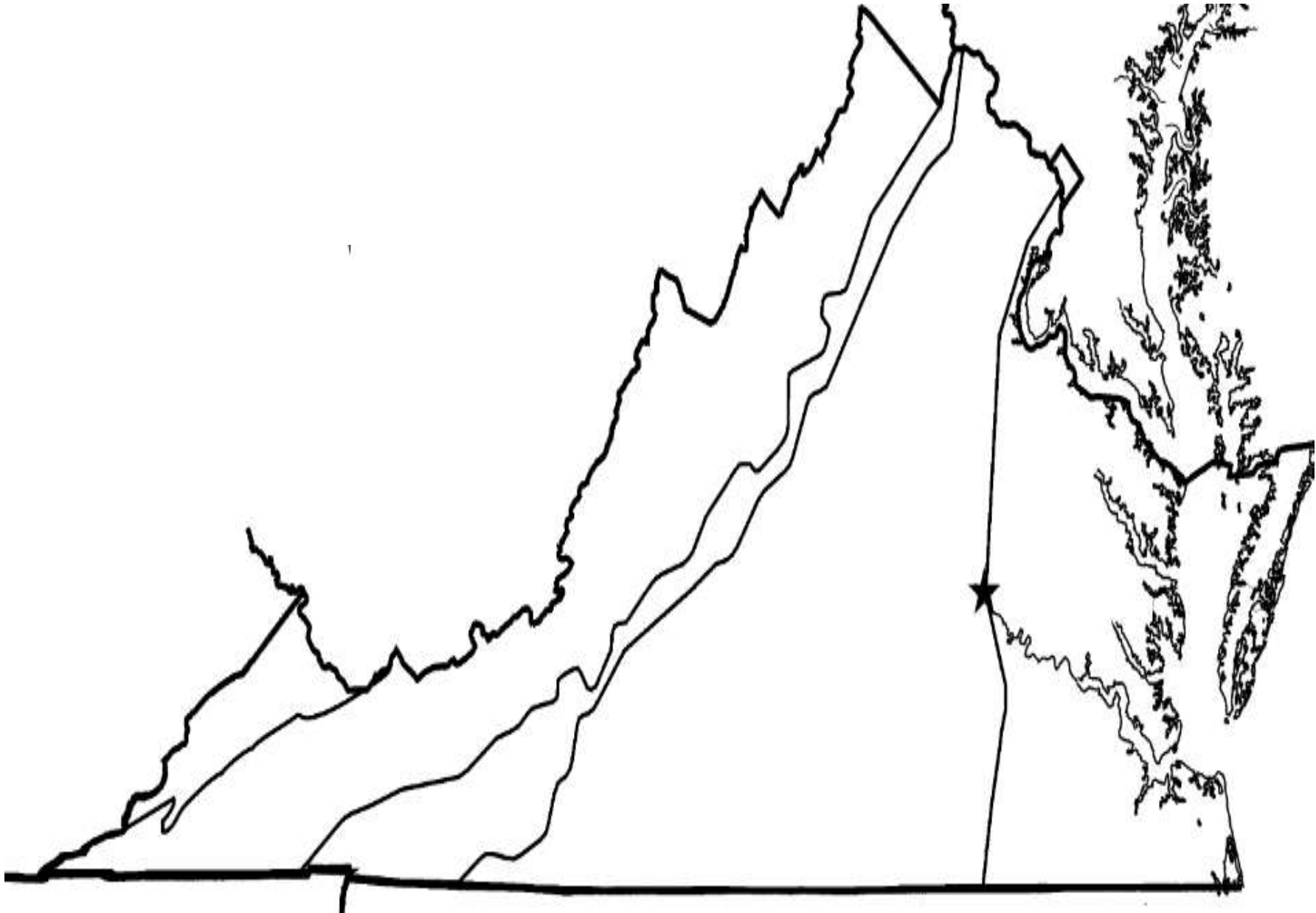
region soon!

Name: \_\_\_\_\_

Directions: Each region product has a number. Write the number 1-10 for each product in the correct region. You will use each number only 1 time.

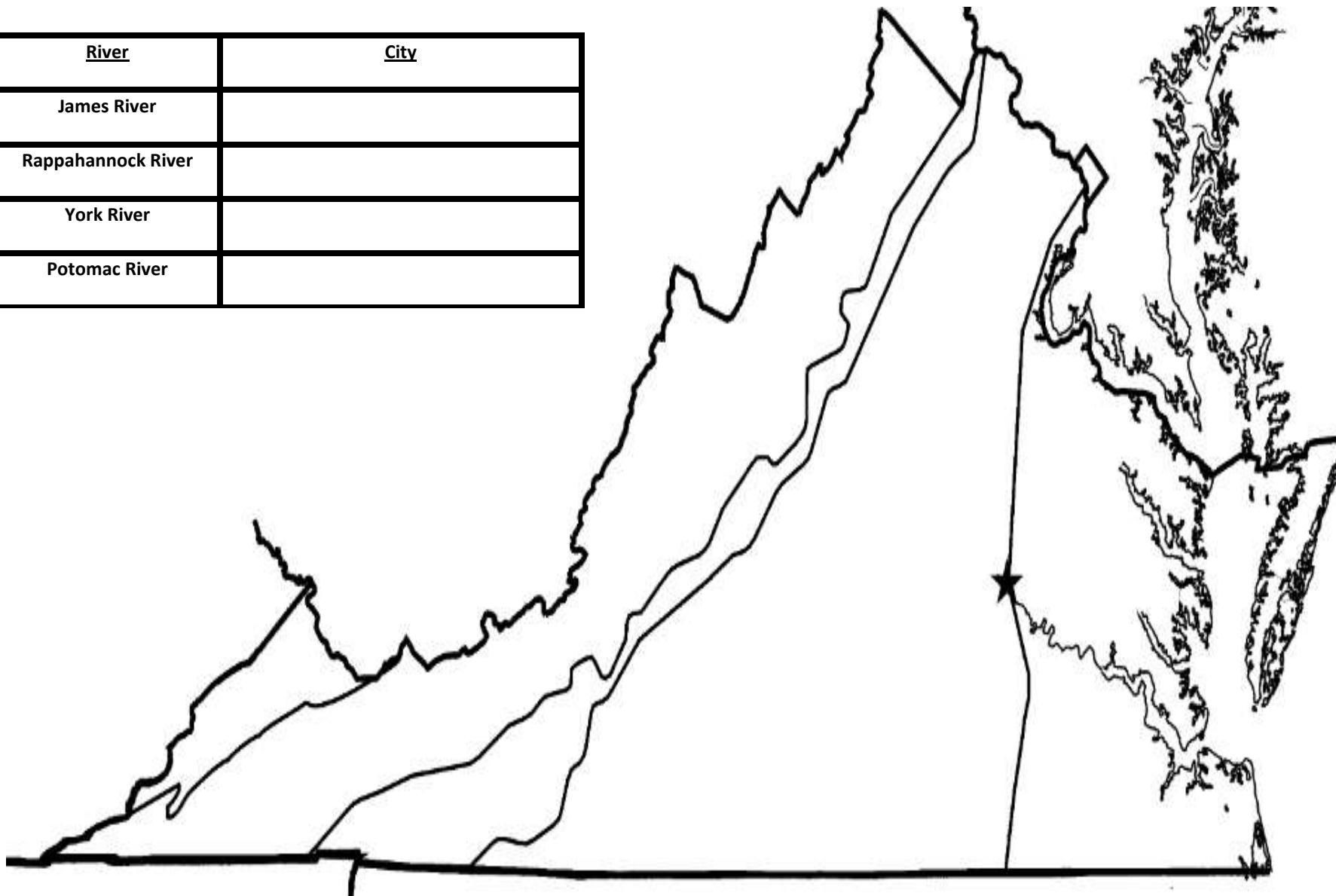


Directions: Label the five regions, the Eastern Shore, Atlantic Ocean, and Chesapeake Bay.



Directions: Label the Fall Line, the region that is a source of many rivers, James River, Rappahannock River, Potomac River, York River, then in the box write the city found along that river.

<u>River</u>	<u>City</u>
James River	
Rappahannock River	
York River	
Potomac River	



**Directions: In each box write either Jim Crow or Civil Rights as to which time period the situation is related to.**

**Laws were passed to  
make racial  
discrimination illegal**

**American Indians were  
also treated unfairly.**

**Schools closed to avoid  
integration**

**Signs hanging up above  
door ways that read  
“White entrance” and  
“Colored entrance”**

**African Americans are  
treated unfairly just  
because of their race.**

**There are separate and  
unequal facilities for the  
races such as restaurants,  
schools, water fountains.**

**Poll taxes  
Voting tests**

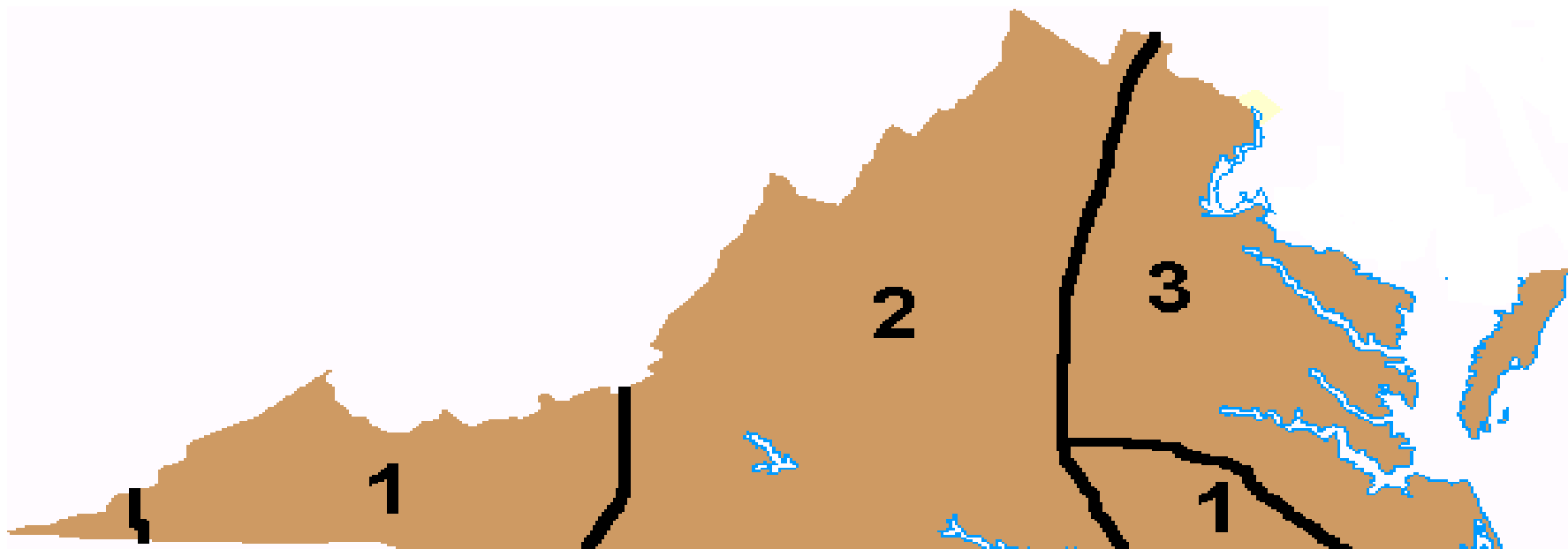
**Harry F Byrd  
Massive Resistance**

***Brown v. Board of  
Education***

**Children of all races go to  
the same school**

**Directions: Fill in the boxes based on the map below.**

	<u>Language</u>	<u>Tribe</u>
1		
2		
3		



**Directions: Label the continent, Draw an X on Virginia, label the five states that border Virginia.**



**1. What was the first permanent English settlement in America?**

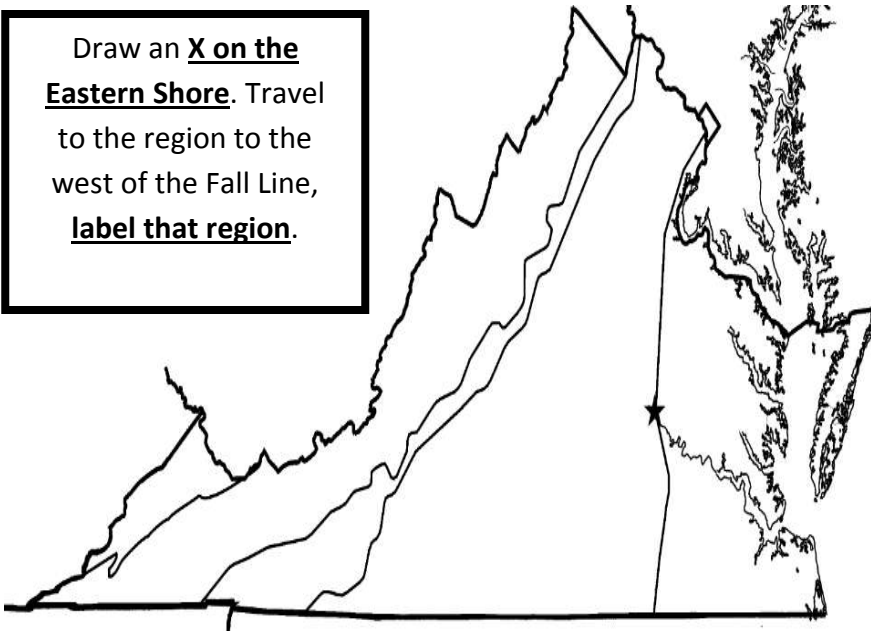
**2. When was it settled?**

**3. Why was it settled?**

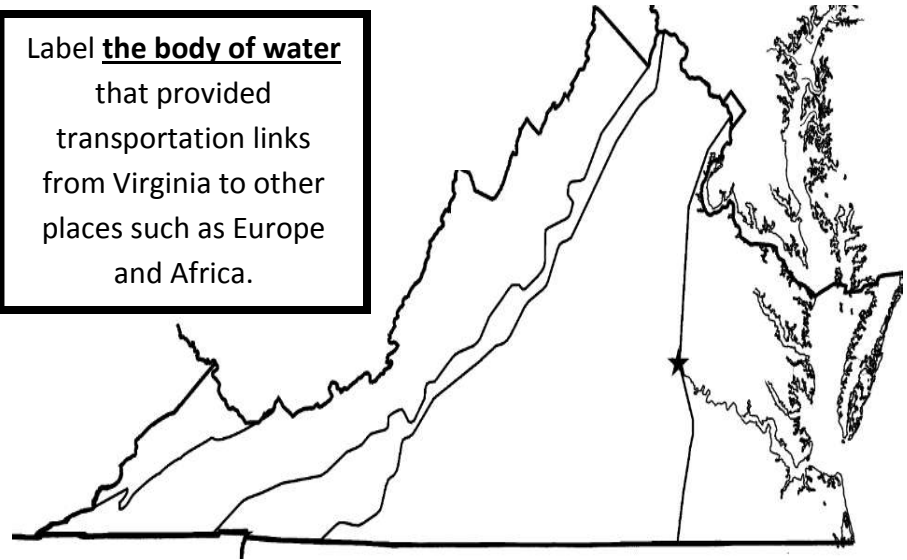
**4. Circle and label the ocean closest to Virginia.**



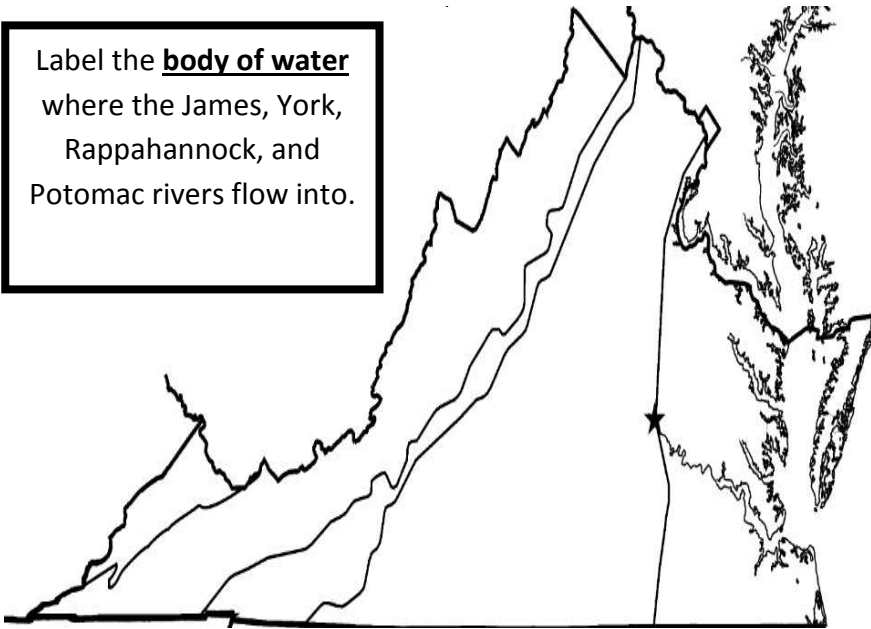
Draw an X on the Eastern Shore. Travel to the region to the west of the Fall Line, label that region.



Label the body of water that provided transportation links from Virginia to other places such as Europe and Africa.



Label the body of water where the James, York, Rappahannock, and Potomac rivers flow into.



Draw an X on the Appalachian Plateau. Leave the Appalachian Plateau, travel east past the Fall Line, label the region you are in now.

