

## Reilly Math Challenge #9



First Name: \_\_\_\_\_ Last name: \_\_\_\_\_

Grade: \_\_\_\_\_ Homeroom: \_\_\_\_\_ Teacher: \_\_\_\_\_

Please complete as many as you can.

We encourage families and friends to work together and have fun with Math!

Kindergarten & 1<sup>st</sup> grade: Complete **at least** 2.

2<sup>nd</sup> & 3<sup>rd</sup> grade: Complete **at least** 4.

4<sup>th</sup> & 5<sup>th</sup> grade: Complete **ALL** items.

1. Which letter appears most often in the sentence below, **t**, **r**, or **o**?

*November is National Peanut Butter Lover's Month!*



+



= 10



= 7



= ?

3. Complete the pattern.


6, 12, \_\_\_\_\_, \_\_\_\_\_, 30, \_\_\_\_\_, \_\_\_\_\_, \_\_\_\_\_, \_\_\_\_\_, \_\_\_\_\_











4. It takes 45 peanuts to make 1 ounce of peanut butter. If Manny used 5 ounces of peanut butter to make peanut butter & jelly sandwiches for him and his friends, how many peanuts were in the peanut butter he used?









5.

**mashupmath**

## Happy Peanut Butter Lovers Month!

 Use your math skills to find the value of each icon in the multiplication table below.

	<b>5</b>		<b>7</b>
		<b>36</b>	
<b>7</b>			
	<b>40</b>		

5. Use  $>$ ,  $<$ , or  $=$  to make the statement true.

3.5 kilograms of peanut butter

350 grams of peanut butter