



Add the three
numbers and
record the answer
on your recording
sheet.

32

45

62

1.

Add the three
numbers and
record the answer
on your recording
sheet.

54

21

76

2.

Add the three
numbers and
record the answer
on your recording
sheet.

38

41

88

3.

Add the three
numbers and
record the answer
on your recording
sheet.

69

22

40

4.

Add the three
numbers and
record the answer
on your recording
sheet.

71

25

97

5.

Add the three
numbers and
record the answer
on your recording
sheet.

32

42

93

6.

Add the three
numbers and
record the answer
on your recording
sheet.

20

85

67

7.

Add the three
numbers and
record the answer
on your recording
sheet.

33

54

81

8.

Add the three
numbers and
record the answer
on your recording
sheet.

13

84

66

9.

Add the three
numbers and
record the answer
on your recording
sheet.

28

97

30

10.

Add the three
numbers and
record the answer
on your recording
sheet.

19

88

24

11.

Add the three
numbers and
record the answer
on your recording
sheet.

55

79

63

12.

Name: _____



Write the equation and your answer in the box below



1.	2.	3.
4.	5.	6.
7.	8.	9.
10.	11.	12.

bas ket ball

di no saur

but ter fly

fla min go

compu **ter**

ast **ro** **naut**

la **dy** **bug**

cu **cumber**

hambur ger

hos pi tal

strawber ry

pine ap ple

1. A sport where
players score
by making
the ball into
the net.

2. An example
of this extinct
animal is a
T-Rex.

3. This insect
starts its life
cycle as a
tiny
caterpillar.

4. This brightly
colored bird is
often seen
standing on 1
foot.

5. This tool has
a keyboard
and a screen.

6. This person
blasts off into
space for
their job.

7. A red spotted
insect that is
usually seen
in the spring.

8. A green
vegetable
that is in
salads but is
not lettuce.

9.

A sandwich
that has a
grilled patty and
is served on a

bun.

10.

The place
an ambulance
will take hurt or
sick people.

11.

This is a
small red fruit
with tiny
seeds on the
outside.

12.

This fruit has
pointy leaves
on top with a
bright yellow
inside.

Name: _____

Write the three syllable words made from matching the cards.

1.

2.

3.

4.

5.

6.

7.

8.

9.

10.

11.

12.

Popcorn Withstands the Test of Time

Do you like to eat popcorn at the movies? People have been eating popcorn in movie theaters since the early 1900s.

However, popcorn is much older than the movies. In fact, it is one of the oldest snack foods in the world. People first started growing popcorn for food in Mexico over 8,000 years ago. They used the corn for flour to make tortillas and began popping the corn for tasty snack.

Over time, popcorn grew more and more popular. Popcorn used to take a long time to make. People made the snack at home in a kettle over a fire. This changed in 1885 when Charles Cretors invented the first popcorn machine. This amazing machine made popcorn much quicker. As a result, popcorn could be sold on the street at fairs and sporting events. People loved popcorn and couldn't get enough of it.


In 1981, microwave popcorn was invented and suddenly popcorn was everywhere. People began eating popcorn everywhere. Popcorn was one of the most popular snacks in movie theaters in the 1930s. The love of popcorn was again. Today, people in the United States eat more popcorn than any other country. Popcorn comes in all kinds of flavors now; even cupcake flavor! The most common flavor of popcorn is butter. Popcorn has withstood the test of time and continues to be a popular snack.




Cracker Jacks were invented in 1890 and began a popular snack at baseball games.

Name: _____


Read the passage. Find the main idea and THREE key details.




Main Idea



Detail 1




Detail 2



Detail 3


1.




2.




3.



4.




5.




6.




7.




8.




9.




10



11



12



Name: _____

Write the value of the underlined number and then write the three-digit number in expanded form.

1. value of 6 _____ expanded form _____	2. value of 4 _____ expanded form _____	3. value of 7 _____ expanded form _____
4. value of 7 _____ expanded form _____	5. value of 4 _____ expanded form _____	6. value of 2 _____ expanded form _____
7. value of 5 _____ expanded form _____	8. value of 7 _____ expanded form _____	9. value of 6 _____ expanded form _____
10. value of 4 _____ expanded form _____	11. value of 3 _____ expanded form _____	12. value of 3 _____ expanded form _____