

# Organic Chemistry (1.1-1.4) #3

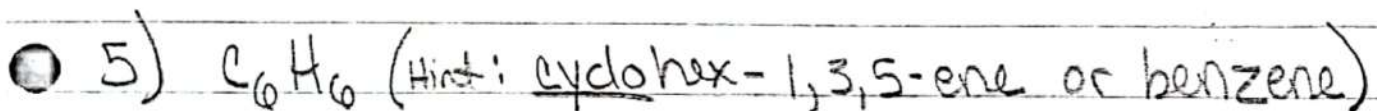

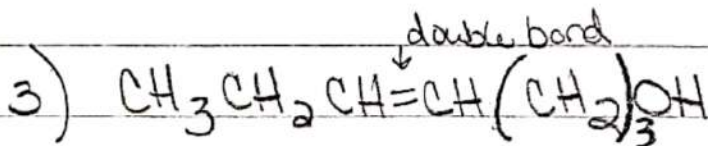
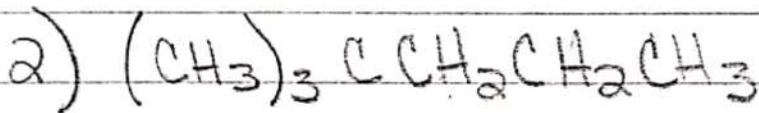
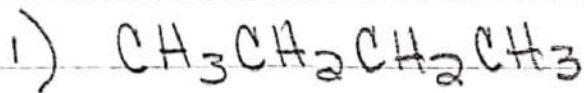
Structural Formulas & Bond-angle drawings

Name: \_\_\_\_\_

Date: \_\_\_\_\_

pd: \_\_\_\_\_

Draw the Lewis structures from the structural formulas, then the Bond-angle drawing.



2#

- ① Draw the Lewis structure (include lone pairs!)  
② write the structural formula ③ write the molecular formula

