

## Latitude/Longitude

Use pages 588 and 589, in the Geography Alive Textbook, to complete the following.

1. What country is found at 20° N, 80° E? \_\_\_\_\_
2. What country is found at 1° S, 115° E? \_\_\_\_\_
3. What city is found at 37° N, 126° E? \_\_\_\_\_
4. What water feature is found at 27° N, 80° E? \_\_\_\_\_
5. What land feature is found at 43° N, 110° E? \_\_\_\_\_

## What Feature?

Country



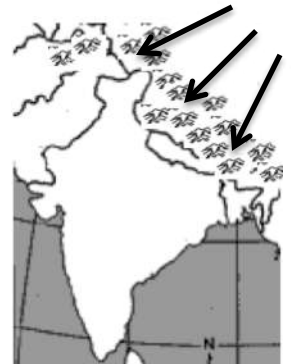
Country



Water feature



Land feature



Country



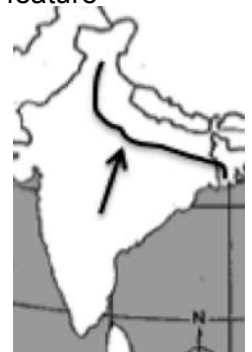
City



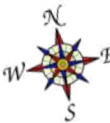
Country



Water feature



## What Direction?



Use a compass rose to determine which direction you would travel. (Ex: North, Southwest, etc.) Use pgs. 588-589 in Geography Alive.

Hong Kong to Beijing \_\_\_\_\_

North Korea to Sri Lanka \_\_\_\_\_

Mumbai to Japan \_\_\_\_\_

Mount Everest to Indonesia \_\_\_\_\_

Seoul to Manila \_\_\_\_\_

Himalayans to Yangtze River \_\_\_\_\_

## Monsoon Asia Mapping Lab

Use pages 588-593, in **Geography Alive**, to answer the following questions.

\_\_\_\_\_ 1. One country in Monsoon Asia has all of these *climate zones*: highlands, humid subtropical, semiarid, arid, tropical wet and dry, and tropical wet. What is the country?

- A. Thailand
- B. South Korea
- C. India
- D. Nepal

**\*\*Map(s) Used: Climate Zones, Economic, Physical Features, Pop. Density, Vegetation**

\_\_\_\_\_ 2. Mount Everest is located on the border of which two countries?

- A. Nepal and China
- B. Nepal and India
- C. China and India
- D. Bhutan and China

**\*\*Map(s) Used: Climate Zones, Economic, Physical Features, Pop. Density, Vegetation**

\_\_\_\_\_ 3. Which city of over 8 million people is located on the Ganges River?

- A. Delhi
- B. Patna
- C. Calcutta
- D. Shanghai

**\*\*Map(s) Used: Climate Zones, Economic, Physical Features, Pop. Density, Vegetation**

\_\_\_\_\_ 4. Which of the following types of vegetation is most common on the islands of Southeast Asia?

- A. temperate grassland
- B. tropical grassland
- C. coniferous forest
- D. broadleaf evergreen forest

**\*\*Map(s) Used: Climate Zones, Economic, Physical Features, Pop. Density, Vegetation**

\_\_\_\_\_ 5. Which country in Monsoon Asia has the following features:

- Lies entirely **south** of the Tropic of Cancer.
- Has these **resources**- coal, hydroelectric power, natural gas, and petroleum.
- Does **NOT** have precious metals.

- A. Cambodia
- B. Bangladesh
- C. Philippines
- D. Thailand

**\*\*Map(s) Used: Climate Zones, Economic, Physical Features, Pop. Density, Vegetation**



\_\_\_\_\_ 6. You are a writer for a Travel Book company. For your latest book, you write the following:

- The **climate** is pleasant, not too dry nor too wet, like some parts of Monsoon Asia.
- The capital city of **over 8 million people** offers shopping, museums, and entertainment.
- There are **different types of forests** to enjoy.
- You include a map of **islands** that make up this country.

Which country in Monsoon Asia is your latest book about?

- A. India
- B. Japan
- C. Sri Lanka
- D. China

**\*\*Map(s) Used: Climate Zones, Economic, Physical Features, Pop. Density, Vegetation**