
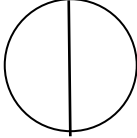
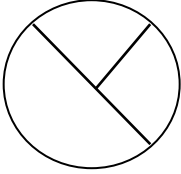


Name _____

Module 5 Topic C Quiz

1. Are the shapes divided into equal parts? Write **Y** for yes or **N** for no. If the shape has equal parts, write how many equal parts on the line. The first one has been done for you.

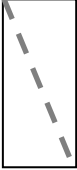

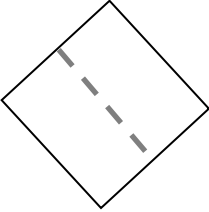
<p>a.</p>  _____	<p>b.</p>  _____	<p>c.</p>  _____
--	--	--

2. Draw 2 lines to make 4 equal parts. What smaller shapes did you make?

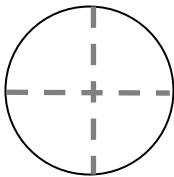
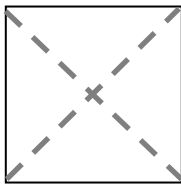
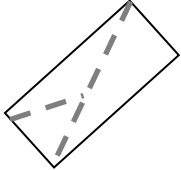


I made 4 _____.

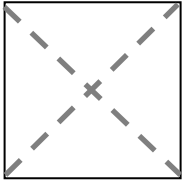
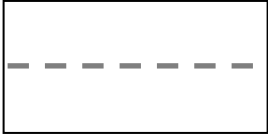
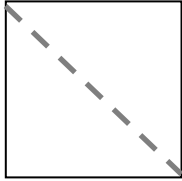
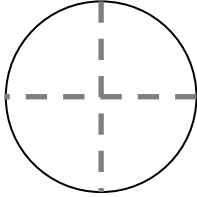
3. Are the shapes divided into halves? Write yes or no.

<p>a.</p>  _____	<p>b.</p>  _____	<p>c.</p>  _____
--	--	--

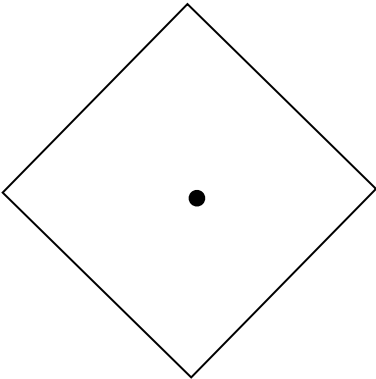
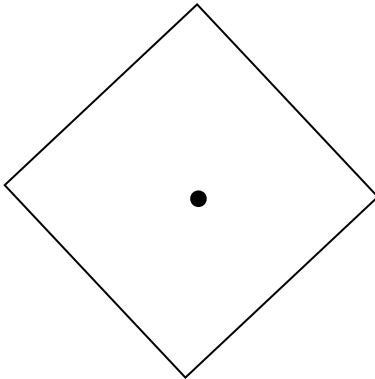
4. Are the shapes divided into quarters? Write yes or no.

<p>a.</p>  _____	<p>b.</p>  _____	<p>c.</p>  _____
--	--	--

5.

<p>Color 1 fourth of this square.</p> 	<p>Color half of this rectangle.</p> 
<p>Color half of this square.</p> 	<p>Color a quarter of this circle.</p> 

6. Color part of the shape to match its label. Circle the phrase that would make the statement true.

<p>One quarter of the square</p> 	<p>is bigger than</p> <p>is smaller than</p> <p>is the same size as</p>	<p>one half of the square.</p> 
--	---	--