


Name: \_\_\_\_\_

Total Points:

\_\_\_\_\_/30

For each pair, write the number of items in each set. (4 points)  
Then circle the correct picture. (6 points)

1. Circle the set with the greater number of items.



\_\_\_\_\_



\_\_\_\_\_

2. Circle the set with the fewer number of items.



\_\_\_\_\_



\_\_\_\_\_

Circle the number that is greater.  
(1 point)

3. 3 tens 4 ones      25 ones

Circle the number that is less.  
(1 point)

4. 12      19

Circle the set of coins that have the greater value. (1 point)

5.



4 dimes



4 pennies

Circle the set of coins that has less value. (1 point)

6.



3 dimes, 1 penny



3 pennies, 1 dime

Name: \_\_\_\_\_ 2

**7. Circle the amount that is more. Draw to show how you know. (2 points)**

25	32

**Draw quick tens and ones to show each number.  
Write a phrase from the box to compare the numbers.  
(6 points)**

is greater than is less than is equal to
--

<p>8.</p> <table style="width: 100%;"><tr><td style="text-align: center;">23</td><td style="text-align: center;">17</td></tr><tr><td colspan="2" style="height: 100px;"></td></tr><tr><td>23 _____</td><td>17 _____</td></tr></table>	23	17			23 _____	17 _____	<p>9.</p> <table style="width: 100%;"><tr><td style="text-align: center;">26</td><td style="text-align: center;">34</td></tr><tr><td colspan="2" style="height: 100px;"></td></tr><tr><td>26 _____</td><td>34 _____</td></tr></table>	26	34			26 _____	34 _____
23	17												
23 _____	17 _____												
26	34												
26 _____	34 _____												

**Write a phrase from the box to compare the numbers. (3 points)**

10. 46 \_\_\_\_\_ 4 tens 6 ones
11. 2 tens 7 ones \_\_\_\_\_ 7 tens 2 ones
12. 5 tens 2 ones \_\_\_\_\_ 15

is greater than is less than is equal to
--

**13. Put the following numbers in order from least to greatest. (1 point)**

8, 32, 24, 49, 15
-------------------

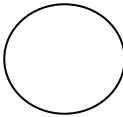
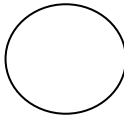

\_\_\_\_\_, \_\_\_\_\_, \_\_\_\_\_, \_\_\_\_\_, \_\_\_\_\_

**14. Put the following numbers in order from greatest to least. (1 point)**

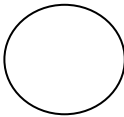
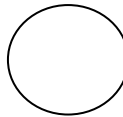
8, 32, 24, 49, 15
-------------------

\_\_\_\_\_, \_\_\_\_\_, \_\_\_\_\_, \_\_\_\_\_, \_\_\_\_\_

**Fill in the circles using the symbols  $>$ ,  $<$ , or  $=$  to make true number sentences. (3 points)**

15.  27  17	16.  12  18	17.  42  45
--	--	--

**Circle the correct words to make the sentence true. Use  $>$ ,  $<$ , or  $=$  and numbers to write a true number sentence. (4 points)**

18.  31 <table border="1" data-bbox="248 1144 540 1299"><tr><td>is greater than</td></tr><tr><td>is less than</td></tr><tr><td>is equal to</td></tr></table> 1 ten 3 ones  _____  _____	is greater than	is less than	is equal to	19.  4 tens 2 ones <table border="1" data-bbox="1065 1144 1357 1299"><tr><td>is greater than</td></tr><tr><td>is less than</td></tr><tr><td>is equal to</td></tr></table> 42 ones  _____  _____	is greater than	is less than	is equal to
is greater than							
is less than							
is equal to							
is greater than							
is less than							
is equal to							

## Teacher Scoring Guide

## Teacher Information:

- This evaluation is to be administered after all parts of Lesson 10 have been sufficiently completed and students exhibit understanding through formative assessments.
- All items should be read aloud to students.
- The total point value of this evaluation is 30. On page 1 of the student evaluation, there is a space provided for the total points earned.

Item #	Point Value
1	3 points - 1 point per number, 1 point for circling correctly
2	3 points - 1 point per number, 1 point for circling correctly
3	1 point for correct answer
4	1 point for correct answer
5	1 point for correct answer
6	1 point for correct answer
7	2 points - 1 point for correct answer, 1 point for drawing
8	3 points - 2 points for drawing each number, 1 point for correct answer
9	3 points - 2 points for drawing each number, 1 point for correct answer
10	1 point for correct answer
11	1 point for correct answer
12	1 point for correct answer
13	1 point for correct answer
14	1 point for correct answer
15	1 point for correct answer
16	1 point for correct answer
17	1 point for correct answer
18	2 points - 1 point for correct answer, 1 point for number sentence
19	2 points - 1 point for correct answer, 1 point for number sentence