



Name _____

Date _____


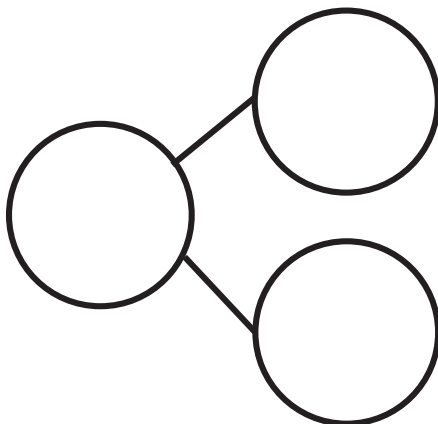
Cross off the part that goes away. Fill in the number bond and number sentence.

Jeremy had 9 baseballs. He took 5 baseballs outside to play, and they got lost. How many balls are left?



$$\underline{\quad\quad\quad} - \underline{\quad\quad\quad} = \underline{\quad\quad\quad}$$


Sandy had 9 leaves. Then, 4 leaves blew away. How many leaves are left?



$$\underline{\quad\quad\quad} - \underline{\quad\quad\quad} = \underline{\quad\quad\quad}$$

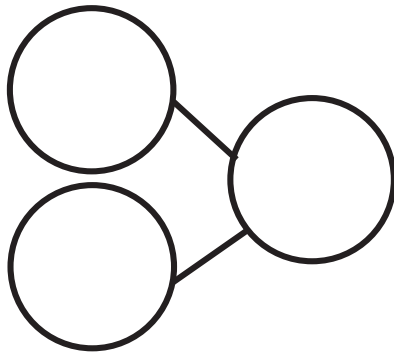
Make a 5-group drawing to show the story. Cross off the part that goes away. Fill in the number bond and number sentence.

Ryder had 9 star stickers. He gave 3 to his friend. How many star stickers does Ryder have now?



$$\underline{\quad\quad} - \underline{\quad\quad} = \underline{\quad\quad}$$

Jen had 9 granola bars. She gave 8 of the granola bars to her teammates. How many granola bars does she have left?



$$\underline{\quad\quad} - \underline{\quad\quad} = \underline{\quad\quad}$$

Subtract.

$2 - 1 = \boxed{\quad}$

$3 - 2 = \boxed{\quad}$

$4 - 3 = \boxed{\quad}$



$5 - 4 = \boxed{\quad}$

Name _____

Date _____



Cross off the part that goes away. Fill in the number bond and number sentence.

Mary had 9 library books. She returned 1 book to the library. How many books are left?



$$\underline{\quad\quad\quad} - \underline{\quad\quad\quad} = \underline{\quad\quad\quad}$$

There were 9 lunch bags. 3 bags were thrown away. How many bags are there now?



$$\underline{\quad\quad\quad} - \underline{\quad\quad\quad} = \underline{\quad\quad\quad}$$