

Name \_\_\_\_\_


Date \_\_\_\_\_

Fill in the number sentences and number bonds.

There are 9 babies playing. 2 crawl away. How many babies are left?



$$9 - 2 = \underline{\quad}$$




There are 10 babies playing. 1 crawls away. How many babies are left?




$$\underline{10} - \underline{\quad} = \underline{\quad}$$

There are 9 babies playing. 6 crawl away. How many babies are left?



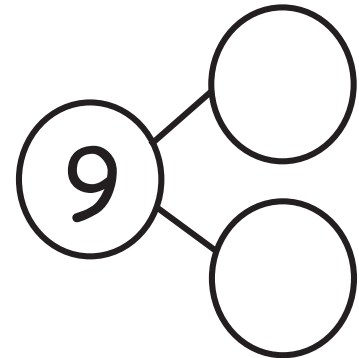
$$\underline{\quad} - \underline{\quad} = \underline{\quad}$$



The squares below represent cube sticks.

Carlos had a 9-stick. He broke off 4 cubes to share with his friend.


How many cubes are left? Draw a line to show where he broke his stick.



$$\underline{\quad\quad} - \underline{\quad\quad} = \underline{\quad\quad}$$

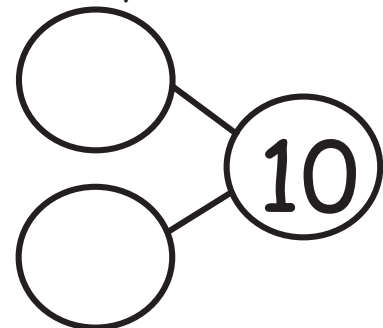
Sophie had 10 grapes. She ate 6 grapes. How many grapes are left?

Draw her grapes, and cross off the ones she ate.



$$\underline{\quad\quad} - \underline{\quad\quad} = \underline{\quad\quad}$$

Spot had 10 bones. He hid 8 bones in the ground. How many bones does he have now? Draw Spot's bones.




$$\underline{\quad\quad} - \underline{\quad\quad} = \underline{\quad\quad}$$

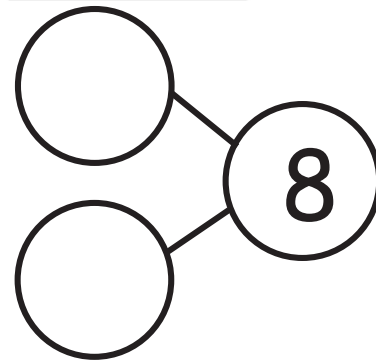
Name \_\_\_\_\_

Date \_\_\_\_\_

There were 8 penguins. 2 penguins went back to the ship. Cross out 2 penguins. Fill in the number sentence and the number bond.



$$8 - 2 = \underline{\quad}$$

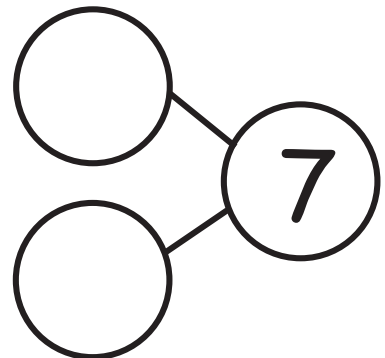


The squares below represent cubes.


Count the cubes. Draw a line to break 4 cubes off the train. Fill in the number sentence and the number bond.



$$\underline{\quad} - \underline{\quad} = \underline{\quad}$$



There are 10 bears. Some go inside the cave to hide. Cross them out. Complete the number sentence.



$$\underline{10} - \underline{\quad} = \underline{\quad}$$

Complete these number sentences.

$$5 - 1 = \square$$

$$\square = 2 + 3$$

$$\square = 5 - 4$$

$$2 + 2 = \square$$

Complete these number sentences.

$$3 - 1 = \square$$

$$\square = 1 + 3$$

$$\square = 4 - 2$$

$$1 + 2 = \square$$