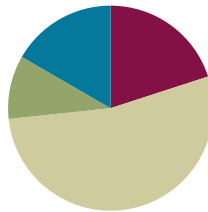


Lesson 11

Objective: Use square tiles to compose a rectangle, and relate to the array model.

Suggested Lesson Structure

■ Fluency Practice	(12 minutes)
■ Application Problem	(6 minutes)
■ Concept Development	(32 minutes)
■ Student Debrief	(10 minutes)
Total Time	(60 minutes)



Fluency Practice (12 minutes)

- Happy Counting by Tens: Crossing 100 **2.NBT.2** (3 minutes)
- Sprint: Subtraction Crossing Ten **2.OA.2** (9 minutes)

Happy Counting by Tens: Crossing 100 (3 minutes)

Note: Students skip-count by tens as a review of counting equal groups.

- T: Let's count by tens, starting at 360. Ready? (Point up rhythmically until a change is desired. Close hand to stop. Point down to count in the opposite direction.)
- S: 360, 370, 380, 390, 400, 410, 420, 430, 440 (switch) 430, 420, 410, 400, 390 (switch) 400, 410, 420, 430, 440, 450, 460, 470, 480, 490, 500, 510, 520 (switch) 510, 500, 490, 480.
- T: Excellent! Try it for 30 seconds with your partner, starting at 440. Partner B, you are the teacher today.

Sprint: Subtraction Crossing Ten (9 minutes)

Materials: (S) Subtraction Crossing Ten Sprint

Note: Students subtract a single-digit number from a teen number and continue the subtraction pattern when subtracting from multiples of ten and some ones.

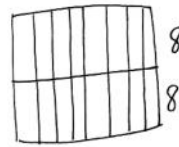
Application Problem (6 minutes)

Ty bakes two pans of brownies. In the first pan, he cuts 2 rows of 8. In the second pan, he cuts 4 rows of 4.

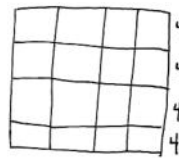
MP.3

- Draw a picture of Ty's brownie pans.
- Write a repeated addition equation to show the total number of brownies in each pan.
- How many brownies did Ty bake altogether? Write an equation and a statement to show your answer.

Note: This Application Problem gives students another real world context for seeing arrays. While sharing student work samples, encourage them to see the rectangular shape of the rows and columns.



$$8 + 8 = 16$$



$$4 + 4 + 4 + 4 = 16$$

$$\begin{array}{r} 16 + 16 \\ \quad \wedge \\ \quad 4 \quad 12 \\ 20 + 12 = 32 \end{array}$$

Ty made 32 brownies altogether.

Concept Development (32 minutes)

Materials: (T) 5 red 1-inch tiles, 5 green 1-inch tiles (S) 25 1-inch tiles, personal white board

Assign Partners A and B, and call students to sit in a circle at the front of the room.

Part 1: Compose rectangles from one row of tiles, and write addition sentences to match.

T: (Show a row of 10 tiles made with two colors as pictured.)

T: How many rows do you see?

S: 1 row.

T: How many tiles are in the row?

S: 10 tiles.

T: Did I make a rectangle with my tiles?

S: Yes. It's long and skinny!

T: It is also an array. Tell me about its rows and columns.

S: It has 1 row of 10. → Yes, you could say 10 columns of 1.


T: Turn and talk: How can we arrange these 10 tiles in a different way to form another rectangle?

S: Move the green tiles so they are under the red tiles. → I know I can count by 2s to 10, so you can make columns of 2 instead of columns of 1. → You can break the row apart, so there are 2 rows of 5.


T: Let's try that. (Move the green tiles to show 2 rows of 5 as pictured.)

T: Now how many rows do you see?

S: 2 rows!



- T: How many tiles are in each row?
- S: 5 tiles!
- T: How many columns do you see?
- S: 5 columns!
- T: How many tiles are in each column?
- S: 2 tiles!
- T: Turn and talk: What repeated addition equations can we make to represent either the columns or rows of this rectangle?
- S: $5 + 5 = 10$. $\rightarrow 2 + 2 + 2 + 2 + 2 = 10$.
- T: Now, make a row of 14 tiles on your personal white board.
- S: (Create a row.)
- T: Now, rearrange the tiles to make another array.
- S: (Make arrays.)
- T: How did you arrange the tiles to make the arrays?
- S: I broke the row into 2 rows and slid one under the other. \rightarrow I made 2 rows of 7 since $7 + 7$ is 14. \rightarrow It's like the last rectangle; I used the doubles fact to make 2 rows of 7, which makes 14.
- T: Add an equation underneath your rectangle.
- T: What equation did you write?
- S: I made columns of two. $2 + 2 + 2 + 2 + 2 + 2 + 2 = 14$. \rightarrow I broke the rectangle in half like we did with 10. \rightarrow I moved half the array to the bottom row, so I have $7 + 7 = 14$.



$$7 + 7 = 14$$

Repeat the above process with 16 tiles.

Part 2: Compose varied rectangles from a given number of tiles.

- T: Turn and talk: Is there another rectangle we can make using the same 16 tiles?
- S: We can break it in half again and make 4 rows of 4. \rightarrow We can make a square like we did yesterday.
- T: Partner A, with the help of Partner B, make a new array.
- T: Turn and talk: How are your arrays similar, and how are they different?
- S: They both have 16 tiles. \rightarrow One has the same number of rows and columns, and the other doesn't. \rightarrow You can turn an array with 4 rows of 4 on its side, and it looks exactly the same. You can't do that with 2 rows of 8.
- T: Now, each partner count out 12 tiles, and arrange them in a row.
- T: With your partner, construct two different rectangles using 12 tiles each. Write repeated addition equations below each rectangle. As you work, talk and compare your rectangles.



**NOTES ON
MULTIPLE MEANS
OF ENGAGEMENT:**

Encourage students to play games that involve arrays, such as Memory and Tic-Tac-Toe. This can also be a good home connection for families to connect with what students are learning in school.

- T: (Circulate as students create their rectangles and write their equations.)
- S: We can make one array that has 2 rows of 6 because we can break the row in half like we did before.
 → Let's try making a rectangle that has more than 2 rows. Hey, we can make 3 groups of 4 or 4 groups of 3. → We can make an array that has 3 rows of 4 because $4 + 4 + 4 = 12$.
- T: How are your rectangles similar, and how are they different? Discuss with your partner.
- S: They both have 12 tiles total. → My array has columns of 2, and yours has columns of 3. → Mine is 2 rows of 6, and yours is 3 rows of 4. → They are all rectangles.

Problem Set (10 minutes)

Students should do their personal best to complete the Problem Set within the allotted 10 minutes. For some classes, it may be appropriate to modify the assignment by specifying which problems they work on first. Some problems do not specify a method for solving. Students should solve these problems using the RDW approach used for Application Problems.

Student Debrief (10 minutes)

Lesson Objective: Use square tiles to compose a rectangle, and relate to the array model.

The Student Debrief is intended to invite reflection and active processing of the total lesson experience.

Invite students to review their solutions for the Problem Set. They should check work by comparing answers with a partner before going over answers as a class. Look for misconceptions or misunderstandings that can be addressed in the Debrief. Guide students in a conversation to debrief the Problem Set and process the lesson.

Any combination of the questions below may be used to lead the discussion.

- Can we call the arrangement in Problem 1(a) an array? How can you describe it in terms of both rows and columns?
- For Problem 1, how is knowing how to make equal groups helpful in constructing a rectangle with 8 tiles? Explain how your equation matches your array.
- What strategy did you use in Problem 2 to construct a rectangle with 12 tiles? How are your two rectangles different? How are they the same? How did your rows and columns change when you rearranged your tiles to create a new rectangle for Problem 3?

NYS COMMON CORE MATHEMATICS CURRICULUM Lesson 11 Problem Set 2•6

Name Roberto Date _____

Use your square tiles to construct the following arrays with no gaps or overlaps. Write a repeated addition equation to match each construction.

- a. Place 8 square tiles in a row.

b. Construct an array with the 8 square tiles.

c. Write a repeated addition equation to match the new array.

$2 + 2 + 2 + 2 = 8$
- a. Construct an array with 12 squares.

b. Write a repeated addition equation to match the array.

$4 + 4 + 4 = 12$

c. Rearrange the 12 squares into a different array.

d. Write a repeated addition equation to match the new array.

$6 + 6 = 12$

COMMON CORE Lesson 11: Use square tiles to compose a rectangle, and relate to the array model. engage^{ny} 6.C.23

© 2015 Great Minds. eureka-math.org
 This work is licensed under a Creative Commons Attribution-NonCommercial-ShareAlike 3.0 Unported License.

- For Problem 4, explain how you know that $3 + 3 = 2 + 2 + 2$.
- You constructed two rectangles with 10 tiles for Problem 5. Is it possible to do the same with 11 tiles? Why not?

Exit Ticket (3 minutes)

After the Student Debrief, instruct students to complete the Exit Ticket. A review of their work will help with assessing students' understanding of the concepts that were presented in today's lesson and planning more effectively for future lessons. The questions may be read aloud to the students.

NYS COMMON CORE MATHEMATICS CURRICULUM Lesson 11 Problem Set 2•6

3.

- Construct an array with 20 squares.
- Write a repeated addition equation to match the array.
 $10 + 10 = 20$
- Rearrange the 20 squares into a different array.
- Write a repeated addition equation to match the new array.
 $5 + 5 + 5 + 5 = 20$

4. Construct 2 arrays with 6 squares.

- 2 rows of 3 = 6
- 3 rows of 2 = 2 rows of 3

5. Construct 2 arrays with 10 squares.

- 2 rows of 5 = 10
- 5 rows of 2 = 2 rows of 5

COMMON CORE Lesson 11: Use square tiles to compose a rectangle, and relate to the array model. engage^{ny} 6.C.2.6
Date: 9/5/14
© 2015 Great Minds. eureka-math.org
This work is licensed under a Creative Commons Attribution-NonCommercial-ShareAlike 3.0 Unported License.

A

Number Correct: _____

Subtraction Crossing Ten

1.	$10 - 5 =$	
2.	$20 - 5 =$	
3.	$30 - 5 =$	
4.	$10 - 2 =$	
5.	$20 - 2 =$	
6.	$30 - 2 =$	
7.	$11 - 2 =$	
8.	$21 - 2 =$	
9.	$31 - 2 =$	
10.	$10 - 8 =$	
11.	$11 - 8 =$	
12.	$21 - 8 =$	
13.	$31 - 8 =$	
14.	$14 - 5 =$	
15.	$24 - 5 =$	
16.	$34 - 5 =$	
17.	$15 - 6 =$	
18.	$25 - 6 =$	
19.	$35 - 6 =$	
20.	$10 - 7 =$	
21.	$20 - 8 =$	
22.	$30 - 9 =$	

23.	$14 - 6 =$	
24.	$24 - 6 =$	
25.	$34 - 6 =$	
26.	$15 - 7 =$	
27.	$25 - 7 =$	
28.	$35 - 7 =$	
29.	$11 - 4 =$	
30.	$21 - 4 =$	
31.	$31 - 4 =$	
32.	$12 - 6 =$	
33.	$22 - 6 =$	
34.	$32 - 6 =$	
35.	$21 - 6 =$	
36.	$31 - 6 =$	
37.	$12 - 8 =$	
38.	$32 - 8 =$	
39.	$21 - 8 =$	
40.	$31 - 8 =$	
41.	$28 - 9 =$	
42.	$27 - 8 =$	
43.	$38 - 9 =$	
44.	$37 - 8 =$	

B

Subtraction Crossing Ten

Number Correct: _____

Improvement: _____

1.	$10 - 1 =$	
2.	$20 - 1 =$	
3.	$30 - 1 =$	
4.	$10 - 3 =$	
5.	$20 - 3 =$	
6.	$30 - 3 =$	
7.	$12 - 3 =$	
8.	$22 - 3 =$	
9.	$32 - 3 =$	
10.	$10 - 9 =$	
11.	$11 - 9 =$	
12.	$21 - 9 =$	
13.	$31 - 9 =$	
14.	$13 - 4 =$	
15.	$23 - 4 =$	
16.	$33 - 4 =$	
17.	$16 - 7 =$	
18.	$26 - 7 =$	
19.	$36 - 7 =$	
20.	$10 - 6 =$	
21.	$20 - 7 =$	
22.	$30 - 8 =$	

23.	$13 - 5 =$	
24.	$23 - 5 =$	
25.	$33 - 5 =$	
26.	$16 - 8 =$	
27.	$26 - 8 =$	
28.	$36 - 8 =$	
29.	$12 - 5 =$	
30.	$22 - 5 =$	
31.	$32 - 5 =$	
32.	$11 - 5 =$	
33.	$21 - 5 =$	
34.	$31 - 5 =$	
35.	$12 - 7 =$	
36.	$22 - 7 =$	
37.	$11 - 7 =$	
38.	$31 - 7 =$	
39.	$22 - 9 =$	
40.	$32 - 9 =$	
41.	$38 - 9 =$	
42.	$37 - 8 =$	
43.	$28 - 9 =$	
44.	$27 - 8 =$	

Name _____

Date _____

Use your square tiles to construct the following arrays with no gaps or overlaps. Write a repeated addition equation to match each construction.

1. a. Place 8 square tiles in a row.

b. Construct an array with the 8 square tiles.

c. Write a repeated addition equation to match the new array.

2. a. Construct an array with 12 squares.

a. Write a repeated addition equation to match the array.

c. Rearrange the 12 squares into a different array.

d. Write a repeated addition equation to match the new array.

3. a. Construct an array with 20 squares.

b. Write a repeated addition equation to match the array.

c. Rearrange the 20 squares into a different array.

d. Write a repeated addition equation to match the new array.

4. Construct 2 arrays with 6 squares.

a. 2 rows of _____ = _____

b. 3 rows of _____ = 2 rows of _____

5. Construct 2 arrays with 10 squares.

a. 2 rows of _____ = _____

b. 5 rows of _____ = 2 rows of _____

Name _____

Date _____

a. Construct an array with 12 square tiles.

b. Write a repeated addition equation to match the array.

Name _____


Date _____

1. a. Construct an array with 9 square tiles.
b. Write a repeated addition equation to match the array.

2. a. Construct an array with 10 square tiles.
b. Write a repeated addition equation to match the array.

- c. Rearrange the 10 square tiles into a different array.
d. Write a repeated addition equation to match the new array.

Cut out each square tile. Use the tiles to construct the arrays in Problems 1-4.



3. a. Construct an array with 12 square tiles.
b. Write a repeated addition equation to match the array.

- c. Rearrange the 12 square tiles into a different array.
d. Write a repeated addition equation to match the new array.

4. Construct 2 arrays with 14 square tiles.
a. 2 rows of _____ = _____
b. 2 rows of _____ = 7 rows of _____