

Echo Lake_Hamilton_Benchmark Review 2_Quiz
Exam not valid for Paper Pencil Test Sessions

- 1 Directions: Click on each number you want to select. You must select all correct numbers.

Identify the numbers that would round to 453,000 if rounded to the nearest thousand.


451,428	452,591
453,762	453,445
453,236	466,903
452,687	469,354

- 2 **Lynn rounded 42,865 to 43,000. To which place did Lynn round the number?**
A Tens B Hundreds C Thousands D Ten thousands
- 3 **How is 6.015 written in words?**
A Six and fifteen hundredths
B Six and one hundred fifty thousandths
C Six and five thousandths
D Six and fifteen thousandths
- 4 **What is 4.372 rounded to the nearest tenth?**
A 4.37
B 4.3
C 4.38
D 4.4

- 5 This model is shaded to show 1 whole.

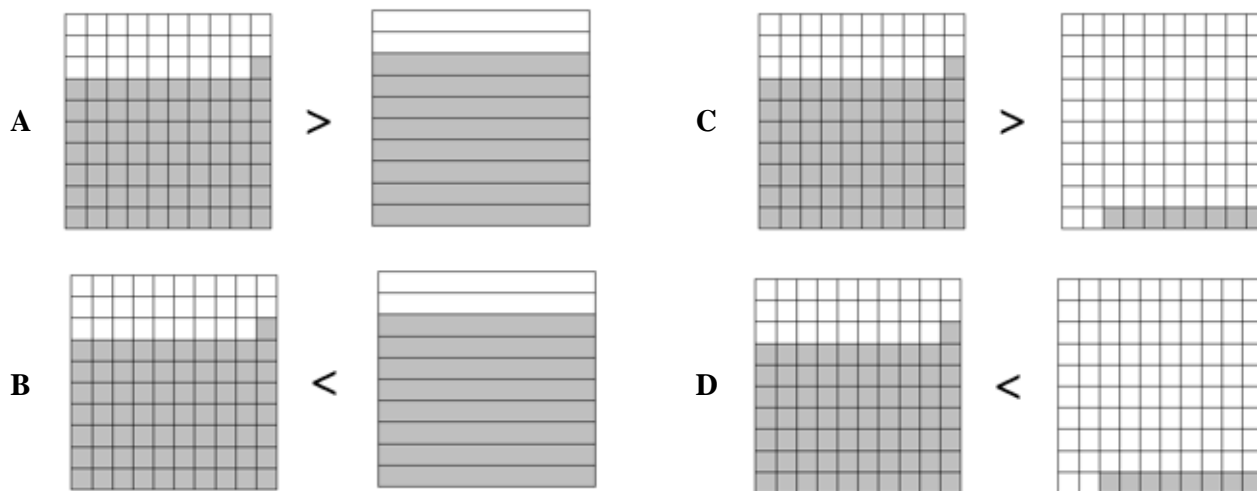


What decimal is shown by the model below?



- A 3.70
B 7.30
C 0.37
D 0.73
- 6 Estimate the following difference.
- 7,310 - 382**
- A 6,800
B 7,150
C 7,700
D 6,900
- 7 Dominic drew a line that was 2.35 meters long. What is this number rounded to the nearest whole number?
- A 3.4
B 2.4
C 3
D 2

8 Identify the correct comparison of 0.71 and 0.8.



9 $302,108 - 19,265 =$

- A 282,843
- B 109,458
- C 297,163
- D 290,558

10
$$\begin{array}{r} 54 \\ \times 27 \\ \hline \end{array}$$

- A 4,608
- B 1,028
- C 486
- D 1,458

11 $263 \times 9 = \underline{\quad ? \quad}$

- A 1,436
- B 2,367
- C 2,317
- D 1,316

- 12 The 4th grade classes at Cloverdale Elementary held several fund-raisers during the year. The table shows how much money each activity raised.

Money Raised by Fundraisers	
Fundraiser	Amount of Money
Bake Sale	\$109
Car Wash	\$342
Talent Show	\$296

What was the total amount collected by the 4th graders?

- A \$737
- B \$637
- C \$647
- D \$747

13
$$6 \overline{)216}$$

- A 31
- B 36
- C 30
- D 39

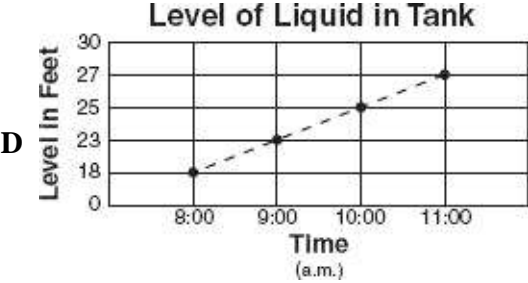
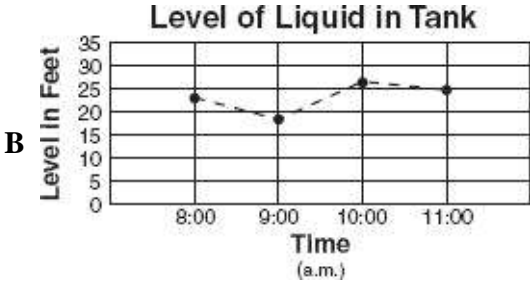
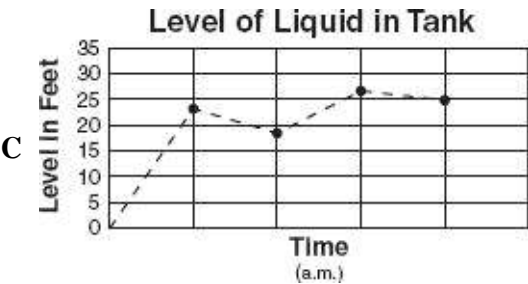
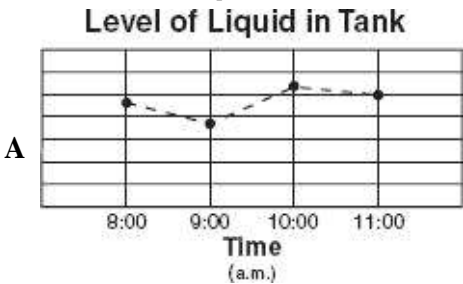
- 14 City Center Library has 264,385 books. It has 198,479 nonfiction books. The rest of the books are fiction. How many fiction books does City Center Library have?

- A 65,906
- B 74,914
- C 134,114
- D 176,916

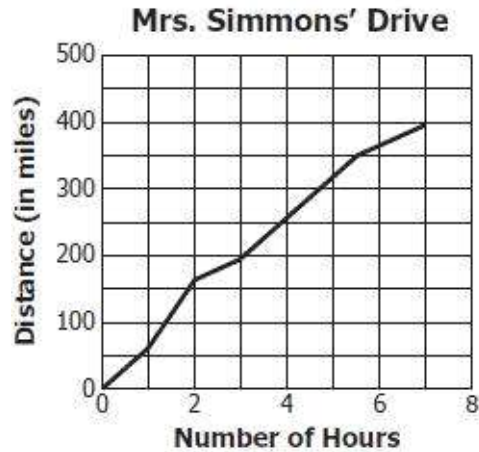
15 Mr. Charles measured and recorded the amount of liquid in a tank each hour for 4 hours. The table shows the results.

Level of Liquid in Tank	
Time (a.m.)	Level In Feet
8:00	23
9:00	18
10:00	27
11:00	25

Which *best* represents a correct graph of the information from the table?

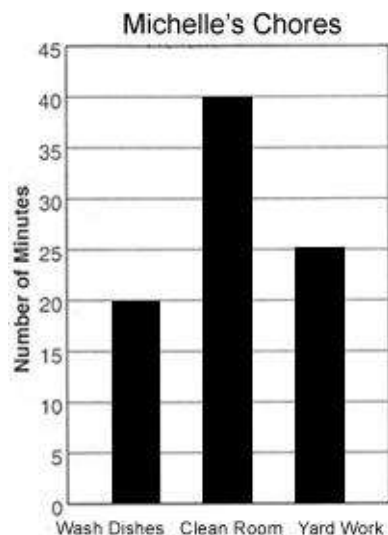


- 16 Mrs. Simmons drove 400 miles to visit a friend. The line graph below shows how the distance she traveled increased over time.



Which of the following is *closest* to the total distance Mrs. Simmons drove in the first 2 hours?

- A 140 miles
 - B 160 miles
 - C 125 miles
 - D 110 miles
- 17 The bar graph below shows how many minutes it takes Michelle to complete her chores.



Based on the graph, how many more minutes does Michelle spend cleaning her room than doing yard work?

- A 3 minutes
- B 25 minutes
- C 30 minutes
- D 15 minutes

18 Which number sentence is NOT true?

A $9 \times (3 \times 4) = (9 \times 3) \times 4$

B $(4 \times 3) \times 2 = 4 \times (3 \times 5)$

C $(7 + 6) + 3 = 7 + (6 + 3)$

D $(6 + 6) + 2 = 6 + (6 + 2)$

19 Which of the following shows the associative property for addition?

A $(8 \times 1) \times 5 = (1 \times 8) \times 5$

B $(8 \times 1) \times 5 = 8 \times (1 \times 5)$

C $(8 + 1) + 5 = (1 + 8) + 5$

D $(8 + 1) + 5 = 8 + (1 + 5)$

20 Which is true?

A $9 + 18 = 18 + 9$

B $9 \div 18 = 18 \div 9$

C $18 + 9 = 18 \times 9$

D $9 - 18 = 18 - 9$