

- 1 Kelsey made 12 bracelets for her friends last week. She needed a total of 18 bracelets. How many more bracelets does she need to make?

$$12 + \square = 18$$

- A 5
- B 30
- C 6
- D 29

- 2  $9 - 5 =$

- A 13
- B 3
- C 4
- D 14

- 3 Directions: Type your answer in the box.

**Look at the number sentences.**

**What number can be written to replace the empty box?**

$$7 + \square = 13$$

$$\square + 7 = 13$$

$$13 - 7 = \square$$

$$13 - \square = 7$$

- 4  $12 - 8 =$

- A 4
- B 5
- C 3
- D 6

- 5 Directions: Click on each number sentence you want to choose. You must choose all correct answers.

**Choose the number sentences that are part of this fact family  $7 + 3 = 10$ .**

$10 - 7 = 3$	$10 - 3 = 7$	$10 + 3 = 13$	$7 + 10 = 17$
$7 - 3 = 4$	$10 + 7 = 17$	$3 + 10 = 13$	$3 + 7 = 10$

- 6 Directions: Type your answer in the box.

**Look at the number sentences.**

**What number can be written to replace the empty box?**

$$9 + \square = 17$$

$$\square + 9 = 17$$

$$17 - 9 = \square$$

$$17 - \square = 9$$

- 7 **Which is true?**

- A  $13 + 2 = 6 + 8$
- B  $8 + 8 \neq 12 + 4$
- C  $7 + 6 \neq 11 + 2$
- D  $11 + 7 = 15 + 3$

- 8 **Juan bought 15 pears. He and Maria had 19 altogether. How many pears did Maria have?**

$$15 + ? = 19$$

- A 6
- B 24
- C 4
- D 34

- 9 Directions: Type your answer in the box.

$$4 + 15 =$$

10  $8 + 8 =$

- A 15
- B 17
- C 18
- D 16

11  $19 = \underline{\hspace{2cm}}$

**Which addition fact will fill in the blank to make the equation true?**

- A  $11 + 7$
- B  $17 + 3$
- C  $12 + 5$
- D  $15 + 4$

12 **Which is true?**

- A  $10 = 8 + 3$
- B  $4 = 8 - 2$
- C  $18 = 16 + 3$
- D  $14 = 6 + 8$

13 Directions: Choose all of the equations that are true statements. You must choose all correct answers.

**Choose all of the equations that are true statements.**

$7 + 7 \neq 9 + 5$	$14 + 5 = 10 + 9$
$11 + 6 \neq 13 + 4$	$8 + 4 = 2 + 9$
$11 + 4 \neq 9 + 8$	$2 + 14 = 8 + 7$

14 **Which is true?**

- A  $20 - 4 = 17$
- B  $13 + 0 = 0$
- C  $23 + 0 = 23$
- D  $20 - 2 = 19$

15 **Which is true?**

- A 13 is less than 12
- B 89 is greater than 36
- C 87 is greater than 90
- D 83 is less than 75

- 16 Which symbol will make this statement true?





$$365 \text{ \_\_\_ } 185$$

- A <
- B =
- C >
- D -

- 17 Directions: Type your answer in the box.

**What is 71 rounded to the nearest ten?**

- 18 Which thermometer is closest to 70°F?



- 19 Directions: Type your answer in the box.

**Look at the equation.**

$$20 - \boxed{\phantom{00}} = 10$$

**Using the equation, how many numbers are needed to count up to 20?**



**The image above shows how 4 cars finish in a race. What place did the green car finish?**

- A First
- B Second

- C Third
- D Fourth