

Name: _____


CHAPTER
9

Comparing Sets


Lesson 1 Comparing Sets of Up to 10

Count and write.


1




2




3




4



5



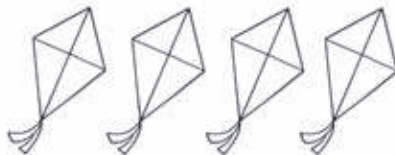
6



Name: _____


Count, circle, and write.

1



0	1	2	3	4	5	6	7	8	9	10
---	---	---	---	---	---	---	---	---	---	----

2



0	1	2	3	4	5	6	7	8	9	10
---	---	---	---	---	---	---	---	---	---	----

3



0	1	2	3	4	5	6	7	8	9	10
---	---	---	---	---	---	---	---	---	---	----



Name: _____

Which has more? Color.
Which has fewer? Circle.


1



2



3



Name: _____

Lesson 2 Comparing Sets of 11 to 20

Count and write.

Circle the set with fewer.

1



2



Name: _____


Match one-to-one.

Then, color the set with more.


1



2



3



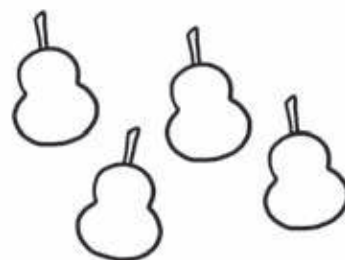


Name: _____

Lesson 3 Comparing Sets to Find the Difference



Which has most? Color.

Which has fewest? Circle.

1



2




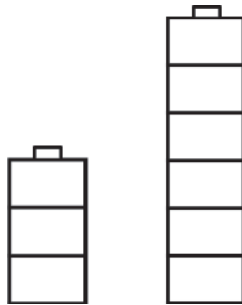
3




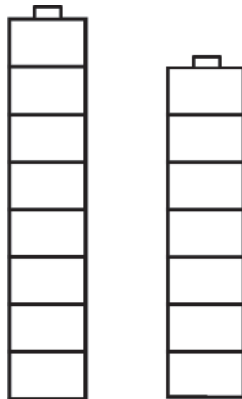
Name: _____

Color the extra cubes blue.
Count and write how many more.


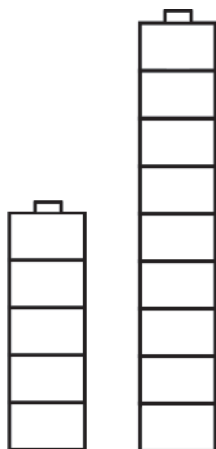
1



2



3



Name: _____

Lesson 4 Combining Sets

Count. Circle how many in all.

1




and



0	1	2	3	4	5	6	7	8	9	10
---	---	---	---	---	---	---	---	---	---	----

2



and



0	1	2	3	4	5	6	7	8	9	10
---	---	---	---	---	---	---	---	---	---	----

3



and




0	1	2	3	4	5	6	7	8	9	10
---	---	---	---	---	---	---	---	---	---	----

Name: _____

Count and write.


1




and



is




2




and



is



3



and



is

