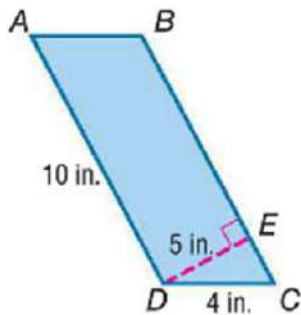


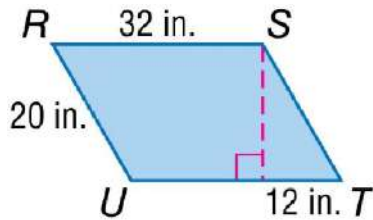
| Shape | Picture & Area Formula |
|--------------------------|------------------------|
| Parallelogram | |
| Triangle | |
| Heron's Triangle Formula | |

Find the perimeter and area of the given polygon.

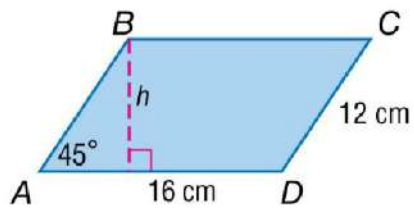
1)



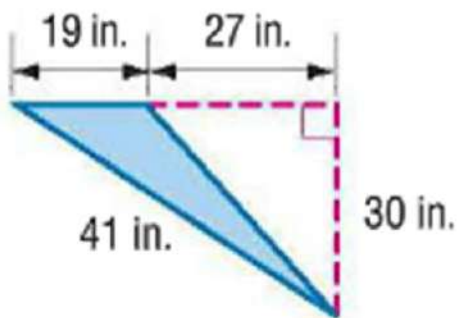
2)



3)



4)



5) The height of a triangle is 7 inches more than its base. The area of the triangle is 60 square inches. Find the base and height.