

CCSS Mathematics Assessment Task

I Spy Shapes

| |
|---|
| Grade Level: Kindergarten |
| Mathematics Domain and Cluster: Domain: Geometry Cluster: Identify and describe shapes. |
| Common Core standard(s) being assessed (if the task is intended to assess only one part of the standard, underline that part of the standard): K.G.2: Correctly name shapes regardless of their orientations or overall size. K.G.3: <u>Identify shapes as two-dimensional (lying in a plane, “flat”) or three-dimensional (“solid”).</u> |
| Student Materials: <ul style="list-style-type: none"> None |
| Teacher Materials: <ul style="list-style-type: none"> I Spy Shapes Assessment (Clip Art from Google Images) |
| Directions (for teacher to administer assessment task): Teacher should assess students individually. <ul style="list-style-type: none"> Hand out I Spy Shapes Assessment. Ask question prompts. |
| Prompt: <ul style="list-style-type: none"> Point to each picture going from left to right. Say: Look at the pictures. What shapes do you see this picture? Are these shapes 2-D/flat or 3-D/solid? |
| Correct or Model Answer: Boat: “Triangles” and “Rectangle” Face: “Circles” and “Triangles” House: “Rectangles,” “Triangles,” and “Circles” Turtle: “Hexagons,” “Circles,” “Squares,” and “Triangle” The shapes are all “ <u>2-D</u> ” or “ <u>flat</u> ”. |


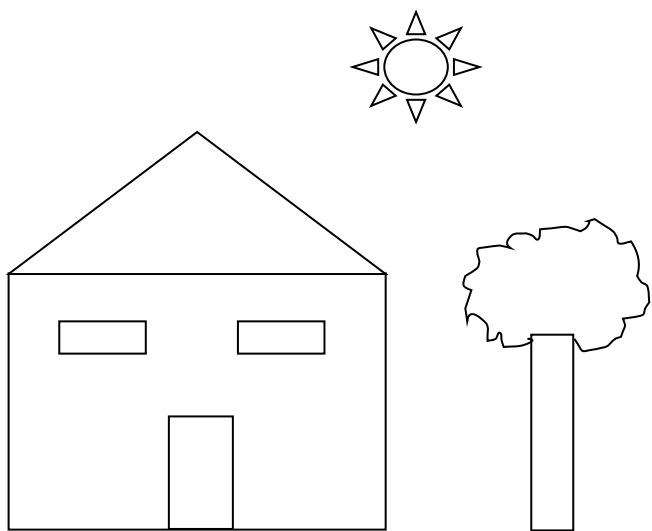

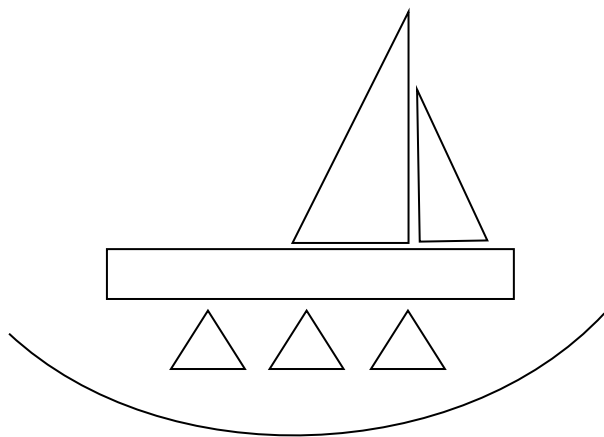
| Scoring Guide/Rubric (a score should be awarded for each criterion below) | | | |
|---|--|---|--|
| Criteria (CCSS code) | 0 points | 1 Point | 2 Points |
| Names shapes regardless of orientation or size. (K.G.2) | Student does not accurately names any of the shapes in each picture. | Student accurately names 1 kind of shape in each picture. | Student accurately names 2 different shapes in each picture. |
| Identifies shapes as two-dimensional/flat or three-dimensional/solid. (K.G.3) | Student does not identify the shapes as 2-D or flat. | | Student identifies the shapes as 2-D or flat. |

CCSS Mathematics Assessment Task

Name: _____ Date: _____

I Spy Shapes

Look at the pictures. What shapes do you see in each of the pictures? All of these shapes are what kind of shapes?



CCSS Mathematics Assessment Task

Checklist

[illegible]

Scoring Guide/Rubric (a score should be awarded for each criterion below)

| Criteria (CCSS code) | 0 points | 1 Point | 2 Points |
|--|---|---|--|
| Names shapes regardless of orientation or size. (K.G.2) | Student does not accurately name any of the shapes in each picture. | Student accurately names 1 kind of shape in each picture. | Student accurately names 2 different shapes in each picture. |
| Identifies shapes as two-dimensional/flat or three-dimensional/solid. (K.G.3) | Student does not identify the shapes as 2-D or flat. | | Student identifies the shapes as 2-D or flat. |