

Name: \_\_\_\_\_ Pd: \_\_\_\_\_

### HUMAN IMPACT SCIENCE STARTERS

**(INSERT WEEK)**

**\*ALL UNIT SCIENCE STARTERS MUST BE TURNED IN BY THE UNIT TEST TO RECEIVE CREDIT\***

Date:	Question:	Answer:
Monday  <b>/2</b>	Different areas are classified according to land use. Which of these areas would likely have the largest human population and the highest levels of air pollution? A. a rural area B. an urban area C. a natural area D. a suburban area	
Tuesday  <b>/2</b>	Earth's surface is mostly water. However, only a small amount of water on Earth is clean freshwater. Why is it important to maintain water quality? A. to keep water from evaporating B. to keep the ocean levels from lowering C. to keep the polar ice caps from melting D. to keep water from becoming a nonrenewable resource	

Wednesday  <b>/2</b>	Ben lives in an area where car exhaust sometimes causes air pollution. In which type of area would you most expect to see air pollution from car exhaust? A. in an agricultural area B. in a rural area C. in an urban area D. in a natural area
----------------------------	--

Name: \_\_\_\_\_ Pd: \_\_\_\_\_

### HUMAN IMPACT SCIENCE STARTERS

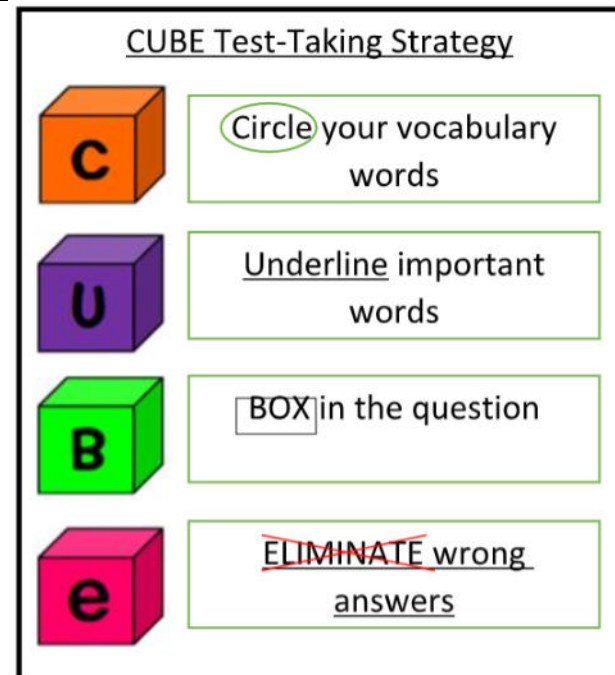
**(INSERT WEEK)**

**\*ALL UNIT SCIENCE STARTERS MUST BE TURNED IN BY THE UNIT TEST TO RECEIVE CREDIT\***

Date:	Question:	Answer:
Monday  <b>/2</b>	Different areas are classified according to land use. Which of these areas would likely have the largest human population and the highest levels of air pollution? A. a rural area B. an urban area C. a natural area D. a suburban area	

<p>Tuesday</p> <p>/2</p>	<p>Earth's surface is mostly water. However, only a small amount of water on Earth is clean freshwater. Why is it important to maintain water quality?</p> <p>A. to keep water from evaporating</p> <p>B. to keep the ocean levels from lowering</p> <p>C. to keep the polar ice caps from melting</p> <p>D. to keep water from becoming a nonrenewable resource</p>
<p>Wednesday</p> <p>/2</p>	<p>Ben lives in an area where car exhaust sometimes causes air pollution. In which type of area would you most expect to see air pollution from car exhaust?</p> <p>A. in an agricultural area</p> <p>B. in a rural area</p> <p>C. in an urban area</p> <p>D. in a natural area</p>
<p>Thursday</p> <p>/2</p>	<p>Which of the following blocks some of the harmful wavelengths, including some of the ultraviolet rays, from reaching the Earth's surface?</p> <p>A. Stratosphere</p> <p>B. Greenhouse Gasses</p> <p>C. Mesosphere</p> <p>D. Ozone Layer</p>

<p>Friday</p> <p>/2</p>	<p>What is the term meaning "the way by which certain gasses in the atmosphere, such as water vapor and carbon dioxide, absorb and reradiate thermal energy?"</p> <p>A. Greenhouse Effect</p> <p>B. Ozone Layer</p> <p>C. Air Pollution</p> <p>D. Air Quality</p>
-------------------------	---



<p>Thursday</p> <p>/2</p>	<p>Which of the following blocks some of the harmful wavelengths, including some of the ultraviolet rays, from reaching the Earth's surface?</p> <p>A. Stratosphere</p> <p>B. Greenhouse Gasses</p> <p>C. Mesosphere</p> <p>D. Ozone Layer</p>
---------------------------	--


Friday

/2

What is the term meaning “the way by which certain gasses in the atmosphere, such as water vapor and carbon dioxide, absorb and reradiate thermal energy?”

- A. Greenhouse Effect
- B. Ozone Layer
- C. Air Pollution
- D. Air Quality


### CUBE Test-Taking Strategy




Circle your vocabulary words



Underline important words



BOX in the question



~~ELIMINATE~~ wrong answers