



**High School
Geography
Churchill**

**4TH QUARTER
CURRICULUM PACKET**

**Hayward Community
School District
715-634-2619**

#HurricaneStrong

Geography – Mr. Churchill

These are the assignments you will be expected to complete for Geography. You will be using our Moodle page quite often, here's how you get to it...

1. Go to the Hayward School website.
2. Under the tab "Students", you will see a link called 'Moodle', click on it.
3. Click on High School.
4. Click on Social Studies.
5. Click on Mr. Churchill.
6. Click on Geography.

These assignments will be due Monday, June 1st. You will receive instructions on how/where to turn them in.

I will have office hours from 10:00 am – Noon, Monday through Friday. That means I will be by my phone to help if you need it. You can call anytime, but outside office hours you might have to leave a message. I will also be checking my email often as well.

Cell # - 715-497-7051. Feel free to call or text me if you need to. Please add your name to the end of the text so I know who it is.

Email – mchurchill@hayward.k12.wi.us

Thanks,
Mr. Churchill

Assignment Instructions

***Chapter 1 & 2**

Using the Moodle page, fill in the blanks on your note sheets. You will do this by looking at "Smartboard Pages."

Complete the Chapter 1 & 2 review using your notes.

***Map Packets**

There are 4 map packets you will need to complete pertaining to North America, Latin America, Europe, & Asia. There are excellent maps on the Moodle page you may use to complete these.

***Online Quizzes**

You will have online map quizzes to complete. These can be taken as many times as you like until you get the score you like. I'm trusting you to do them honestly (no cheating!). When you get the score you want, take a screen shot and send it to me. Below are the quizzes on the Moodle page you need to take...

US States

US Capitals (option 1 or 2, your choice)

US Rivers

Canadian Provinces

South America

Central America

Caribbean

South America Capitals

Central America Capitals

Europe

Europe Capitals

Europe Rivers

Asia

Asia Capitals (option 1 or 2, your choice)

Asia Rivers

Africa

Oceania

***do not worry about the countries final or capitals final**

Chapter 1

The World

_____ – study of the ways people live and work.
Five Themes of Geography

1. _____

Where is it?

_____ – precise position on the globe (Grid System)

_____ – Northern, Southern, Eastern, Western

Direction on a Compass – _____

Direction relative to the earth's _____

Latitude – _____ = 0 degrees ($^{\circ}$) latitude

_____ = 90° north

_____ = 90° south

Tropic of _____ = $23 \frac{1}{2}^{\circ}$ north

Tropic of _____ = $23 \frac{1}{2}^{\circ}$ south

Longitude - 0° longitude is the _____

Goes in intervals of 20°

East & West longitude up to 180°

_____ – location in relation to other things/places

2. _____

What is it like there?

Number of people who live there, looks, activities

3. _____

Relationship between the people and the environment

4. _____

How are places connected?

5. Region

_____ – boundaries determined by by some uniform characteristic

_____ – focus on central point with surrounding areas linked

Others

- Science & Technology, History & political Science, Sociology, Economics

Chapter 2

The Earth

Our Solar System – 8 planets (_____)
_____ is the largest (Earth 5th)
_____ is the smallest

Earth – 93 *million* miles from the sun
_____ miles in diameter (@ the equator)
_____ h
Atmosphere extends _____ miles high
Highest Point – _____ (29,028 ft asl)
Lowest Point – _____ (1,312 ft bsl)

Inside of the Earth is made up of 3 parts – _____ (Plates),
_____, & _____
Plates move suddenly = _____ (fold, faults)

Continents – _____

Oceans/Seas – _____

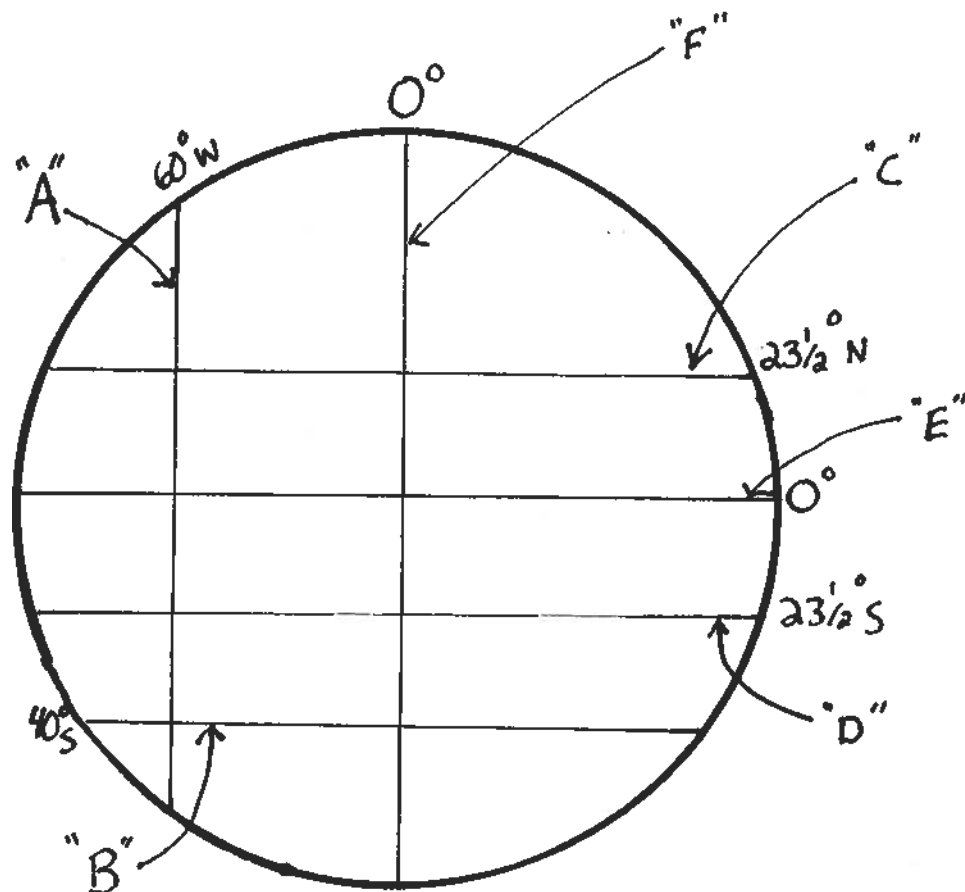
Renewable Resources vs. Non-Renewable

Geography Chapter 1&2 Review

Geography Absolute Location Relative Location Renewable Resources
Non-Renewable Resources Mt. Everest Dead Sea

1. Highest point on the Earth. _____
2. Wind, solar, hydroelectric, timber. _____
3. Study of the ways people live and work. _____
4. Precise position on the globe. _____
5. Location in relation to other things/places. _____
6. Lowest point on the Earth. _____
7. Fossil fuels (coal, oil) and most minerals. _____
8. Line "A" represents longitude or latitude? _____
9. Line "B" represents longitude or latitude? _____
10. Line "C" is the Tropic of _____.
11. Line "D" is the Tropic of _____.
12. Line "E" is the _____.
13. Line "F" is the _____.

Questions 8-13 ...



Identify the four major directions on a compass.

14. _____ 15. _____ 16. _____ 17. _____

The 5 major themes of Geography are: ***Location, Place, Human/Environment Interaction, Movement, & Region.*** Match one of these 5 with the following;

18. How are places connected? _____

19. What is it like there? _____

20. Relationship between the people and the environment. _____

21. Where is it? _____

22. Uniform and Functional. _____

Name the 8 planets in our solar system.

23. _____

24. _____

25. _____

26. _____

27. _____

28. _____

29. _____

30. _____

The inside of the Earth is made up of 3 parts, name them.

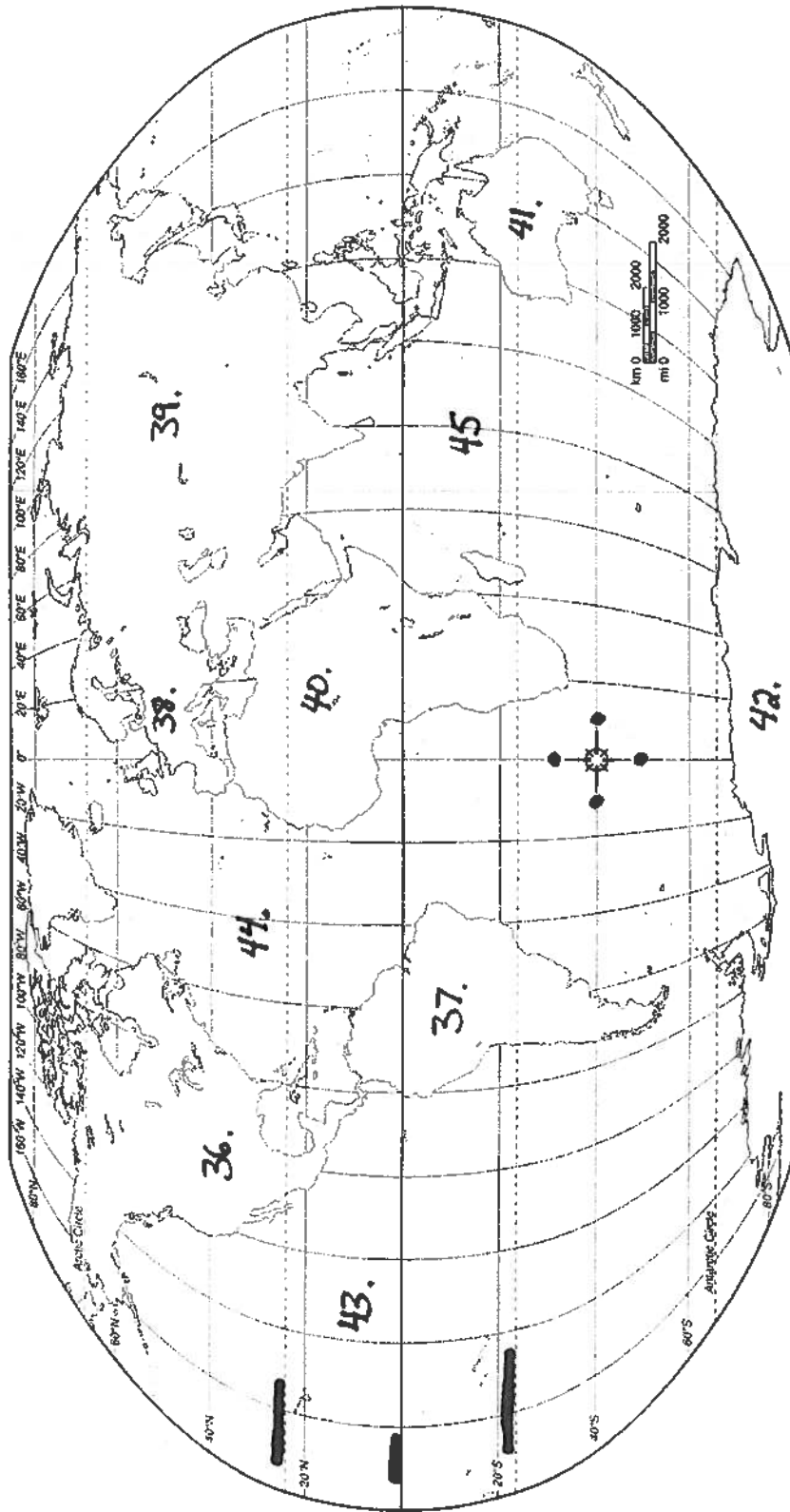
31. _____ 32. _____ 33. _____

34. The surface of the Earth is roughly _____% water.

35. The Earth is roughly _____ miles in diameter.

Name _____ Date _____

World Continents



36. _____ 37. _____ 38. _____

39. _____ 40. _____ 41. _____

42. _____ 43. _____ 44. _____ 45. _____

Instructions for Map Packet

Label the countries and capitals (some capitals you will need to put a dot for) listed on the help sheet. Be sure to check off each country and capital to make sure you have it! Color each country as well.

Draw in the Mountains, Rivers, Peninsulas, and other bodies of water that re listed on the help sheet on the appropriate maps.

Central & Northern Asia Help Sheet

_____ China
_____ Japan
_____ Kazakhstan
_____ Kyrgyzstan
_____ Mongolia
_____ North Korea
_____ Russia
_____ South Korea
_____ Taiwan
_____ Tajikistan
_____ Turkmenistan
_____ Uzbekistan

_____ Ashgabat
_____ Astana
_____ Beijing
_____ Bishkek
_____ Dushanbe
_____ Moscow
_____ Pyongyang
_____ Taipei
_____ Tashkent
_____ Tokyo
_____ Seoul
_____ Ulaanbaatar

Mountains

- _____ Pontic Mountains
- _____ Taurus Mountains
- _____ Caucasus Mountains
- _____ Hejaz & Asir Mountains

Rivers

- _____ Tigris River
- _____ Nile River
- _____ Euphrates River

Peninsulas

- _____ Sinai Peninsula
- _____ Anatolia Peninsula
- _____ Arabian Peninsula

Other Bodies of Water

- _____ Aral Sea
- _____ Caspian Sea
- _____ Black Sea
- _____ Dead Sea
- _____ Persian Gulf

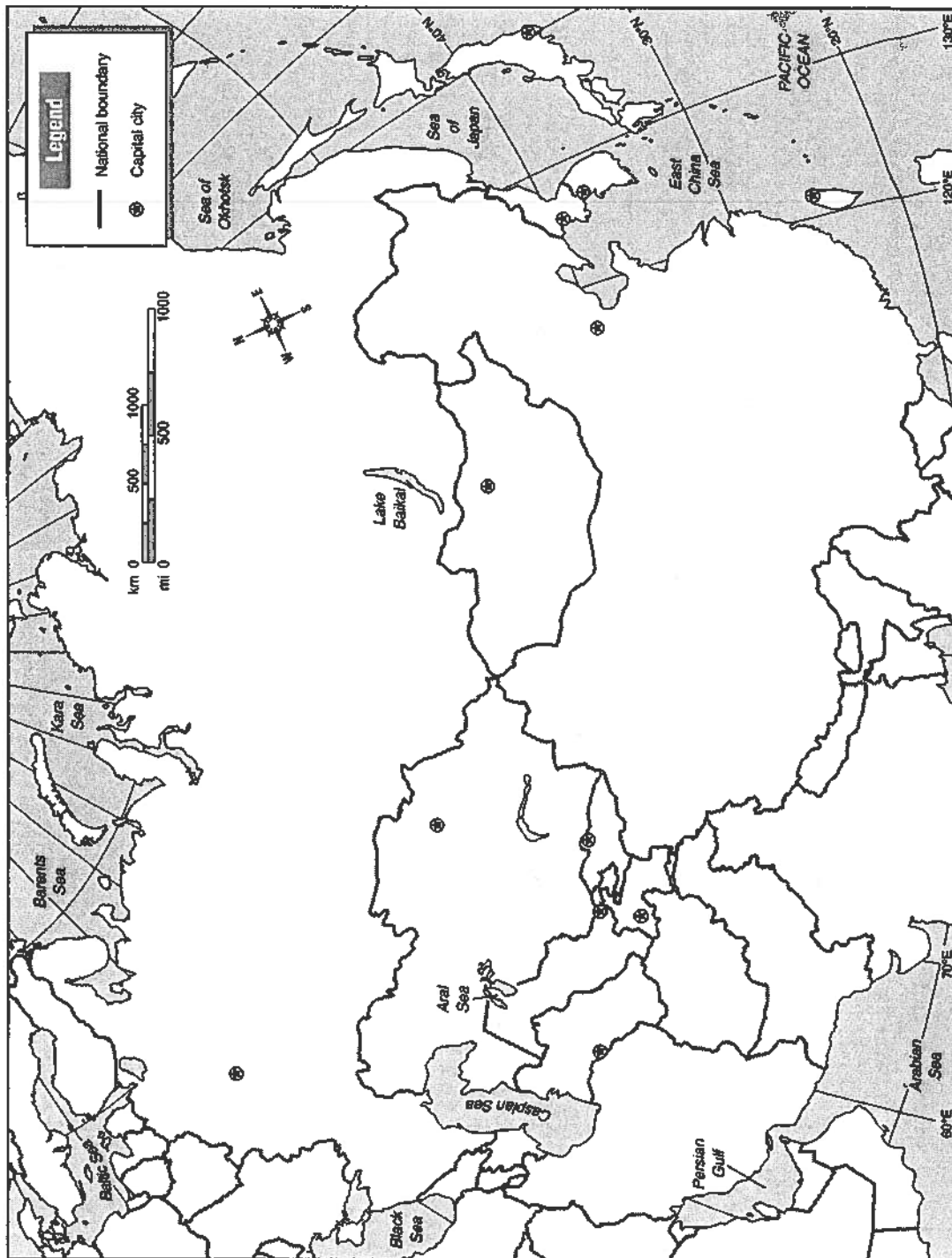
North Africa, Central & Southwest Asia Map Help

_____ Armenia
_____ Azerbaijan
_____ Bahrain
_____ Egypt
_____ Georgia
_____ Iraq
_____ Iran
_____ Israel
_____ Jordan
_____ Kuwait
_____ Lebanon
_____ Oman
_____ Qatar
_____ Saudi Arabia
_____ Syria
_____ Turkey
_____ United Arab Emirates
_____ Yemen
_____ Morocco
_____ Algeria
_____ Tunisia
_____ Libya

_____ Tehran
_____ Riyadh
_____ Ankara
_____ Cairo
_____ Damascus
_____ Baghdad
_____ Jerusalem
_____ Beirut
_____ Amman
_____ Kuwait City
_____ Tunis
_____ Tripoli
_____ Algiers
_____ Rabat

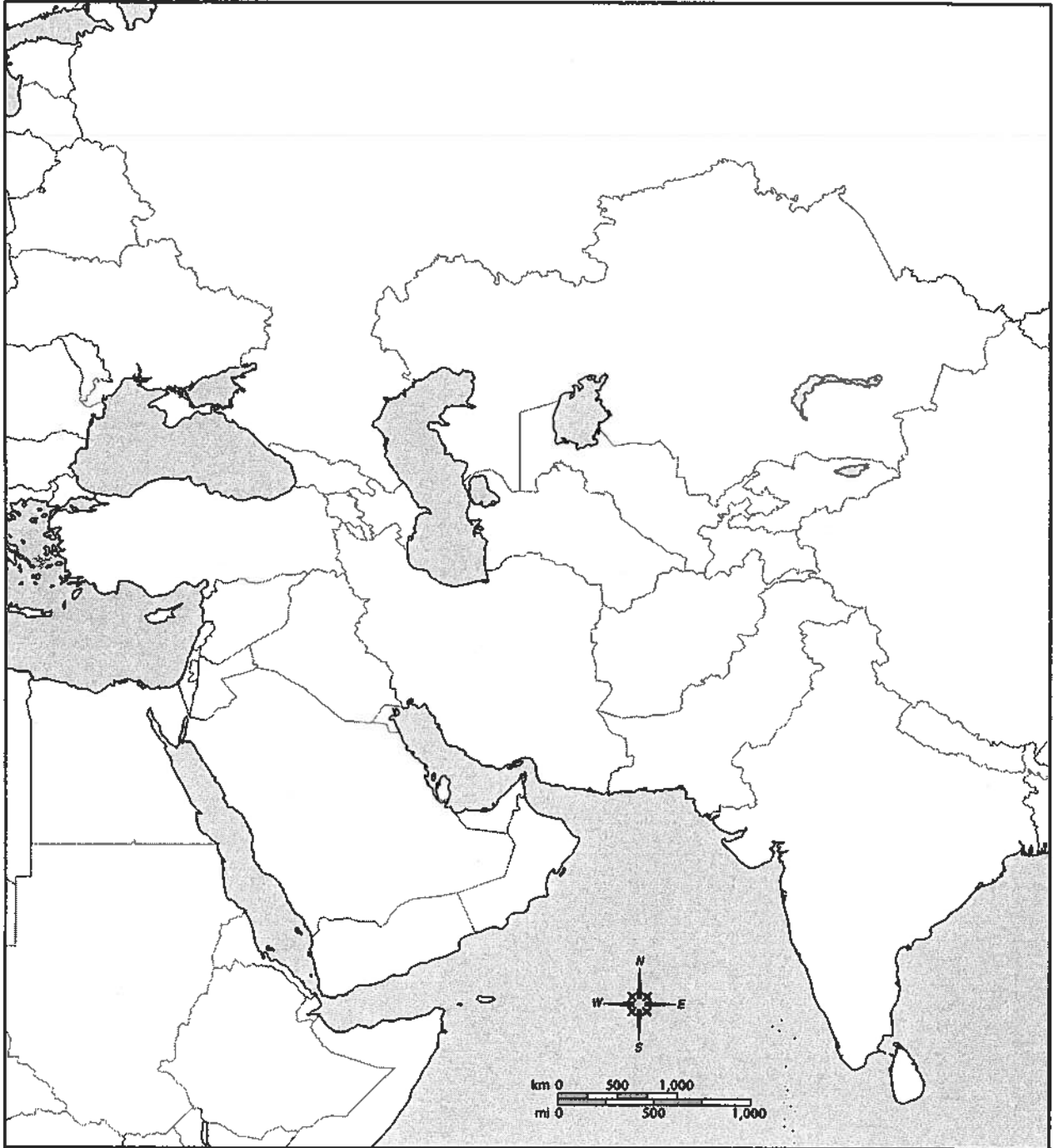
Name _____ Date _____

Central and Northern Asia: Political



Name _____ Date _____

Central & Southwest Asia



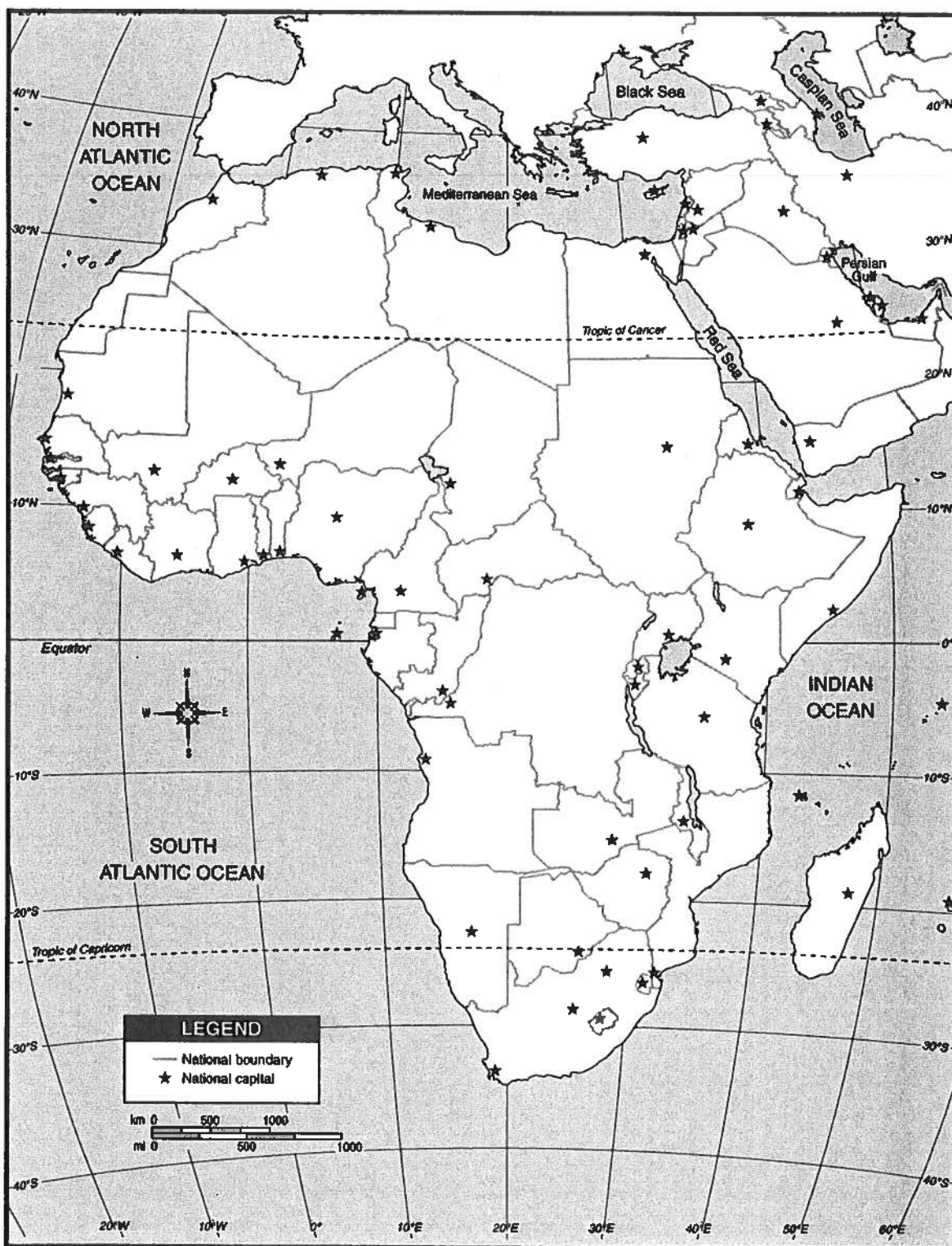
Outline Maps

Copyright © Houghton Mifflin Company. All rights reserved.

Education Place®
www.eduplace.com

Name _____ Date _____

Africa & Asia Political



Outline Maps

Copyright © Houghton Mifflin Company. All rights reserved.

Education Place®
www.eduplace.com

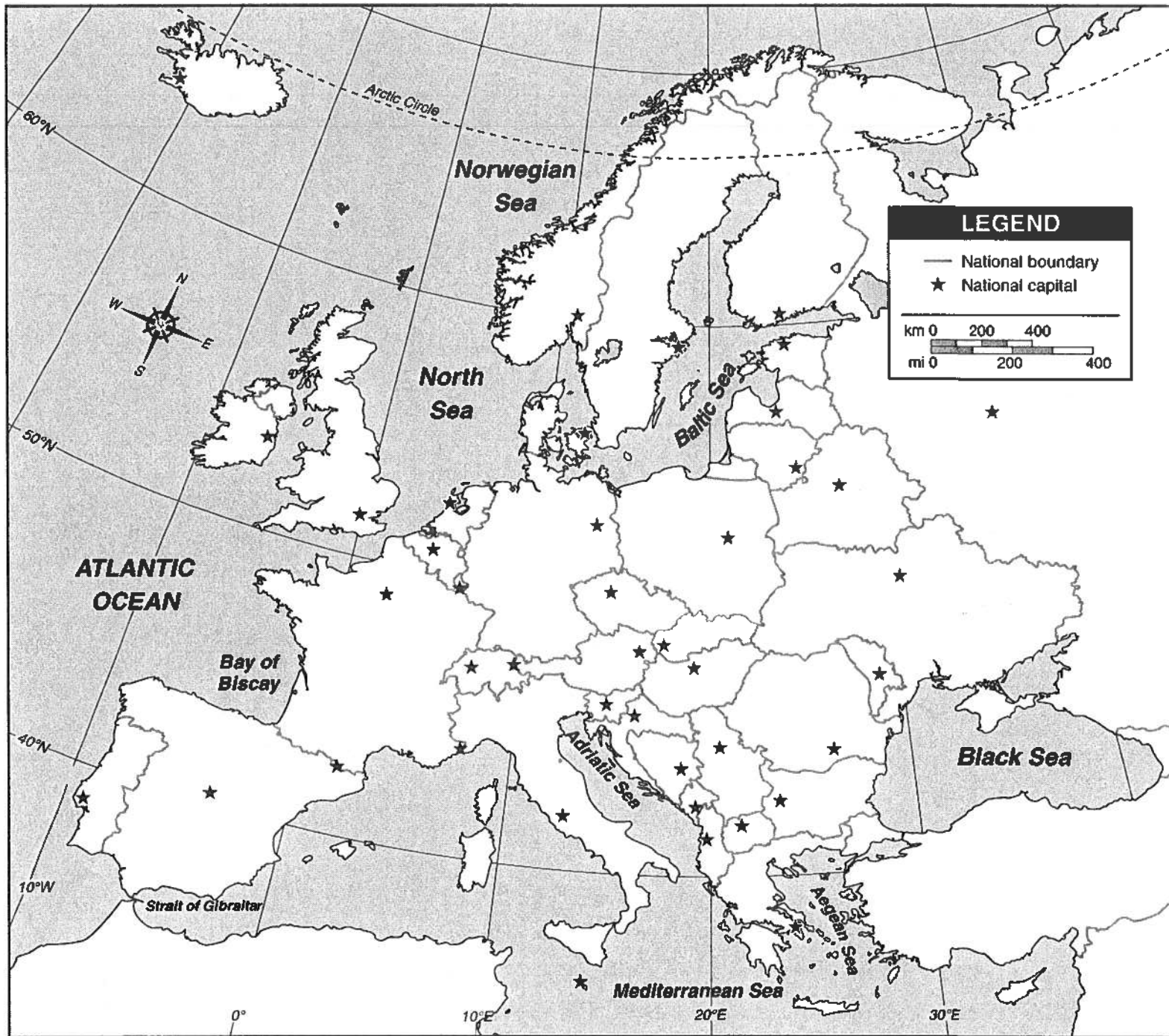
Instructions for Europe Map Packet

Map #1 – Label the countries and capitals listed on the help sheet. Be sure to check off each country and capital to make sure you have it! Color each country as well.

Map #2 – Draw in or highlight the bodies of water listed on the help sheet. Rivers you will need to draw in and label. Most of the other bodies of water are already labeled and you will simply need to highlight them.

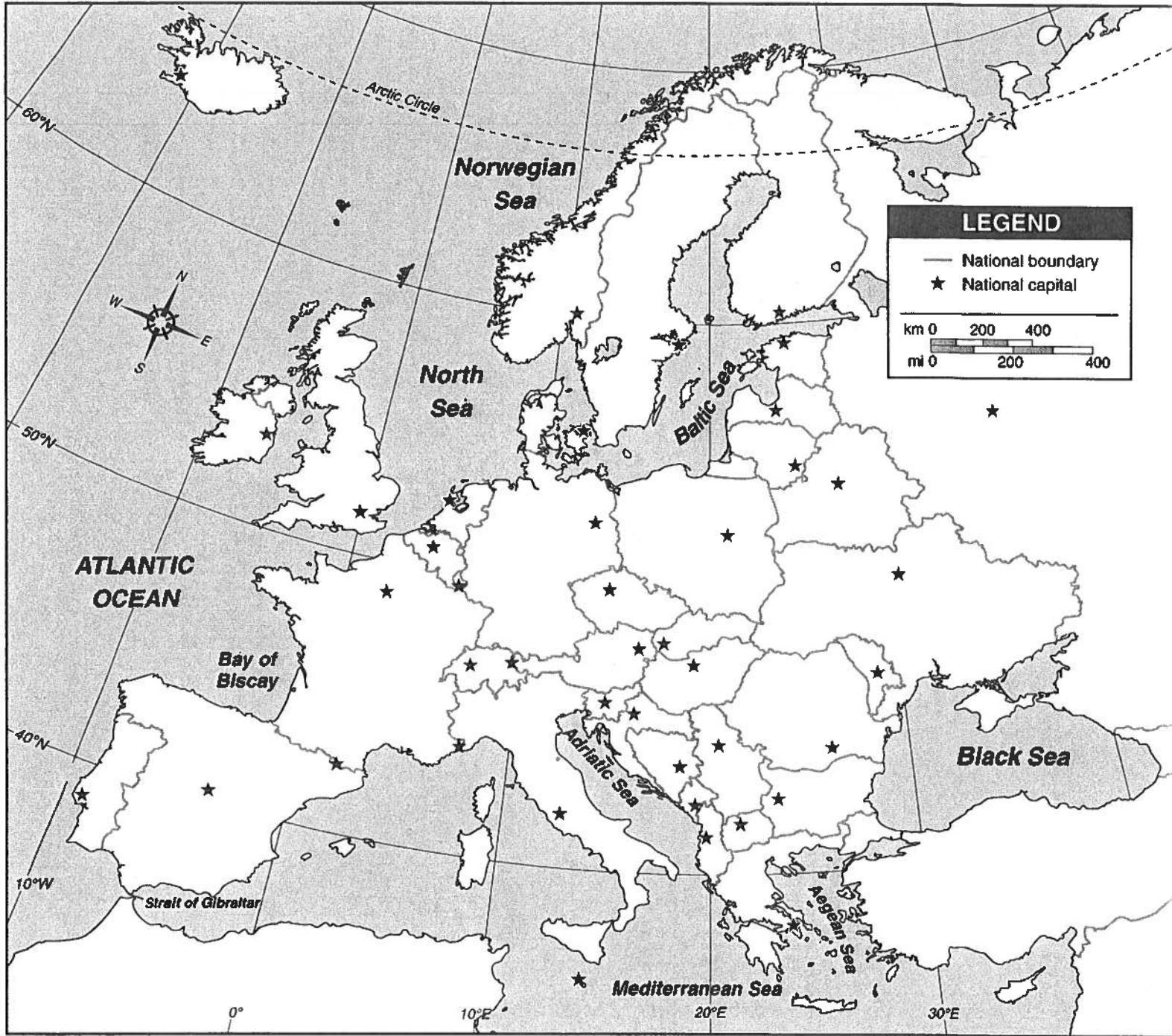
Europe

Countries + Capitals



Europe

Bodies of Water



_____ Albania	
_____ Andorra	
_____ Austria	
_____ Belarus	. Reykjavik
_____ Belgium	. Oslo
_____ Bosnia and Herzegovina	. Lisbon
_____ Bulgaria	. Copenhagen
_____ Croatia	. Vienna
_____ Czech Republic	. Amsterdam
_____ Denmark	. Warsaw
_____ Estonia	. London
_____ Finland	. Moscow
_____ France	. Brussels
_____ Germany	. Athens
_____ Greece	. Stockholm
_____ Hungary	. Prague
_____ Iceland	. Madrid
_____ Ireland	. Helsinki
_____ Italy	. Berlin
_____ Latvia	. Budapest
_____ Luxembourg	. Paris
_____ Liechtenstein	. Dublin
_____ Lithuania	. Rome
_____ Macedonia	
_____ Malta	
_____ Moldova	
_____ Monaco	
_____ Montenegro	
_____ Netherlands	
_____ Norway	
_____ Poland	
_____ Portugal	
_____ Romania	
_____ Russia	
_____ San Marino	
_____ Serbia	
_____ Slovakia	
_____ Slovenia	
_____ Spain	
_____ Sweden	
_____ Switzerland	
_____ Ukraine	
_____ United Kingdom (Great Britain)	
_____ Vatican City	

European Bodies of Water

_____ Adriatic Sea
_____ Aegean Sea
_____ Baltic Sea
_____ Black Sea
_____ Dardanelles Strait
_____ English Channel
_____ Mediterranean Sea
_____ North Sea
_____ Norwegian Sea
_____ Strait of Gibraltar

_____ Danube River
_____ Elbe River
_____ Oder River
_____ Po River
_____ Rhine River
_____ Seine River
_____ Thames River

Map Instructions

Map #1 – Mexico

*Label & Color Mexico

*Label Mexico City

Map #2 – Central America

*Color and label each country on this map that has a star in it.

*Label each star (which is that nation's capital).

Map #3 – South America

*Color and label each country on this map that has a star in it.

*Label each star (which is that nation's capital).

*Draw in the Amazon River.

Map #4 – The Caribbean

*Highlight the following countries:

Antigua & Barbuda

The Bahamas

Barbados

Cuba

Dominica

Dominican Republic

Grenada

Haiti

Jamaica

St. Kitts & Nevis

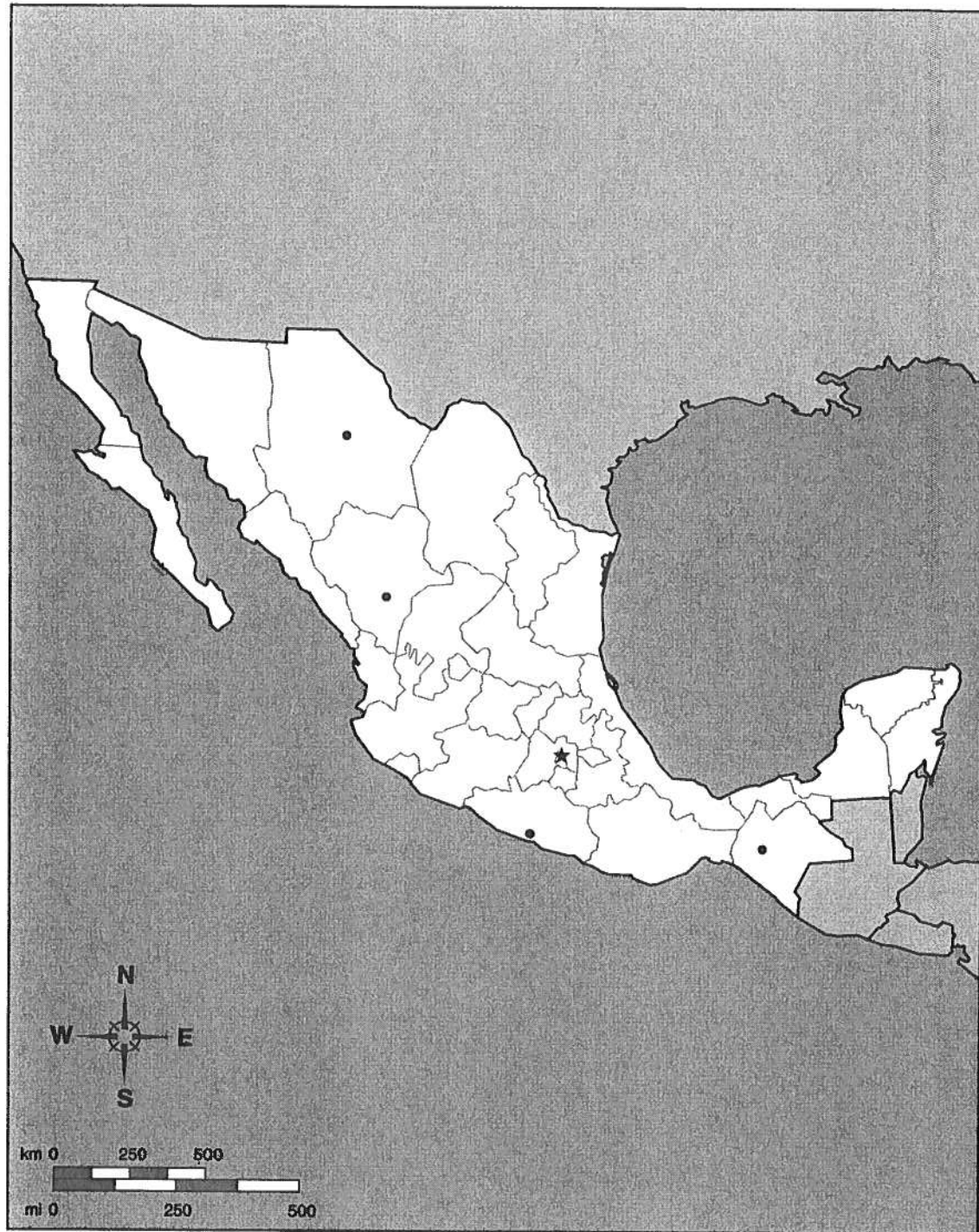
St. Lucia

St. Vincent & the Grenadines

Trinidad & Tobago

Name _____ Date _____

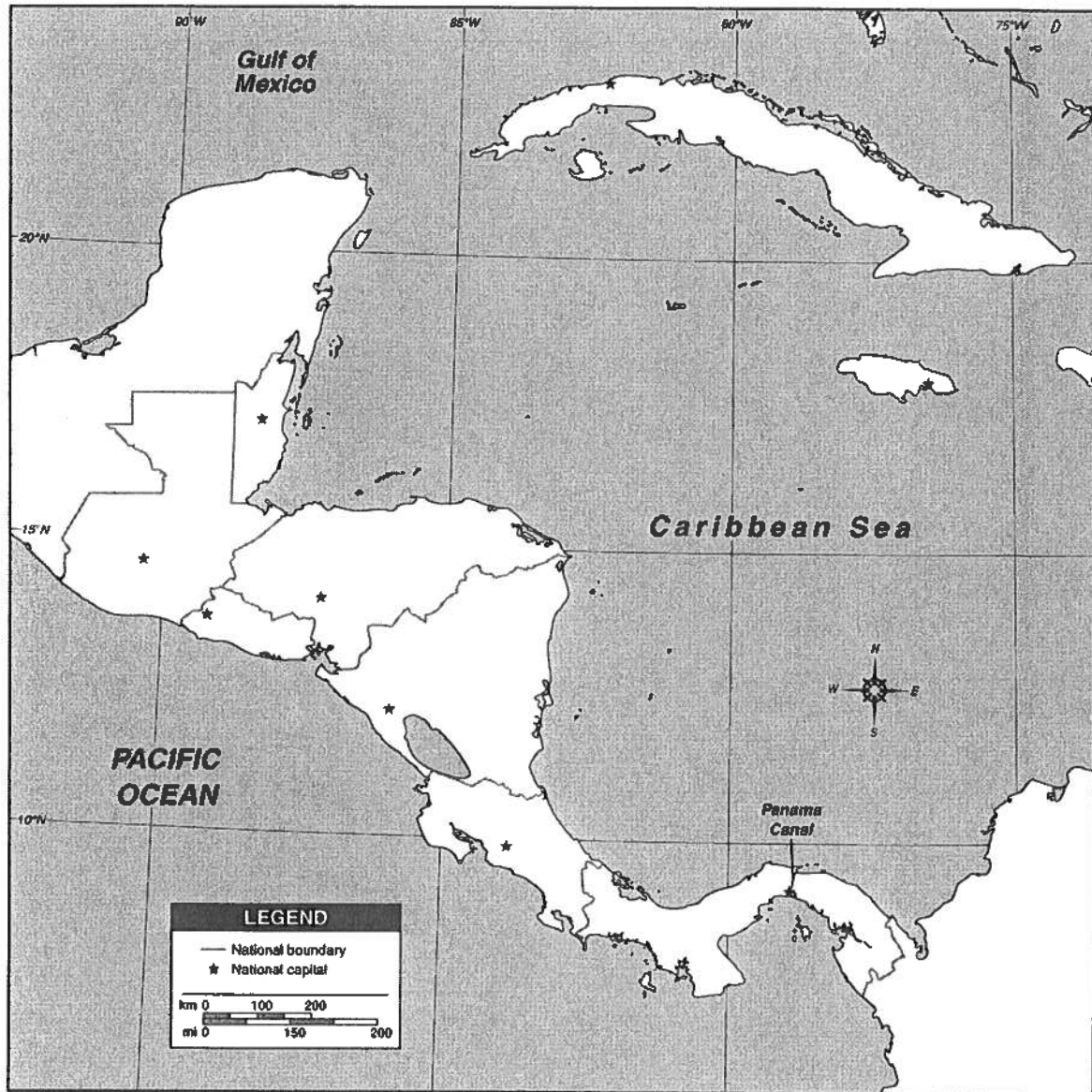
Mexico: Political





Name _____ Date _____

Central America



100

10

10

10

10

Name _____ Date _____

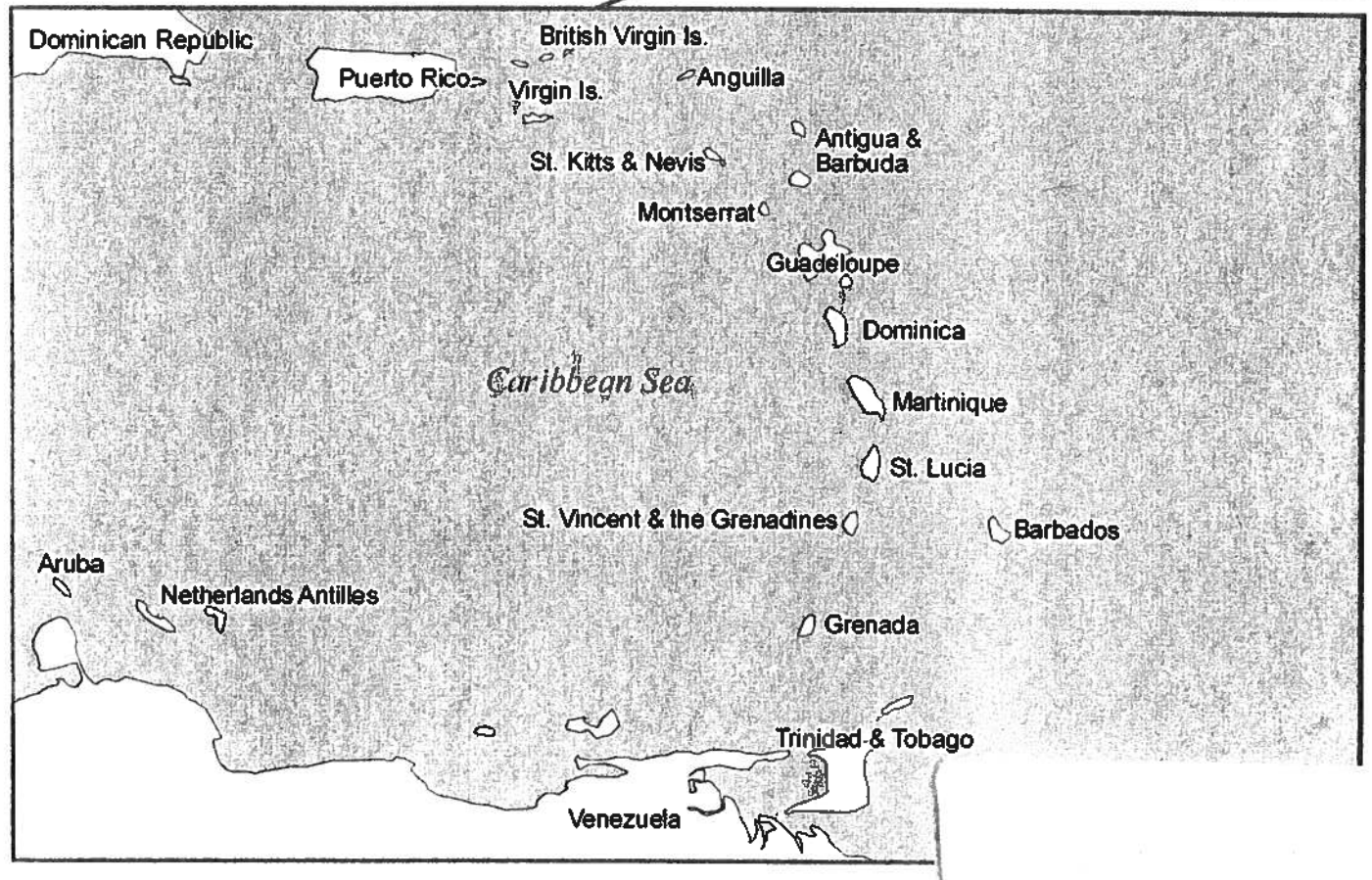
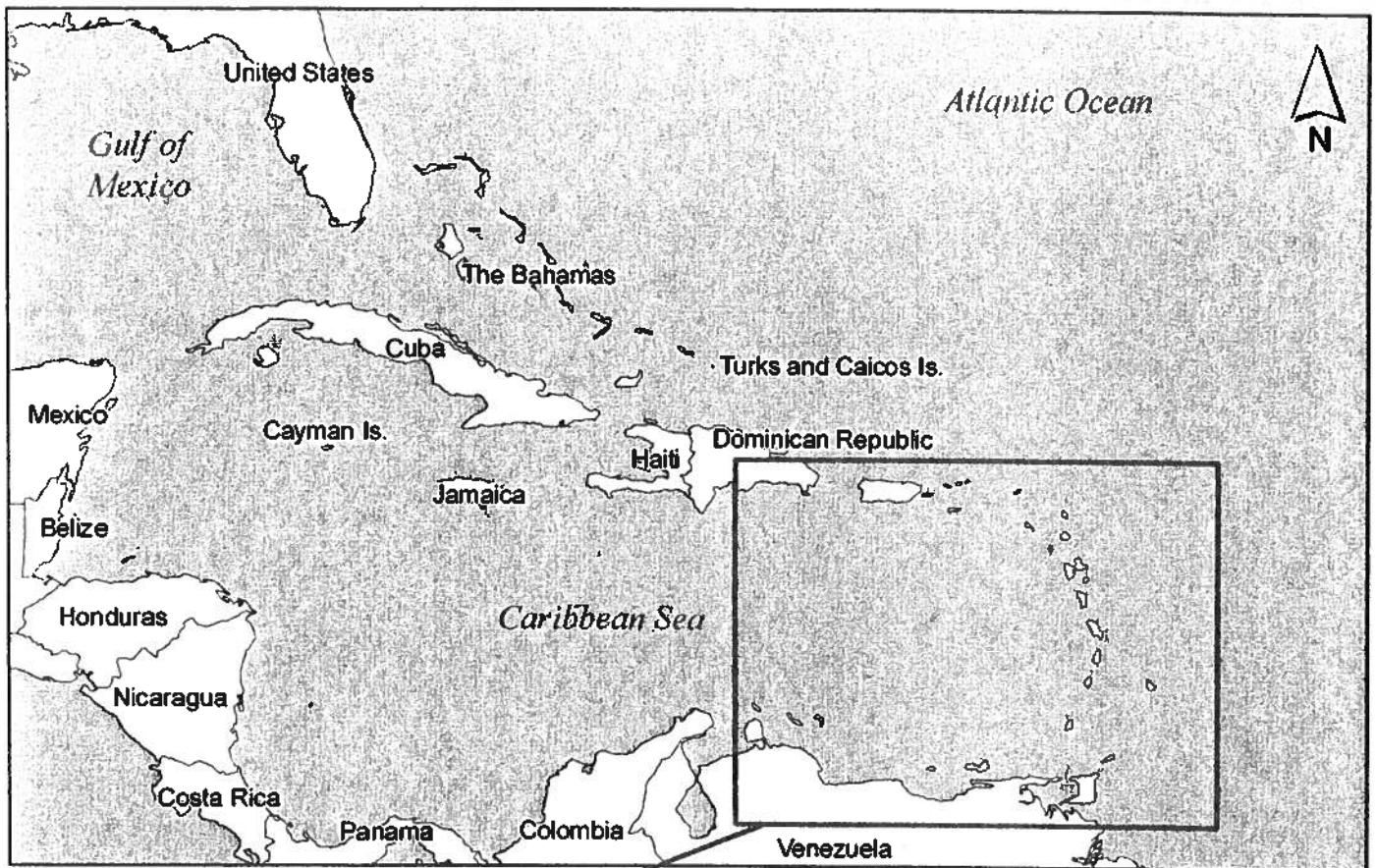
South America



1870

1870

The Caribbean



1

Map Instructions

Map #1 – US States & Capitals

- *Label each state

- *Label each capital

- *Color each state (make sure the same color does not touch each other).

Map #2 – US Major Cities

- *Use the word bank on the last page to label the appropriate city on the line provided.

Map # 3 – Canada

- *Label each province

- *Label the appropriate cities

- *Color each province (make sure the same color does not touch each other).

Use the list of cities and provinces on the last sheet to do this.

Quizzes this chapter (online)

US States

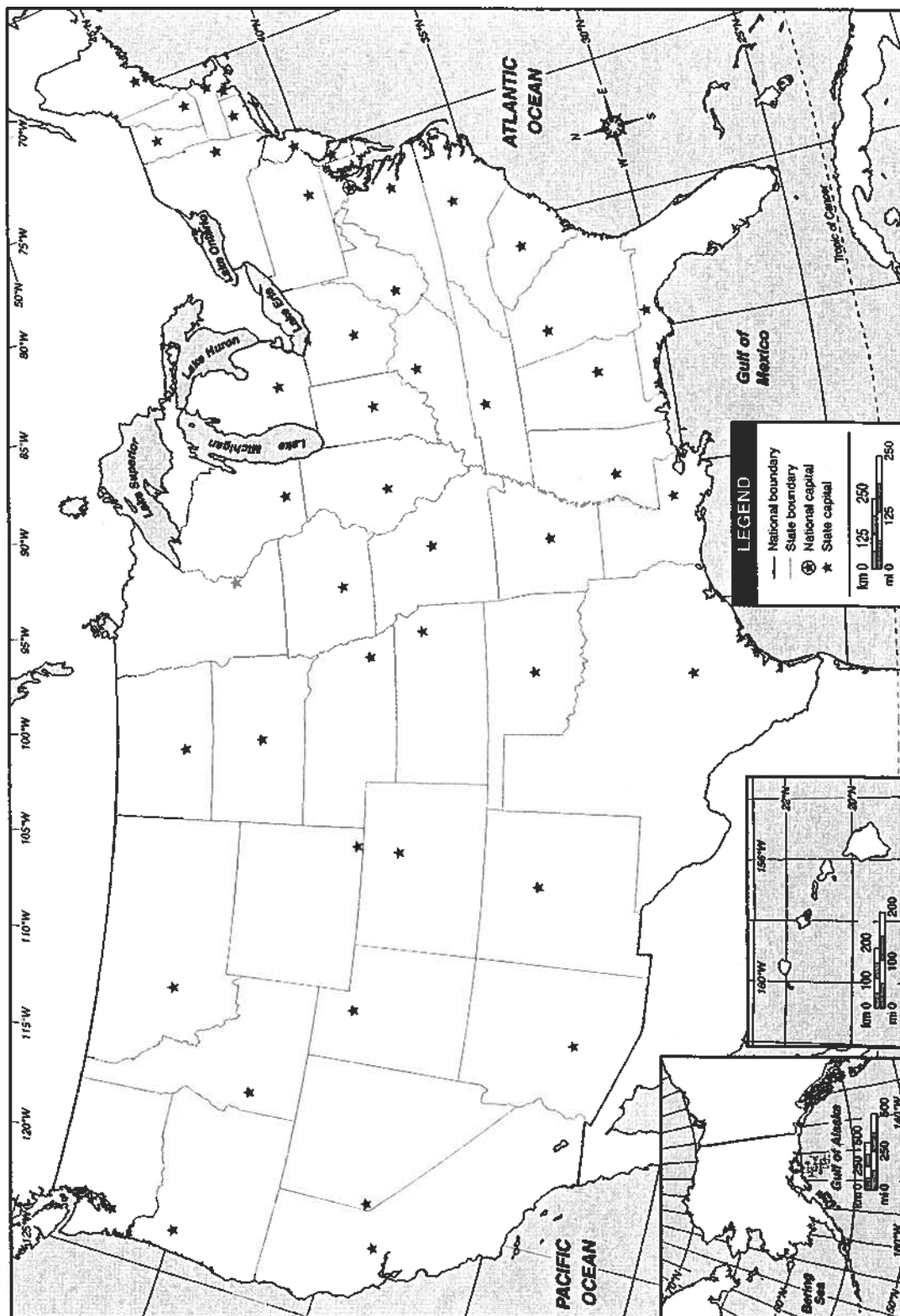
US Capitals

US Rivers

Canadian Provinces

Name _____ Date _____

USA Capitals



the first of these is the fact that the system is not in a steady state. The second is that the system is not in a steady state. The third is that the system is not in a steady state.

10

8

2

11

9

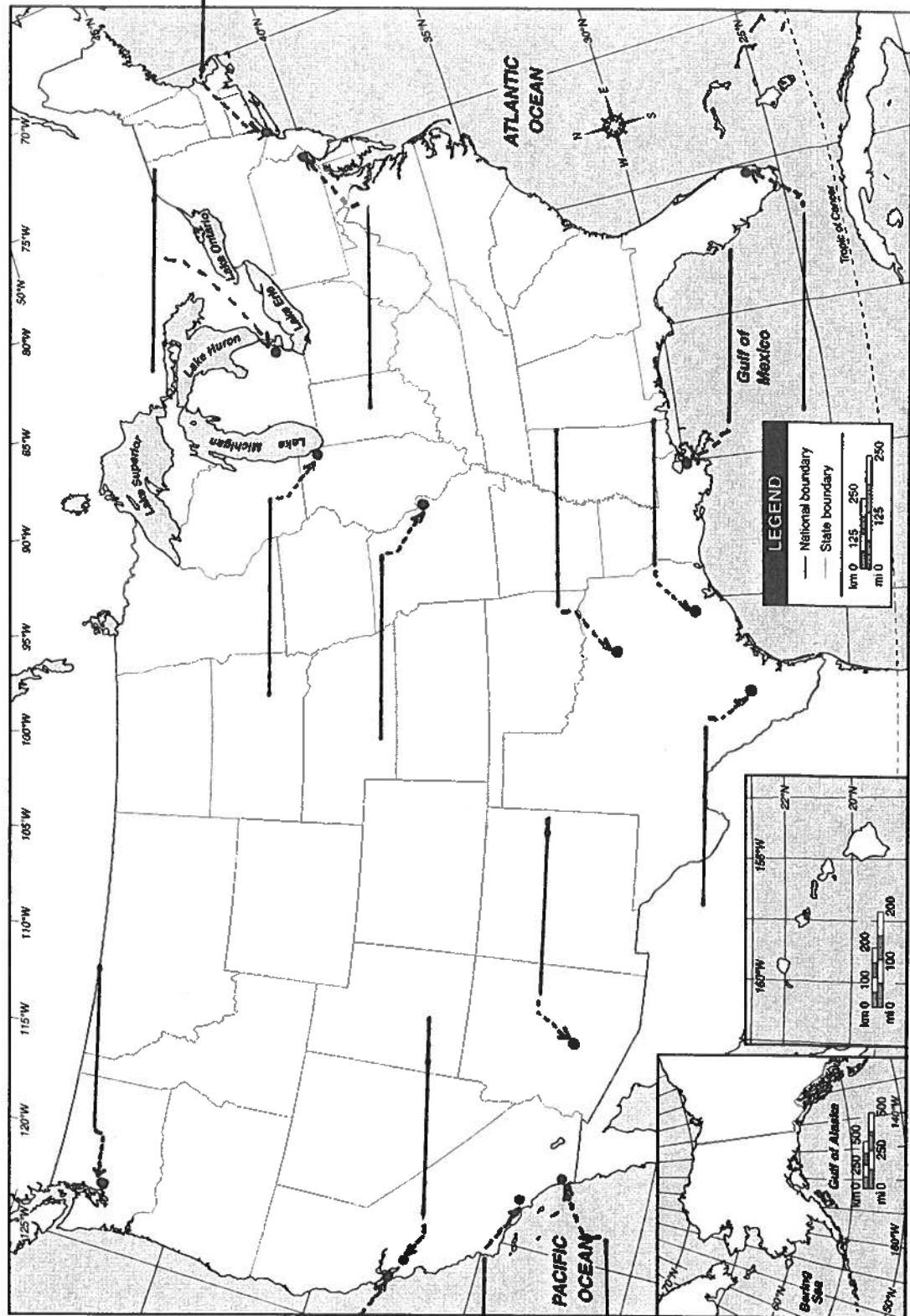
7

Name _____

Date _____

United States of America

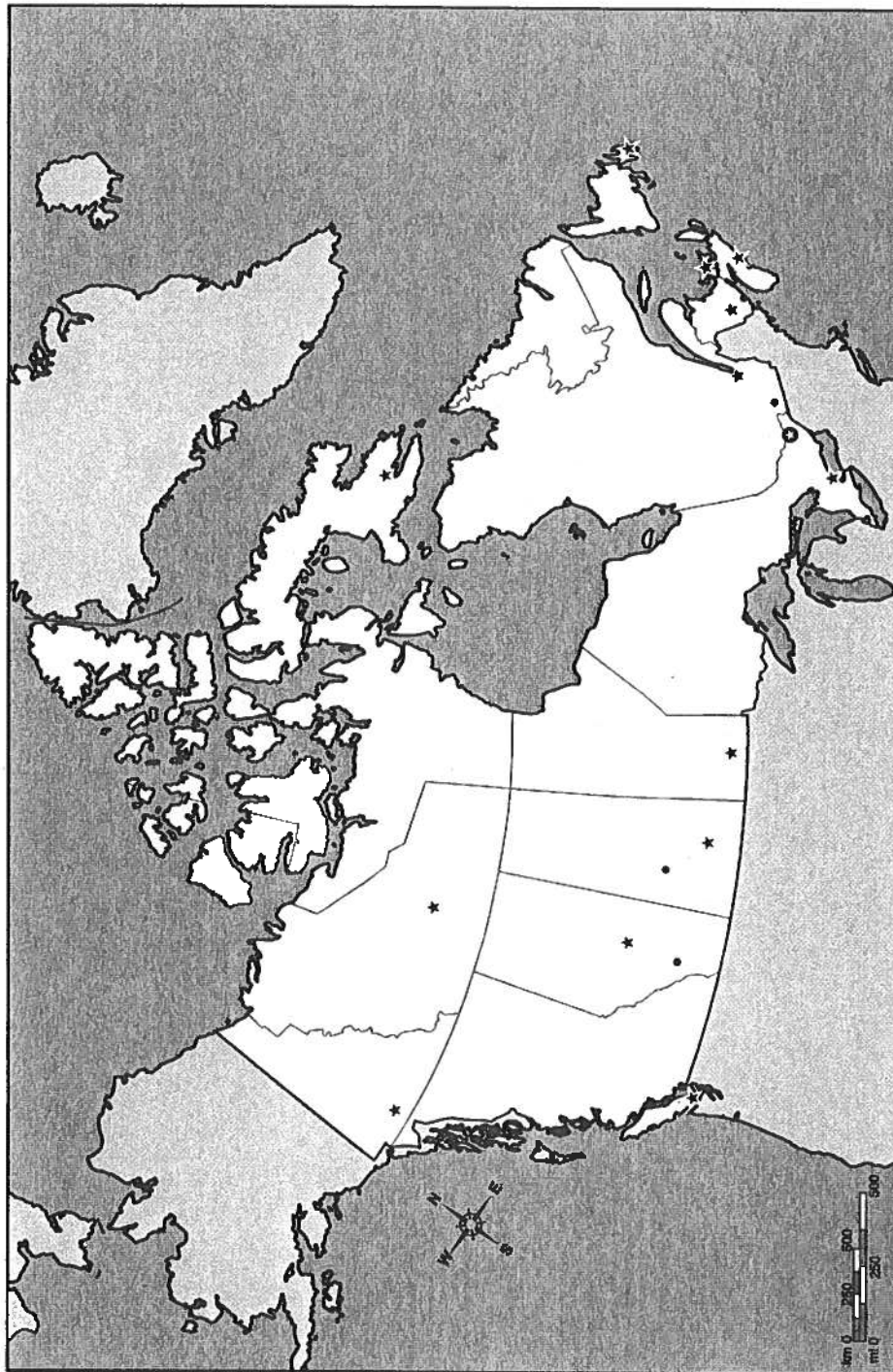
Major Cities





Name _____ Date _____

Canada





Major Cities in the United States

Chicago
Dallas
Detroit
Houston
Los Angeles
Miami
New Orleans
New York
Philadelphia
Phoenix
San Antonio
San Diego
San Francisco
San Jose
Seattle
St. Louis

Canadian Cities & Provinces

Cities (CAPITAL LETTERS= province capital, *italic & bold* = national capital)

CHARLOTTETOWN

Calgary

EDMONTON

FREDERICTON

HALIFAX

IQALUIT

Montreal

Ottawa

QUEBEC

REGINA

Saint John

Saskatoon

ST. JOHN'S

TORONTO

Vancouver

VICTORIA

WHITEHORSE

WINNIPEG

YELLOWKNIFE

Provinces

Alberta

British Columbia

Manitoba

New Brunswick

Newfoundland and Labrador

Northwest Territories

Nova Scotia

Nunavut

Ontario

Prince Edward Island

Quebec

Saskatchewan

Yukon