
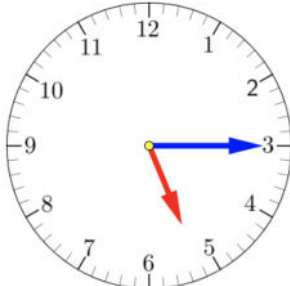

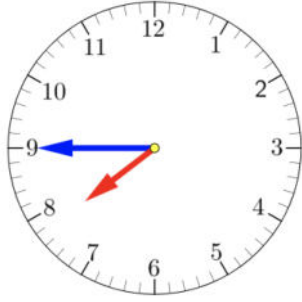
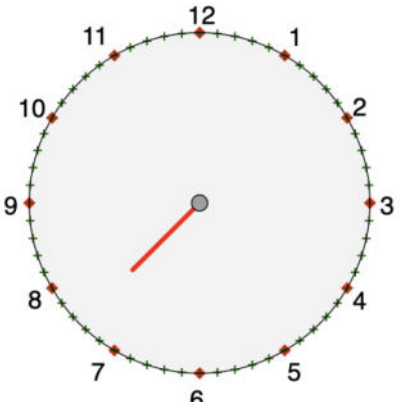
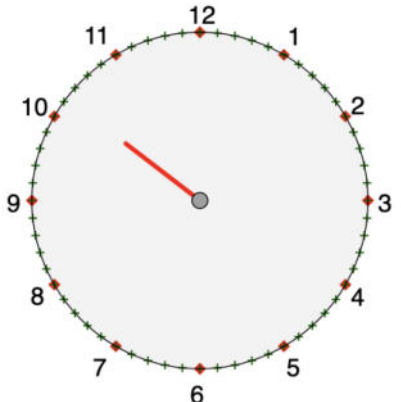
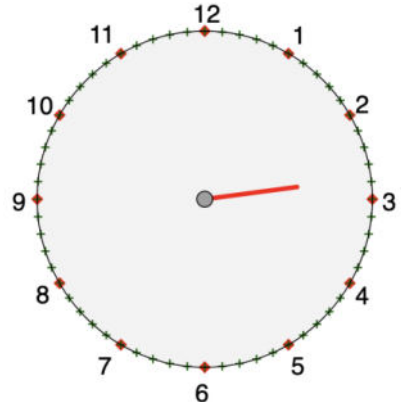


NOTE TO TEACHER: Use this GeoGebra applet to create different clock times. Then delete this note.
<https://ggbm.at/mfBWNKu3>

1. Write the time shown on each clock.

 _____	 _____
 _____	 _____

2. Draw the minute hand on the clock to show the correct time.

 Half past 7	 10:15	 A quarter to 3
--	---	---

3. Draw the hour and minute hands on the clocks to match the correct time.

1:50



7:35



4. Choose whether the activity below would happen in a.m. or p.m. Circle a.m. or p.m.

a. Arriving at school	a.m. / p.m.
b. Playing outside after school	a.m. / p.m.
c. Doing homework	a.m. / p.m.
d. Eating breakfast	a.m. / p.m.

5. How much time has passed?

a. 4:00 p.m. to 9:00 p.m. _____

b. 2:30 a.m. to 4:30 a.m. _____

c. 10:00 a.m. to 3:30 p.m. _____

6. Claire slept from 9 p.m. to 5:30 a.m. How many hours did Claire sleep? _____ hours