





1. Write the time shown on each clock.







2. Draw the hour and minute hands to show the time.

8:20



5:55



1:50	7:35
	
2:15	10:30
	

3. Choose whether the activity below would happen in a.m. or p.m.

a. Arriving at school	a.m. / p.m.
b. Playing outside after school	a.m. / p.m.
c. Doing homework	a.m. / p.m.
d. Eating breakfast	a.m. / p.m.

4. How much time has passed?

a. 4:00 p.m. to 9:00 p.m. \_\_\_\_\_

b. 2:30 a.m. to 4:30 a.m. \_\_\_\_\_

5. Claire slept from 9 p.m. to 5:30 a.m. How many hours did Claire sleep? \_\_\_\_\_ hours