
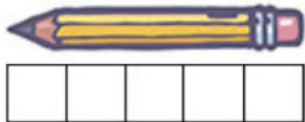


Gr2 Mod2 Topic A Quiz


1. Sara lined up her centimeter cubes to find the length of the picture of the paintbrush. Sara thinks the picture of the paintbrush is 14 centimeter cubes long.



Is her answer correct? Explain why or why not.



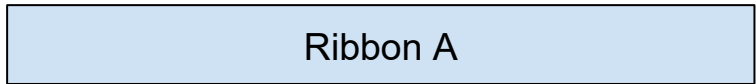
2. The pencil is \_\_\_\_\_ centimeter cubes long.



3. The clothespin is \_\_\_\_\_ centimeter cubes long.

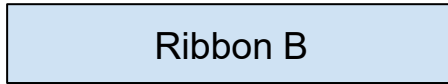
4. How long is ribbon A?

\_\_\_\_\_centimeters long




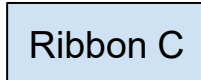
5. How long is ribbon B?

\_\_\_\_\_centimeters long



6. How long is ribbon C?

\_\_\_\_\_centimeters long



7. Which ribbon is the shortest?

\_\_\_\_\_

9. What is the total length of ribbons A and B?

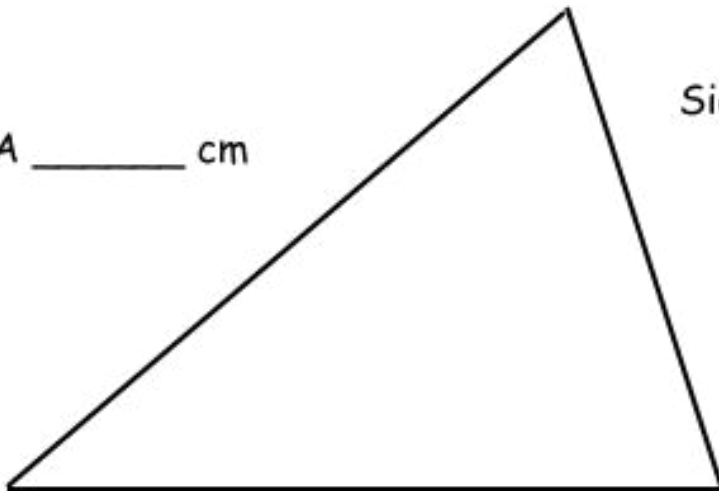
8. Which ribbon is the longest?

\_\_\_\_\_

Use a centimeter ruler for the problems below.

Side A \_\_\_\_\_ cm

Side C \_\_\_\_\_ cm



Side B \_\_\_\_\_ cm

10. Which side is the longest? \_\_\_\_\_

11. How much longer is Side A than Side C ? \_\_\_\_\_

Show how you got your answer.

12. Side A and Side B are the same length.

What is the length of Sides A and B together? \_\_\_\_\_cm

Show how you got your answer.