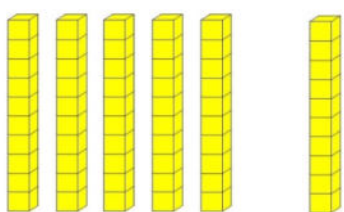
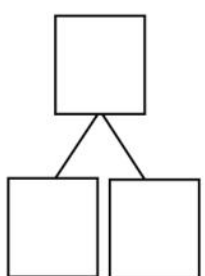


Grade 1 Module 6 Topic C Quiz

1. Complete the number bonds and number sentences to match the picture.

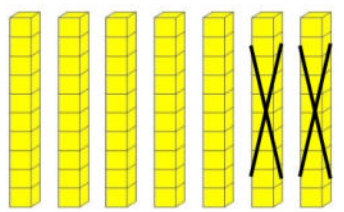
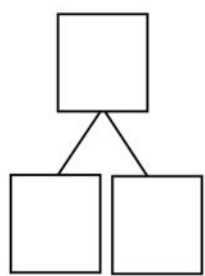
a.

_____ tens + _____ tens = _____ tens

_____ + _____ = _____

b.

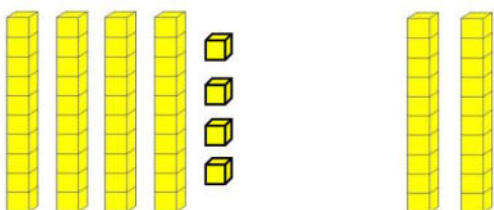
_____ tens - _____ tens = _____ tens

_____ - _____ = _____

2. Fill in the missing numbers.

a. $40 + 30 =$ _____	b. $60 - 20 =$ _____	c. $30 +$ _____ $= 60$	d. $90 -$ _____ $= 20$
----------------------	----------------------	------------------------	------------------------

3. Complete the number sentence to match the picture.



_____ + _____ = _____

4. Solve using quick tens and ones.

a. $46 + 30 =$ _____

b. $50 + 32 =$ _____

5. Solve using number bonds.

a. $57 + 21 =$ _____

b. $44 + 53 =$ _____

6. Solve using quick tens and ones.

a. $21 + 39 =$ _____

b. $38 + 46 =$ _____

7. Solve using number bonds. Use the Make 10 strategy, skip counting by 10 strategy, or adding 10's to 10's and 1's to 1's strategy.

a. $29 + 48 =$ _____

b. $27 + 67 =$ _____