





Gr1 Mod5 Topic C Quiz



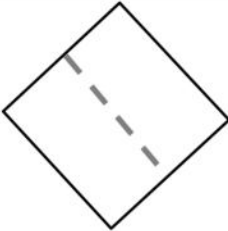
1. Are the shapes divided into equal parts? Write Y for yes or N for no. If the shape has equal parts, write how many equal parts on the line. The first one has been done for you.

| | | |
|--|--|--|
| <p>a.</p>  _____ | <p>b.</p>  _____ | <p>c.</p>  _____ |
|--|--|--|

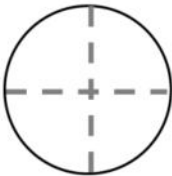
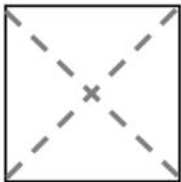

2. Draw 2 lines to make 4 equal parts. What smaller shapes did you make?

| | |
|---|------------------------|
|  | <p>I made 4 _____.</p> |
|---|------------------------|

3. Are the shapes divided into halves? Write yes or no.

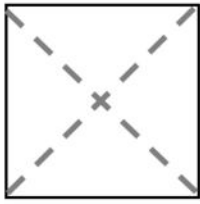
| | | |
|--|--|--|
| <p>a.</p>  _____ | <p>b.</p>  _____ | <p>c.</p>  _____ |
|--|--|--|

4. Are the shapes divided into quarters? Write yes or no.

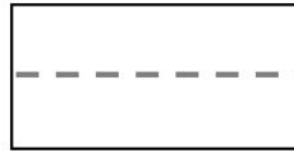
| | | |
|--|--|--|
| <p>a.</p>  _____ | <p>b.</p>  _____ | <p>c.</p>  _____ |
|--|--|--|

5.

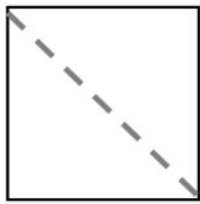
Color 1 fourth of this square.



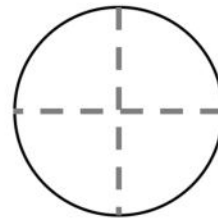
Color half of this rectangle.



Color half of this square.

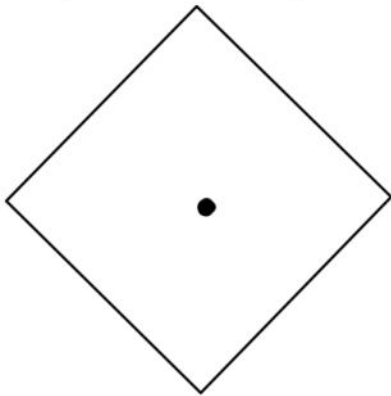


Color a quarter of this circle.



6. Color part of the shape to match its label. Circle the phrase that would make the statement true.

One quarter of the square



is bigger than
is smaller than
is the same size as

one half of the square.

