


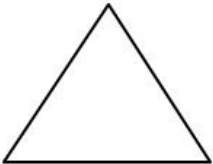
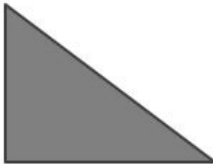








Gr1 Mod5 Topic A Quiz


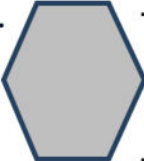
1. How many corners and straight sides does each of the shapes below have?

<p>a.</p>  <p>_____ corners</p> <p>_____ straight sides</p>	<p>b.</p>  <p>_____ corners</p> <p>_____ straight sides</p>	<p>c.</p>  <p>_____ corners</p> <p>_____ straight side</p>
--	--	---

2. Look at the sides and corners of the shapes in each row. Circle the shapes that have the same number of straight sides or the same kind of corner.


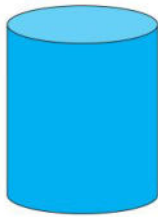
<p>a.</p>    
<p>b.</p>    

3. Is the shape a square? If it is, write YES on the line. If it is not, explain on the line why it is not a square.

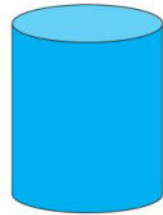
<p>a.</p>  <p>_____</p> <p>_____</p>	<p>b.</p>  <p>_____</p> <p>_____</p>
---	--

4.

a. Circle all the cylinders.



b. Circle all the rectangular prisms.



c. Circle all the cones.

