

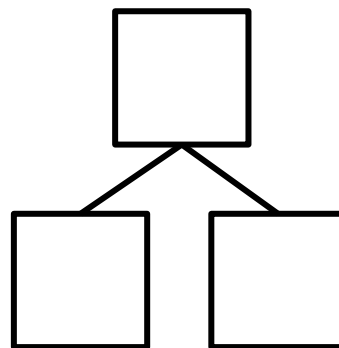
Gr1 Mod4 Topic C Quiz

Complete the number bonds and number sentences.



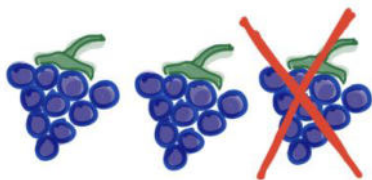
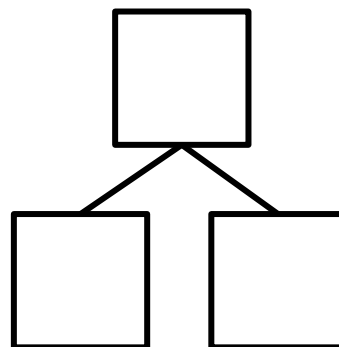
$$1 \text{ ten} + 1 \text{ ten} = \underline{\hspace{2cm}} \text{ tens}$$

$$\underline{\hspace{2cm}} + \underline{\hspace{2cm}} = \underline{\hspace{2cm}} 20$$



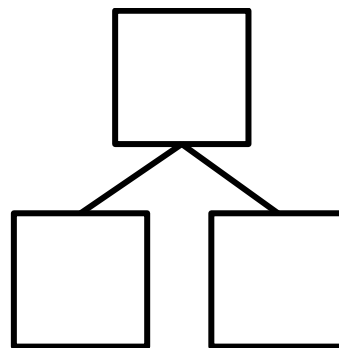
$$\underline{\hspace{2cm}} \text{ tens} = \underline{\hspace{2cm}} \text{ tens} + \underline{\hspace{2cm}} \text{ ten}$$

$$\underline{\hspace{2cm}} = \underline{\hspace{2cm}} + \underline{\hspace{2cm}}$$



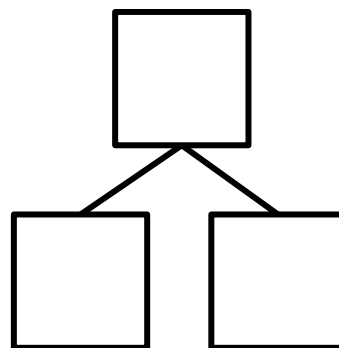
$$\underline{\hspace{2cm}} \text{ tens} - \underline{\hspace{2cm}} \text{ ten} = \underline{\hspace{2cm}} \text{ tens}$$

$$\underline{\hspace{2cm}} - \underline{\hspace{2cm}} = \underline{\hspace{2cm}}$$




$$\underline{\hspace{2cm}} \text{ tens} - \underline{\hspace{2cm}} \text{ ten} = \underline{\hspace{2cm}} \text{ tens}$$

$$\underline{\hspace{2cm}} - \underline{\hspace{2cm}} = \underline{\hspace{2cm}}$$



Complete the number sentences. Use quick tens, the arrow way, or coins to show your thinking.

$$28 + 10 = \underline{\hspace{2cm}}$$



$$14 + 20 = \underline{\hspace{2cm}}$$

