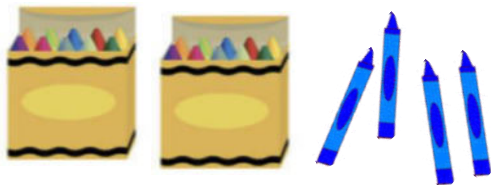



Grade 1 Module 4 Topic B Quiz

1. Write the number of items in each set. Then, circle the set that is greater in number. Write a statement to compare the two sets.





_____ is greater than _____

2. Write the number of items in each set. Then, circle the set that is less in number. Write a statement to compare the two sets.





_____ is less than _____

3. Circle the set of coins that has the greater value.



4. Circle the set of coins that has the less value.



5. Write the numbers in order from greatest to least.

	40	
29		39
	30	

_____ , _____ , _____ , _____

6. Write the numbers in order from least to greatest.

	23	
32		30
	29	










_____ , _____ , _____ , _____

Draw quick tens and ones to show each number. Complete the sentence frames using the phrases from the word bank to compare the two numbers.

is greater than is less than is equal to
--

<p>7.</p> <table> <tr> <td>24</td> <td>15</td> </tr> </table> <p>24 _____ 15</p>	24	15	<p>8.</p> <table> <tr> <td>26</td> <td>32</td> </tr> </table> <p>26 _____ 32</p>	26	32
24	15				
26	32				

Fill in the circles using the symbols $>$, $<$, or $=$ to make true number sentences.

<p>9.</p> <table> <tr> <td>12</td> <td></td> <td>10</td> </tr> </table>	12		10	<p>10.</p> <table> <tr> <td>30</td> <td></td> <td>21</td> </tr> </table>	30		21	<p>11.</p> <table> <tr> <td>42</td> <td></td> <td>24</td> </tr> </table>	42		24
12		10									
30		21									
42		24									