


Fill in the number bond. Complete the sentences.


1.



40 and 6 make _____.

$40 + 6 =$ _____

2.




$30 + 2 =$ _____

2 more than 30 is _____.

Write the tens and ones. Then write an addition sentence to add the tens and ones.

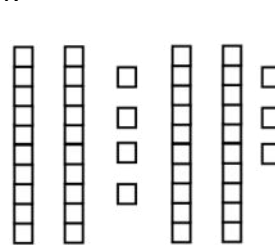
3.



Tens	Ones

_____ + 3 = _____

4.





Tens	Ones

_____ = 40 + _____

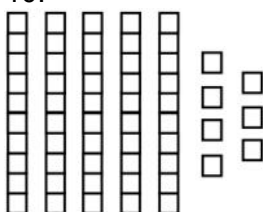
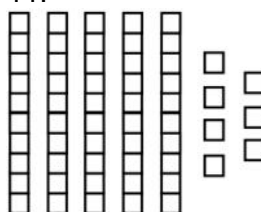
Match.

- | | | |
|----|----------------|----------|
| 5. | 3 tens | $8 + 20$ |
| 6. | 2 tens 8 ones | 30 |
| 7. | 2 more than 50 | $50 + 2$ |

Draw 1 more or 10 more. Then write the number (the sum).

<p>8.</p>  <p>1 more than 25 is _____.</p>	<p>9.</p>  <p>10 more than 25 is _____.</p>
---	--

Cross off to show 1 less or 10 less. Then write the number (the difference).

<p>10.</p>  <p>1 less than 57 is _____.</p>	<p>11.</p>  <p>10 less than 57 is _____.</p>
--	--

Draw quick tens and ones to show the number 42. Then draw 1 more or 10 more and write the number (the sum).



<p>12.</p> <p>1 more than 42 is _____.</p>	<p>13.</p> <p>10 more than 42 is _____.</p>
--	---

Draw quick tens and ones to show the number 36. Then cross off to show 1 less or 10 less and write the number (the difference).





<p>14.</p> <p>1 less than 36 is _____.</p>	<p>15.</p> <p>10 less than 36 is _____.</p>
--	---

Fill in the number of dimes and pennies in the chart. Then fill in the blanks.

16.	17.
-----	-----

 <table border="1" style="margin-left: auto; margin-right: auto; text-align: center;"> <tr> <th style="padding: 5px;">Dimes</th> <th style="padding: 5px;">Pennies</th> </tr> <tr> <td style="height: 40px;"></td> <td style="height: 40px;"></td> </tr> </table> <p style="text-align: center; margin-top: 20px;">_____ tens _____ ones = _____</p>	Dimes	Pennies			 <table border="1" style="margin-left: auto; margin-right: auto; text-align: center;"> <tr> <th style="padding: 5px;">Dimes</th> <th style="padding: 5px;">Pennies</th> </tr> <tr> <td style="height: 40px;"></td> <td style="height: 40px;"></td> </tr> </table> <p style="text-align: center; margin-top: 20px;">_____ tens _____ ones = _____</p>	Dimes	Pennies		
Dimes	Pennies								
Dimes	Pennies								

Draw or cross off 10 cents or 1 cent. Then fill in the blank.

<p>18.</p>  <p style="text-align: center; margin-top: 20px;">10 more than 21 is _____.</p>	<p>19.</p>  <p style="text-align: center; margin-top: 20px;">1 less than 36 is _____.</p>
<p>20.</p>  <p style="text-align: center; margin-top: 20px;">10 less than 43 is _____.</p>	<p>21.</p>  <p style="text-align: center; margin-top: 20px;">1 more than 64 is _____.</p>