

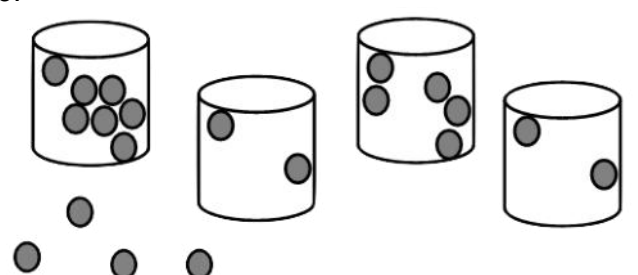

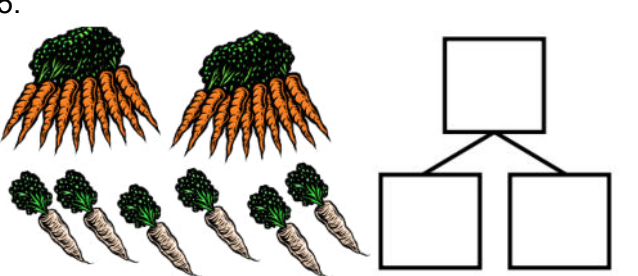
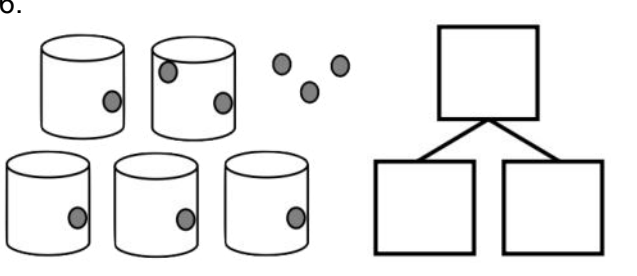


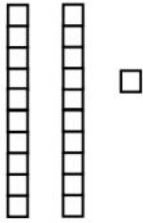
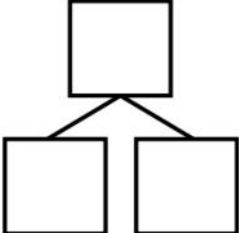
Circle groups of 10. Write the total number.

<p>1.</p>  <p style="text-align: center;">There are _____ smiley faces.</p>	<p>2.</p>  <p style="text-align: center;">There are _____ hearts.</p>
<p>3.</p>  <p style="text-align: center;">There are _____ marbles.</p>	<p>4.</p>  <p style="text-align: center;">There are _____ apples.</p>

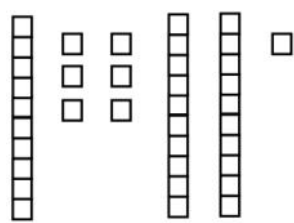
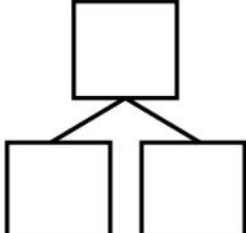
Make a number bond to show tens and ones.

<p>5.</p>  <div style="text-align: right; margin-top: 20px;"> <div style="border: 1px solid black; width: 100px; height: 40px; margin: 0 auto;"></div> <div style="display: flex; justify-content: space-around; width: 100%;"> <div style="border: 1px solid black; width: 100px; height: 40px;"></div> <div style="border: 1px solid black; width: 100px; height: 40px;"></div> </div> </div>	<p>6.</p>  <div style="text-align: right; margin-top: 20px;"> <div style="border: 1px solid black; width: 100px; height: 40px; margin: 0 auto;"></div> <div style="display: flex; justify-content: space-around; width: 100%;"> <div style="border: 1px solid black; width: 100px; height: 40px;"></div> <div style="border: 1px solid black; width: 100px; height: 40px;"></div> </div> </div>
--	---

7.

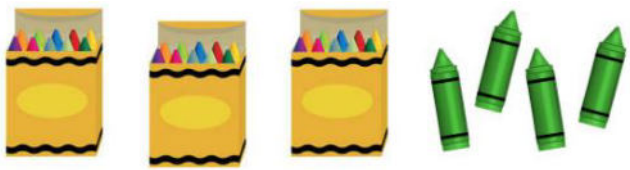



8.


Write the tens and ones.

9.



_____ tens _____ ones = 34


10.



16 = _____ ten _____ ones

Write the tens and ones. Complete the statement.


11.



Tens	Ones

There are _____ roses.

12.




Tens	Ones

There are _____ peanuts.

Write the missing numbers.


13.

Tens	Ones

 17


14.

Tens	Ones
1	0




15.

Tens	Ones

 20


16.

Tens	Ones

 6

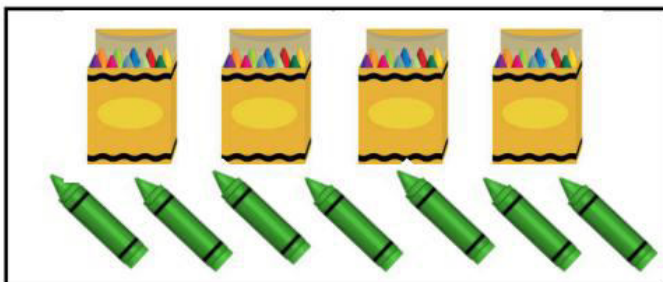
Draw a line to match the picture to the place value chart that shows the correct tens and ones.

17.



Ten	One
4	7

18.



Ten	One
1	3


19.



Ten	One
2	0


Count as many tens as you can. Complete each statement.

20.



_____ tens _____ ones is the same as
_____ ones.

21.



_____ tens _____ ones is the same as
_____ ones

Draw a line to match.

22.

3 tens

26 ones

23.

3 tens 6 ones

30 ones

24.

Ten	One
2	6

53 ones

25.

3 ones 5 tens

