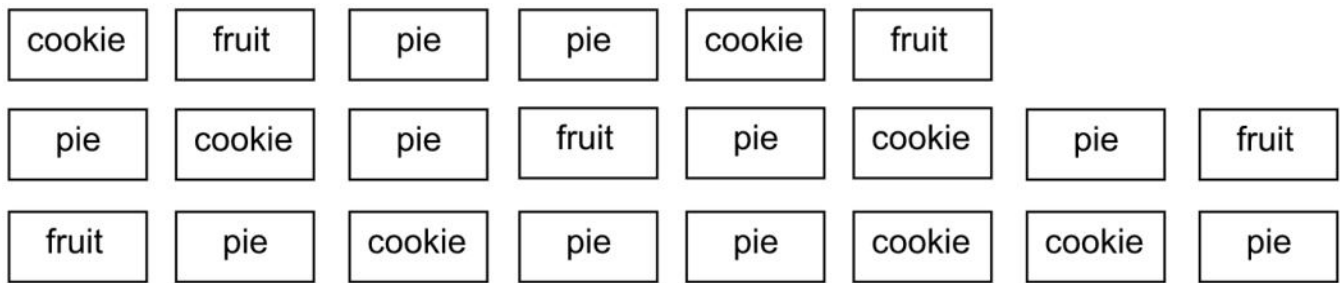


Grade 1 Module 3 Topic D Quiz

Students voted on their favorite dessert. Organize the data and fill in the graph. Then answer the questions.

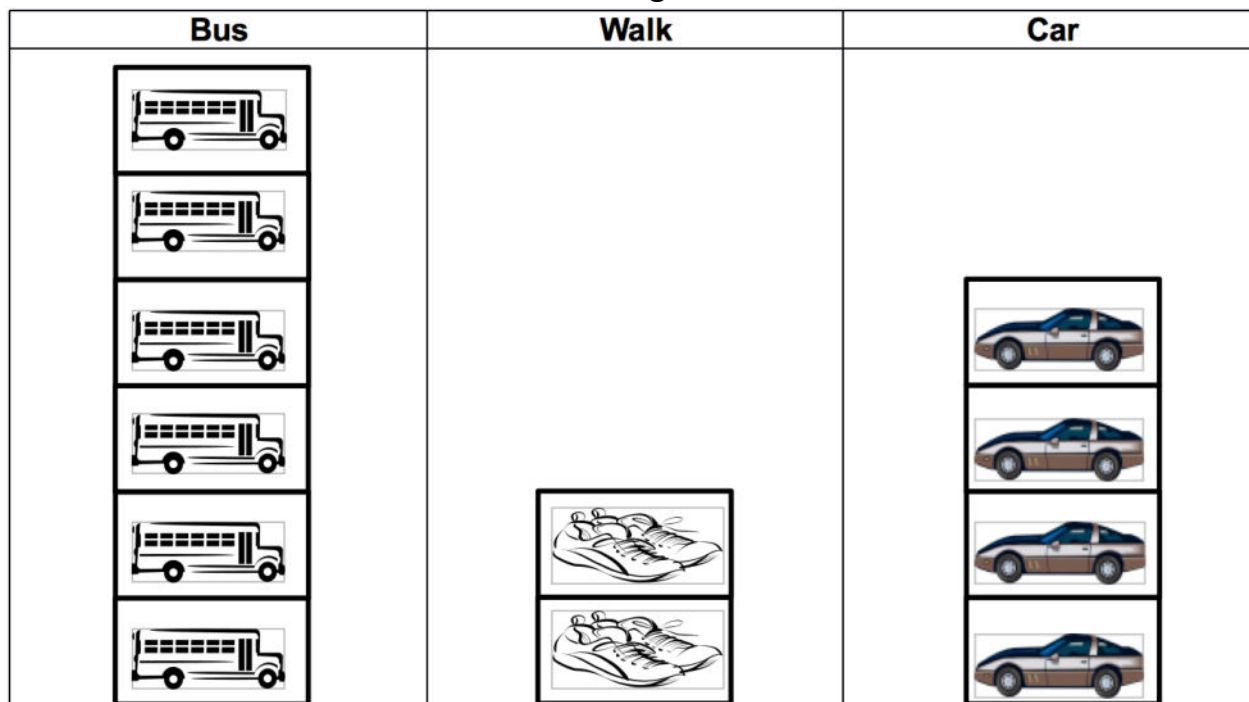


Dessert	Tally Marks of Votes	Number of Votes
cookie		
fruit		
pie		

1. How many students chose pie? _____ students
2. Which dessert was the least favorite? _____
3. How many more students liked cookies than fruit? _____ students
4. What is the total number of students that liked cookies **and** pie? _____ students
5. Which two items did a total of 15 students like?
_____ and _____
6. Write an addition sentence that shows how many students voted: _____

Use the graph to answer the questions. Fill in the blanks and write the number sentence.

How do we go home?



7. How many more students rode in a car than walked?

_____ more students rode in a car than walked.

Number sentence: _____

8. How many fewer students rode in a car than on the bus?

_____ fewer students rode in a car than on the bus.

Number sentence: _____

9. How many more students rode the bus than walked?

_____ more students rode the bus than walked.

Number sentence: _____

10. How many students went home? _____ students


11. If 4 more students rode the bus home, how many students would ride the bus home?

_____ students

Students voted on their choice of field trip. Organize the data and fill in the graph. Then answer the questions.

Field Trip Choice ☐ = 1 student

<input checked="" type="checkbox"/> Zoo	
<input type="checkbox"/> Park	
<input checked="" type="checkbox"/> Movies	



12. Which choice had the most votes? _____
13. Which choice had the fewest votes? _____
14. Write a number sentence to show how many total students voted: _____
15. Write a number sentence to show how many **fewer** students chose the movies than the zoo:
- _____