


Grade 1 Module 3 Topic C Quiz

Measure the length of each object with your LARGE paper clips.




1. Fill in the chart with your measurements.

Object	Measurement
apple	
pineapple	
banana	

2. List your objects from **shortest** to **longest**.

- a. _____
- b. _____
- c. _____

Measure the length of each object with your SMALL paper clips.




3. Fill in the chart with your measurements.

Object	Measurement
fork	
cup	
bowl	
pot	


4. List your objects from **shortest** to **longest**.

- a. _____
- b. _____
- c. _____
- d. _____

5. Measure each object with centimeter cubes. Answer the questions that go with the pictures.



Leaf A is _____ centimeters long.



Leaf B is _____ centimeters long.

- a. How much longer is Leaf A than Leaf B?

Leaf A is _____ centimeters longer than Leaf B.

- b. How much shorter is Leaf B than Leaf A?

Leaf B is _____ centimeters shorter than Leaf A.

For problems 6 and 7, draw a picture to model the problem. Write a statement to solve.

6. Andy wants to draw a line that is 12 paper clips long. If his line is already 9 paper clips long, **how many more** paper clips does he need?

7. Maria's butterfly grew 8 centimeters. Sara's butterfly grew 15 centimeters. **How much less** did Maria's butterfly grow than Sara's butterfly?