

## Gr1 Mod1 Topic C Quiz

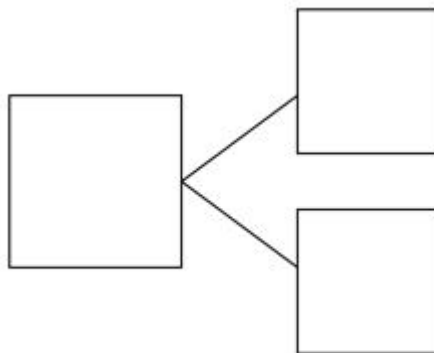
1. Use the picture to tell a math story.



Write a number sentence to tell the story.

\_\_\_\_\_ + \_\_\_\_\_ = \_\_\_\_\_ chicks

Write a number bond to match your story.



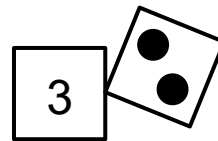

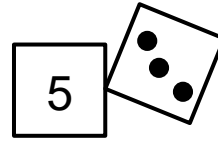

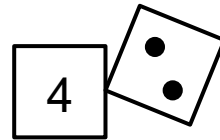

2. Grace has 2 balls and gets 3 balls. How many balls does she have in all?

Draw to show the story.




\_\_\_\_\_ balls + \_\_\_\_\_ balls = \_\_\_\_\_ balls

3. Draw a line from the picture to the matching 5-group cards.



4. There are 4 big crayons and 2 small crayons.

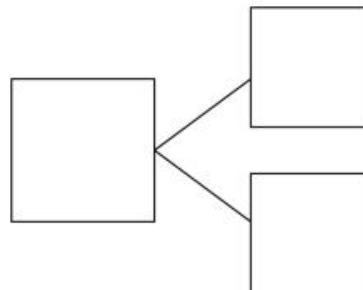
Draw to show how many crayons there are in all.



Write a number sentence to show what you did.

\_\_\_\_\_ + \_\_\_\_\_ = \_\_\_\_\_ crayons

Write a number bond to match your story.



5. Draw more bears to show that Pat has 7 bears total.

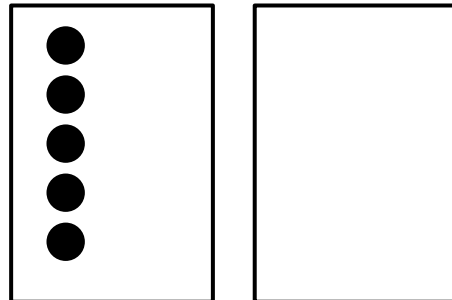


Write a number sentence to show how many bears you drew.

$$\underline{\hspace{2cm}} + \underline{\hspace{2cm}} = \underline{\hspace{2cm}} \text{ bears}$$

6. Use the 5-group cards to count on to find the missing number in the number sentence.

$$8 = 5 + \underline{\hspace{2cm}}$$



7. Fill in the missing number.



$$5 + \underline{\hspace{2cm}} = 9$$



8. I had 4 apples. My mom gave me some more. Then I had 10 apples.



How many apples did my mom give me?

\_\_\_\_\_ apples + \_\_\_\_\_ apples = \_\_\_\_\_ apples

Mom gave me \_\_\_\_\_ apples.

9. Draw a picture to match the number sentence. Write the number bond to match the story.

$$4 + 2 = \underline{\hspace{2cm}}$$

