


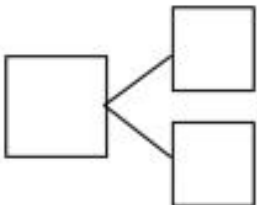
# Gr1 Mod1 Topic B Quiz

1. Use the soccer balls to help you write the expressions and number bonds to show 6.



\_\_\_\_\_ + \_\_\_\_\_

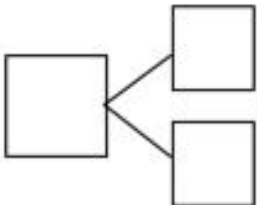
\_\_\_\_\_ + \_\_\_\_\_



2. Show another way to make 6.

\_\_\_\_\_ + \_\_\_\_\_


\_\_\_\_\_ + \_\_\_\_\_



3. Color in two dice that make 7 together. Then, fill in the number bond and number sentences to match the dice you colored.

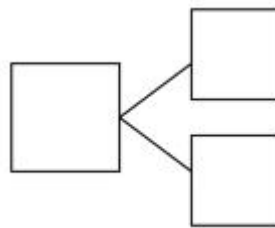
<div> <div>□</div> <div>○</div> <div>□</div> <div>-</div> <div>7</div> </div> <div> <div>□</div> <div>○</div> <div>□</div> <div>-</div> <div>7</div> </div>	<div> <div>7</div> <div>-</div> <div>□</div> <div>○</div> <div>□</div> </div> <div> <div>7</div> <div>-</div> <div>□</div> <div>○</div> <div>□</div> </div>

4. Use the domino to help you write the expressions and number bond to show 7.

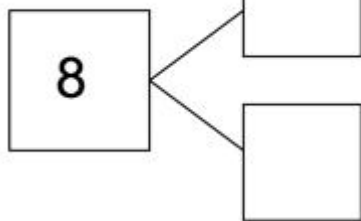
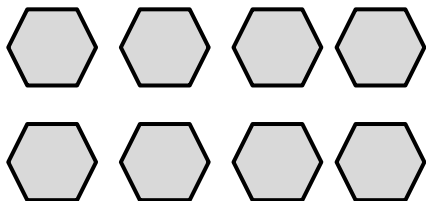


\_\_\_\_\_ + \_\_\_\_\_

\_\_\_\_\_ + \_\_\_\_\_



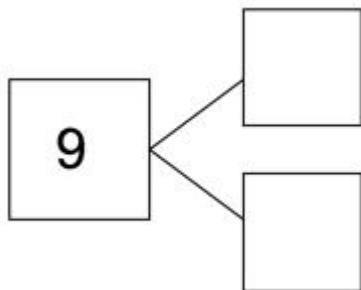
5. Circle 6. How many more does 6 need to make 8? Finish the number bond and write the expressions.



\_\_\_\_\_ + \_\_\_\_\_

\_\_\_\_\_ + \_\_\_\_\_


6. Circle 7. How many more does 7 need to make 9? Finish the number bond and write the expressions.




\_\_\_\_\_ + \_\_\_\_\_

\_\_\_\_\_ + \_\_\_\_\_

7. Color the pairs of numbers that make 9.



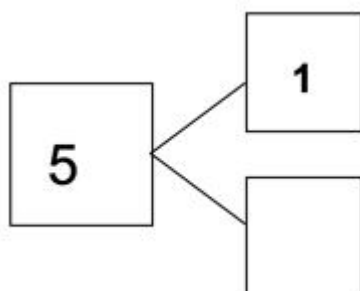
8. There are 10 wagons in the playground. Some are red and some are blue. Show 2 different ways to make 10 using either number bonds or expressions.



--	--

Complete the number bonds to make 5.

9.



10.

