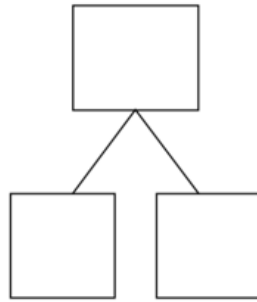

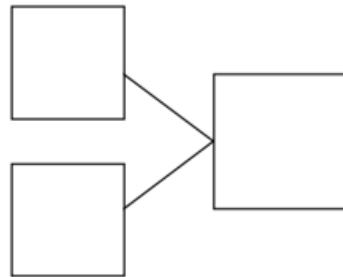



Gr1 Mod1 Topic A Quiz

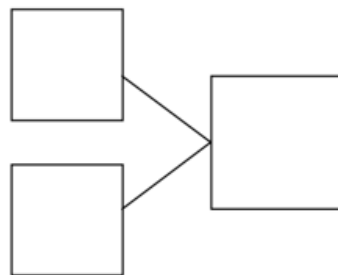
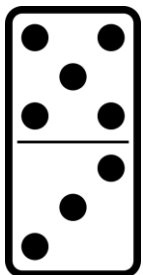
1. Circle 5 and make a number bond.



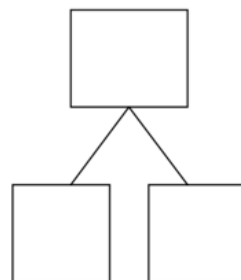

2. Make a number bond that shows 5 as one part.



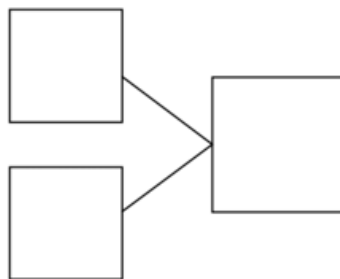

3. Make a number bond for the domino.



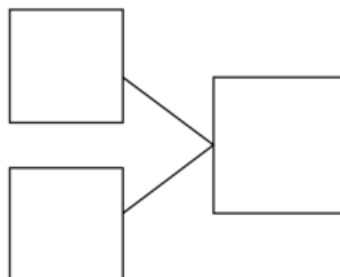
4. Circle 5 and count. Then make a number bond to match.



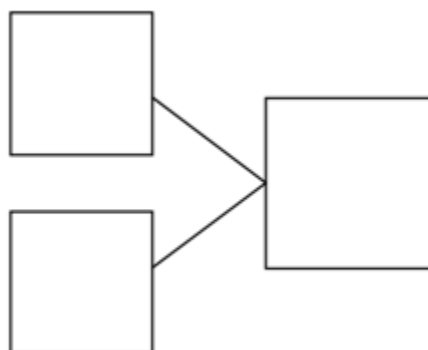
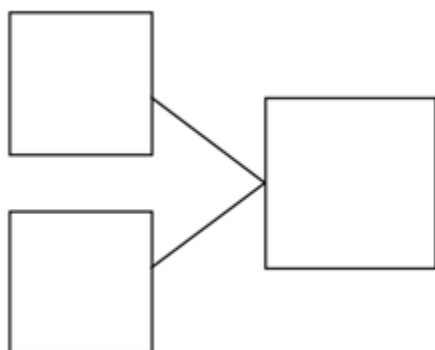
5. Circle 2 parts you see. Then make a number bond to match.




6. Circle 2 parts you see. Then make a number bond to match.



7. How many apples do you see? Write 2 different number bonds to show different ways to break apart the total.

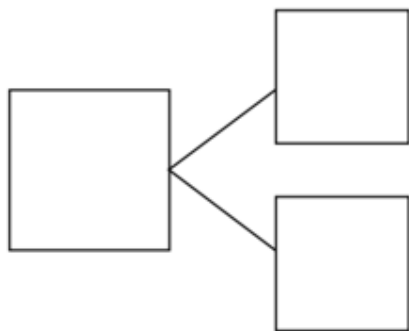


8. How many objects do you see? Draw one more. How many objects are there now?




1 more than 8 is _____.

$$8 + 1 = \underline{\hspace{2cm}}$$

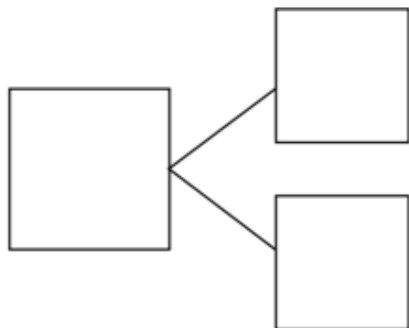


9. How many objects do you see? Draw one more. How many objects are there now?



_____ is 1 more than 6.

$$6 + 1 = \underline{\hspace{2cm}}$$



10. Imagine adding one more balloon to the picture. Then write the numbers to match how many balloons there will be.



1 more than 5 is _____.

$$5 + 1 = \underline{\hspace{2cm}}$$

