




Sprints

GRADE K MODULE 6

Number Correct:




Name _____

Date _____

Write the missing number.

1.	$2 + 1 = \square$	11.	$\square = 3 + 2$
2.	$1 + 1 = \square$	12.	$1 + 3 = \square$
3.	$1 + 4 = \square$	13.	$\square = 2 + 2$
4.	$3 + 1 = \square$	14.	$\square = 1 + 2$
5.	$2 + 2 = \square$	15.	$1 + 4 = \square$
6.	$2 + 3 = \square$	16.	$\square = 2 + 3$
7.	$1 + 2 = \square$	17.	$\square = 5 - 1$
8.	$4 + 1 = \square$	18.	$5 - 2 = \square$
9.	$3 + 2 = \square$	19.	$1 + 0 = \square$
10.	$1 + 3 = \square$	20.	$5 + 0 = \square$

Number Correct:




Name _____

Date _____

Write the missing number.

1.	$2 - 1 = \square$	11.	$\square = 4 - 2$
2.	$4 - 1 = \square$	12.	$5 - 3 = \square$
3.	$5 - 1 = \square$	13.	$\square = 3 - 1$
4.	$3 - 1 = \square$	14.	$\square = 5 - 2$
5.	$3 - 2 = \square$	15.	$4 - 1 = \square$
6.	$4 - 2 = \square$	16.	$\square = 5 - 4$
7.	$5 - 3 = \square$	17.	$\square = 5 - 1$
8.	$5 - 2 = \square$	18.	$5 - 1 = \square$
9.	$4 - 3 = \square$	19.	$1 - 0 = \square$
10.	$5 - 4 = \square$	20.	$5 - 5 = \square$

Number Correct:




Name _____

Date _____

Write the missing number.

1.	$2 + 1 = \square$	11.	$3 + 2 = \square$
2.	$2 - 1 = \square$	12.	$3 - 2 = \square$
3.	$3 + 1 = \square$	13.	$4 + 0 = \square$
4.	$3 - 1 = \square$	14.	$4 - 0 = \square$
5.	$4 + 1 = \square$	15.	$5 + 0 = \square$
6.	$4 - 1 = \square$	16.	$5 - 0 = \square$
7.	$1 + 1 = \square$	17.	$5 - 5 = \square$
8.	$1 - 1 = \square$	18.	$4 + 1 = \square$
9.	$2 + 2 = \square$	19.	$5 - 4 = \square$
10.	$2 - 2 = \square$	20.	$5 - 1 = \square$

Number Correct:



Name _____

Date _____

Write the missing number.

1.	$2 + 1 = \square$	11.	$\square = 1 + 2$
2.	$4 + 1 = \square$	12.	$5 + 0 = \square$
3.	$5 - 1 = \square$	13.	$\square = 3 - 1$
4.	$3 + 1 = \square$	14.	$\square = 2 + 2$
5.	$3 + 2 = \square$	15.	$4 - 1 = \square$
6.	$4 - 2 = \square$	16.	$\square = 5 - 4$
7.	$5 - 3 = \square$	17.	$\square = 5 - 1$
8.	$5 - 2 = \square$	18.	$3 + 0 = \square$
9.	$2 + 3 = \square$	19.	$1 - 0 = \square$
10.	$5 - 4 = \square$	20.	$5 - 5 = \square$

Name _____ Date _____

Add. Color the blocks using the code for the total.

1—RED

2—ORANGE

3—YELLOW

4—GREEN

5—BLUE

$0 + 1$	$1 + 1$	$2 + 1$	$3 + 1$	$4 + 1$
$0 + 2$	$1 + 2$	$2 + 2$	$3 + 2$	
$0 + 3$	$1 + 3$	$2 + 3$		
$0 + 4$	$1 + 4$			
$0 + 5$				

color by answer addition

Name _____ Date _____


Subtract. Color the blocks using the code for the difference.

0—PURPLE 1—RED 2—ORANGE 3—YELLOW
 4—GREEN 5—BLUE

1 - 0	2 - 0	3 - 0	4 - 0	5 - 0
1 - 1	2 - 1	3 - 1	4 - 1	5 - 1
	2 - 2	3 - 2	4 - 2	5 - 2
		3 - 3	4 - 3	5 - 3
			4 - 4	5 - 4
				5 - 5

 color by answer subtraction

Number Correct:

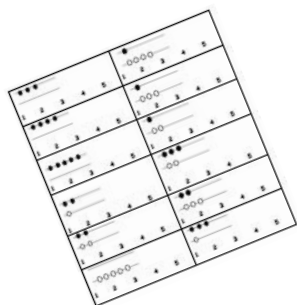
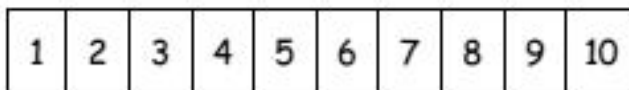


Name _____

Date _____

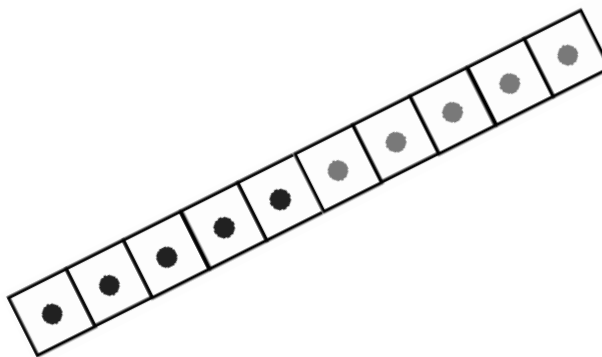
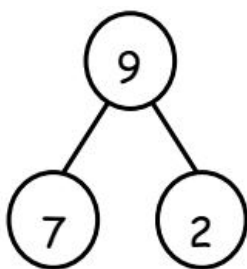
Write the number of dots needed to make 10 dots.

1.		9.	
2.		10.	
3.		11.	
4.		12.	
5.		13.	
6.		14.	
7.		15.	
8.		16.	



I'm Getting Ready for First Grade!

My Math Fluency Kit



Name _____

fluency kit

Name _____


Date _____

My Plan to Get Ready for First Grade Math


This is a picture of someone
who can help me practice.



This is a picture of where I will
practice.



This is ME getting ready for first grade!



fluency kit



Name _____

My Sprint Progress Log

Practice your number sentences and Sprints on your personal white board.
Ask an adult to time you. Keep track of how you improve over the summer.

Date	Time

Are you getting better at your number sentences?

fluency kit