



RSU 57

- Waterboro
- Alfred
- Lyman
- Line
- Shapleigh
- Massabesic Middle
- Massabesic High

Continuous Learning LEARNING MENUS

MATH

LITERACY

SPECIALS

Printables
Week 2



RSU 57

- Waterboro
- Alfred
- Lyman
- Line
- Shapleigh
- Massabesic Middle
- Massabesic High

MATH

Printables
Week 1

Name: _____

One-Digit Addition (A)

$2 + 8 =$

$8 + 7 =$

$6 + 4 =$

$2 + 7 =$

$2 + 4 =$

$9 + 7 =$

$3 + 7 =$

$4 + 4 =$

$2 + 6 =$

$9 + 6 =$

$4 + 7 =$

$9 + 2 =$

$7 + 5 =$

$3 + 6 =$

$5 + 2 =$

$8 + 2 =$

$8 + 3 =$

$4 + 3 =$

$7 + 9 =$

$4 + 2 =$

$8 + 6 =$

$9 + 3 =$

$6 + 8 =$

$4 + 8 =$

$9 + 9 =$

$7 + 7 =$

$2 + 9 =$

$9 + 5 =$

$5 + 7 =$

$4 + 5 =$

$8 + 4 =$

$2 + 2 =$

$7 + 6 =$

$6 + 6 =$

$8 + 8 =$

$6 + 9 =$

$2 + 3 =$

$8 + 5 =$

$9 + 8 =$

$5 + 8 =$

$7 + 3 =$

$4 + 9 =$

$8 + 9 =$

$6 + 7 =$

$6 + 3 =$

$3 + 5 =$

$3 + 8 =$

$5 + 5 =$

$3 + 3 =$

$6 + 2 =$

Score / 50

Name: _____

Name: _____

Name: _____

Name: _____

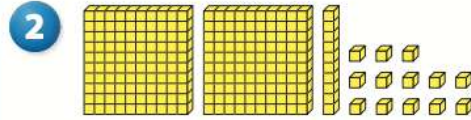
- 1 Write each number in expanded form.

26 _____

54 _____

77 _____

92 _____



What number do the base-10 blocks show? _____

Use base-10 shorthand to show the number another way.



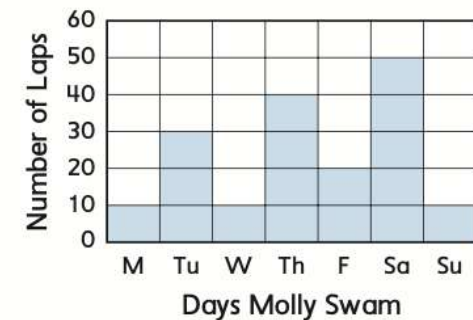
- 3 Last year a bamboo plant was 17 feet tall. It grew 10 feet this year. How tall is it now?

Number model:

Answer: _____ feet



- 4 What day did Molly swim the most laps?



- 5 Sakura has 13 stickers. Aneko has 9 stickers. How many more stickers does Sakura have than Aneko? Draw a picture to show what you did to solve this problem.



Answer: _____ stickers



Name: _____

Name _____

Date _____



Rachel picked 9 white flowers and 7 yellow flowers to put in a vase. She then gave 4 of the flowers to her friend. How many flowers are still in the vase?

Which 2 number sentences would you use to solve the problem?

a. $9 + 4$ and $4 + 7$

b. $9 + 7 + 4$ and $20 - 4$

c. $9 + 7$ and $16 - 4$

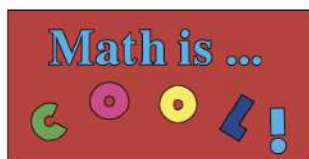
d. $9 + 7$ and $7 + 4$

Solve the problem, then write the answer in a complete sentence.

Name: _____

Name: _____

Name: _____



Number of the Week

572

Write it in expanded notation. _____

What is the
value of the
digit in the
hundreds
place?

What is the
value of the
digit in the
tens place?

What is the
value of the
digit in the
ones place?

+10

-100

+1

-10

+100

-1

Is 572 an **even**
number or an **odd**
number?

What would the **next** even number be after 572? _____

What would the **next** odd number be after 572? _____

Name: _____

Name: _____


Name: _____




RSU 57

- Waterboro
- Alfred
- Lyman
- Line
- Shapleigh
- Massabesic Middle
- Massabesic High

ELITERACY



Printables
Week 1



Name: _____



Name: _____

Retell the PLOT using the five finger retell of the story to someone in your household upload your video to your teacher that is no more than one minute long in Seesaw.



Name: _____

L.2-3

Name of Story	Name of Character
	

Name: _____

Underline the Prefixes **GREEN**.Underline the Suffixes **RED**.Underline the Root Word **BLUE**.

Example:

disagree

misbehave breakable

preschool

careful

unkind

ageless

uncover

darkness

digestion

nearly

precook

Name: _____

Name: _____

Name: _____

Name: _____

Example:

Magnificent

Awesome

Special

Stupendous

All in this together

Beyond brilliant

Excellent

Super students

Intelligent

Courageous

Template

K

I

N

D

N

E

S

S

Name: _____

Name: _____


Name: _____




RSU 57

- Waterboro
- Alfred
- Lyman
- Line
- Shapleigh
- Massabesic Middle
- Massabesic High

ESPECIALS



Printables
Week 1



Name: _____

Family Outdoor Scavenger HuntDirections:

Play as either an individual against others in your family or as a big family team and see how many points you can earn by completing the different challenges. If you complete one, check it off in the column on the right. Set an agreed-upon time limit for the game before you start. At the end of the time limit, add up your points and see how many you/your team earned. Good luck!

100 POINT CHALLENGES	COMPLETED?
Run and touch 5 different colored objects	
Find a stick, lay it on the ground and jump over it 30 times	
Jump up and touch 5 branches that are above your head	
Skip in a circle around 3 different trees	
SUBTOTAL OF POINTS:	

200 POINT CHALLENGES	COMPLETED?
Find a rounded leaf, a pointy leaf and a pine needle	
Spell a word on the ground using whatever materials you can find	
Pick a start line and a finish line and race someone else	
Find 4 different types of plants	
SUBTOTAL OF POINTS:	

300 POINT CHALLENGES	COMPLETED?
Find a 4-leaf clover	
Build a mini log cabin at least 3 inches high using only sticks	
Find 3 different types of bugs	
Throw a small rock at a tree and hit it from distances of 10, 15 and 20 feet	
SUBTOTAL OF POINTS:	

TOTAL POINTS: _____

Name: _____

Name: _____

Name: _____

Name: _____

Name: _____

Name: _____

Name: _____

Name: _____

Name: _____

Name: _____

Name: _____