


Elements Worksheet

Name: _____


Block: _____

DIRECTIONS: READ QUESTIONS CAREFULLY AND FILL IN THE CORRECT ANSWERS

1-5. DRAW AN EXAMPLE IN EACH BOX OF THE FIVE TYPES OF LINE AND LABEL EACH BOX.



6. USE YOUR PENCIL TO CREATE A VALUE SCALE FROM DARK TO LIGHT.




DIRECTIONS: WRITE IN THE CORRECT ANSWER

7. NAME AND DEFINE THE TWO KINDS OF SHAPE. (2pts)

8. NAME AND DEFINE THE TWO KINDS OF FORM. (2pts)

9. DRAW THREE DIFFERENT
GEOMETRIC SHAPES (3PTS)



10. DRAW THREE DIFFERENT ORGANIC
SHAPES (3PTS)



DIRECTIONS: MATCHING, PLACE THE CORRECT LETTER FOR THE DEFINITION NEXT TO THE CORRECT WORD.

11.____ LINE (1PT)

A. ELEMENT OF ART THAT IS TWO-DIMENSIONAL AND ENCLOSSES SPACE. IT HAS LENGTH, AND HEIGHT. THERE ARE TWO KINDS

12.____ SPACE (1PT)

B. ELEMENT OF ART THAT REFERS TO HOW THINGS FEEL OR APPEAR TO FEEL. THERE ARE TWO KINDS MARK. THERE ARE FIVE KINDS.

13.____ TEXTURE (1PT)

C. ELEMENT OF ART THAT DEALS WITH THE RELATIVE DEGREE OF LIGHTNESS AND DARKNESS

14.____ FORM (1PT)

D. ELEMENT OF ART REFERRING TO THE AREA'S ON, AROUND , ABOVE, OR BELOW. THERE ARE TWO KINDS

15.____ SHAPE (1PT)

E. ELEMENTS OF ART DERIVED FROM THE RELECTED LIGHT. THERE ARE THREE PROPERTIES

16.____ VALUE (1PT)

F. ELEMENT OF ART THAT IS THREE-DIMENSIONAL AND ENCLOSSES SPACE

17.____ COLOR (1PT)

G. ELEMENT OF ART THAT IS A CONTINUOUS

Direction: Completion

18.Name the three properties of color

1.

2.

3.

19. Name the element of art that is 2-D

20. Name the element of art that is 3-D