



NEW JERSEY CENTER
FOR TEACHING & LEARNING

PSI[®]

Progressive Science Initiative[®]

This material is made freely available at www.njctl.org and is intended for the non-commercial use of students and teachers. It may not be used for any commercial purpose without the written permission of NJCTL.

We, at the New Jersey Education Association, are proud founders and supporters of NJCTL, an independent non-profit organization with the mission of empowering teachers to lead school improvement for the benefit of all students.





NEW JERSEY CENTER
FOR TEACHING & LEARNING

AP Physics 1

Waves

2017-07-20

www.njctl.org

Table of Contents

Click on the topic to go to that section

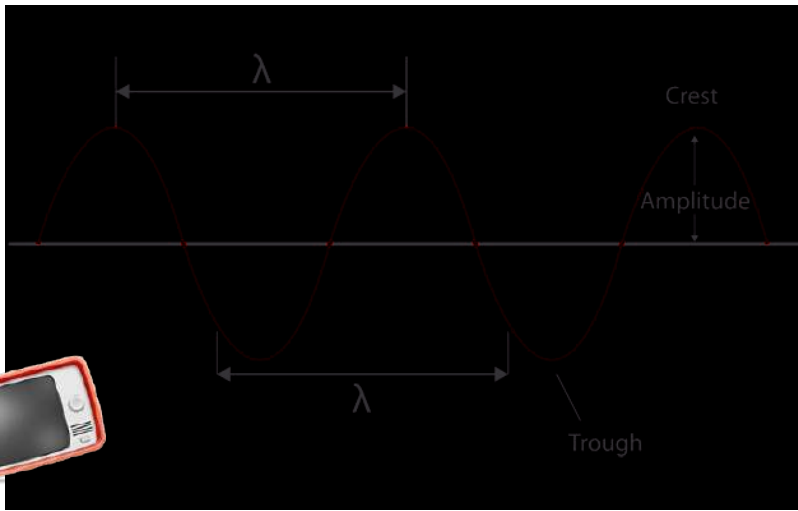

- **Wave Motion**
- **Types of Waves**
- **Interference**
- **Standing Waves on a String**

Wave Motion



[Return to Table
of Contents](#)

Wave Motion




A wave travels along its medium, but the individual particles just move up and down.



Wave Motion

All types of traveling waves transport energy.



Study of a single wave pulse shows that it is begun with a vibration and transmitted through internal forces in the medium.

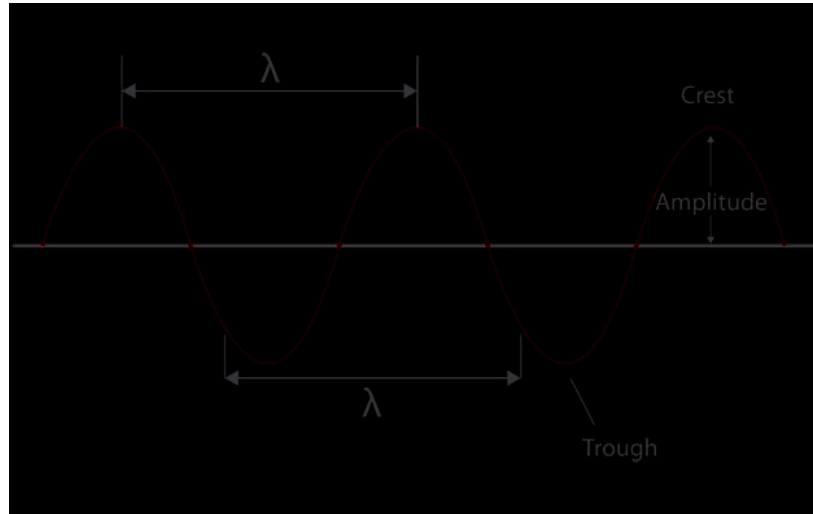
Continuous waves start with vibrations too. If the vibration is SHM, then the wave will be sinusoidal.



Wave Motion

Wave characteristics:

- Amplitude, A
- Wavelength, λ
- Frequency f and period T
- Wave velocity



Wave Motion

Wave velocity is the velocity at which wave crests (or any other part of the wave) moves.

A wave crest travels a distance of one wavelength, λ , in one period, T .

$$v = \frac{\Delta x}{\Delta t} = \frac{\lambda}{T}$$

$$f = \frac{1}{T}$$

Wave velocity is: $v = \lambda f$



1 What is the wave speed if the period of a wave is 4.0 seconds and the wavelength is 1.8 m?

- ☐ A 0.45 m/s
- ☐ B 0.90 m/s
- ☐ C 1.4 m/s
- ☐ D 1.9 m/s
- ☐ E I need help



2 A fisherman noticed that a float makes 30 oscillations in 15 seconds. The distance between consecutive crests is 2.0 m. What is the wave speed?

- ☐ A 2.0 m/s
- ☐ B 4.0 m/s
- ☐ C 15 m/s
- ☐ D 24 m/s
- ☐ E I need help



3 What is the wavelength of a wave traveling with a speed of 6 m/s and a period of 3 s?

- ☐ A 2 m
- ☐ B 6 m
- ☐ C 9 m
- ☐ D 18 m
- ☐ E I need help



Wave Motion

The velocity of a wave depends on the medium through which it is traveling.

The velocity of a wave on a stretch string is related to the tension force in the string and the mass per unit length of the string.

$$v = \sqrt{\frac{F_t}{\mu}}$$

Where F_T is the tension in the string and μ is the mass per unit length (m/L).



4 What happens to the speed of a wave on a string if the tension of the string is increased by a factor of nine?

- ☐ A It is decreased by a factor of 3.
- ☐ B It is decreased by a factor of 9.
- ☐ C It is increased by a factor of 3.
- ☐ D It is increased by a factor of 9.
- ☐ E I need help



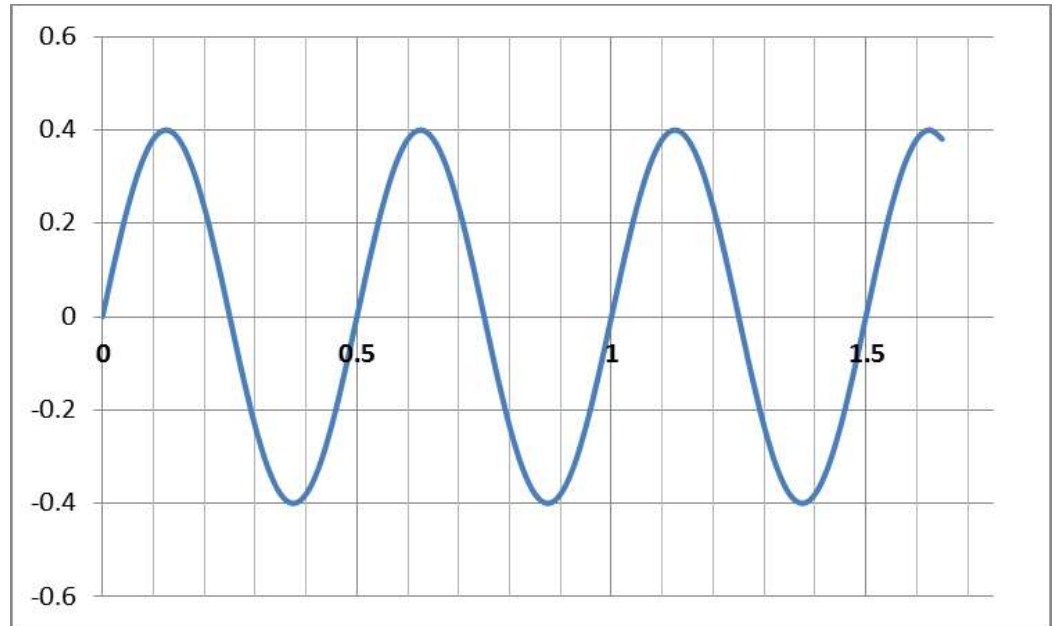
5 What happens to the speed of a wave on a string if the mass per unit length of the string is increased by a factor of nine?

- ☐ A It is decreased by a factor of 3.
- ☐ B It is decreased by a factor of 9.
- ☐ C It is increased by a factor of 3.
- ☐ D It is increased by a factor of 9.
- ☐ E I need help



6 A wave with a wavelength of 30 cm is traveling on a string. The graph below shows the position as a function of time for a point on the string. What is the average speed of the point?

- ☐ A 3.2 m/s
- ☐ B 0.3 m/s
- ☐ C 0.5 m/s
- ☐ D 0.6 m/s
- ☐ E I need help

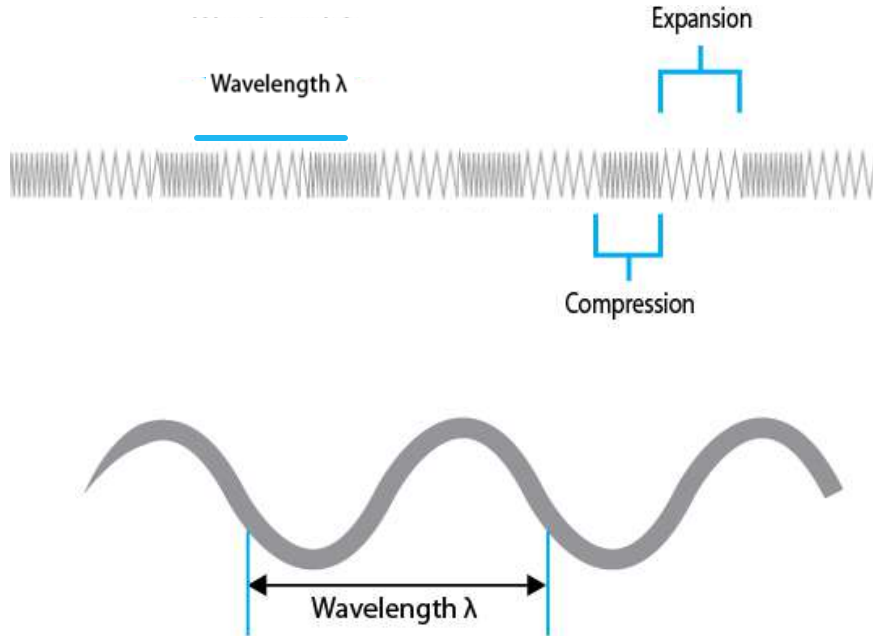


Types of Waves



[Return to Table
of Contents](#)

Types of Waves: Transverse and Longitudinal

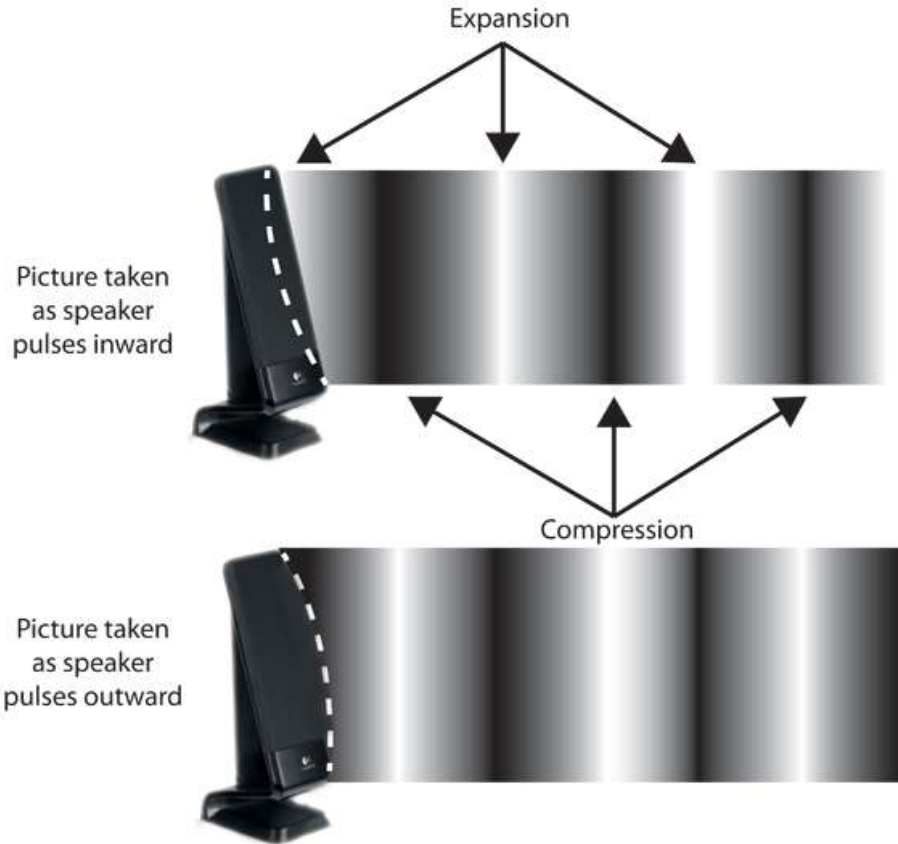


The motion of particles in a wave can either be perpendicular to the wave direction (transverse) or parallel to it (longitudinal).



Types of Waves: Transverse and Longitudinal

Sound waves are longitudinal waves:



Energy Transportation

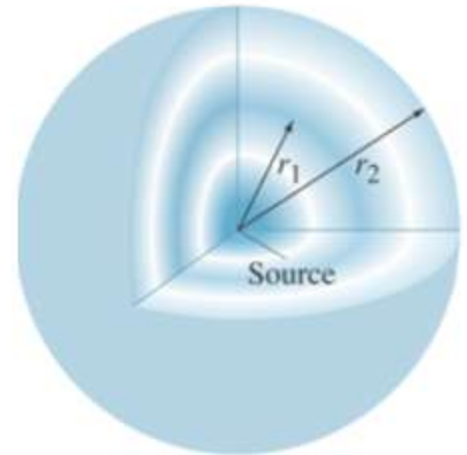
The energy transported by a wave is proportional to the square of the amplitude.

The intensity, I , of a wave is defined as the power transported across a unit area perpendicular to the direction of energy flow.

$$I = \frac{\text{Power}}{\text{Area}} = \frac{P}{4\pi r^2}$$

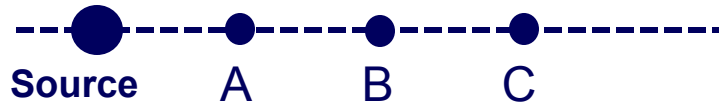
So Intensity is inversely proportional to the square of the distance from the source.

$$I \propto \frac{1}{r^2}$$



7 At point C the intensity of a wave is I_0 .
What is the intensity at point A?

- ☐ A I_0
- ☐ B $3I_0$
- ☐ C $6I_0$
- ☐ D $9I_0$
- ☐ E I need help

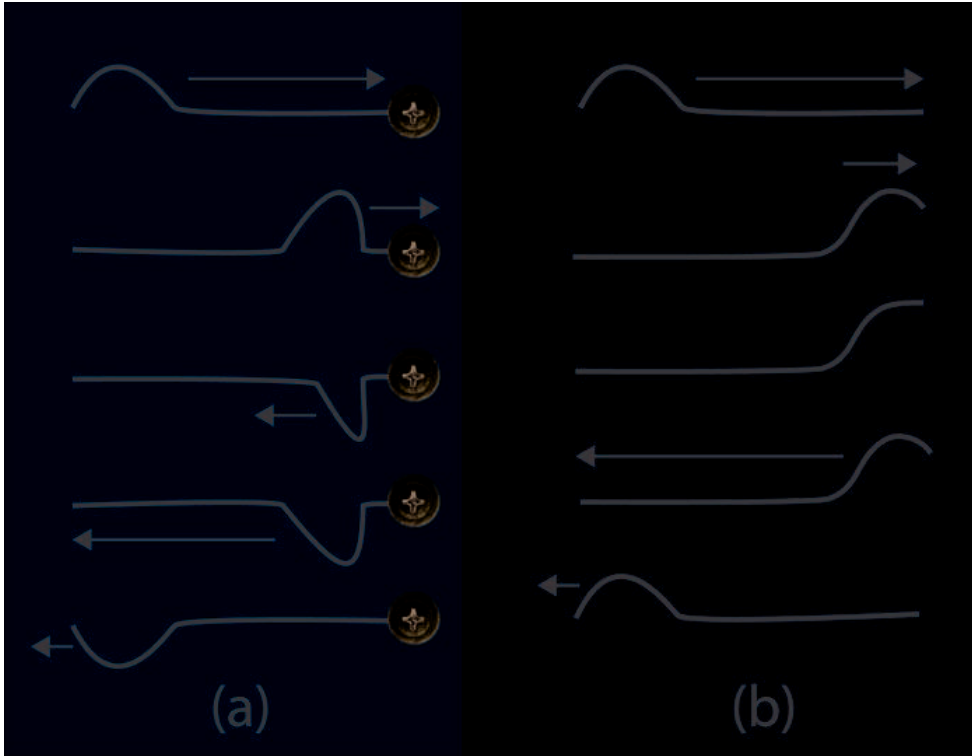


Interference



[Return to Table
of Contents](#)

Reflection and Transmission of Waves

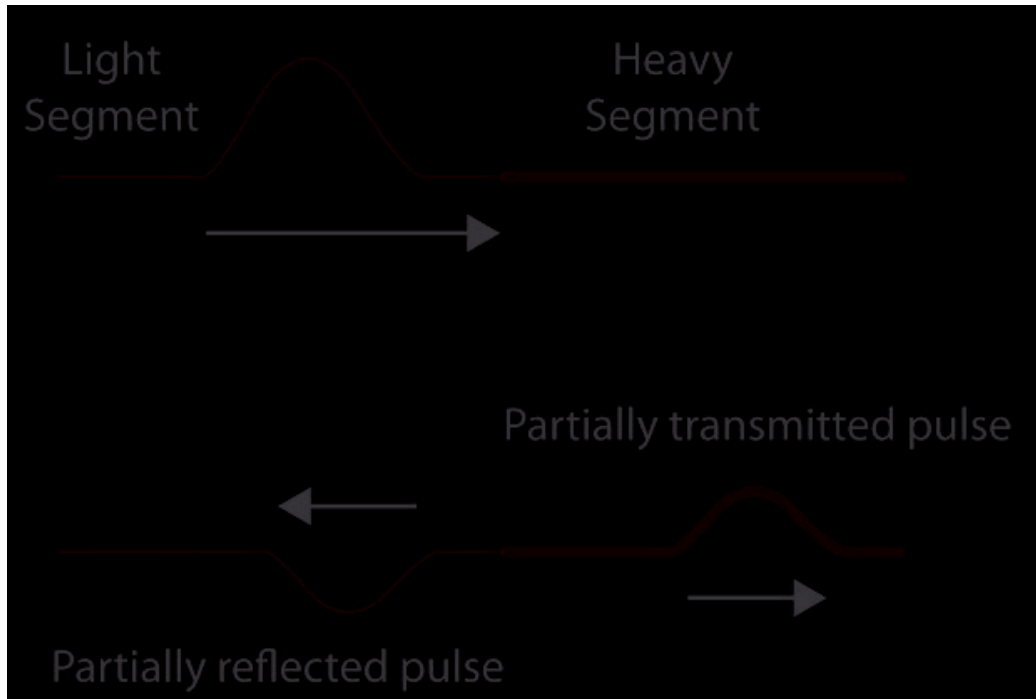


A wave reaching the end of its medium, but where the medium is still free to move, will be reflected (b), and its reflection will be upright.

A wave hitting an obstacle will be reflected (a), and its reflection will be inverted.



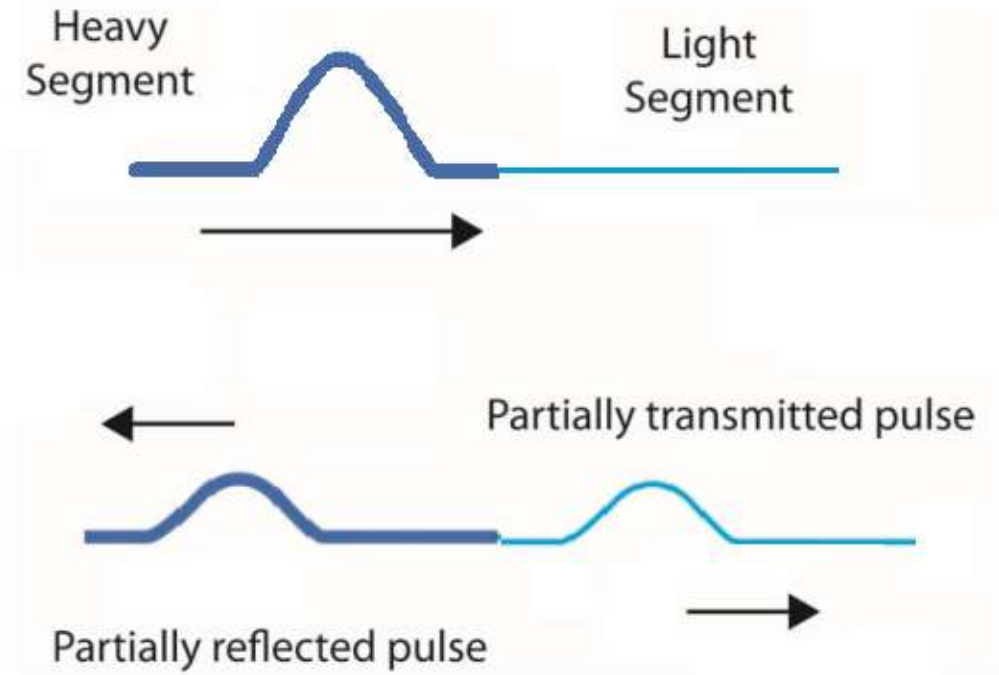
Reflection and Transmission of Waves



A wave encountering a denser medium will be partly reflected and partly transmitted; if the wave speed is less in the denser medium, the wavelength will be shorter.



Reflection and Transmission of Waves



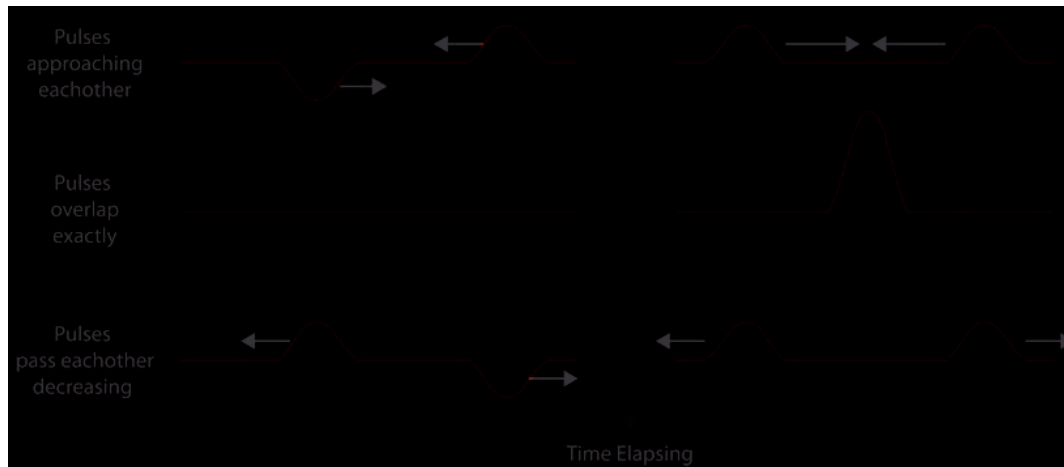
A wave encountering a lighter medium will be partly reflected and partly transmitted; if the wave speed is greater in the denser medium, the wavelength will be longer.



Interference; Principle of Superposition

The superposition principle says that when two waves pass through the same point, the displacement is the arithmetic sum of the individual displacements.

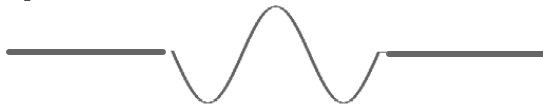
In the figure below, (a) exhibits destructive interference and (b) exhibits constructive interference.



- 8 Two students hold a string tight and create wave pulses on the string as shown below. What will the string look like when the pulses overlap?



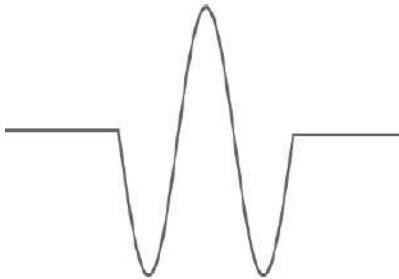
☐ A



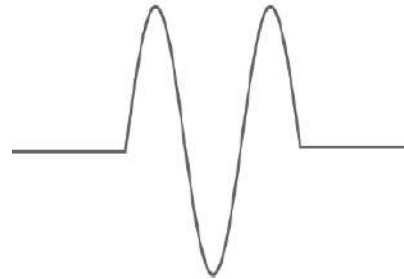
☐ B



☐ C

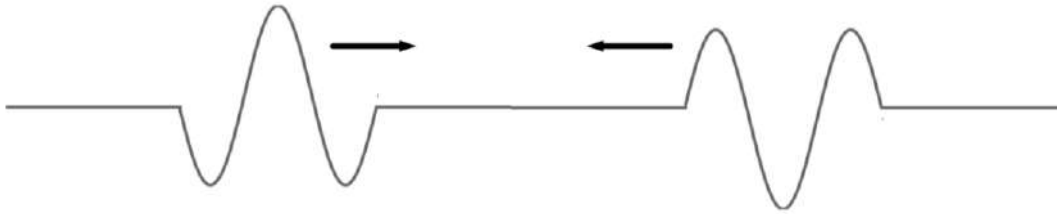


☐ D

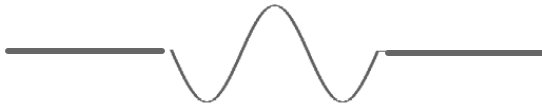


☐ E I need help

- 9 Two students hold a string tight and create wave pulses on the string as shown below. What will the string look like when the pulses overlap?



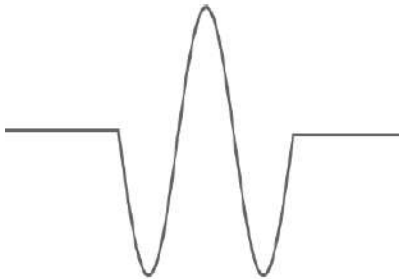
☐ A



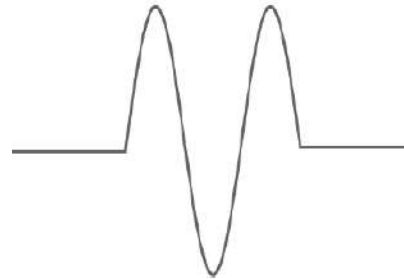
☐ B



☐ C



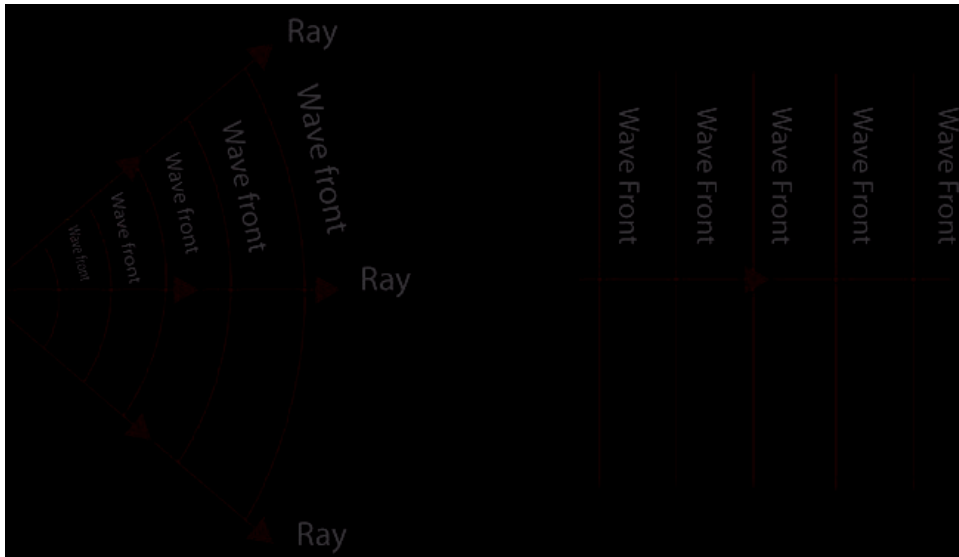
☐ D



☐ E I need help

Reflection and Transmission of Waves

Two- or three-dimensional waves can be represented by wave fronts, which are curves or surfaces where all the waves have the same phase.

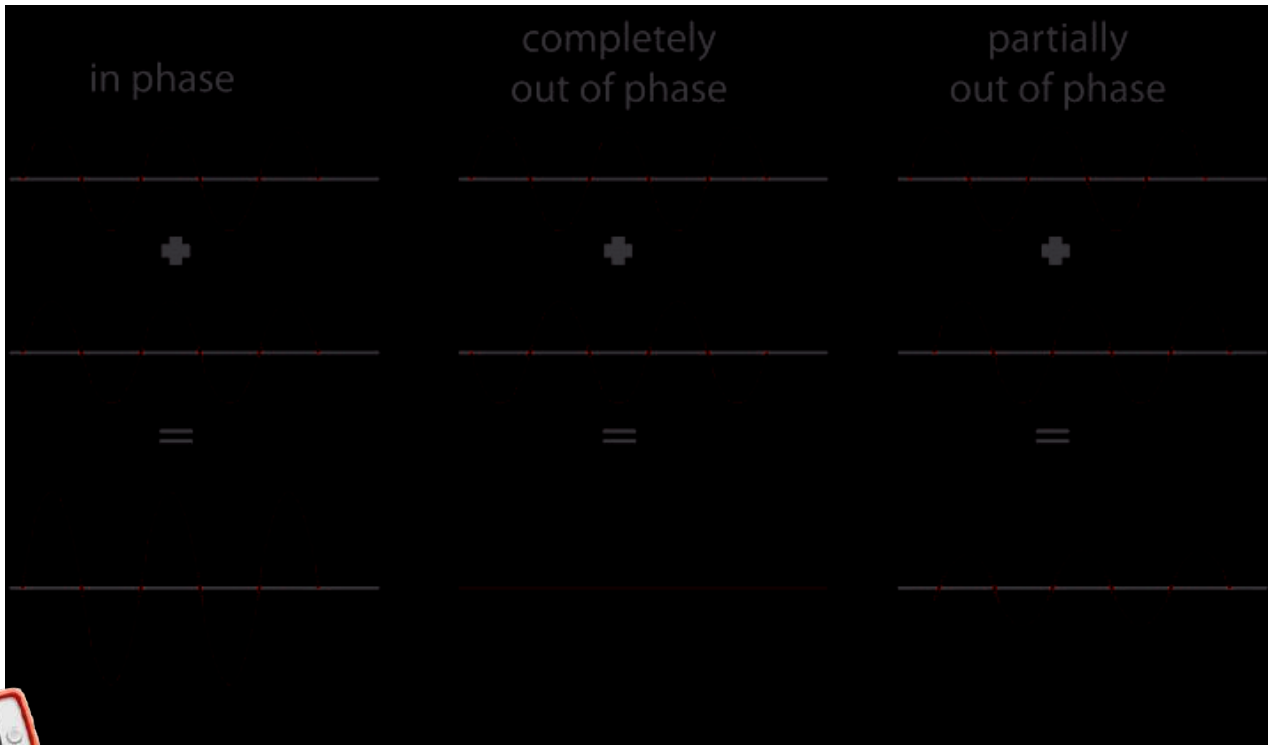


Lines perpendicular to the wave fronts are called rays; they point in the direction of propagation of the wave.



Interference; Principle of Superposition

These figures show the sum of two waves. In (a) they add constructively; in (b) they add destructively; and in (c) they add partially destructively.



10 What is the result at an oscillating point if two waves reach this point one half of a wavelength apart?

- ☐ A Constructive interference
- ☐ B Destructive interference
- ☐ C Partially destructive interference
- ☐ D I need help



11 What is the result at an oscillating point if two waves reach this point two full wavelengths apart?

- ☐ A Constructive interference
- ☐ B Destructive interference
- ☐ C Partially destructive interference
- ☐ D I need help



12 What is the result at an oscillating point if two waves reach this point one quarter of a wavelength apart?

- ☐ A Constructive interference
- ☐ B Destructive interference
- ☐ C Partially destructive interference
- ☐ D I need help




Standing Waves on a String



[Return to Table
of Contents](#)

Standing Waves; Resonance

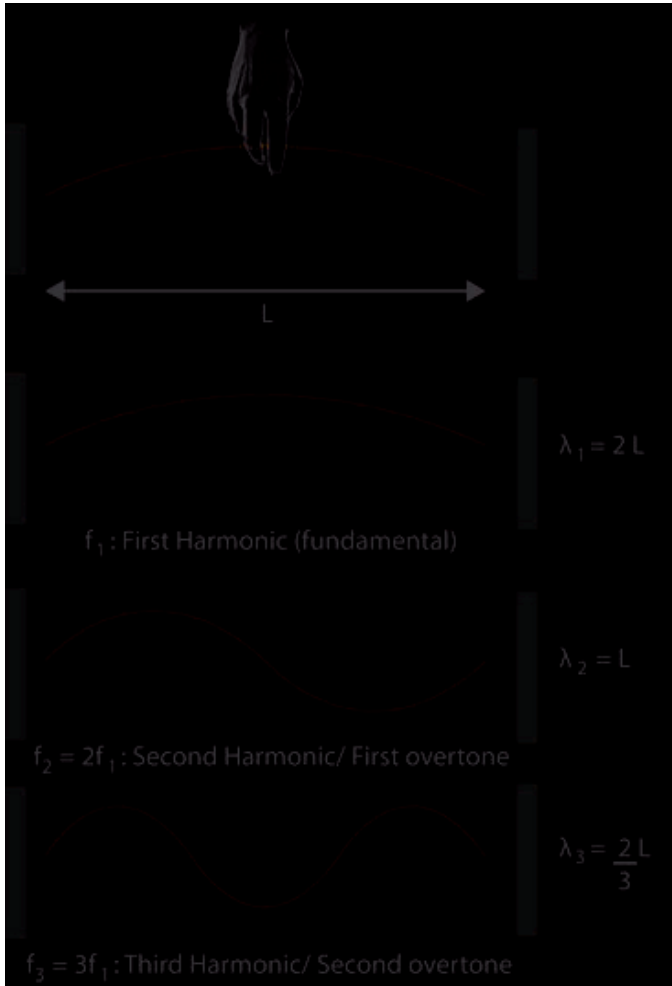


Standing waves occur when both ends of a string are fixed. In that case, only waves which are motionless at the ends of the string can persist.

There are nodes, where the amplitude is always zero, and antinodes, where the amplitude varies from zero to the maximum value.



Standing Waves; Resonance



The frequencies of the standing waves on a particular string are called resonant frequencies.

They are also referred to as the fundamental and harmonics.



Standing Waves; Resonance

The wavelengths and frequencies of standing waves are:

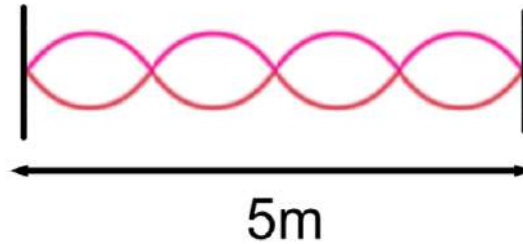
$$\lambda_n = \frac{2L}{n}$$

$$f_n = \frac{v}{\lambda_n} = \frac{v}{\frac{2L}{n}} = n \frac{v}{2L} = nf_1$$

$$n = 1, 2, 3, \dots$$



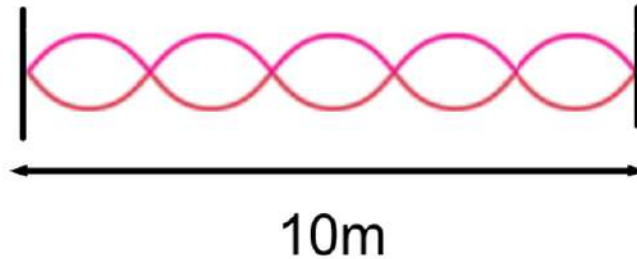
13 Wave is the wavelength of the wave shown below?



- ☐ 2.0 m
- ☐ 2.5 m
- ☐ 5.0 m
- ☐ 10 m
- ☐ I need help



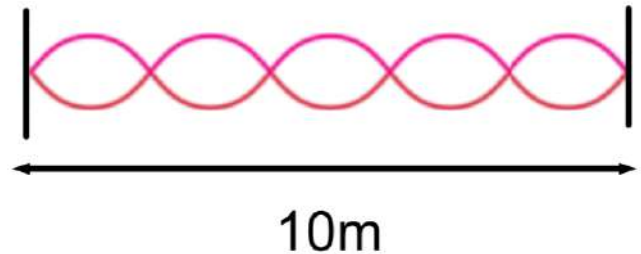
14 Wave is the wavelength of the wave shown below?



- ☐ A 2.0 m
- ☐ B 2.5 m
- ☐ C 4.0 m
- ☐ D 5.0 m
- ☐ E I need help



15 If the speed of the wave is 8m/s , what is the frequency of this wave?

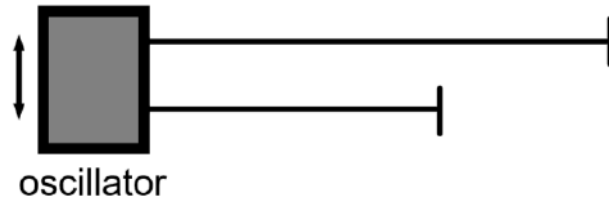


- ☐ A 2 Hz
- ☐ B 4 Hz
- ☐ C 5 Hz
- ☐ D 10 Hz
- ☐ E I need help



- 16 Two strings of the same material are cut to two different lengths and attached to an oscillator. The first string has a length of L and the second string has a length of two thirds of L . The first time a standing wave is achieved in the first string the frequency is 30Hz. What will the frequency be the first time a standing wave is achieved in the second string?

- ☐ A 20 Hz
- ☐ B 30 Hz
- ☐ C 45 Hz
- ☐ D 90 Hz
- ☐ E I need help



Summary

Vibrating objects are sources of waves, which may be either a pulse or continuous.

Wavelength: distance between successive crests

Frequency: number of crests that pass a given point per unit time.

Amplitude: maximum height of crest.

Wave velocity: $v = \lambda f$

For a wave on a string:

$$v = \sqrt{\frac{F_t}{\mu}}$$

Summary

Transverse wave: oscillations perpendicular to direction of wave motion.

Longitudinal wave: oscillations parallel to direction of wave motion.

Summary

When two waves pass through the same region of space, they interfere. Interference may be either constructive or destructive.

Standing waves can be produced on a string with both ends fixed. The waves that persist are at the resonant frequencies.

$$\lambda = \frac{2L}{n}$$

Nodes occur where there is no motion; antinodes where the amplitude is maximum.

Waves refract when entering a medium of different wave speed, and diffract around obstacles.

