

Name _____

Date _____

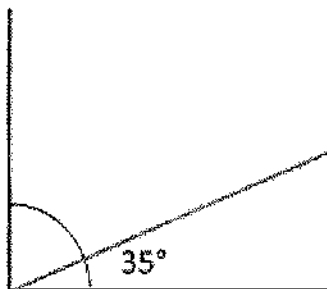


ANGLES TO 90°

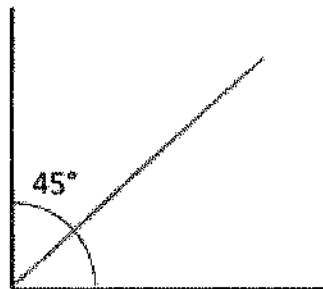
Work out the missing angles. Remember that a right angle is equal to 90° .

The angles are not drawn to scale, so do not try to measure them!

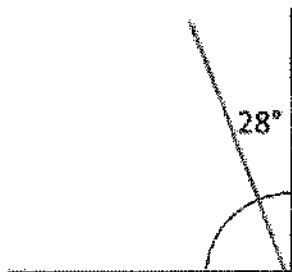
1)



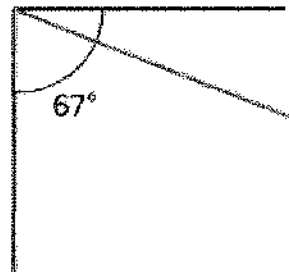
2)



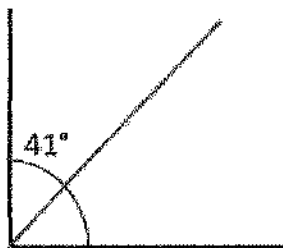
3)



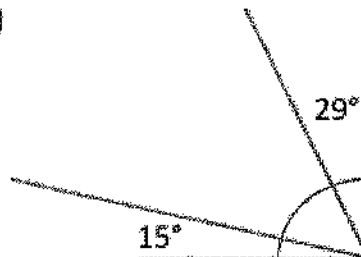
4)



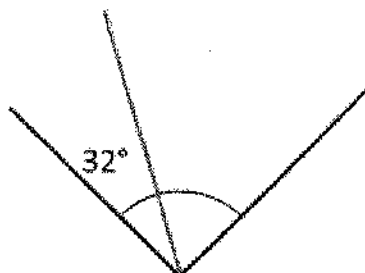
5)



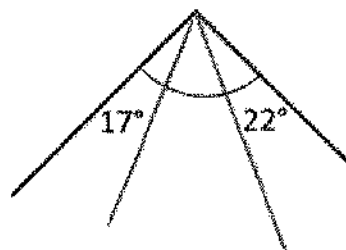
6)



7)



8)



Free Math Sheets, Math Games and Math Help

MATH-SALAMANDERS.COM

Name _____

Date _____



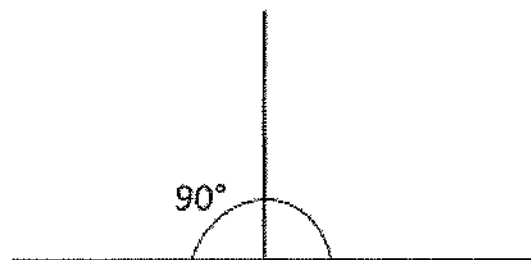
ANGLES ON A STRAIGHT LINE

Work out the missing angles. Remember that the angle in a straight line is equal to 180° . The angles are not drawn to scale, so do not try to measure them!


1)



2)



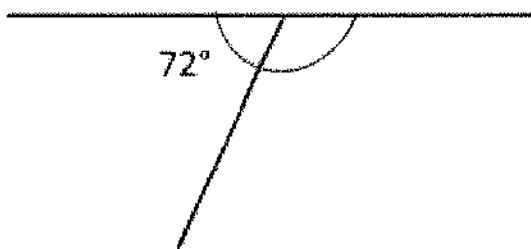
3)



4)



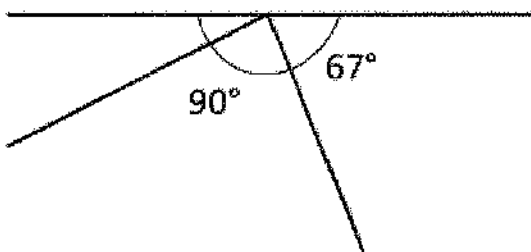
5)



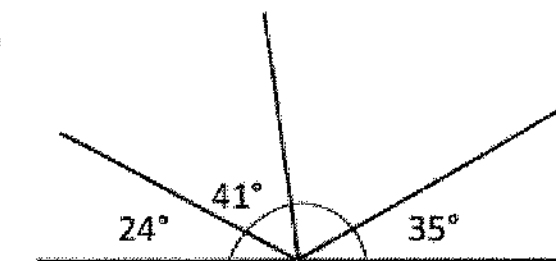
6)



7)



8)



Free Math Sheets, Math Games and Math Help

MATH-SALAMANDERS.COM