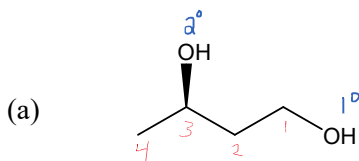


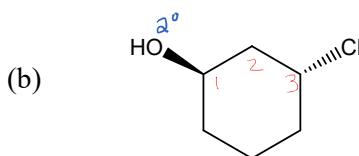
Alcohol Classification and Nomenclature Practice

1. Name or draw structures for the following compounds. Classify each alcohol as primary, secondary, or tertiary,



1,3-butenediol

Nope - not needed
3-chloro-~~cyclopentanol~~

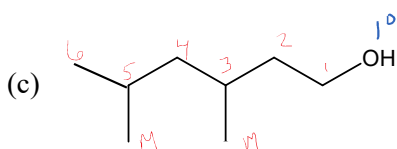


3-chlorocyclohexanol

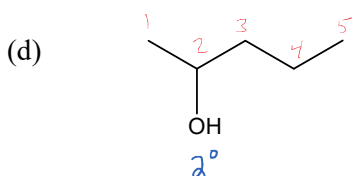
Not

Note: there is no need to include a "1" in the name of a cyclo-alcohol.

If there is only 1 "OH" group, it is implied.

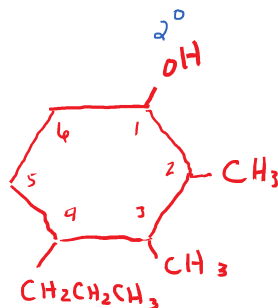


3,5-dimethyl-1-hexanol

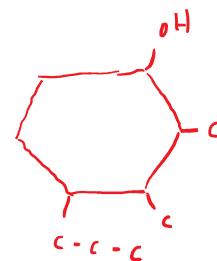


2-pentanol

- (e) 2,3-dimethyl-4-propylcyclohexanol

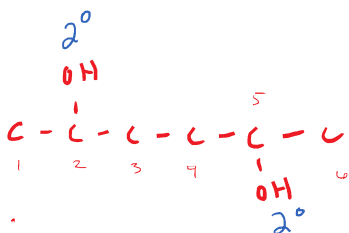


or

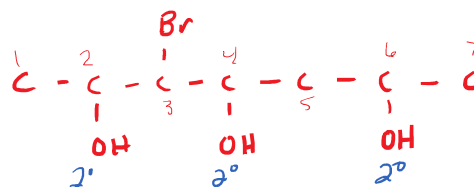


- (f) 2,5-hexanediol

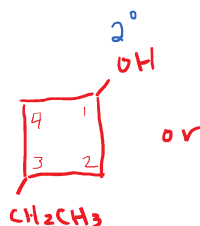
Note: your branches may go up or down differently than mine. This is OK.



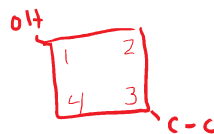
- (g) 3-bromo-2,4,6-heptanetriol



- (h) 3-ethylcyclobutanol

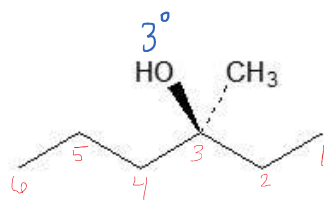


or

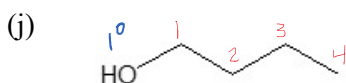


Note: you may choose to put your "OH" on a different carbon.

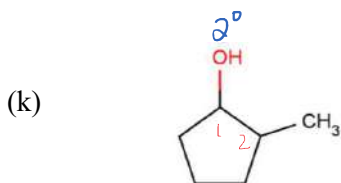
That is OK as long as you keep it #1.



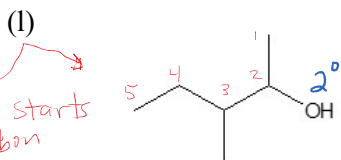
3-methyl-3-hexanol



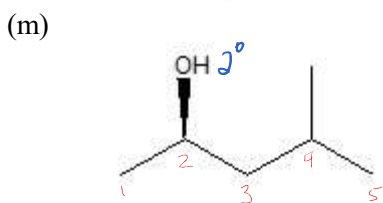
1-butanol



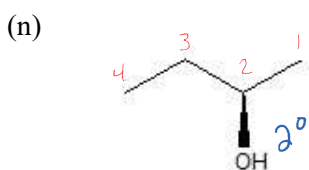
2-methylcyclopentanol



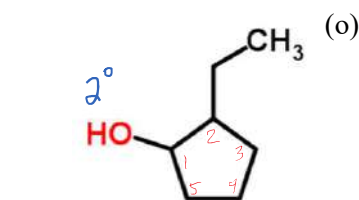
3-methyl-2-pentanol



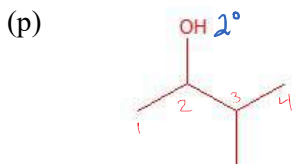
4-methyl-2-pentanol



2-butanol



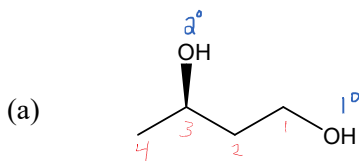
2-ethylcyclopentanol



3-methyl-2-butanol

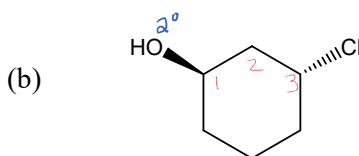
Alcohol Classification and Nomenclature Practice

1. Name or draw structures for the following compounds. Classify each alcohol as primary, secondary, or tertiary,



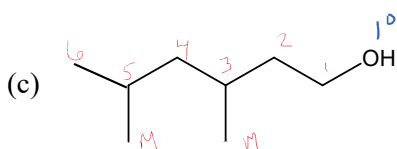
1,3-butanediol

Nope - not needed
3-chloro-~~cyclopentanol~~

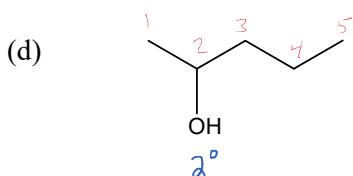


3-chlorocyclohexanol

Not
Note: there is no need to include a "1" in the name of a cyclo-alcohol. If there is only 1 "OH" group, it is implied.

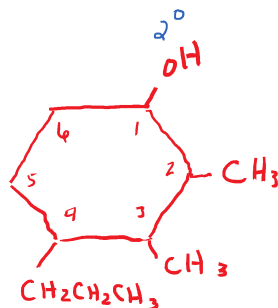


3,5-dimethyl-1-hexanol

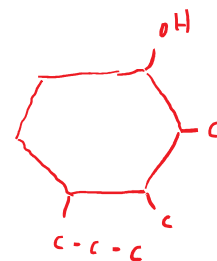


2-pentanol

- (e) 2,3-dimethyl-4-propylcyclohexanol

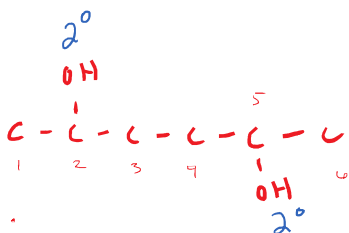


or

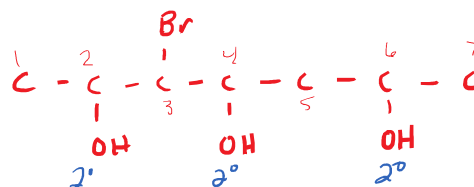


- (f) 2,5-hexanediol

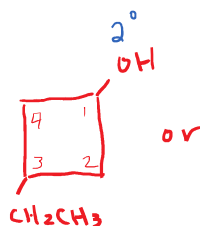
Note: your branches may go up or down differently than mine. This is OK.



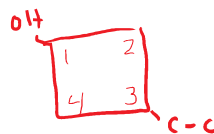
- (g) 3-bromo-2,4,6-heptanetriol



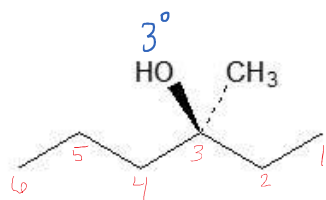
- (h) 3-ethylcyclobutanol



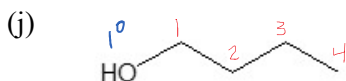
or



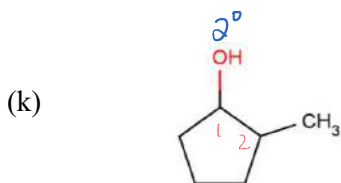
Note: you may choose to put your "OH" on a different carbon. That is OK as long as you keep it #1.



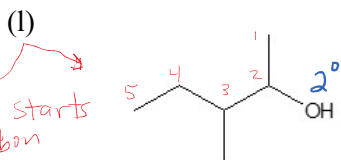
3-methyl-3-hexanol



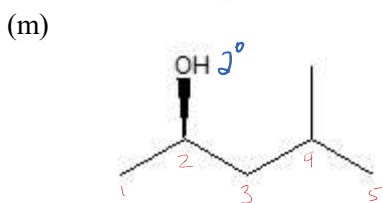
1-butanol



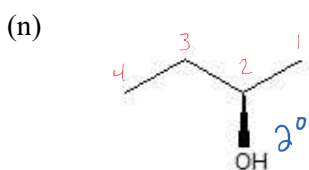
2-methylcyclopentanol



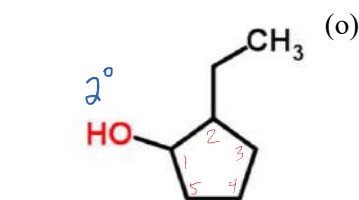
3-methyl-2-pentanol



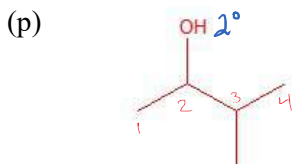
4-methyl-2-pentanol



2-butanol



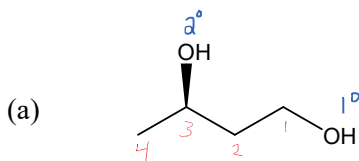
2-ethylcyclopentanol



3-methyl-2-butanol

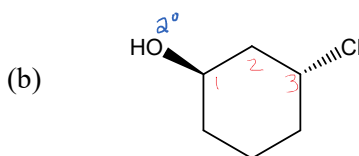
Alcohol Classification and Nomenclature Practice

1. Name or draw structures for the following compounds. Classify each alcohol as primary, secondary, or tertiary,



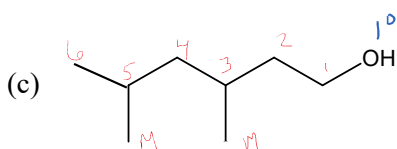
1,3-butenediol

Nope - not needed
3-chloro-~~cyclopentanol~~

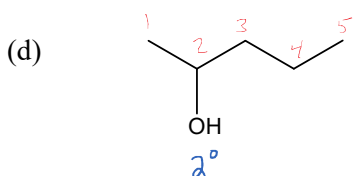


3-chlorocyclohexanol

Not
Note: there is no need to include a "1" in the name of a cyclo-alcohol. If there is only 1 "OH" group, it is implied.

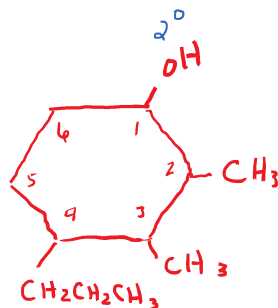


3,5-dimethyl-1-hexanol

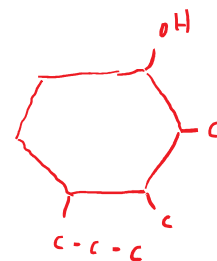


2-pentanol

- (e) 2,3-dimethyl-4-propylcyclohexanol

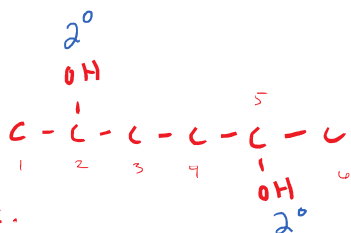


or

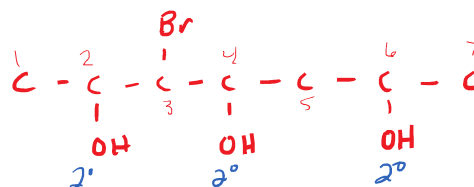


- (f) 2,5-hexanediol

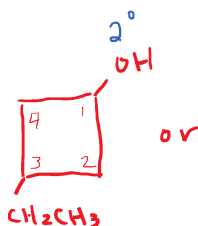
Note: your branches may go up or down differently than mine. This is OK.



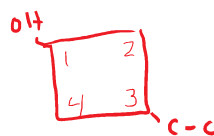
- (g) 3-bromo-2,4,6-heptanetriol



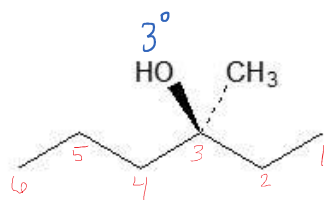
- (h) 3-ethylcyclobutanol



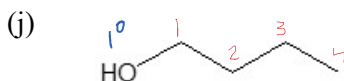
or



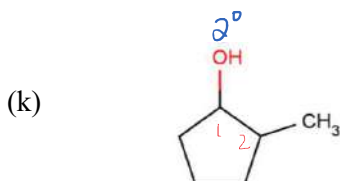
Note: you may choose to put your "OH" on a different carbon. That is OK as long as you keep it #1.



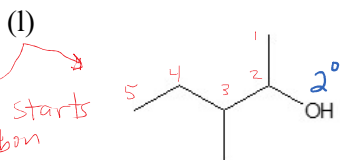
3-methyl-3-hexanol



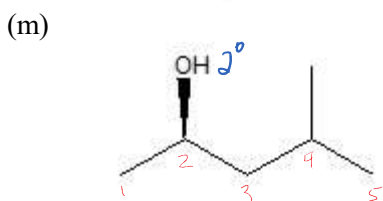
1-butanol



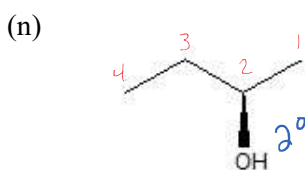
2-methylcyclopentanol



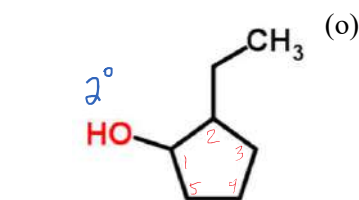
3-methyl-2-pentanol



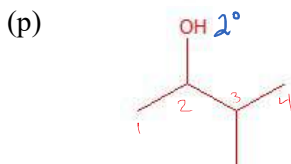
4-methyl-2-pentanol



2-butanol



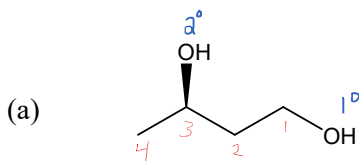
2-ethylcyclopentanol



3-methyl-2-butanol

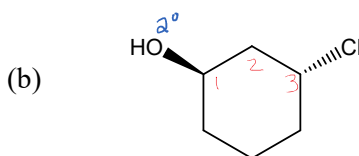
Alcohol Classification and Nomenclature Practice

1. Name or draw structures for the following compounds. Classify each alcohol as primary, secondary, or tertiary,



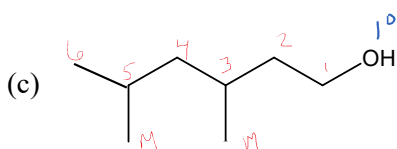
1,3-butenediol

Nope - not needed
3-chloro-~~cyclopentanol~~

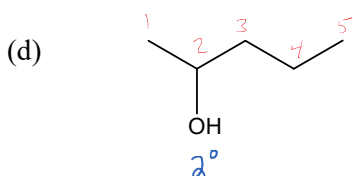


3-chlorocyclohexanol

Not
Note: there is no need to include a "1" in the name of a cyclo-alcohol. If there is only 1 "OH" group, it is implied.

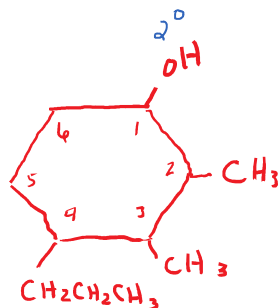


3,5-dimethyl-1-hexanol

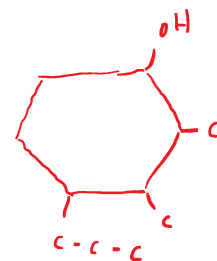


2-pentanol

- (e) 2,3-dimethyl-4-propylcyclohexanol

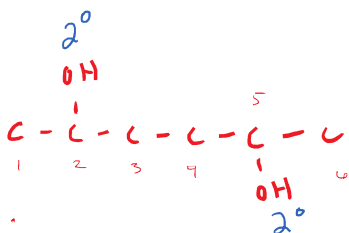


or

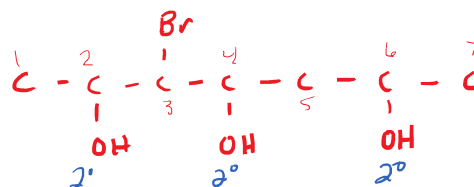


- (f) 2,5-hexanediol

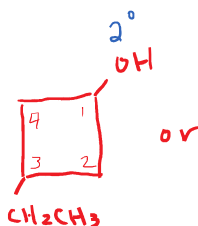
Note: your branches may go up or down differently than mine. This is OK.



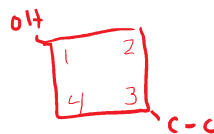
- (g) 3-bromo-2,4,6-heptanetriol



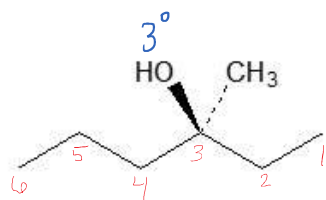
- (h) 3-ethylcyclobutanol



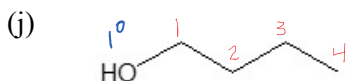
or



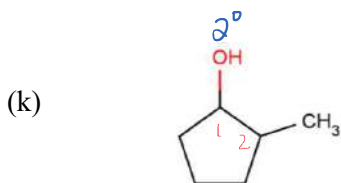
Note: you may choose to put your "OH" on a different carbon. That is OK as long as you keep it #1.



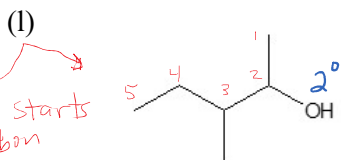
3-methyl-3-hexanol



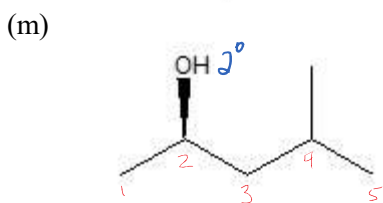
1-butanol



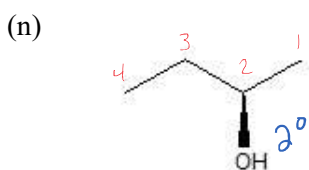
2-methylcyclopentanol



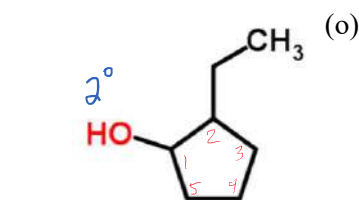
3-methyl-2-pentanol



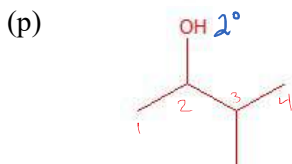
4-methyl-2-pentanol



2-butanol



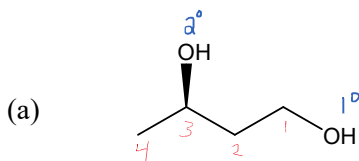
2-ethylcyclopentanol



3-methyl-2-butanol

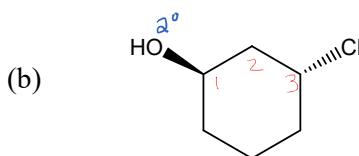
Alcohol Classification and Nomenclature Practice

1. Name or draw structures for the following compounds. Classify each alcohol as primary, secondary, or tertiary,



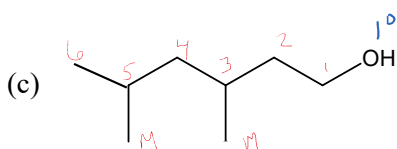
1,3-butenediol

Nope - not needed
3-chloro-~~cyclopentanol~~

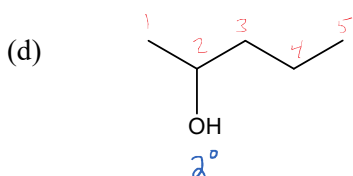


3-chlorocyclohexanol

Not
Note: there is no need to include a "1" in the name of a cyclo-alcohol. If there is only 1 "OH" group, it is implied.

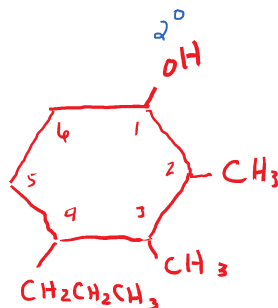


3,5-dimethyl-1-hexanol

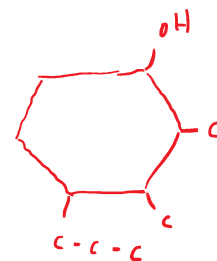


2-pentanol

- (e) 2,3-dimethyl-4-propylcyclohexanol

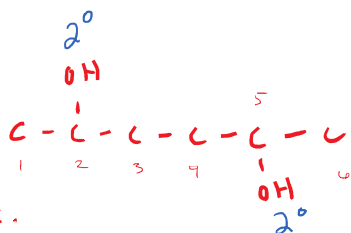


or

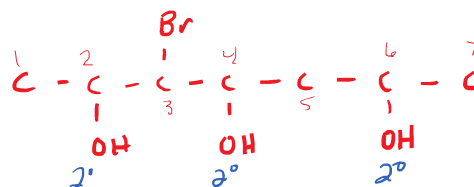


- (f) 2,5-hexanediol

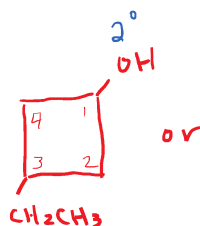
Note: your branches may go up or down differently than mine. This is OK.



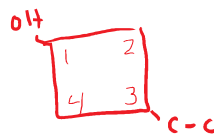
- (g) 3-bromo-2,4,6-heptanetriol



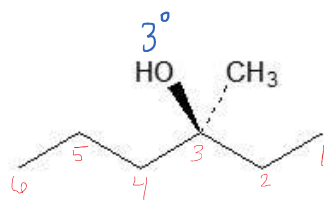
- (h) 3-ethylcyclobutanol



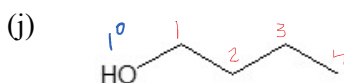
or



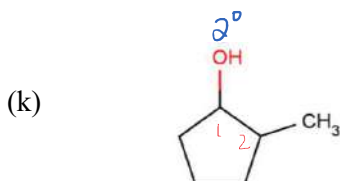
Note: you may choose to put your "OH" on a different carbon. That is OK as long as you keep it #1.



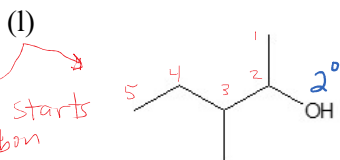
3-methyl-3-hexanol



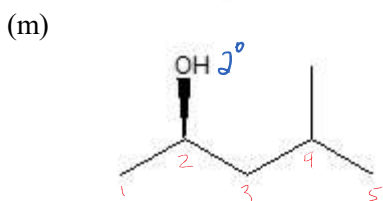
1-butanol



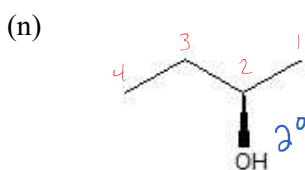
2-methylcyclopentanol



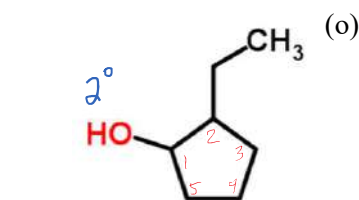
3-methyl-2-pentanol



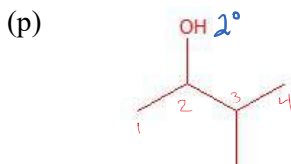
4-methyl-2-pentanol



2-butanol



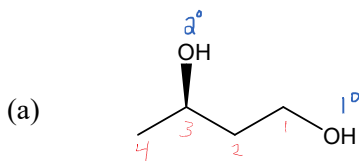
2-ethylcyclopentanol



3-methyl-2-butanol

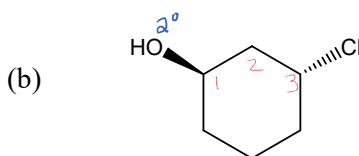
Alcohol Classification and Nomenclature Practice

1. Name or draw structures for the following compounds. Classify each alcohol as primary, secondary, or tertiary,



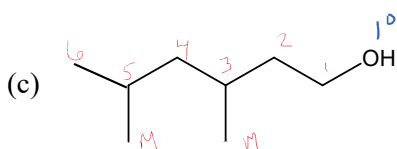
1,3-butenediol

Nope - not needed
3-chloro-~~cyclopentanol~~

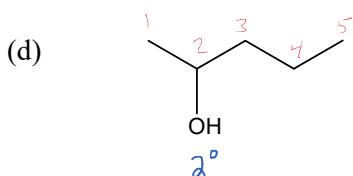


3-chlorocyclohexanol

Not
Note: there is no need to include a "1" in the name of a cyclo-alcohol. If there is only 1 "OH" group, it is implied.

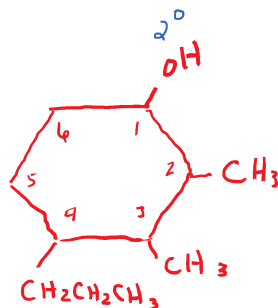


3,5-dimethyl-1-hexanol

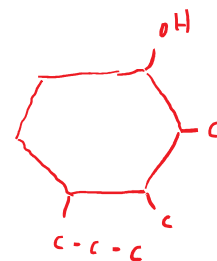


2-pentanol

- (e) 2,3-dimethyl-4-propylcyclohexanol

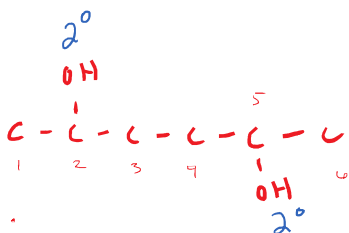


or

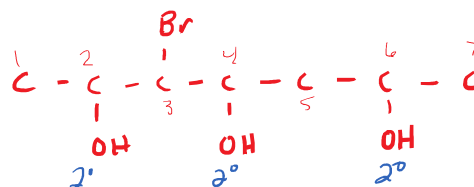


- (f) 2,5-hexanediol

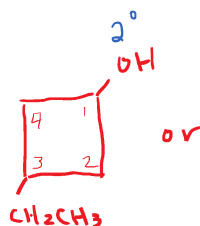
Note: your branches may go up or down differently than mine. This is OK.



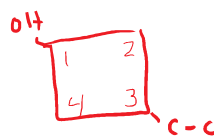
- (g) 3-bromo-2,4,6-heptanetriol



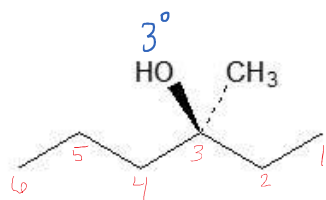
- (h) 3-ethylcyclobutanol



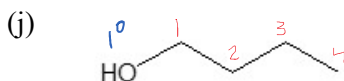
or



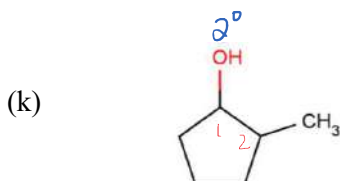
Note: you may choose to put your "OH" on a different carbon. That is OK as long as you keep it #1.



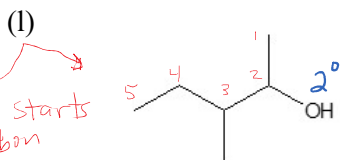
3-methyl-3-hexanol



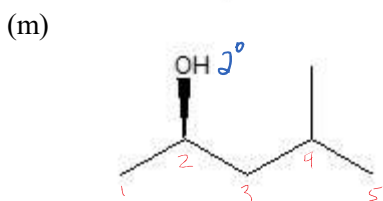
1-butanol



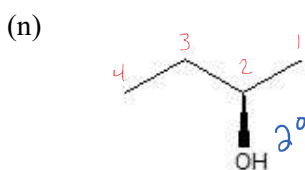
2-methylcyclopentanol



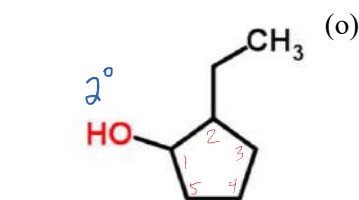
3-methyl-2-pentanol



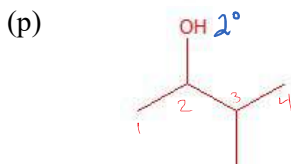
4-methyl-2-pentanol



2-butanol



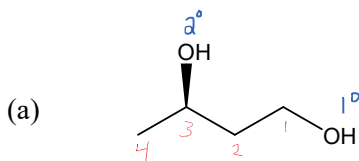
2-ethylcyclopentanol



3-methyl-2-butanol

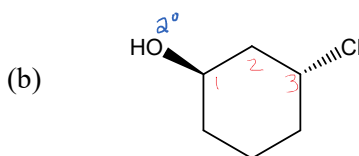
Alcohol Classification and Nomenclature Practice

1. Name or draw structures for the following compounds. Classify each alcohol as primary, secondary, or tertiary,



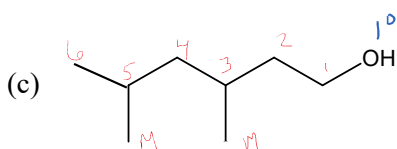
1,3-butenediol

Nope - not needed
3-chloro-~~cyclopentanol~~

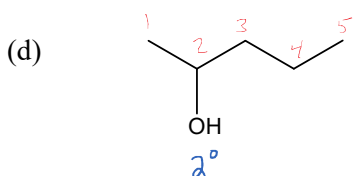


3-chlorocyclohexanol

Not
Note: there is no need to include a "1" in the name of a cyclo-alcohol. If there is only 1 "OH" group, it is implied.

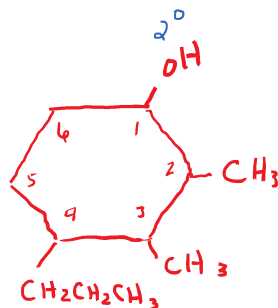


3,5-dimethyl-1-hexanol

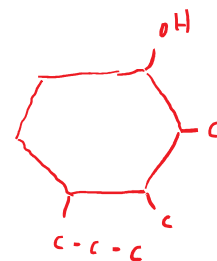


2-pentanol

- (e) 2,3-dimethyl-4-propylcyclohexanol

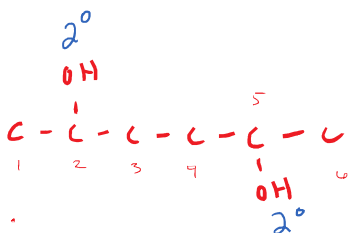


or

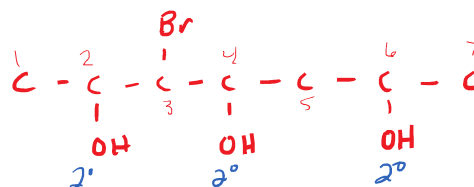


- (f) 2,5-hexanediol

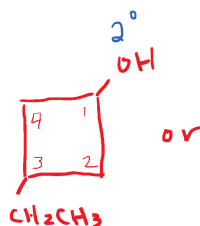
Note: your branches may go up or down differently than mine. This is OK.



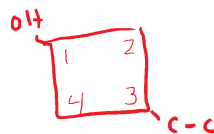
- (g) 3-bromo-2,4,6-heptanetriol



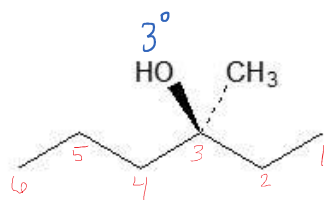
- (h) 3-ethylcyclobutanol



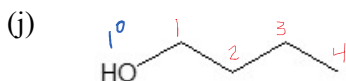
or



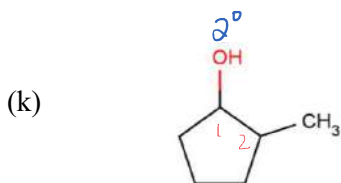
Note: you may choose to put your "OH" on a different carbon. That is OK as long as you keep it #1.



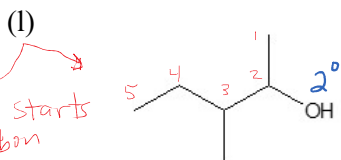
3-methyl-3-hexanol



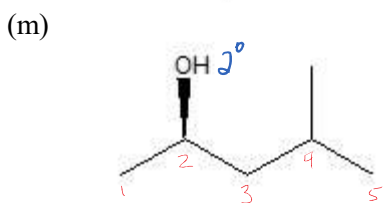
1-butanol



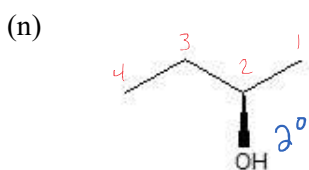
2-methylcyclopentanol



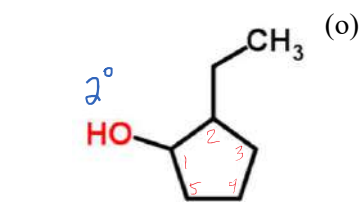
3-methyl-2-pentanol



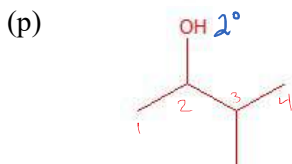
4-methyl-2-pentanol



2-butanol



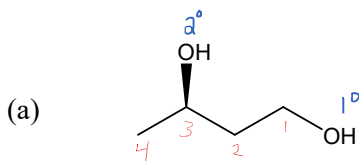
2-ethylcyclopentanol



3-methyl-2-butanol

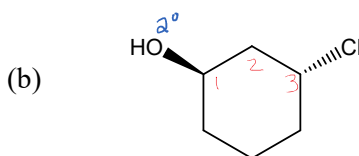
Alcohol Classification and Nomenclature Practice

1. Name or draw structures for the following compounds. Classify each alcohol as primary, secondary, or tertiary,



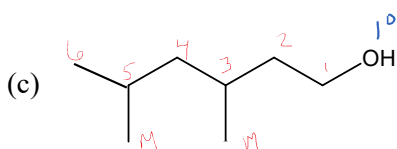
1,3-butanediol

Nope - not needed
3-chloro-~~cyclopentanol~~

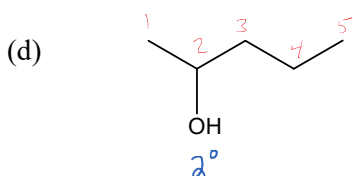


3-chlorocyclohexanol

Not
Note: there is no need to include a "1" in the name of a cyclo-alcohol. If there is only 1 "OH" group, it is implied.

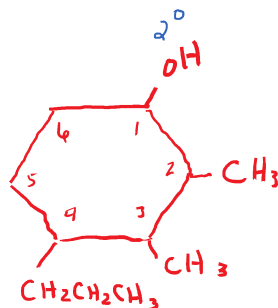


3,5-dimethyl-1-hexanol

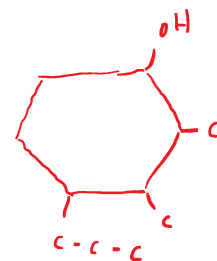


2-pentanol

- (e) 2,3-dimethyl-4-propylcyclohexanol

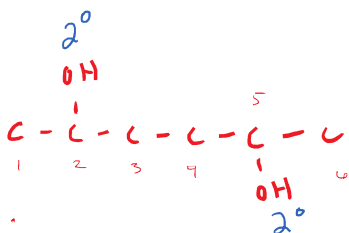


or

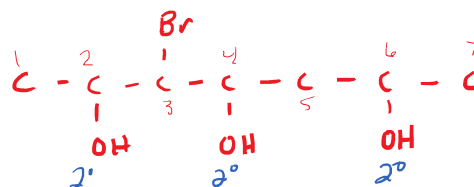


- (f) 2,5-hexanediol

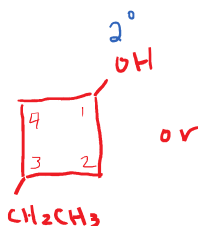
Note: your branches may go up or down differently than mine. This is OK.



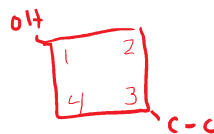
- (g) 3-bromo-2,4,6-heptanetriol



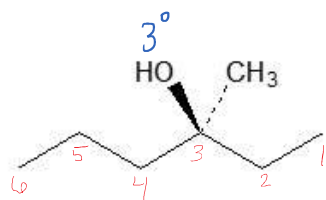
- (h) 3-ethylcyclobutanol



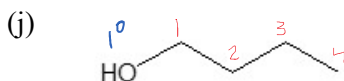
or



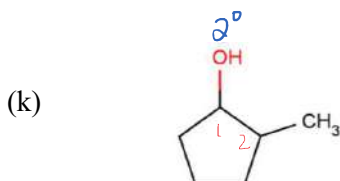
Note: you may choose to put your "OH" on a different carbon. That is OK as long as you keep it #1.



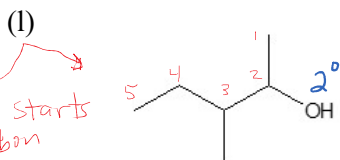
3-methyl-3-hexanol



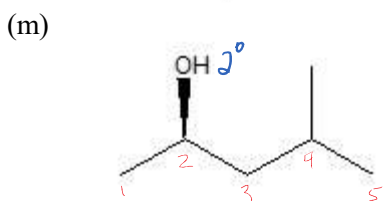
1-butanol



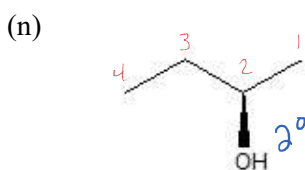
2-methylcyclopentanol



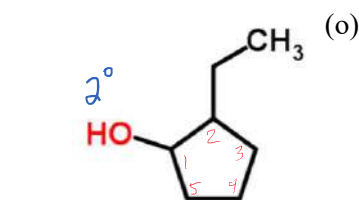
3-methyl-2-pentanol



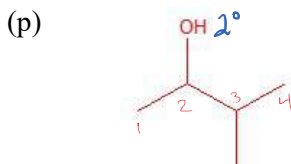
4-methyl-2-pentanol



2-butanol



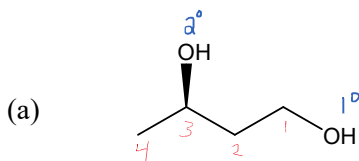
2-ethylcyclopentanol



3-methyl-2-butanol

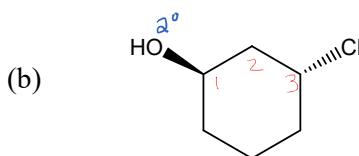
Alcohol Classification and Nomenclature Practice

1. Name or draw structures for the following compounds. Classify each alcohol as primary, secondary, or tertiary,



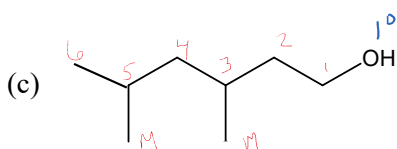
1,3-butenediol

Nope - not needed
3-chloro-~~cyclopentanol~~

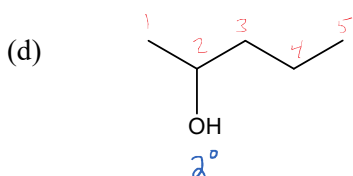


3-chlorocyclohexanol

Not
Note: there is no need to include a "1" in the name of a cyclo-alcohol. If there is only 1 "OH" group, it is implied.

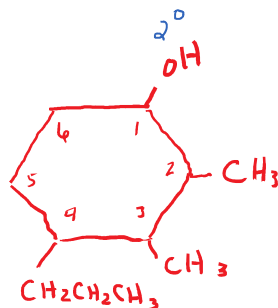


3,5-dimethyl-1-hexanol

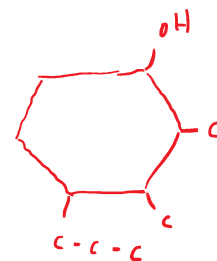


2-pentanol

- (e) 2,3-dimethyl-4-propylcyclohexanol

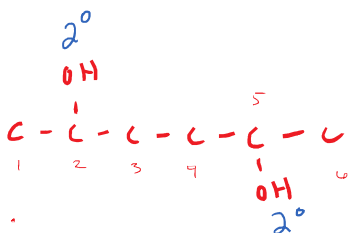


or

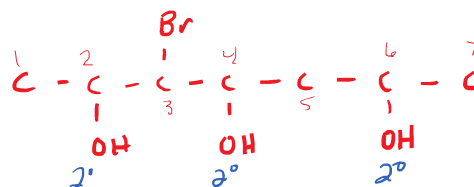


- (f) 2,5-hexanediol

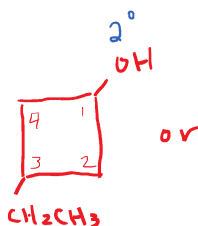
Note: your branches may go up or down differently than mine. This is OK.



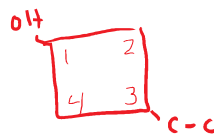
- (g) 3-bromo-2,4,6-heptanetriol



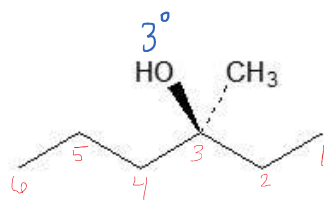
- (h) 3-ethylcyclobutanol



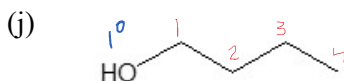
or



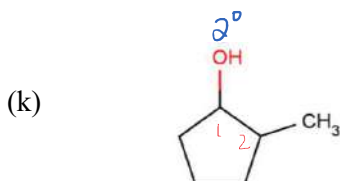
Note: you may choose to put your "OH" on a different carbon. That is OK as long as you keep it #1.



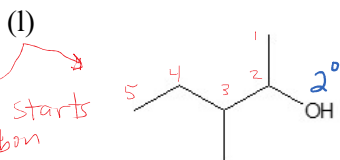
3-methyl-3-hexanol



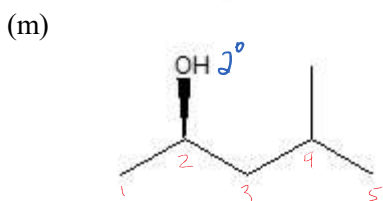
1-butanol



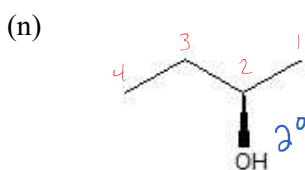
2-methylcyclopentanol



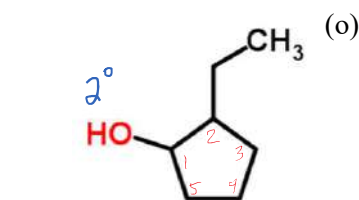
3-methyl-2-pentanol



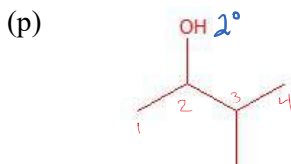
4-methyl-2-pentanol



2-butanol



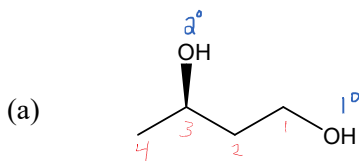
2-ethylcyclopentanol



3-methyl-2-butanol

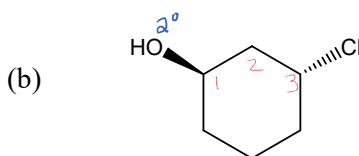
Alcohol Classification and Nomenclature Practice

1. Name or draw structures for the following compounds. Classify each alcohol as primary, secondary, or tertiary,



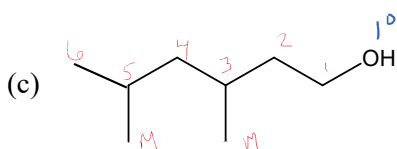
1,3-butenediol

Nope - not needed
3-chloro-~~cyclopentanol~~

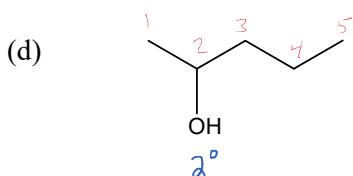


3-chlorocyclohexanol

Not
Note: there is no need to include a "1" in the name of a cyclo-alcohol. If there is only 1 "OH" group, it is implied.

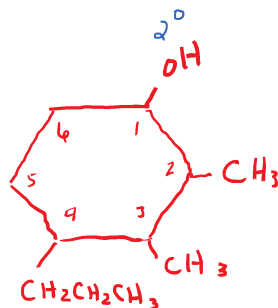


3,5-dimethyl-1-hexanol

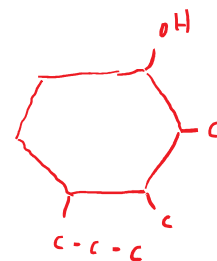


2-pentanol

- (e) 2,3-dimethyl-4-propylcyclohexanol

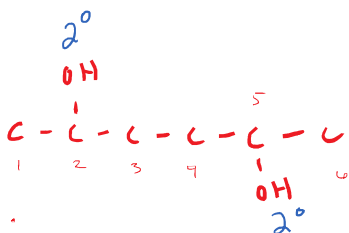


or

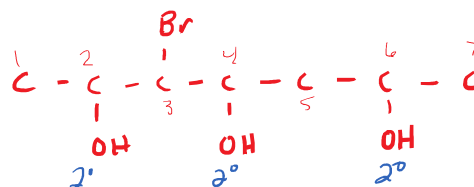


- (f) 2,5-hexanediol

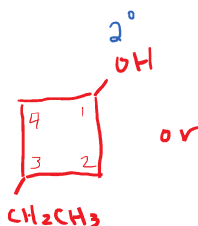
Note: your branches may go up or down differently than mine. This is OK.



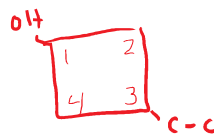
- (g) 3-bromo-2,4,6-heptanetriol



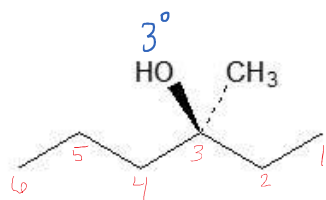
- (h) 3-ethylcyclobutanol



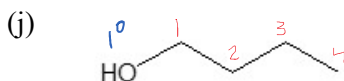
or



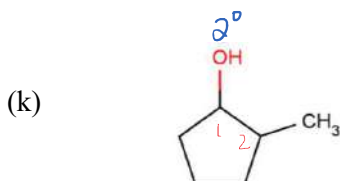
Note: you may choose to put your "OH" on a different carbon. That is OK as long as you keep it #1.



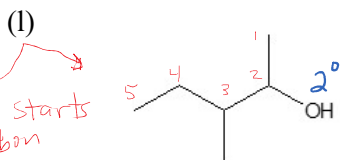
3-methyl-3-hexanol



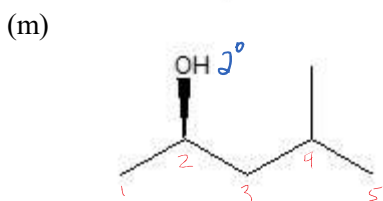
1-butanol



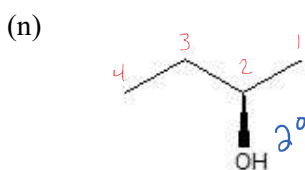
2-methylcyclopentanol



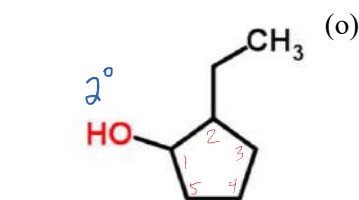
3-methyl-2-pentanol



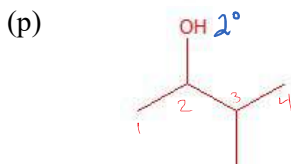
4-methyl-2-pentanol



2-butanol



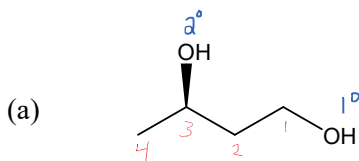
2-ethylcyclopentanol



3-methyl-2-butanol

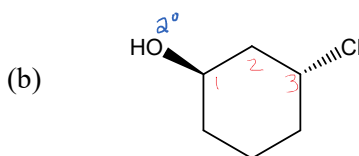
Alcohol Classification and Nomenclature Practice

1. Name or draw structures for the following compounds. Classify each alcohol as primary, secondary, or tertiary,



1,3-butenediol

Nope - not needed
3-chloro-~~cyclopentanol~~

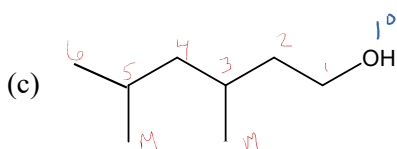


3-chlorocyclohexanol

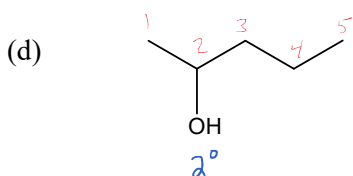
Not

Note: there is no need to include a "1" in the name of a cyclo-alcohol.

If there is only 1 "OH" group, it is implied.

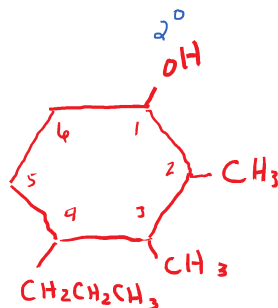


3,5-dimethyl-1-hexanol

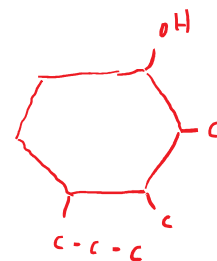


2-pentanol

- (e) 2,3-dimethyl-4-propylcyclohexanol

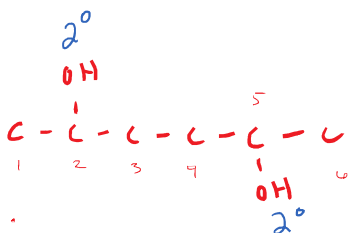


or

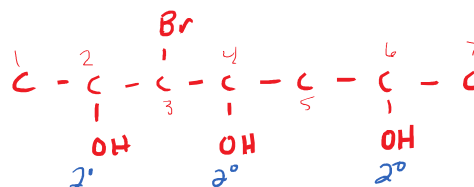


- (f) 2,5-hexanediol

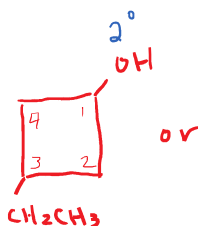
Note: your branches may go up or down differently than mine. This is OK.



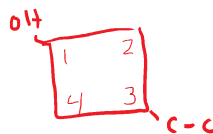
- (g) 3-bromo-2,4,6-heptanetriol



- (h) 3-ethylcyclobutanol

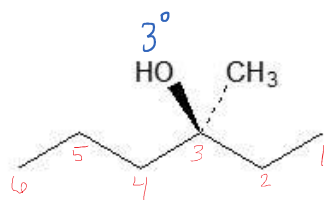


or

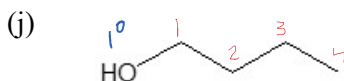


Note: you may choose to put your "OH" on a different carbon.

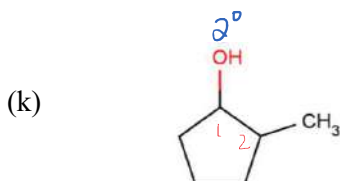
That is OK as long as you keep it #1.



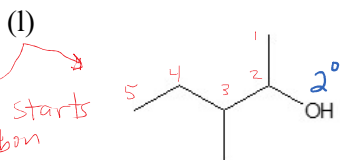
3-methyl-3-hexanol



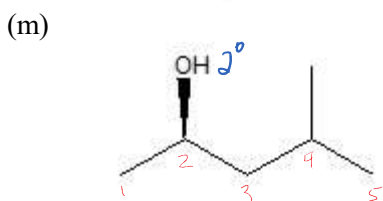
1-butanol



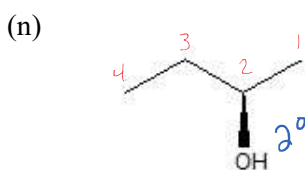
2-methylcyclopentanol



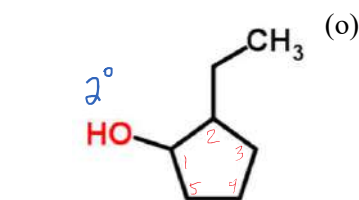
3-methyl-2-pentanol



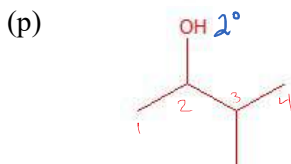
4-methyl-2-pentanol



2-butanol



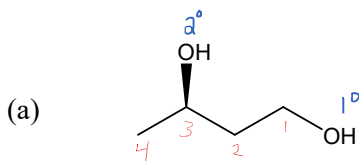
2-ethylcyclopentanol



3-methyl-2-butanol

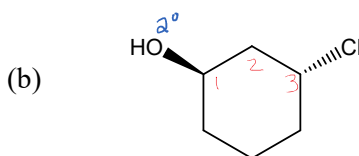
Alcohol Classification and Nomenclature Practice

1. Name or draw structures for the following compounds. Classify each alcohol as primary, secondary, or tertiary,



1,3-butenediol

Nope - not needed
3-chloro-~~cyclopentanol~~

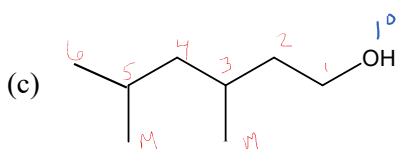


3-chlorocyclohexanol

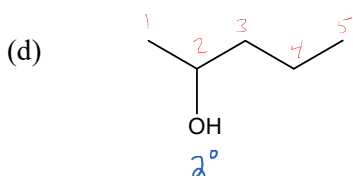
Not

Note: there is no need to include a "1" in the name of a cyclo-alcohol.

If there is only 1 "OH" group, it is implied.

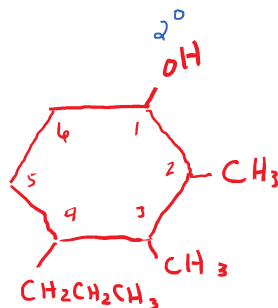


3,5-dimethyl-1-hexanol

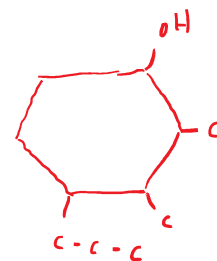


2-pentanol

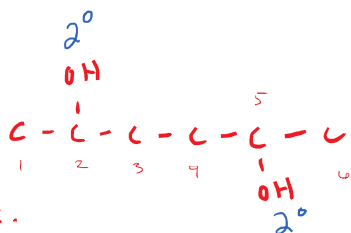
- (e) 2,3-dimethyl-4-propylcyclohexanol



or

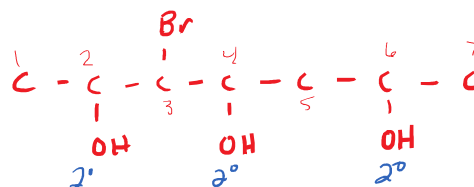


- (f) 2,5-hexanediol

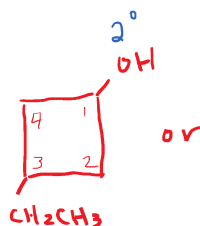


Note: your branches may go up or down differently than mine. This is OK.

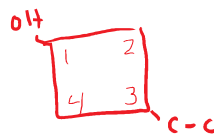
- (g) 3-bromo-2,4,6-heptanetriol



- (h) 3-ethylcyclobutanol

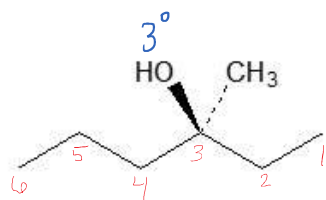


or

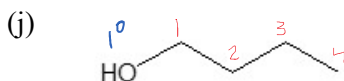


Note: you may choose to put your "OH" on a different carbon.

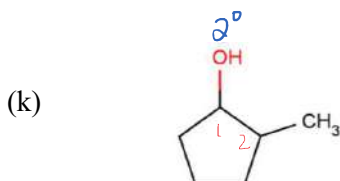
That is OK as long as you keep it #1.



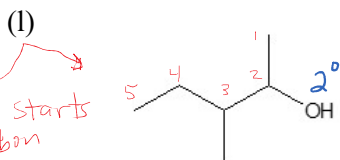
3-methyl-3-hexanol



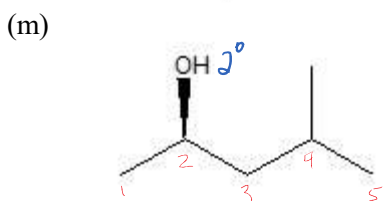
1-butanol



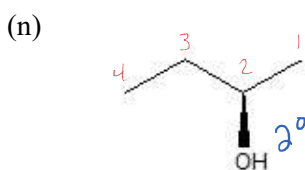
2-methylcyclopentanol



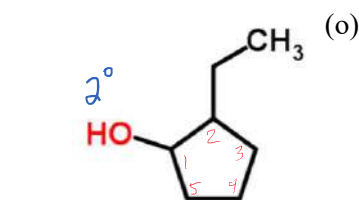
3-methyl-2-pentanol



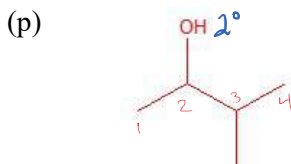
4-methyl-2-pentanol



2-butanol



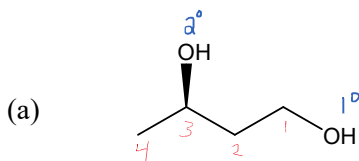
2-ethylcyclopentanol



3-methyl-2-butanol

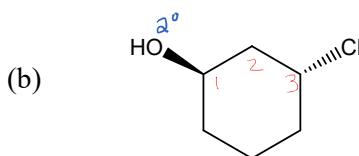
Alcohol Classification and Nomenclature Practice

1. Name or draw structures for the following compounds. Classify each alcohol as primary, secondary, or tertiary,



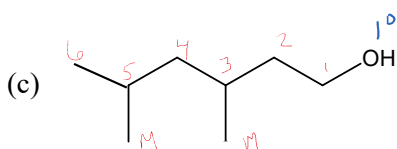
1,3-butenediol

Nope - not needed
3-chloro-~~cyclopentanol~~

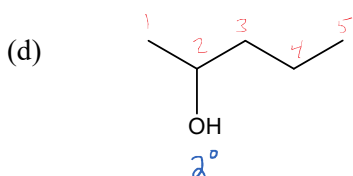


3-chlorocyclohexanol

Not
Note: there is no need to include a "1" in the name of a cyclo-alcohol. If there is only 1 "OH" group, it is implied.

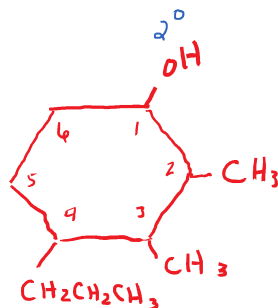


3,5-dimethyl-1-hexanol

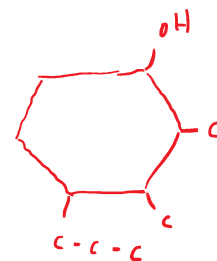


2-pentanol

- (e) 2,3-dimethyl-4-propylcyclohexanol

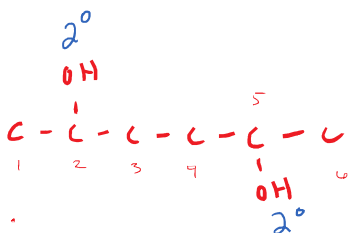


or

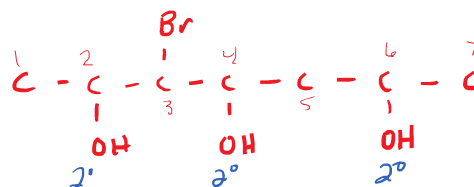


- (f) 2,5-hexanediol

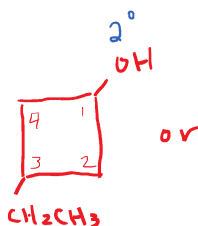
Note: your branches may go up or down differently than mine. This is OK.



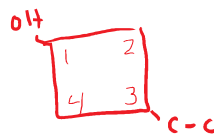
- (g) 3-bromo-2,4,6-heptanetriol



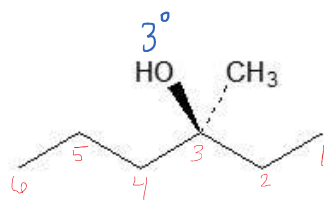
- (h) 3-ethylcyclobutanol



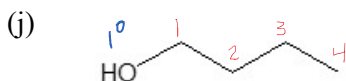
or



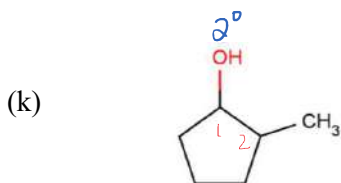
Note: you may choose to put your "OH" on a different carbon. That is OK as long as you keep it #1.



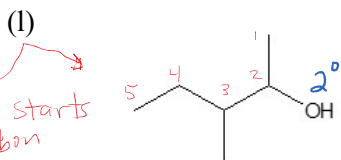
3-methyl-3-hexanol



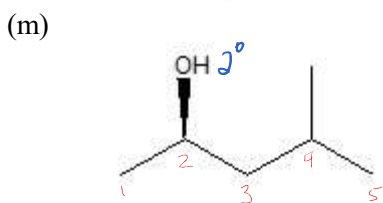
1-butanol



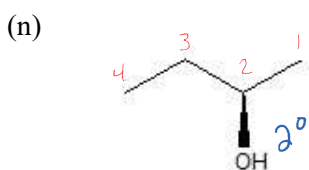
2-methylcyclopentanol



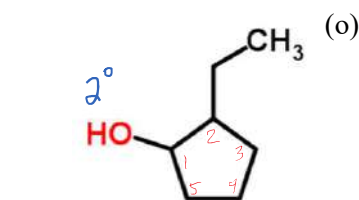
3-methyl-2-pentanol



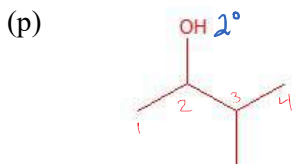
4-methyl-2-pentanol



2-butanol



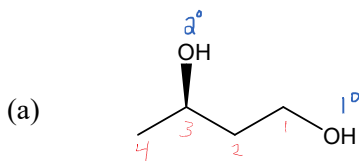
2-ethylcyclopentanol



3-methyl-2-butanol

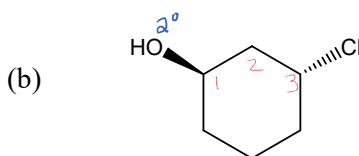
Alcohol Classification and Nomenclature Practice

1. Name or draw structures for the following compounds. Classify each alcohol as primary, secondary, or tertiary,



1,3-butenediol

Nope - not needed
3-chloro-~~cyclopentanol~~

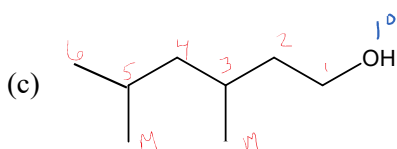


3-chlorocyclohexanol

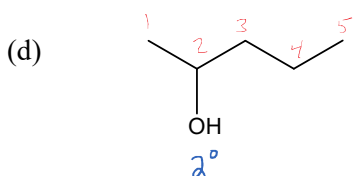
Not

Note: there is no need to include a "1" in the name of a cyclo-alcohol.

If there is only 1 "OH" group, it is implied.

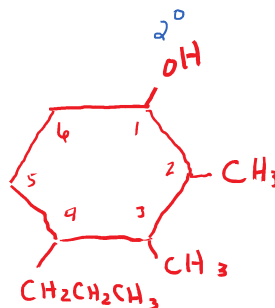


3,5-dimethyl-1-hexanol

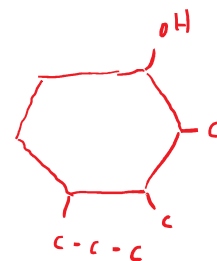


2-pentanol

- (e) 2,3-dimethyl-4-propylcyclohexanol

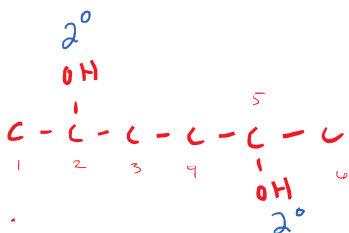


or

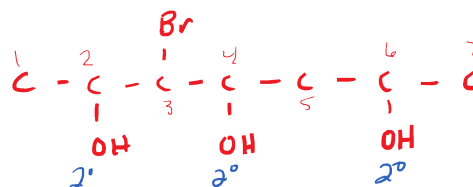


- (f) 2,5-hexanediol

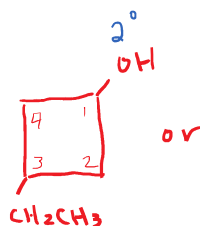
Note: your branches may go up or down differently than mine. This is OK.



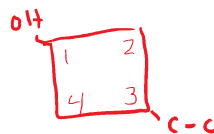
- (g) 3-bromo-2,4,6-heptanetriol



- (h) 3-ethylcyclobutanol

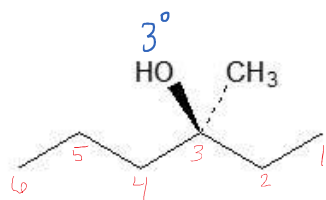


or

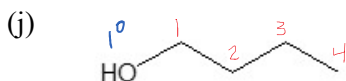


Note: you may choose to put your "OH" on a different carbon.

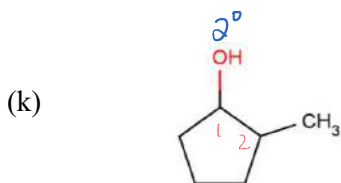
That is OK as long as you keep it #1.



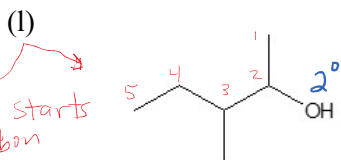
3-methyl-3-hexanol



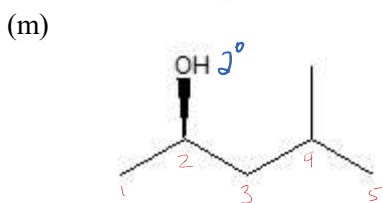
1-butanol



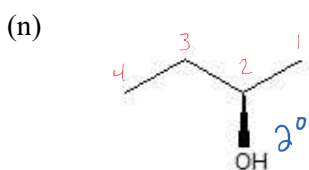
2-methylcyclopentanol



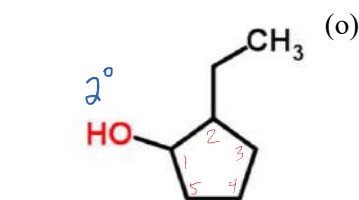
3-methyl-2-pentanol



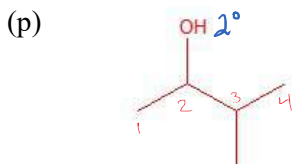
4-methyl-2-pentanol



2-butanol



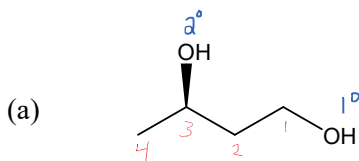
2-ethylcyclopentanol



3-methyl-2-butanol

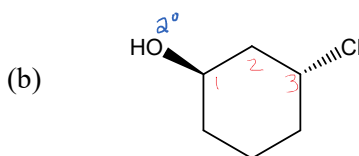
Alcohol Classification and Nomenclature Practice

1. Name or draw structures for the following compounds. Classify each alcohol as primary, secondary, or tertiary,



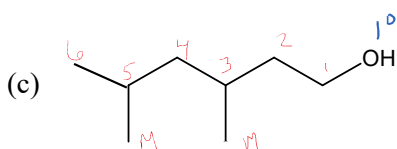
1,3-butenediol

Nope - not needed
3-chloro-~~cyclopentanol~~

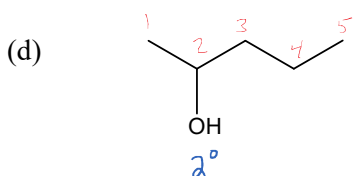


3-chlorocyclohexanol

Not
Note: there is no need to include a "1" in the name of a cyclo-alcohol. If there is only 1 "OH" group, it is implied.

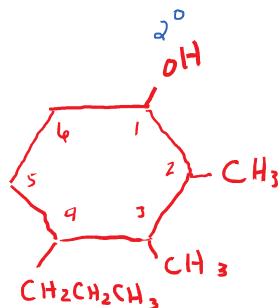


3,5-dimethyl-1-hexanol

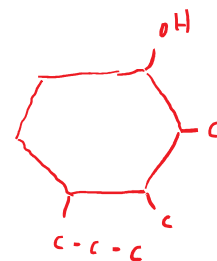


2-pentanol

- (e) 2,3-dimethyl-4-propylcyclohexanol

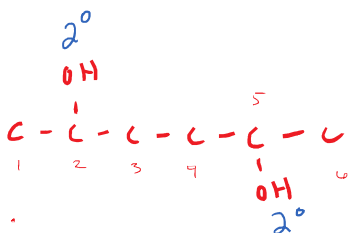


or

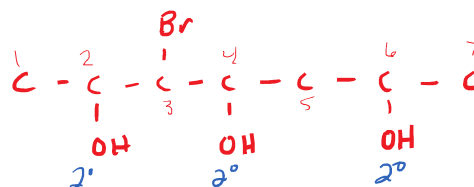


- (f) 2,5-hexanediol

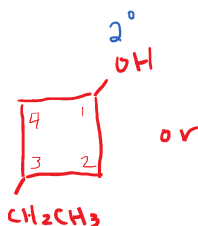
Note: your branches may go up or down differently than mine. This is OK.



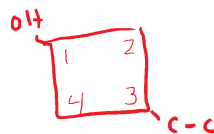
- (g) 3-bromo-2,4,6-heptanetriol



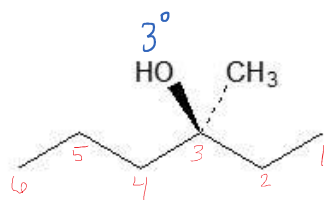
- (h) 3-ethylcyclobutanol



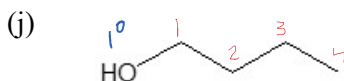
or



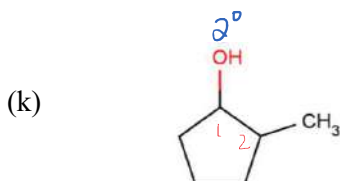
Note: you may choose to put your "OH" on a different carbon. That is OK as long as you keep it #1.



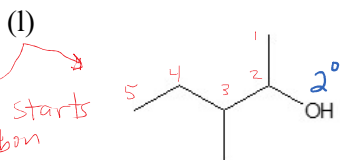
3-methyl-3-hexanol



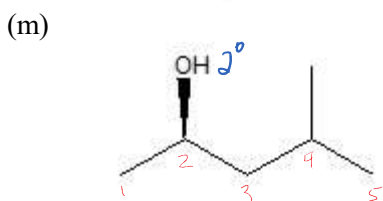
1-butanol



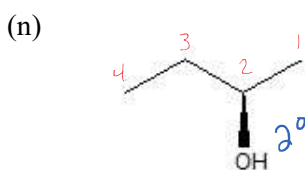
2-methylcyclopentanol



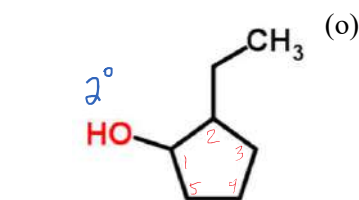
3-methyl-2-pentanol



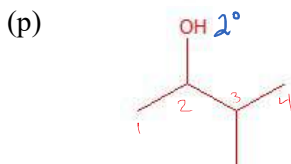
4-methyl-2-pentanol



2-butanol



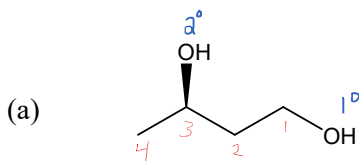
2-ethylcyclopentanol



3-methyl-2-butanol

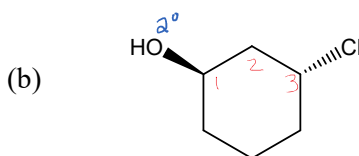
Alcohol Classification and Nomenclature Practice

1. Name or draw structures for the following compounds. Classify each alcohol as primary, secondary, or tertiary,



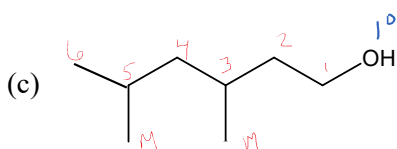
1,3-butenediol

Nope - not needed
3-chloro-~~cyclopentanol~~

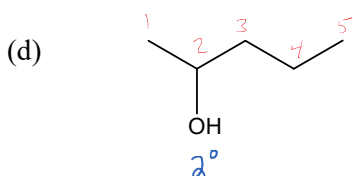


3-chlorocyclohexanol

Not Note: there is no need to include a "1" in the name of a cyclo-alcohol. If there is only 1 "OH" group, it is implied.

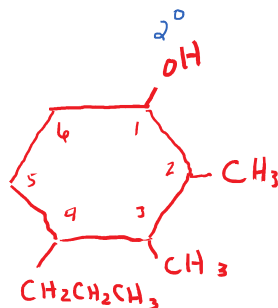


3,5-dimethyl-1-hexanol

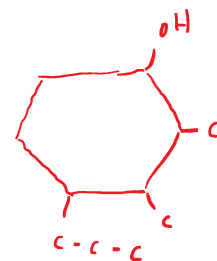


2-pentanol

- (e) 2,3-dimethyl-4-propylcyclohexanol

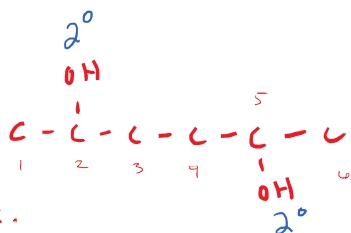


or

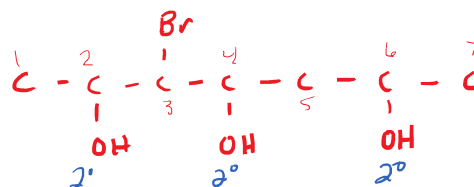


- (f) 2,5-hexanediol

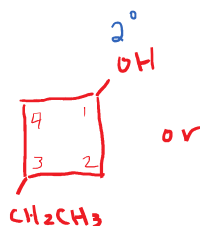
Note: your branches may go up or down differently than mine. This is OK.



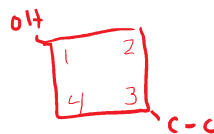
- (g) 3-bromo-2,4,6-heptanetriol



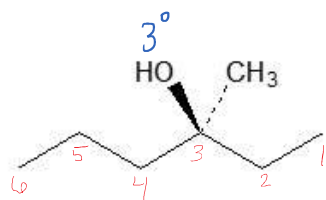
- (h) 3-ethylcyclobutanol



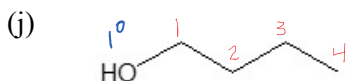
or



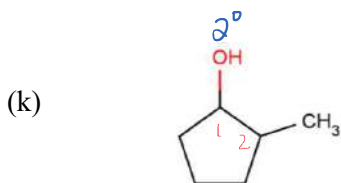
Note: you may choose to put your "OH" on a different carbon. That is OK as long as you keep it #1.



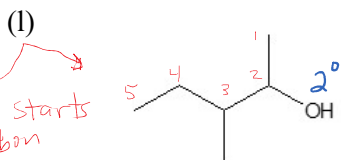
3-methyl-3-hexanol



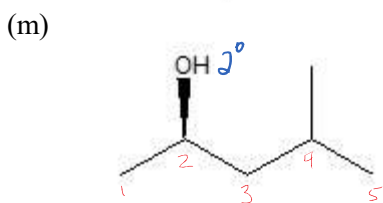
1-butanol



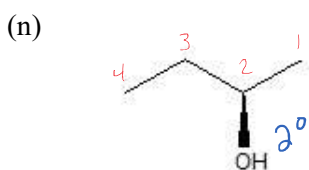
2-methylcyclopentanol



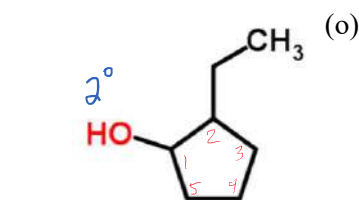
3-methyl-2-pentanol



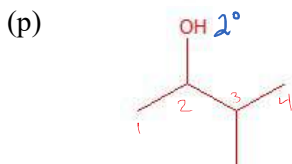
4-methyl-2-pentanol



2-butanol



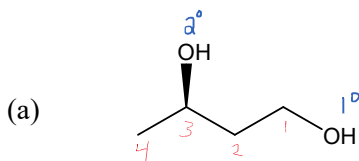
2-ethylcyclopentanol



3-methyl-2-butanol

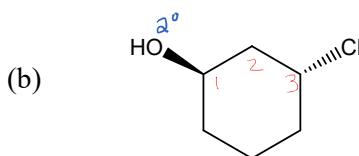
Alcohol Classification and Nomenclature Practice

1. Name or draw structures for the following compounds. Classify each alcohol as primary, secondary, or tertiary,



1,3-butenediol

Nope - not needed
3-chloro-~~cyclopentanol~~

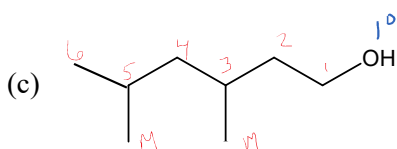


3-chlorocyclohexanol

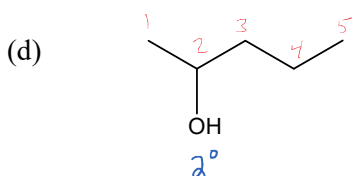
Not

Note: there is no need to include a "1" in the name of a cyclo-alcohol.

If there is only 1 "OH" group, it is implied.

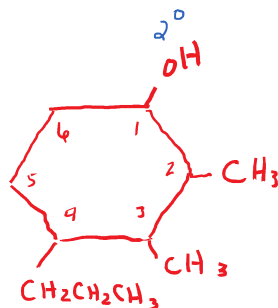


3,5-dimethyl-1-hexanol

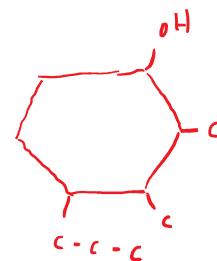


2-pentanol

- (e) 2,3-dimethyl-4-propylcyclohexanol

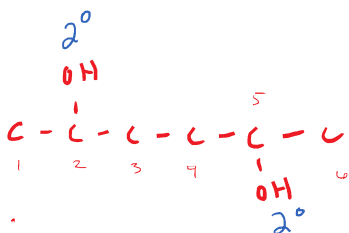


or

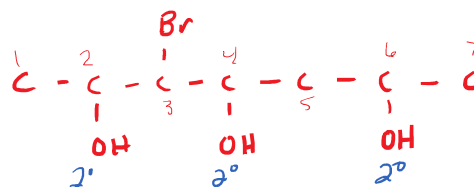


- (f) 2,5-hexanediol

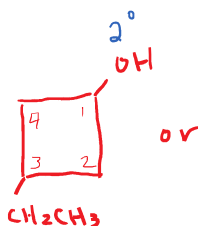
Note: your branches may go up or down differently than mine. This is OK.



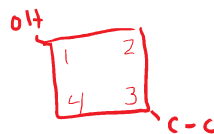
- (g) 3-bromo-2,4,6-heptanetriol



- (h) 3-ethylcyclobutanol

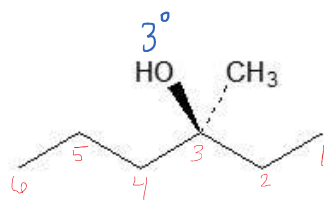


or

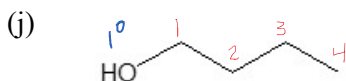


Note: you may choose to put your "OH" on a different carbon.

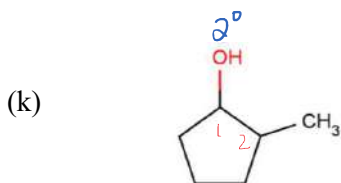
That is OK as long as you keep it #1.



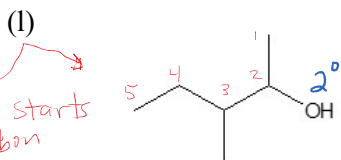
3-methyl-3-hexanol



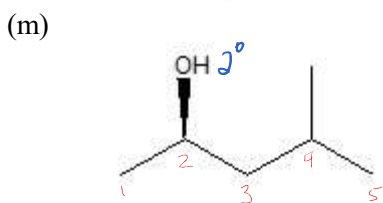
1-butanol



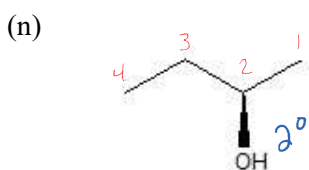
2-methylcyclopentanol



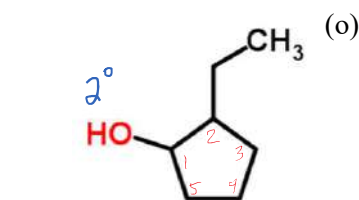
3-methyl-2-pentanol



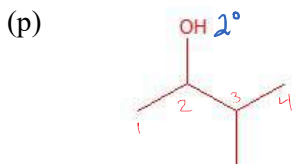
4-methyl-2-pentanol



2-butanol



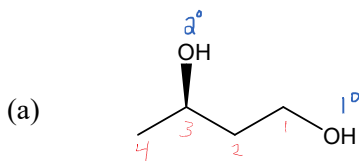
2-ethylcyclopentanol



3-methyl-2-butanol

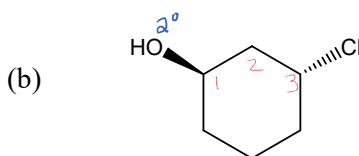
Alcohol Classification and Nomenclature Practice

1. Name or draw structures for the following compounds. Classify each alcohol as primary, secondary, or tertiary,



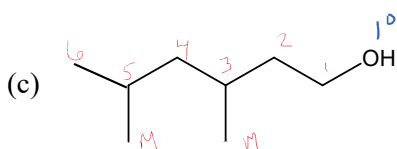
1,3-butenediol

Nope - not needed
3-chloro-~~cyclopentanol~~

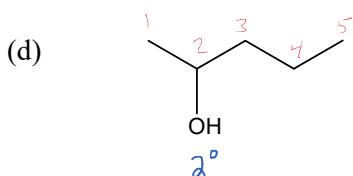


3-chlorocyclohexanol

Not
Note: there is no need to include a "1" in the name of a cyclo-alcohol. If there is only 1 "OH" group, it is implied.

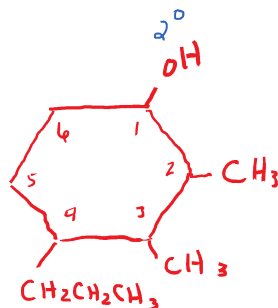


3,5-dimethyl-1-hexanol

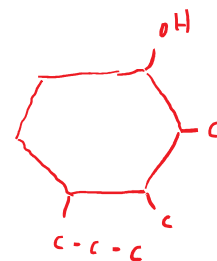


2-pentanol

- (e) 2,3-dimethyl-4-propylcyclohexanol

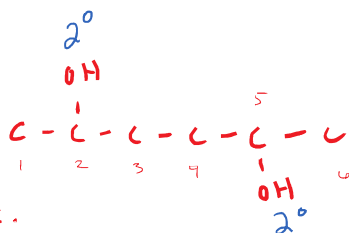


or

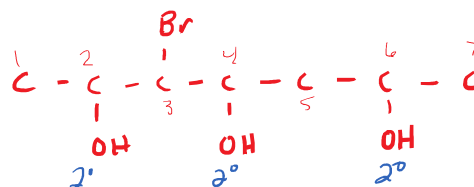


- (f) 2,5-hexanediol

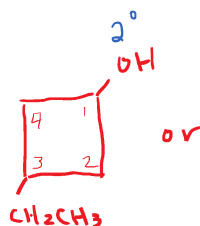
Note: your branches may go up or down differently than mine. This is OK.



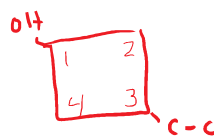
- (g) 3-bromo-2,4,6-heptanetriol



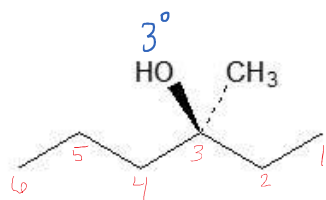
- (h) 3-ethylcyclobutanol



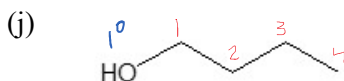
or



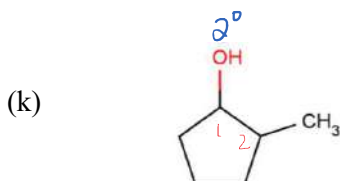
Note: you may choose to put your "OH" on a different carbon. That is OK as long as you keep it #1.



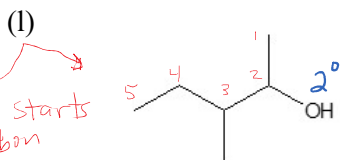
3-methyl-3-hexanol



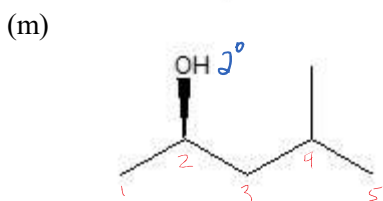
1-butanol



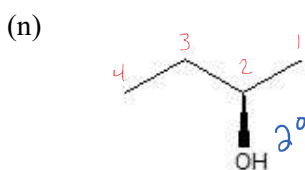
2-methylcyclopentanol



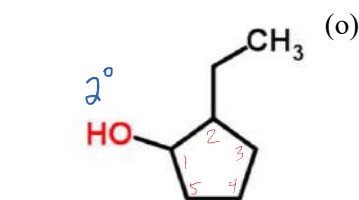
3-methyl-2-pentanol



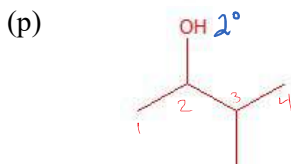
4-methyl-2-pentanol



2-butanol



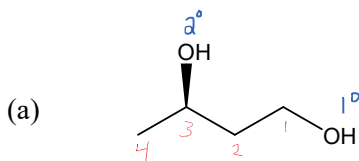
2-ethylcyclopentanol



3-methyl-2-butanol

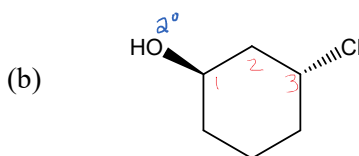
Alcohol Classification and Nomenclature Practice

1. Name or draw structures for the following compounds. Classify each alcohol as primary, secondary, or tertiary,



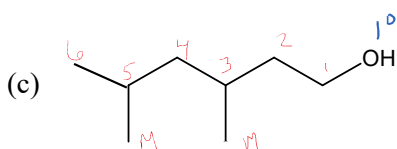
1,3-butanediol

Nope - not needed
3-chloro-~~cyclopentanol~~

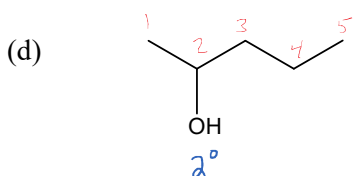


3-chlorocyclohexanol

Not
Note: there is no need to include a "1" in the name of a cyclo-alcohol. If there is only 1 "OH" group, it is implied.

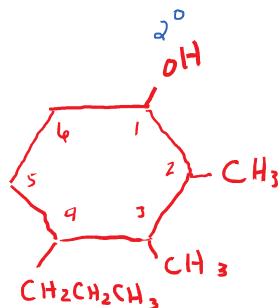


3,5-dimethyl-1-hexanol

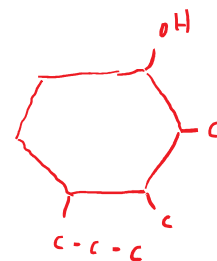


2-pentanol

- (e) 2,3-dimethyl-4-propylcyclohexanol

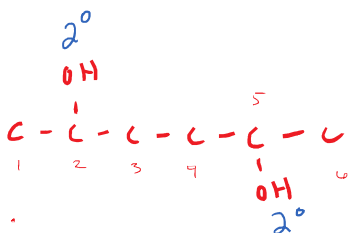


or

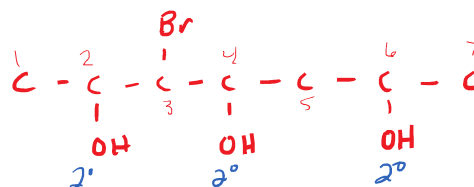


- (f) 2,5-hexanediol

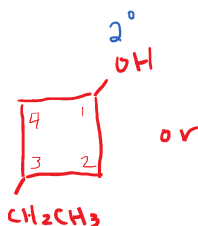
Note: your branches may go up or down differently than mine. This is OK.



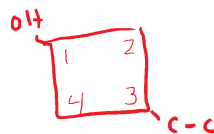
- (g) 3-bromo-2,4,6-heptanetriol



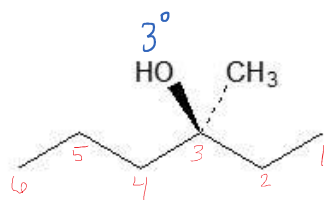
- (h) 3-ethylcyclobutanol



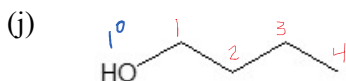
or



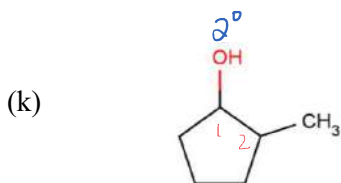
Note: you may choose to put your "OH" on a different carbon. That is OK as long as you keep it #1.



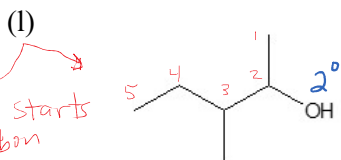
3-methyl-3-hexanol



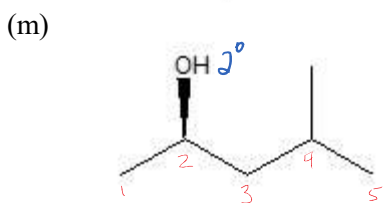
1-butanol



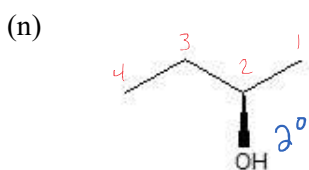
2-methylcyclopentanol



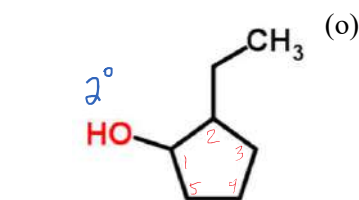
3-methyl-2-pentanol



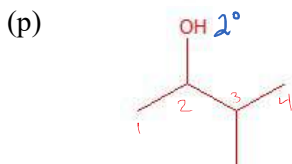
4-methyl-2-pentanol



2-butanol



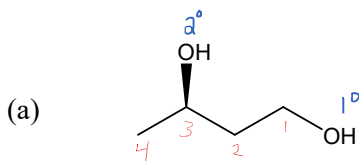
2-ethylcyclopentanol



3-methyl-2-butanol

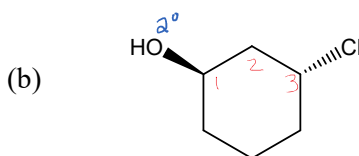
Alcohol Classification and Nomenclature Practice

1. Name or draw structures for the following compounds. Classify each alcohol as primary, secondary, or tertiary,



1,3-butenediol

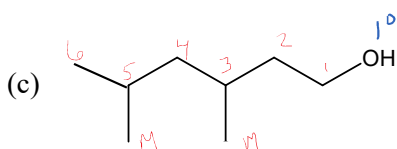
Nope - not needed
3-chloro-~~cyclopentanol~~



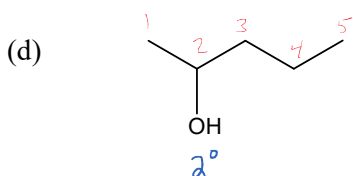
3-chlorocyclohexanol

Not

Note: there is no need to include a "1" in the name of a cyclo-alcohol. If there is only 1 "OH" group, it is implied.

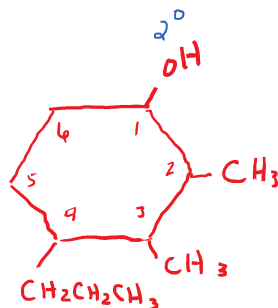


3,5-dimethyl-1-hexanol

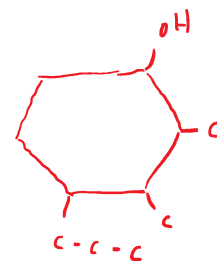


2-pentanol

- (e) 2,3-dimethyl-4-propylcyclohexanol

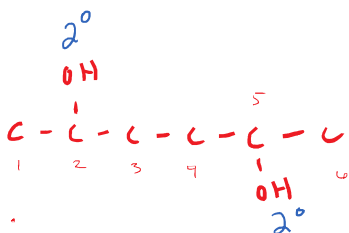


or

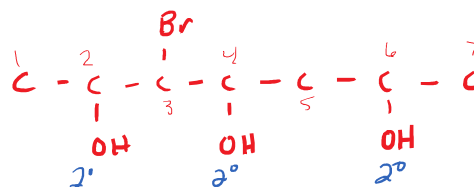


- (f) 2,5-hexanediol

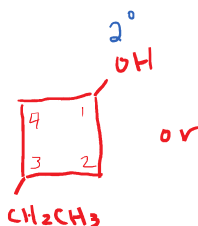
Note: your branches may go up or down differently than mine. This is OK.



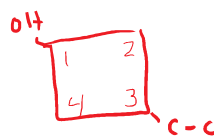
- (g) 3-bromo-2,4,6-heptanetriol



- (h) 3-ethylcyclobutanol

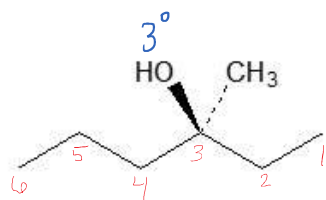


or

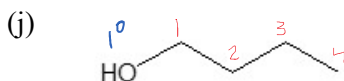


Note: you may choose to put your "OH" on a different carbon.

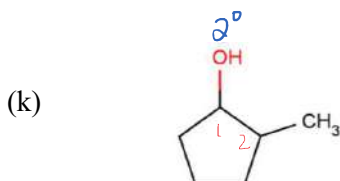
That is OK as long as you keep it #1.



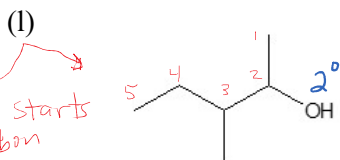
3-methyl-3-hexanol



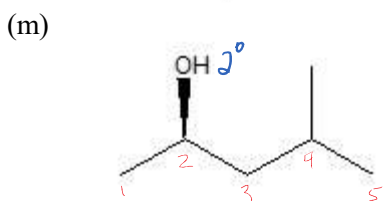
1-butanol



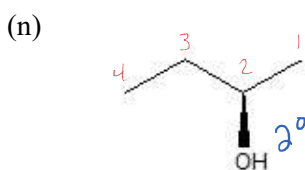
2-methylcyclopentanol



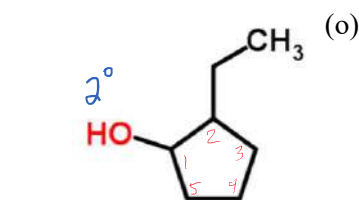
3-methyl-2-pentanol



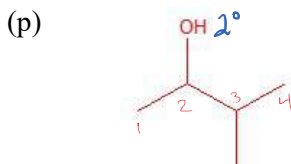
4-methyl-2-pentanol



2-butanol



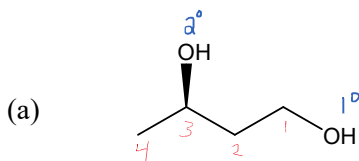
2-ethylcyclopentanol



3-methyl-2-butanol

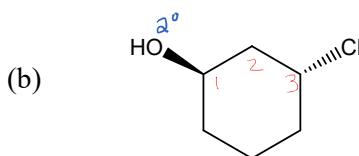
Alcohol Classification and Nomenclature Practice

1. Name or draw structures for the following compounds. Classify each alcohol as primary, secondary, or tertiary,



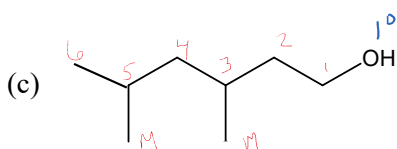
1,3-butenediol

Nope - not needed
3-chloro-~~cyclopentanol~~

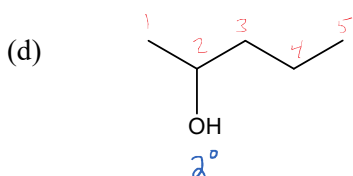


3-chlorocyclohexanol

Not
Note: there is no need to include a "1" in the name of a cyclo-alcohol. If there is only 1 "OH" group, it is implied.

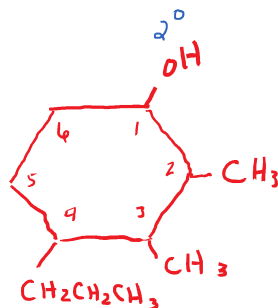


3,5-dimethyl-1-hexanol

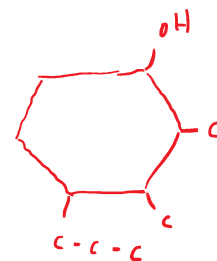


2-pentanol

- (e) 2,3-dimethyl-4-propylcyclohexanol

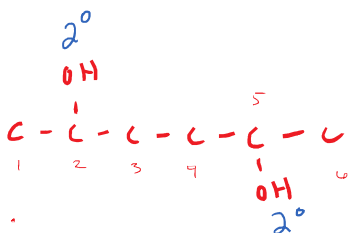


or

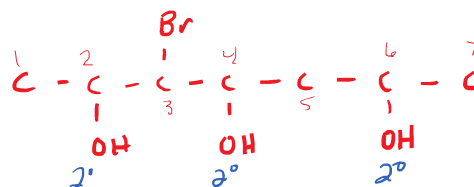


- (f) 2,5-hexanediol

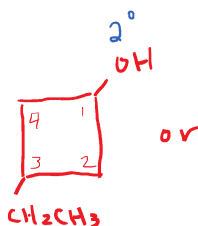
Note: your branches may go up or down differently than mine. This is OK.



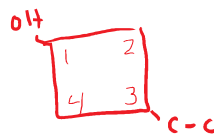
- (g) 3-bromo-2,4,6-heptanetriol



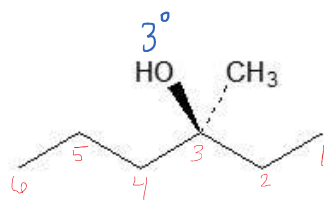
- (h) 3-ethylcyclobutanol



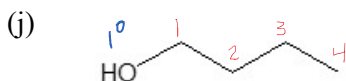
or



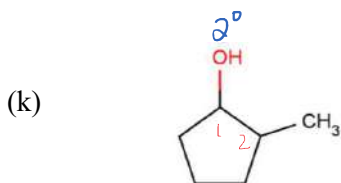
Note: you may choose to put your "OH" on a different carbon. That is OK as long as you keep it #1.



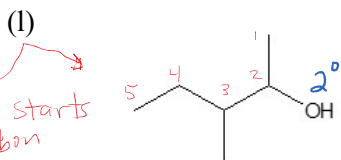
3-methyl-3-hexanol



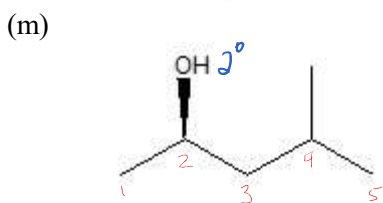
1-butanol



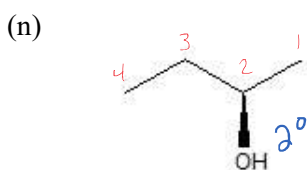
2-methylcyclopentanol



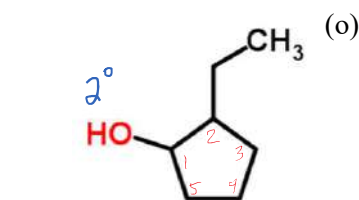
3-methyl-2-pentanol



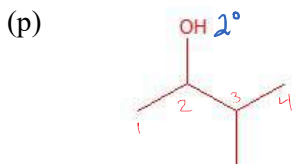
4-methyl-2-pentanol



2-butanol



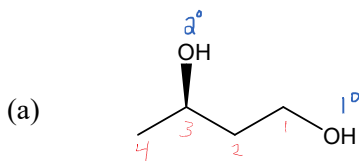
2-ethylcyclopentanol



3-methyl-2-butanol

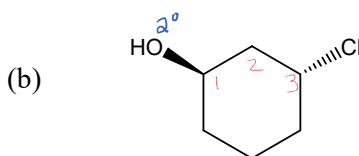
Alcohol Classification and Nomenclature Practice

1. Name or draw structures for the following compounds. Classify each alcohol as primary, secondary, or tertiary,



1,3-butenediol

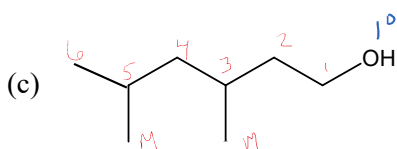
Nope - not needed
3-chloro-~~cyclopentanol~~



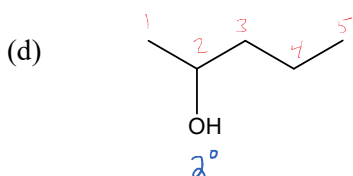
3-chlorocyclohexanol

Not

Note: there is no need to include a "1" in the name of a cyclo-alcohol. If there is only 1 "OH" group, it is implied.

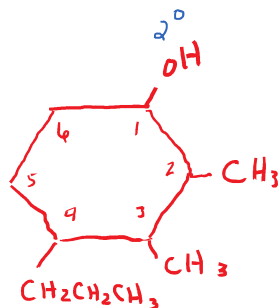


3,5-dimethyl-1-hexanol

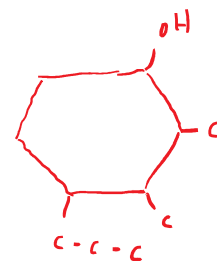


2-pentanol

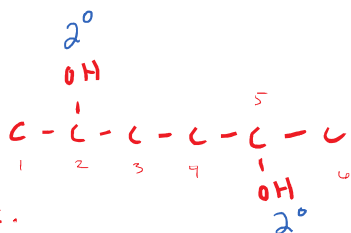
- (e) 2,3-dimethyl-4-propylcyclohexanol



or

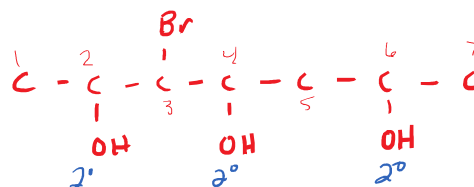


- (f) 2,5-hexanediol

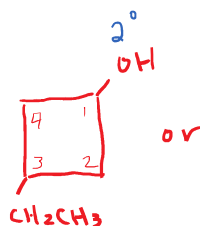


Note: your branches may go up or down differently than mine. This is OK.

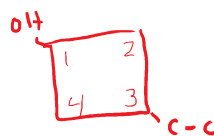
- (g) 3-bromo-2,4,6-heptanetriol



- (h) 3-ethylcyclobutanol

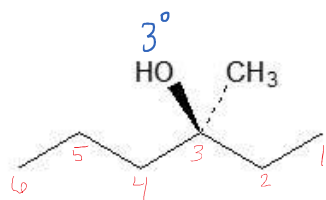


or

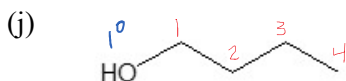


Note: you may choose to put your "OH" on a different carbon.

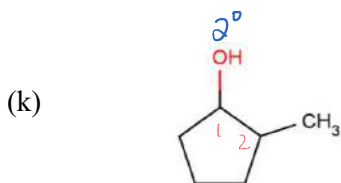
That is OK as long as you keep it #1.



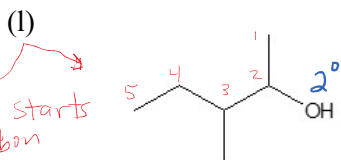
3-methyl-3-hexanol



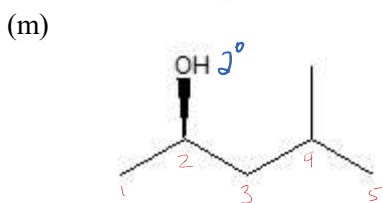
1-butanol



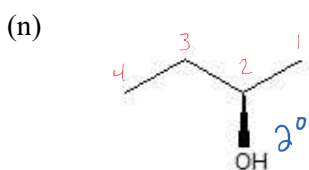
2-methylcyclopentanol



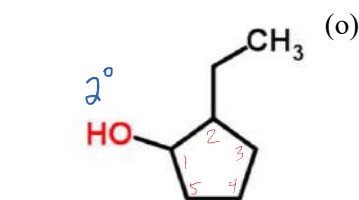
3-methyl-2-pentanol



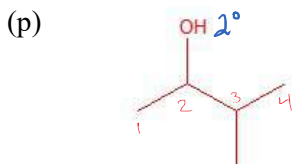
4-methyl-2-pentanol



2-butanol



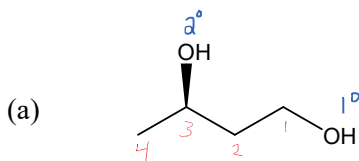
2-ethylcyclopentanol



3-methyl-2-butanol

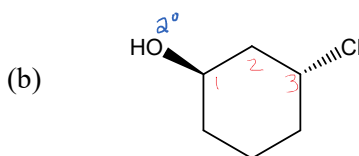
Alcohol Classification and Nomenclature Practice

1. Name or draw structures for the following compounds. Classify each alcohol as primary, secondary, or tertiary,



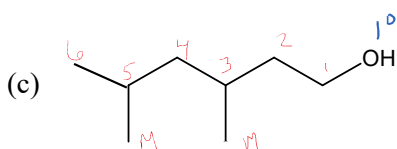
1,3-butenediol

Nope - not needed
3-chloro-~~cyclopentanol~~

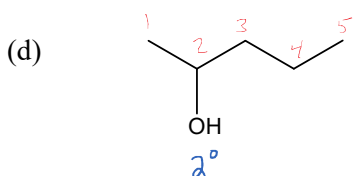


3-chlorocyclohexanol

Not
Note: there is no need to include a "1" in the name of a cyclo-alcohol. If there is only 1 "OH" group, it is implied.

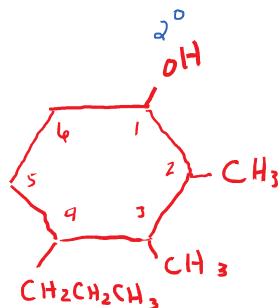


3,5-dimethyl-1-hexanol

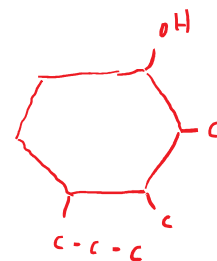


2-pentanol

- (e) 2,3-dimethyl-4-propylcyclohexanol

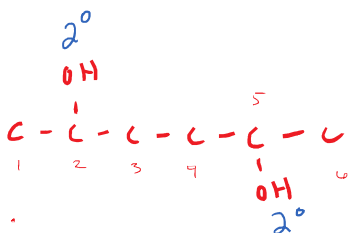


or

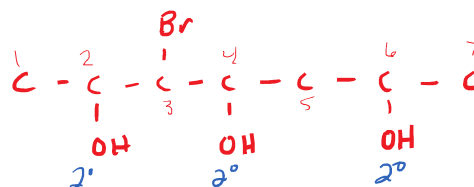


- (f) 2,5-hexanediol

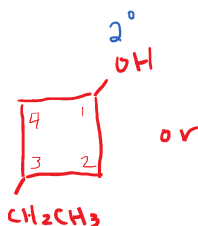
Note: your branches may go up or down differently than mine. This is OK.



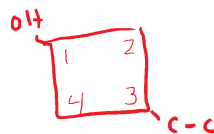
- (g) 3-bromo-2,4,6-heptanetriol



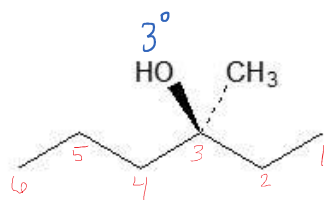
- (h) 3-ethylcyclobutanol



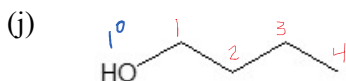
or



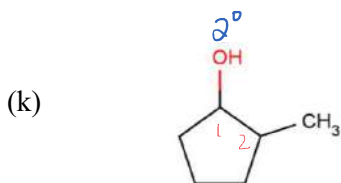
Note: you may choose to put your "OH" on a different carbon. That is OK as long as you keep it #1.



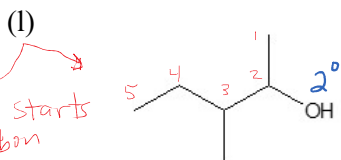
3-methyl-3-hexanol



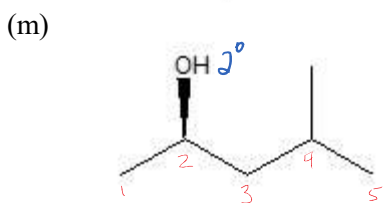
1-butanol



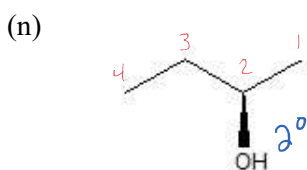
2-methylcyclopentanol



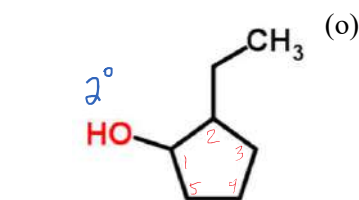
3-methyl-2-pentanol



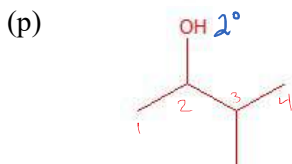
4-methyl-2-pentanol



2-butanol



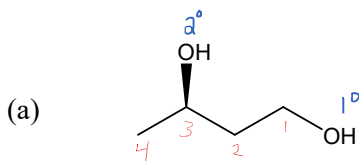
2-ethylcyclopentanol



3-methyl-2-butanol

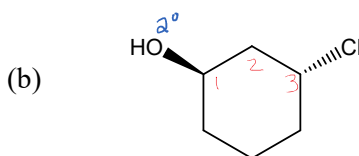
Alcohol Classification and Nomenclature Practice

1. Name or draw structures for the following compounds. Classify each alcohol as primary, secondary, or tertiary,



1,3-butenediol

Nope - not needed
3-chloro-~~cyclopentanol~~

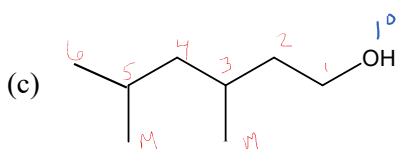


3-chlorocyclohexanol

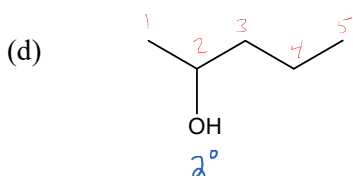
Not

Note: there is no need to include a "1" in the name of a cyclo-alcohol.

If there is only 1 "OH" group, it is implied.

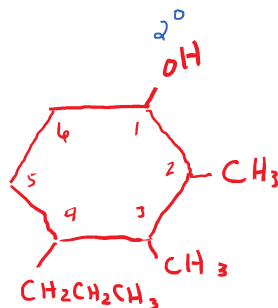


3,5-dimethyl-1-hexanol

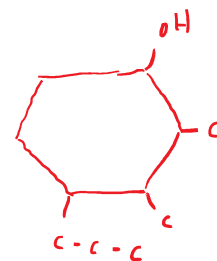


2-pentanol

- (e) 2,3-dimethyl-4-propylcyclohexanol

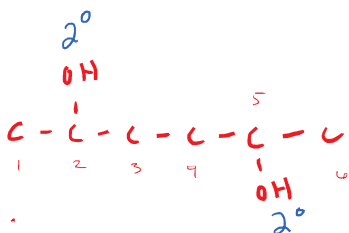


or

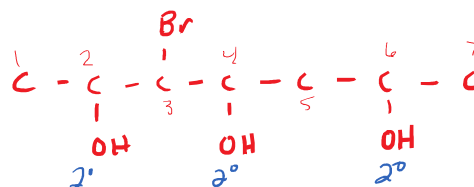


- (f) 2,5-hexanediol

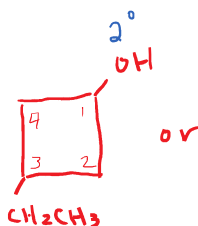
Note: your branches may go up or down differently than mine. This is OK.



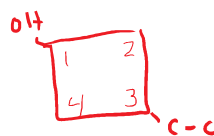
- (g) 3-bromo-2,4,6-heptanetriol



- (h) 3-ethylcyclobutanol

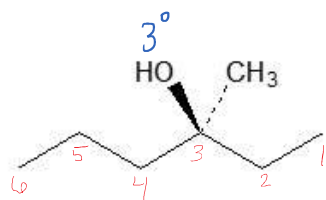


or

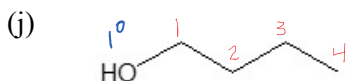


Note: you may choose to put your "OH" on a different carbon.

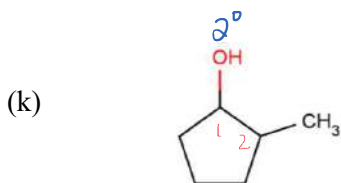
That is OK as long as you keep it #1.



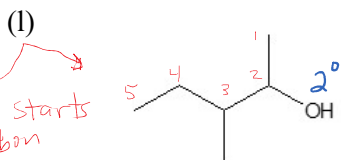
3-methyl-3-hexanol



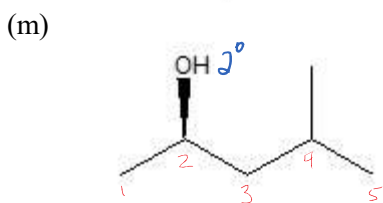
1-butanol



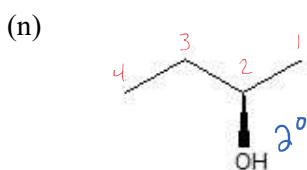
2-methylcyclopentanol



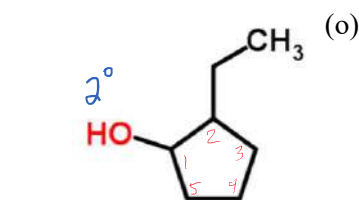
3-methyl-2-pentanol



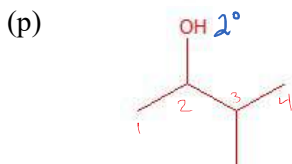
4-methyl-2-pentanol



2-butanol



2-ethylcyclopentanol



3-methyl-2-butanol