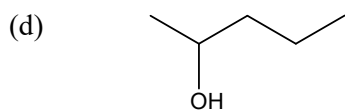
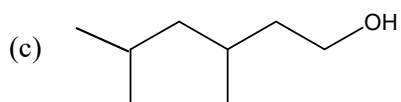
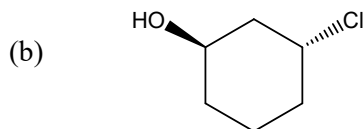
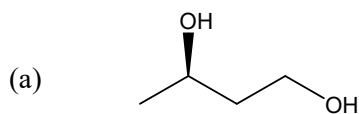


## Alcohol Classification and Nomenclature Practice

1. Name or draw structures for the following compounds. Classify each alcohol as primary, secondary, or tertiary,



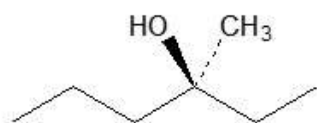
(e) 2,3-dimethyl-4-propylcyclohexanol

(f) 2,5-hexanediol

(g) 3-bromo-2,4,6-heptanetriol

(h) 3-ethylcyclobutanol

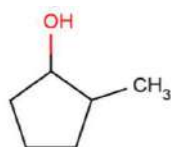
(i)



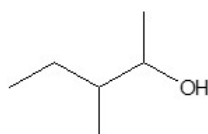
(j)



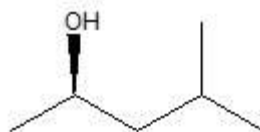
(k)



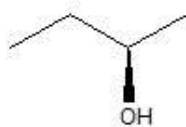
(l)



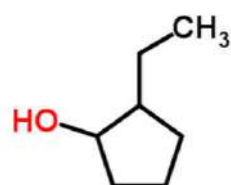
(m)



(n)



(o)



(p)

