

BEARCAT DAY 27

Tuesday, April 28, 2020

GRADE 6
ANDERSON COUNTY SCHOOLS



ANDERSON COUNTY MIDDLE SCHOOL

6TH GRADE BEARCAT DAY 27

To Submit Your Assignments:

1. Answer in Google Classroom If you cannot,
2. Email your answer to your teacher. If you cannot,
3. Drop-off your written work at the school office.

LANGUAGE ARTS	CONTEXT CLUES Use context clues to answer questions 1-8 .
MATH	GEOMETRY STUDY GUIDE This week we will be reviewing geometry concepts to prepare for our assessment next week. Answer the questions on the second page of the study guide .
SCIENCE	WEATHER VS CLIMATE Read the passage , answer the included questions.
SOCIAL STUDIES	FROM ROMAN REPUBLIC TO ROMAN EMPIRE (This will be the assignment for Bearcat Days 24-27. Keep the Atlas until you have answered all the questions in this set.) Using the nystrom Atlas pages 34-39 , answer the questions about the Roman Empire.
PE/HEALTH	MEDICATIONS REVIEW View the information and answer the questions .
LITERACY	NARRATIVE ON-DEMAND Continue writing your Narrative On Demand - I Survived Coronavirus 2020. Today you will complete paragraph two.

Section 2 of 4

Bearcat Day 27-Context Clues

Description (optional)

Yesterday you were introduced to context clues. Context clues are the hints an author gives to help define what a difficult word may mean. Today you are going to practice using context clues and picking out the words in the sentence that helps you decide what the word means. It is one way to improve your vocabulary.

Description (optional)

Watch the video to review context clues.



Section 3 of 4

Bearcat Day 27 Context Clues-Questions 1-5

Read the sentences below. Use your context clues to determine what the chosen word means.

1. There was no sidewalk, so pedestrians had to be careful to avoid the cars. Use your context clues to decide the meaning of the word "pedestrians." *

- ☐ bicyclists
- ☐ walkers
- ☐ onlookers
- ☐ birds

2. Although we played a good game, by half time our adversaries were ahead by 14 points. Using your context clues, what is the meaning of the word "adversaries?" *

- ☐ fans
- ☐ referees
- ☐ coaches
- ☐ opponents

3. The students were chided by their professor for cheating on their tests. Using your context clues, what is the meaning of the word "chided?" *

- ☐ advised
- ☐ scolded
- ☐ honored
- ☐ praised

4. The valiant general had led his small group of men to victory against a vast army. Using your context clues, what is the meaning of the word "valiant?" *

- ☐ proud
- ☐ veteran
- ☐ brave
- ☐ friendly


5. Using the clues in her aunt's diary, Lisa tried to surmise the truth of her mother's disappearance. Using your context clues, what is the meaning of the word "surmise?" *

- ☐ tell
- ☐ guess
- ☐ cover up
- ☐ bury




Bearcat Day27Context Clues Questions 6-8  

Read the sentences below and chose the context clue that helped you determine the meaning of the word.

6. The feeling of melancholy was evident by the sad, depressed mood of the crowd. What context clue helps you to determine the meaning of the word "melancholy?" 

- ☐ crowd
- ☐ evident
- ☐ sad
- ☐ by

7. Many of the students at the preschool were precocious. One child had learned to read at the age of two. What context clues help you determine the meaning of the word "precocious." 

- ☐ preschool
- ☐ learned to read at the age of two
- ☐ students
- ☐ child

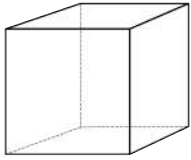
8. The contusion on the patient's arm was one of several bruises on his body. What context clue ^{*} helps you determine the meaning of the word "contusion?"

- ☐ bruises
- ☐ patient's
- ☐ body
- ☐ arm

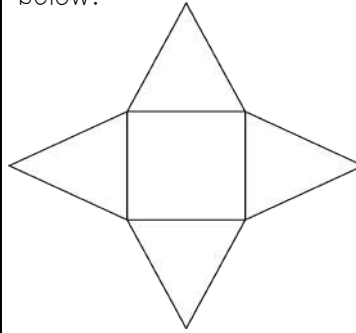
I CAN REPRESENT 3D FIGURES WITH NETS.

6.G.4

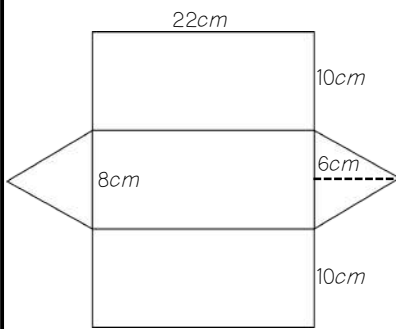
7. Sketch a net that will form the 3D figure below.



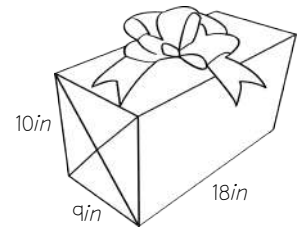
8. Sketch the 3D figure that is formed by the net below.



9. Sketch and label the 3D object using the dimensions from the net.



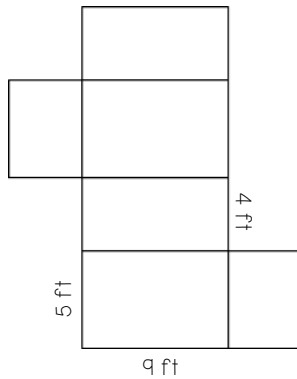
10. Sketch and label the net using the dimensions from the 3D object.



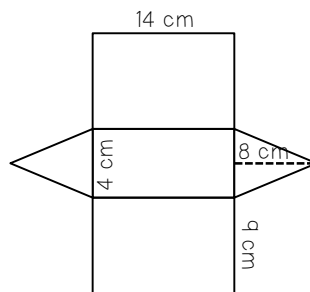
I CAN USE NETS TO FIND SURFACE AREA.

6.G.4

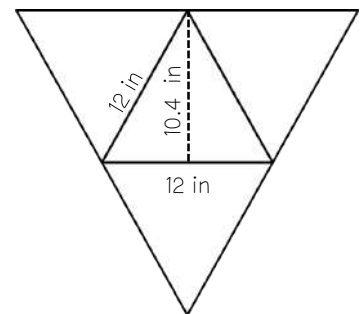
11.



12.



13.



Weather versus climate - Actively Learn

 read.activelylearn.com



Where in Hawaii do you want to go?

Look at a list of cities with the best climate in the United States. Hawaii is well represented. Now look at a list of cities with the worst climate in the United States. (You know where this is going, don't you?) Yes, Hawaii is also represented. Kona and Hilo are both on the Big Island. Hilo is on the windward side where the trade winds bring in moisture from the Pacific. Kona is on the leeward side, beyond the high volcanic mountains. This city lies within the rain shadow. Guess which city is more popular with tourists?

What is Climate?

Almost anything can happen with the weather. Climate, however, is more predictable.

Climate is the long-term average of weather in a particular spot. Good climate is why we choose to vacation in Hawaii in February (usually on the leeward side). Of course, the weather is not guaranteed to be good! A location's climate considers the same characteristics as its weather. These are its air temperature, humidity, wind speed and direction, and the type, quantity, and frequency of precipitation. For climate, these things are averaged over time.

question 1 DOK 2 Standard RST.4 MS-ESS2-5

What makes the climate in Hawaii different from the weather in Hawaii?

#1) The weather is wetter than the climate.

The climate is windier than the weather.

Climate is a long term average of the weather.

Grade 6 Bearcat Day 27 Science

The climate is generally warmer than the weather.

During the mid- to late-twentieth century, California received an enormous influx of new residents. Many of these people came from the northeastern United States. They were sick of the cold, snow, and rain. Southern California, especially near the coast, has a nearly perfect climate. The average lows and highs in San Diego year round are in the 50s, 60s, and 70s (figure below). A bike path along Mission Bay in San Diego, California. The climate for a particular place is steady. Changes occur only very slowly. Climate is determined by many factors, including the angle of the Sun, the likelihood of cloud cover, and the air pressure. All of these factors are related to the amount of solar energy that hits that location over time. The climate of a region depends on its position relative to many things. These factors are described in the next sections.

Submit



Summary

- Climate is the long-term average of weather.
- Climate changes very slowly.
- Climate depends on a number of factors such as air temperature, humidity, wind speed and direction, and the type, quantity, and frequency of precipitation.

question 2 DOK 3 Standard RST.2 MS-ESS2-5

You have a friend who wants to move to Hawaii because, "Hawaii has better weather". Based on your knowledge from the text, is this an accurate statement? Why or why not?

#2)

Do not write outside this box.

Using medication.

Use notes from Day 26.

Certain medications may be prescription only because they may be addictive. *

2 points

- ☐ True
- ☐ False

Prescription medications do not have any side effects. *

2 points

- ☐ True
- ☐ False

Some people may be allergic to prescription medications. *

2 points

- ☐ True
- ☐ False

Grade 6 Bearcat Day 27 Health

p 2 of 2

You should always be aware of the possible side effects of medication. * 2 points

- ☐ True
- ☐ False

You should always read and follow the directions before taking a medication. * 2 points

- ☐ True
- ☐ False

Submit

This form was created inside of Anderson County Schools. [Report Abuse](#)

Google Forms