

Brandon Valley School District
District Learning Plan
March 30 - April 3, 2020

Grade 4 Math



Brandon Valley School District Distance Learning Plan

LESSON/UNIT: Chapter 13

SUBJECT/GRADE: Math/4th

DATES: March 30 - April 3

<p>What do students need to do?</p> <p><u>PART ONE link to BV instructional video for week of March 30 - April 3, 2020</u></p> <p><u>PART TWO link to BV instructional video for week of March 30 - April 3, 2020</u></p>	<p>Monday: (3/30) Using examples and teaching from pg 825 complete pg. 829-830 (My Homework)</p> <p>Tuesday: (3/31) Complete pg 836 (My Homework) Use your problem solving skill-break each problem apart</p> <p>Wednesday: (4/1) Complete check my progress pg. 837-838</p> <p>Thursday: (4/2) Using examples and teaching from pg. 839 complete pg 843-844 (My homework)</p> <p>Friday: (4/3) Using examples and teaching from pg. 845 complete pg 849-850 (My homework)</p> <p>*All math from here on out will be done using the MATH TEXTBOOK sent home. (If your child does NOT have the assigned page numbers, please contact your child's teacher.)</p>
<p>What do students need to bring back to school?</p>	<p>Check my progress pg. 837-838</p>
<p>What standards do the lessons cover?</p>	<p>4.MD.3 - Apply the area and perimeter formulas for rectangles in real world and mathematical problems</p> <p>4.G.1.1 Locate major political and physical features of South Dakota and the United States on a map or globe</p>
<p>What materials do students need? What extra resources can students use?</p>	<p>Needed Materials: workbook pages and a pencil</p> <p>Extra Resources:</p> <p>Lesson on perimeter - https://www.khanacademy.org/math/basic-geo/basic-geo-area-and-perimeter/basic-geo-perimeter/v/introduction-to-perimeter</p> <ul style="list-style-type: none"> • Lesson on area - https://www.youtube.com/watch?v=1dqAOKdJmRI • brainpop.com-free access for parents! perimeter and area videos
<p>What can students do if they finish early?</p>	<p>Perimeter and area games</p> <p>https://www.mathplayground.com/area_perimeter.html</p> <p>https://toytheater.com/perimeter-climber/</p> <p>https://www.sheppardsoftware.com/mathgames/geometry/shapeshoot/PerimeterShapesShoot.htm</p> <p>https://www.splashlearn.com/area-and-perimeter-games</p> <p>https://www.freckle.com/math/</p>

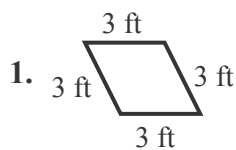
<p>Who can we contact if we have questions?</p>	<p><u>Brandon Elementary</u> Building Principal: Mr. Horst- merle.horst@k12.sd.us Teachers: Mr. Giles- Scott.Giles@k12.sd.us Mr. Krivarchka- Joe.Krivarchka@k12.sd.us Ms. Lane- Katee.Lane@k12.sd.us Mr. Rogers- Marshall.Rogers@k12.sd.us Mr. Schultz- Benjamin.Schultz@k12.sd.us <u>Fred Assam Elementary</u> Building Principal: Ms. Foster- susan.foster@k12.sd.us Teachers: Ms. Harte- Sarah.Harte@k12.sd.us Ms. Scholten- Tara.Scholten@k12.sd.us Mr. Steemken- Evan.Steemken@k12.sd.us Ms. Sunne- Noel.Sunne@k12.sd.us <u>Robert Bennis Elementary</u> Building Principal: Ms. Hofkamp- Kristin.Hofkamp@k12.sd.us Teachers: Mr. Linneweber- Cody.Linneweber@k12.sd.us Ms. Pudwill- Andrea.Pudwill@k12.sd.us Ms. Storm- Jena.Storm@k12.sd.us Mr. Sylliaasen- Tim.Sylliaasen@k12.sd.us <u>Valley Springs Elementary</u> Building Principal: Ms. Palmer- tanya.palmer@k12.sd.us Teacher: Ms. Abens- lindsey.abens@k12.sd.us long-term sub for laura.lueders@k12.sd.us</p>
<p><u>Notes:</u></p> <p>*All math from here on out will be done using the MATH TEXTBOOK sent home. (If your child does NOT have the assigned page numbers, please contact your child's teacher.)</p>	

Instructional materials are posted below (if applicable)

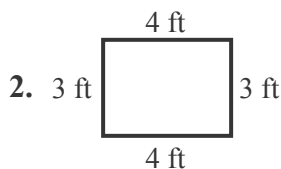
Brandon Valley School District

Check My Progress *(Lessons 1 through 2)*

Find each perimeter.

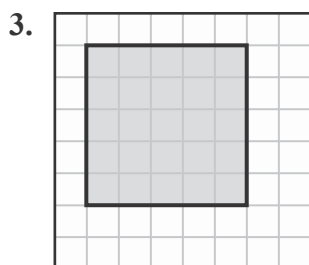


1. _____

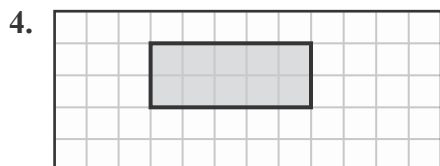


2. _____

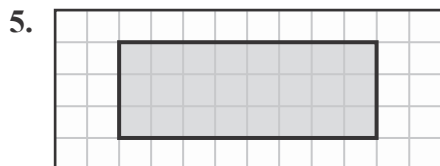
Find the perimeter of each rectangle in units.



3. _____



4. _____



5. _____

Solve.

6. Javier is gluing strips of felt around two identical rectangular picture frames. One frame is 16 centimeters long and 12 centimeters wide. How much felt will Javier need?

6. _____

7. Sarah practices yoga for 40 minutes, 3 times a week. How many hours does she practice yoga in 4 weeks?

7. _____