

**Third Grade
Social Studies
Week 1
April 6-10, 2020**

NAME_____ P__

The Compass Rose

Part 1: The Compass Rose

Write the word or words to complete each sentence.
Use the words in the box to help you.

cardinal directions

intermediate directions

southwest,

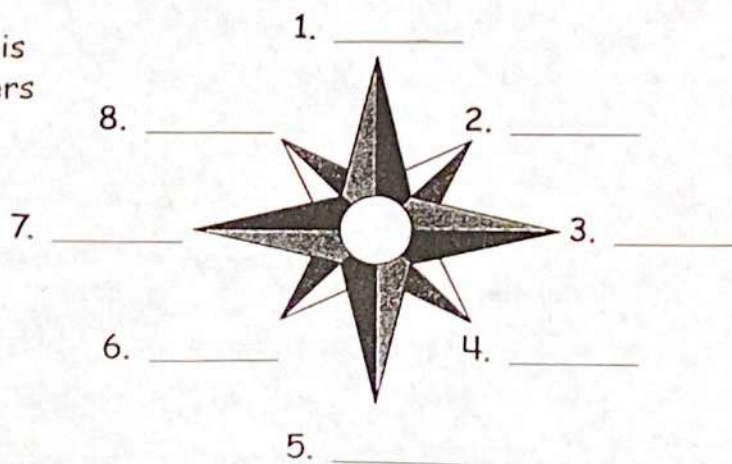
compass rose

north

1. A symbol that shows directions is a _____.
2. The four main directions are called _____.
3. Northeast, southeast, southwest, and northwest are called _____.
4. The direction that points to the top of the page is _____.
5. The opposite direction of northeast is _____.

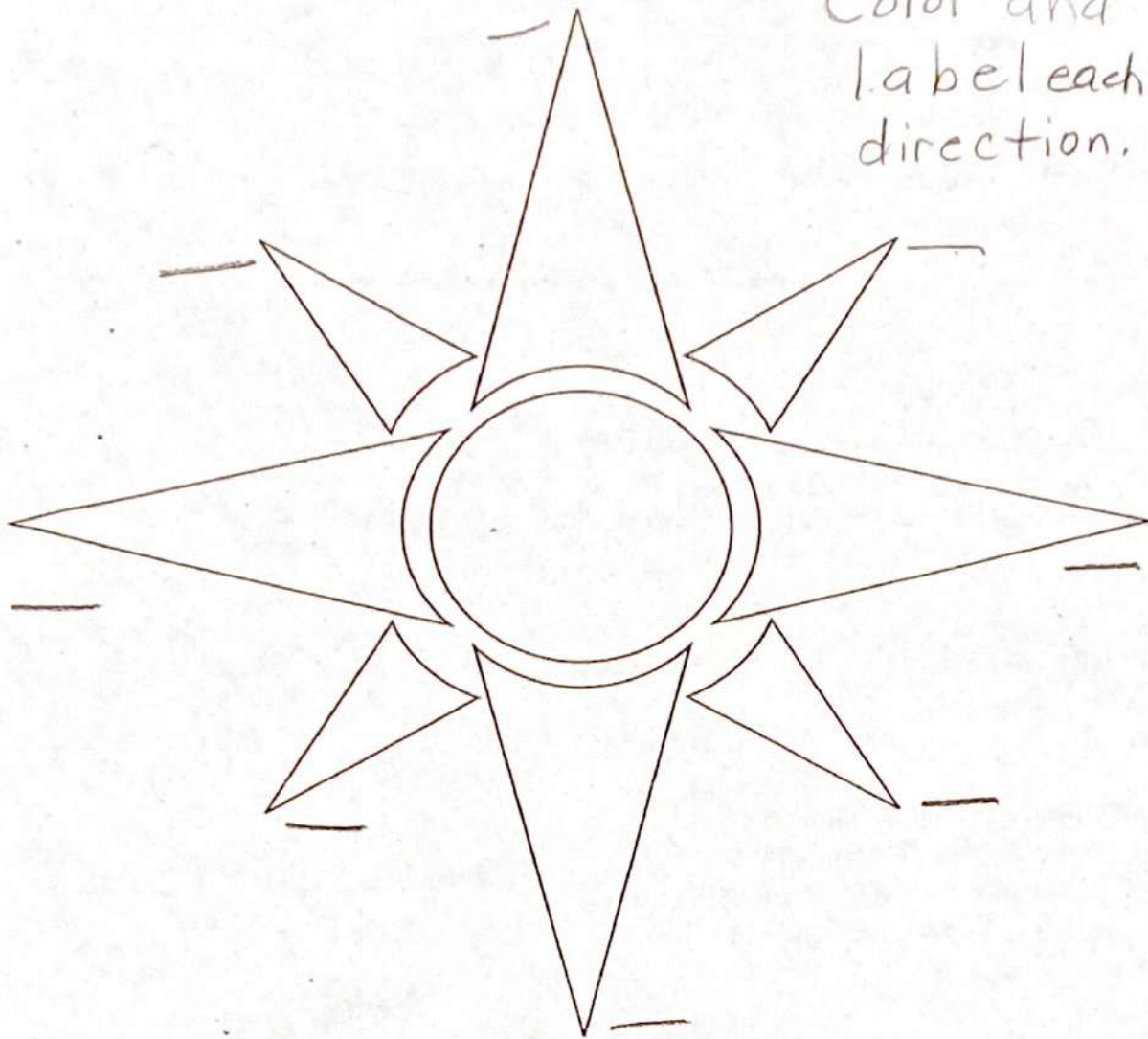
Part 2: Cardinal and Intermediate Directions

Write the eight directions on this compass rose. You may use letters instead of words.



The Compass Rose: Using Cardinal and Intermediate Directions

* Color and
label each
direction.



The intermediate directions are:

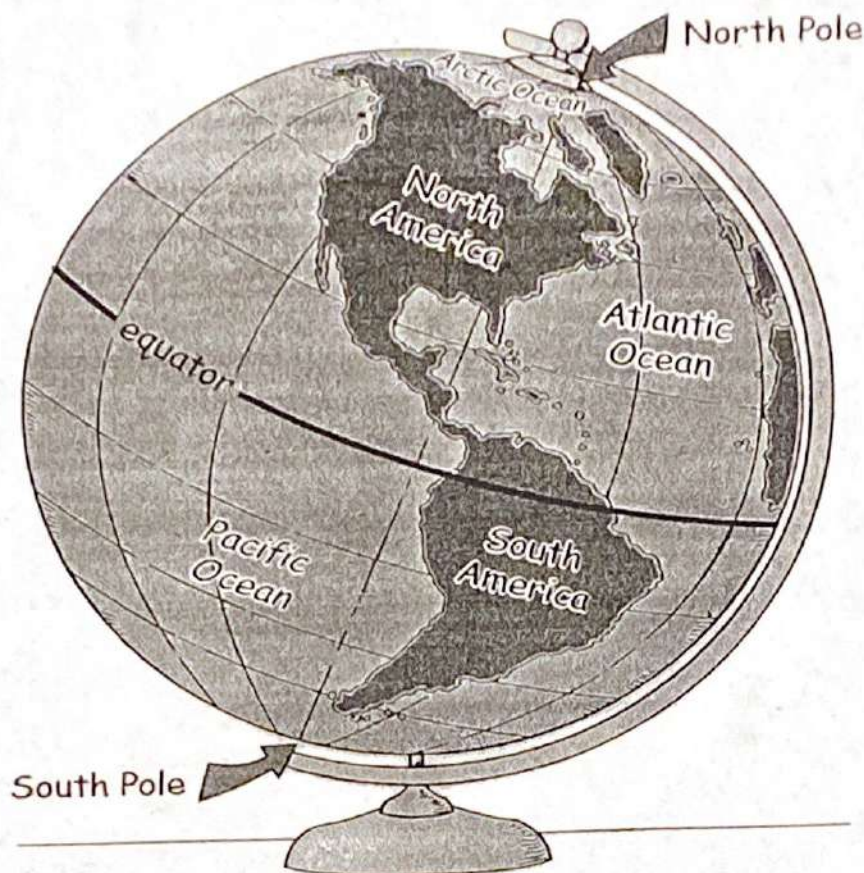
NE = northeast

SE = southeast

NW = northwest

SW = southwest

Looking at the Globe



This picture shows a globe.
A globe is a model of Earth.
A globe is shaped round like the Earth.

This side of the globe shows two of the continents.
This side of the globe shows three of the oceans.

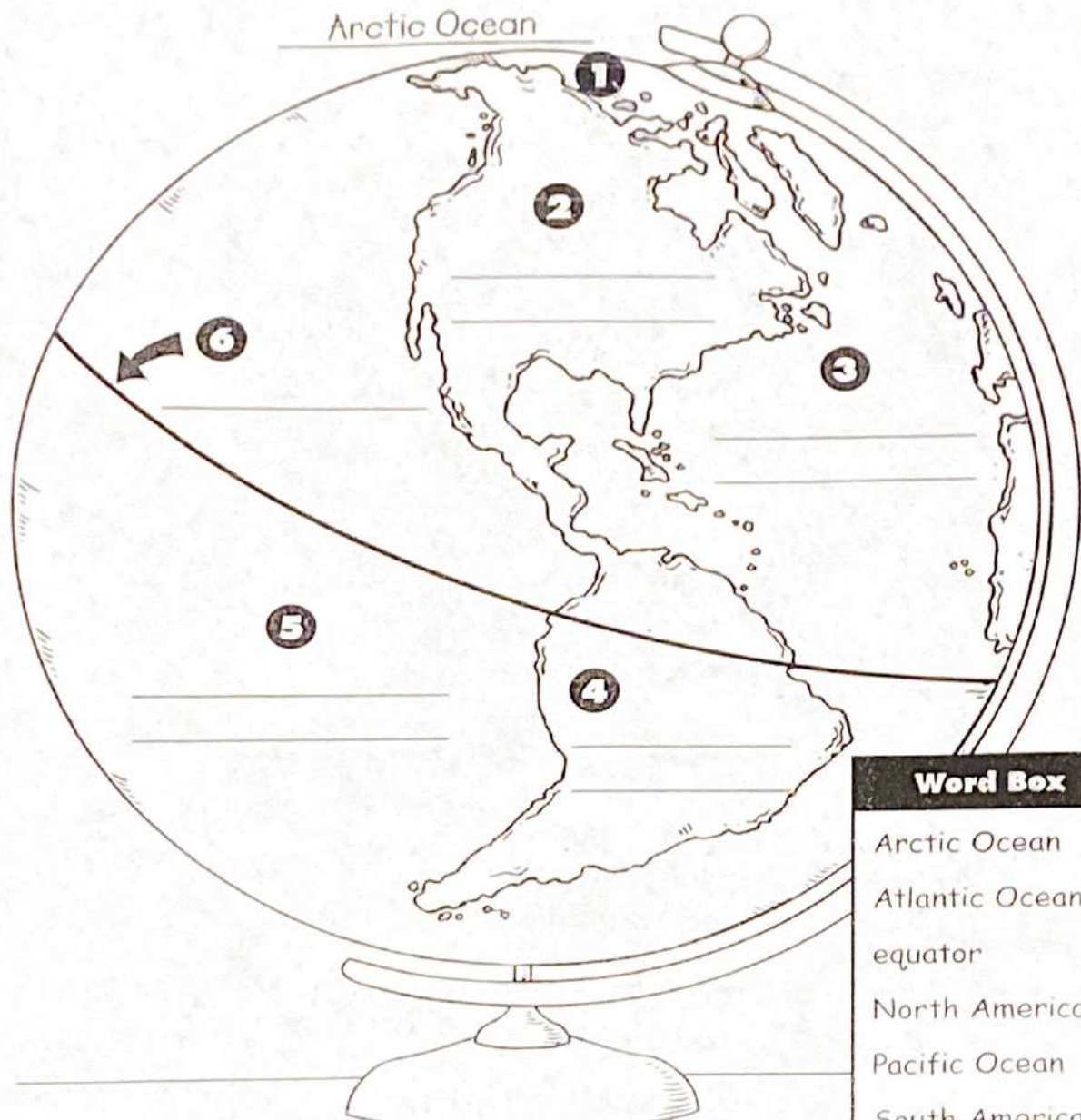
Now look at your classroom globe.
You can turn it to see all the continents and oceans.

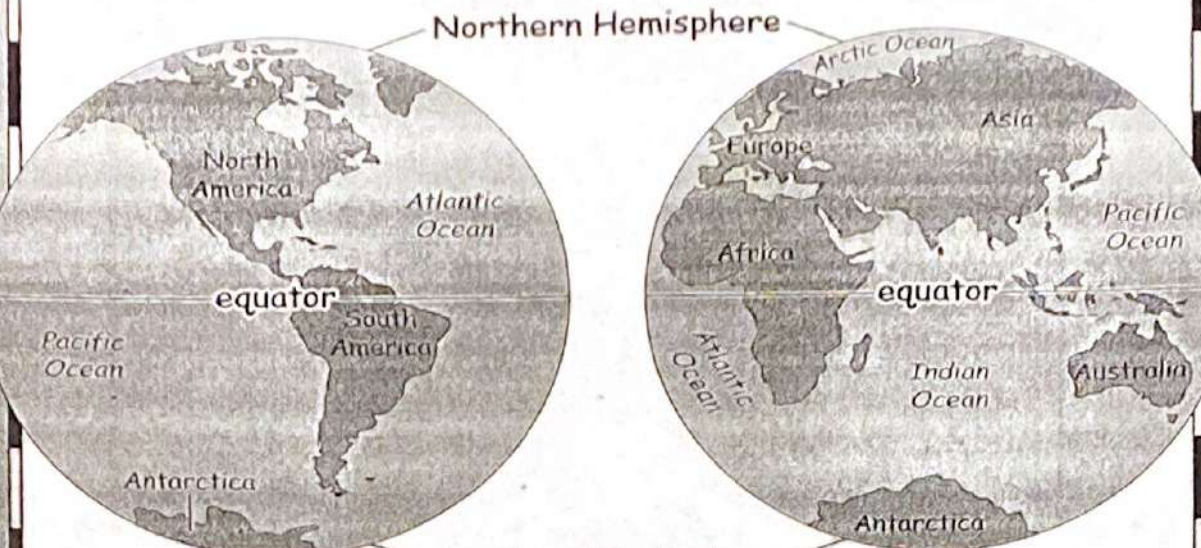
Name _____

Record Sheet

Looking at the Globe

Label the globe. Use the words in the box to help you. The first one has been done for you.





- A globe is a small model of Earth.
- A globe shows Earth's continents and oceans.
- A globe shows an imaginary line called the equator.
- The equator circles the globe halfway between the North and South Poles.
- The equator divides the Earth into two halves called hemispheres.
- The northern half is called the Northern Hemisphere.
- The southern half is called the Southern Hemisphere.

A World Map Puzzle

Write the names of the continents on the numbered lines. Use the word box to help you.



1. _____
2. _____
3. _____
4. _____
5. _____
6. _____
7. _____

Word Box

Africa
Antarctica
Asia
Australia
Europe
North America
South America

The World on a Globe

Write the word or words that complete each sentence. Use the words in the box to help you.

Earth	Northern	South America
equator	oceans	Southern
hemispheres	Poles	

1. A globe is a small model of _____.
2. A globe shows continents and _____.
3. The _____ divides the Earth into two halves.
4. The Earth is divided into two halves called _____.
5. The northern half of Earth is called the _____ Hemisphere.
6. The southern half of Earth is called the _____ Hemisphere.
7. The equator is halfway between the North and South _____.
8. The equator runs through parts of Africa, Asia, and _____.