





Spring Rhythm Fun



Let's create a few four beat rhythmic patterns. Each pattern should use a combination of **four beats**. You may use any combination of notes and even the quarter rest if you would like! Please speak and clap your pattern when finished.

Here are some words and rhythms you may use for your creation. Have fun!

One beat rhythm symbol:  or 
Example: bird

One syllable word bank:

worm	kite	sun
chick	gloves	bird
rain	earth	seeds

Two beat rhythm symbol:  or 
Example: garden or gar-den

Two syllable word bank:

garden	planting	cloudy
puddle	Earth Day	flower
rain boots	muddy	robin

Three beat rhythm symbol:  or 
Example: re-cycle or um bre-lla

Three syllable word bank:

recycle	butterfly	umbrella
grasshopper	flower pot	daffodil

Here is an example:


worm


garden


grasshopper




Name: _____

Date: _____

Cinco de Mayo Crossword



Complete the activity.



ACROSS

4. The 5th of May, commemorates the victory at The Battle of Puebla in 1862
5. A group of street musicians in Mexico
7. The Battle of Puebla on May 5th, 1862
10. Led the Mexican army in the Battle of Puebla
11. A Zapotec Indian, President of Mexico

DOWN

1. A holiday or festivity
2. Ruler of Mexico during the French occupation
3. Ordered the French ships to attack
6. Middle America
8. A friend
9. Traditionally made with paper mache and cardboard

Cinco de Mayo

Mexico

General Zaragoza

Napoleon III

La Batalla de Puebla

Fiesta

Piñata

Mariachi

Benito Juárez

Maximilian

Amigo

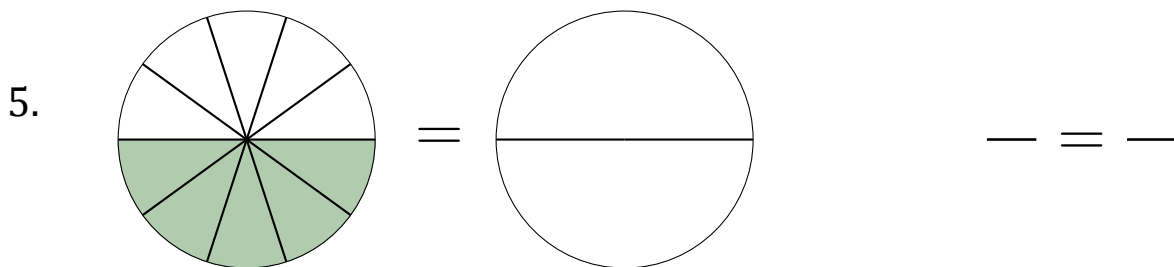
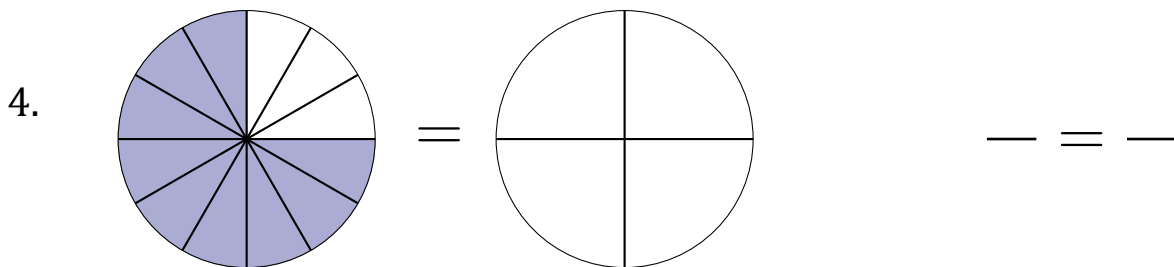
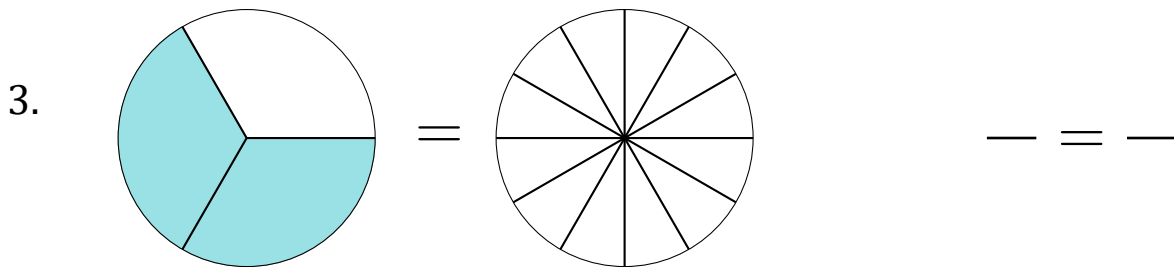
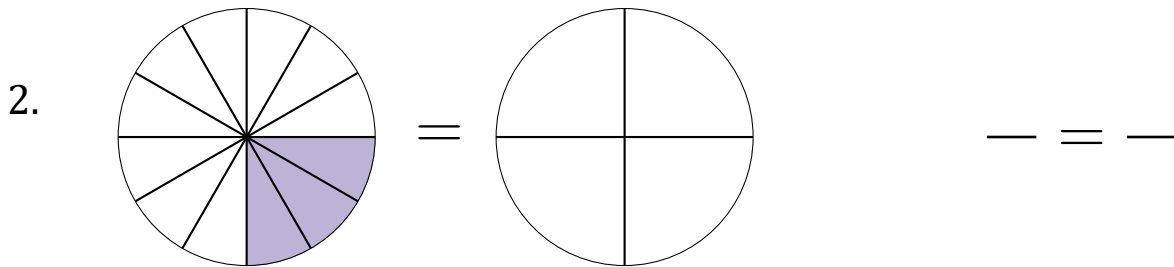
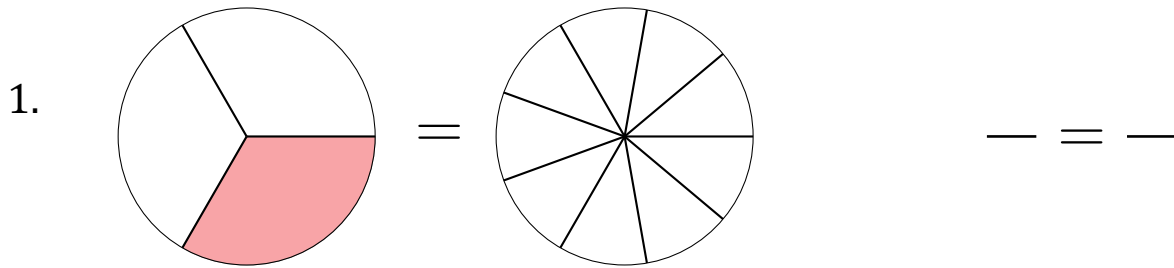
3rd grade

Equivalent Fractions (A)

Name: _____

Date: _____

Shade the second model exactly the same and determine the equivalent fractions.




3rd grade

Equivalent Fractions

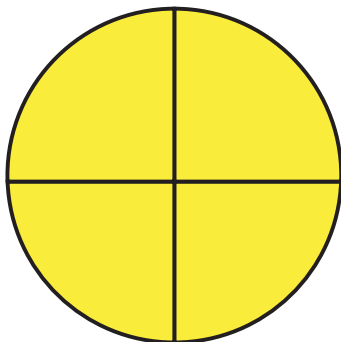
Equivalent fractions have the same value, even though they use different numbers.

Directions: Fill in the equivalent fractions below.

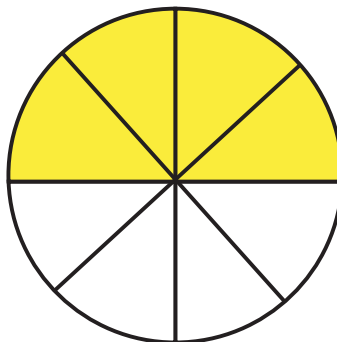


$$\frac{2}{2}$$

=

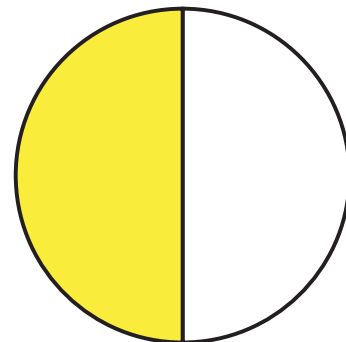


$$\frac{\quad}{4}$$

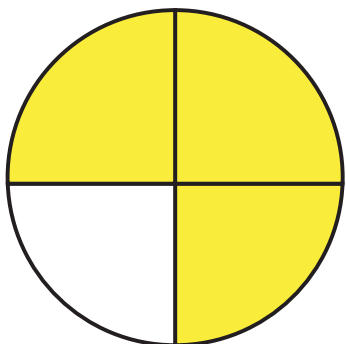


$$\frac{4}{8}$$

=

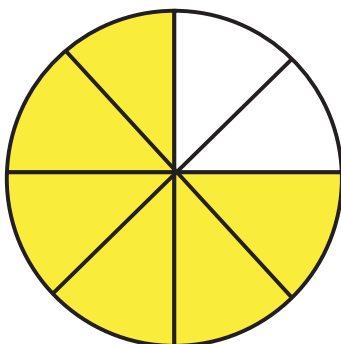


$$\frac{\quad}{2}$$

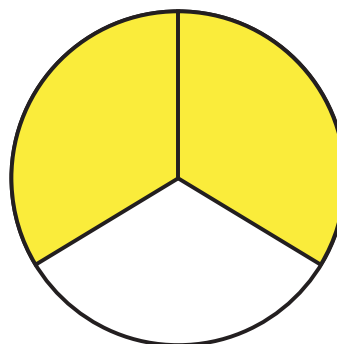


$$\frac{3}{4}$$

=

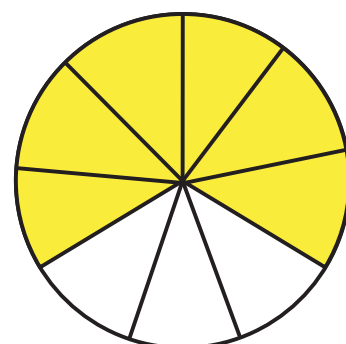


$$\frac{\quad}{8}$$

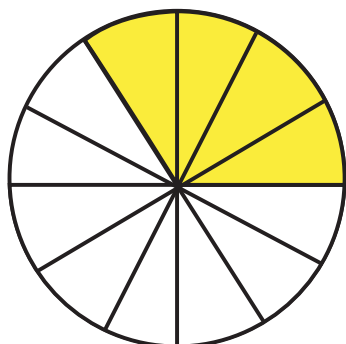


$$\frac{2}{3}$$

=

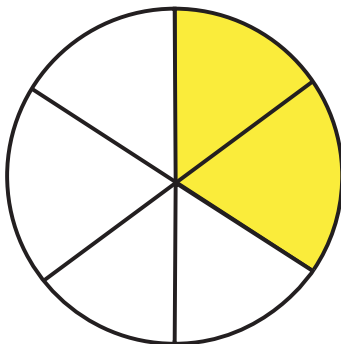


$$\frac{\quad}{9}$$

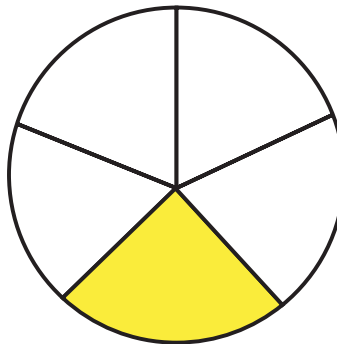


$$\frac{4}{12}$$

=

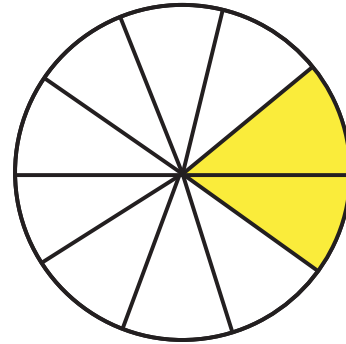


$$\frac{\quad}{6}$$



$$\frac{1}{5}$$

=



$$\frac{\quad}{10}$$

Name _____

After reading/listening to the book How a Plant Grows answer the following questions. Look back in the book for the answers.

Plants

What are Plants: True or False

_____ 1) Plants are not living things.

_____ 2) Some plants live in snow and rocks.

Parts of a Plant

3) What are the three parts of green plants?

_____, _____, and _____

4) What is the stems job?

Coming to Life

5) What does the seed leaf do?

6) What does the shoot do?

7) What does the seed coat do?

Making Food

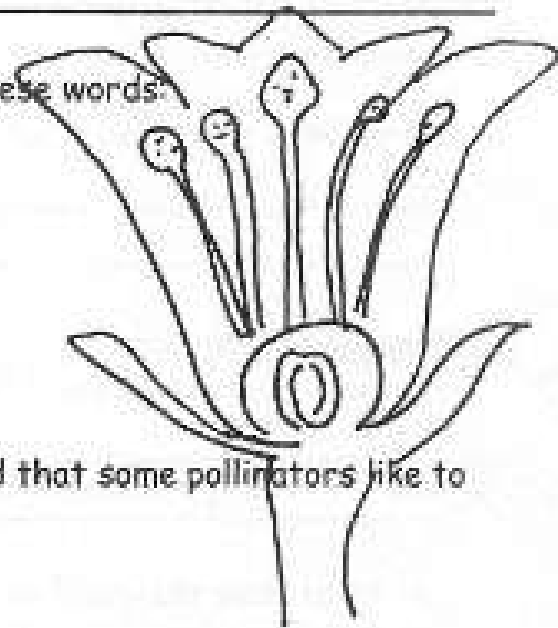
8) When a plant makes its own food this is called

Flowers Bloom

9) What is the flowers job?

10) What attracts birds and insects to a plant?

11) Label the following parts with these words:
pollen, stigma, pistil, stamen



12) _____ is a sweet liquid that some pollinators like to drink.

Seeds on the Move

13) Give three examples of how seeds move:

_____, _____, and _____

Why Plants are Important

14) What type of gas do plants produce?

15) List as least four uses of plants:

_____, _____, _____,
and _____

LESSON
8.1

Math Boxes



1. Double each amount.

\$0.25 _____

\$0.50 _____

\$0.75 _____

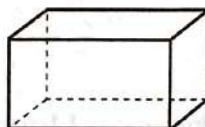
\$1.25 _____

\$5.00 _____

2. Fill in the missing numbers.

\times, \div	700	60
8		
	4,900	

3. This drawing shows a rectangular prism.



It has _____ faces.

It has _____ edges.

It has _____ vertices.

4. Complete the number models.

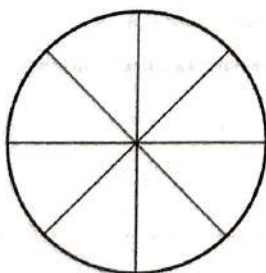
$$(4 + 3) - 2 = \underline{\hspace{2cm}}$$

$$10 = 6 + (2 + \underline{\hspace{2cm}})$$

$$\underline{\hspace{2cm}} = 3 \times (9 - 0)$$

$$(5 \times 5) - 4 = \underline{\hspace{2cm}}$$

5. Shade $\frac{3}{8}$ of the circle.



What fraction is *unshaded*? _____

3rd grade

6. 9 cups. 9 ice cubes per cup. How many ice cubes in all? Fill in the circle for the best answer.

- ☐ **A** 18 ice cubes
- ☐ **B** 81 ice cubes
- ☐ **C** 90 ice cubes
- ☐ **D** 99 ice cubes

NAME _____

SUMMER MYSTERY PICTURE #4 (0-9)

6x9	7x8	9x7	6x5	6x6	8x7	8x6	2x9	7x5	8x8	7x7	5x8	9x8	9x9	9x6
9x9	3x6	7x3	8x9	5x9	4x8	3x8	9x3	4x5	4x9	5x6	8x8	4x6	7x4	9x7
8x9	8x8	5x5	9x2	6x6	3x6	3x7	8x3	9x3	5x4	7x6	6x4	7x4	7x8	7x9
6x8	7x5	9x2	5x5	3x6	7x7	5x8	9x5	4x8	9x4	7x3	3x8	9x3	5x6	6x6
7x8	7x6	6x8	4x5	5x7	7x7	0x1	5x8	3x2	5x9	4x8	6x4	9x4	6x5	8x7
6x9	6x6	4x6	7x6	8x6	2x2	2x4	7x5	3x3	5x1	8x6	7x5	5x4	7x7	9x7
8x5	4x7	5x5	5x9	8x4	4x9	6x5	6x6	7x6	6x8	7x5	7x7	7x4	5x5	5x8
9x5	2x9	3x6	4x8	5x2	9x4	8x4	5x9	8x5	7x7	9x1	5x7	8x3	3x9	8x6
9x9	7x6	3x7	6x6	5x6	6x2	6x5	6x6	7x7	2x8	6x7	8x6	4x5	7x5	8x8
6x8	5x8	9x5	4x7	8x4	4x9	4x4	3x4	2x7	9x4	8x4	7x4	9x5	5x8	7x7
7x8	5x5	9x2	6x3	3x7	7x5	6x8	7x6	6x6	6x5	8x3	3x9	5x4	6x4	7x9
9x7	8x7	4x7	5x5	6x5	2x9	3x6	3x7	8x3	9x3	6x6	5x4	6x4	7x8	8x7
8x8	4x7	5x5	8x7	7x7	5x8	5x5	7x4	6x4	7x7	5x7	6x9	4x5	9x3	9x9
6x9	7x8	7x9	8x6	7x6	7x8	6x5	7x3	9x5	9x9	4x9	8x4	8x8	9x7	7x8
7x8	9x9	8x8	9x6	8x7	9x7	6x9	7x8	9x7	8x7	8x8	8x9	9x9	7x9	9x6

COLORING KEY

0 – 7 = white

30 – 49 = yellow

8 – 17 = black

50 – 81 = blue

18 – 29 = orange

3rd grade