


Name _____

2nd Grade Trimester 1 Assessment

1. Which shows how many tens and ones in 73?



- ☐ 3 tens and 7 ones
- ☐ 7 tens and 0 ones
- ☐ 7 tens and 3 ones
- ☐ 7 tens and 7 ones

(2.NBT.3)

2. Which sum is an even number?

- ☐ $1+3=4$
- ☐ $5+6=11$
- ☐ $4+3=7$
- ☐ $6+7=13$

(2.OA.3)

3. Count by fives to fill in the blanks.

50, 55, 60, _____, _____, _____

(2.NBT.2)

4. Count by tens to fill in the blanks.

20, 30, 40, _____, _____, _____

(2.NBT.2)

5. Count by hundreds to fill in the blanks.

300, 400, 500, _____, _____, _____

(2.NBT.2)

6. Mrs. Brown has an even number of girls and an odd number of boys. Which choice could be her class?

- ☐ 10 girls and 10 boys
- ☐ 7 girls and 10 boys
- ☐ 10 girls and 7 boys
- ☐ 3 girls and 5 boys

(2.OA.3)

7. Draw a quick picture to show the number 54. Describe the number in two ways.

_____tens _____ones

_____ + _____

(2.NBT.3)

8. Sam sold 632 tickets to the show. Which is another way to write the number?

- ☐ 3 hundred 6 tens 2 ones
- ☐ 6 hundreds 2 tens 3 ones
- ☐ 6 hundreds 3 tens 2 ones
- ☐ 2 hundreds 3 tens 6 ones


(2.NBT.3)

9. Which is another way to write the number 306?

- ☐ three hundred seven
- ☐ three hundred sixty
- ☐ four hundred sixteen
- ☐ three hundred six

(2.NBT.3)

10. Compare the numbers.
Write $>$, $<$, or $=$

265  283

(2.NBT.4)

11. Fill in the blanks.

_____ 278 _____
10 less 10 more

_____ 536 _____
100 less 100 more

(2.NBT.8)


12. Use digits to write the number of hundreds, tens, and ones in 374.

Hundreds	Tens	Ones

(2.NBT.1)

Name _____

2nd Grade Trimester 1 Assessment

<p>13. Draw a quick picture to show the number 419.</p> <p style="text-align: right;">(2.NBT.1)</p>	<p>14. Circle groups of tens to make hundreds. How many hundreds are shown?</p>  <p style="text-align: right;">_____ hundreds</p> <p style="text-align: right;">(2.NBT.1)</p>
<p>15. What is the difference?</p> $16 - 9 =$ <p> <input type="radio"/> 25 <input type="radio"/> 9 <input type="radio"/> 7 <input type="radio"/> 6 </p> <p style="text-align: right;">(2.OA.2)</p>	<p>16. There were 7 buffalo in a field. Some more buffalo joined them. Then there were 14 buffalo in the field. How many buffalo joined them?</p> <p> <input type="radio"/> 14 <input type="radio"/> 7 <input type="radio"/> 21 <input type="radio"/> 8 </p> <p style="text-align: right;">(2.OA.1)</p>
<p>17. Dillon has 4 rows of toy cars. There are 3 toy cars in each row. How many toy cars does he have in all? Show your work.</p> <p style="text-align: right;">(2.OA.4)</p>	<p>18. Sally has 8 yellow flowers, 4 red flowers, and 6 blue flowers in her garden. How many flowers does she have in all? Show your work.</p> <p style="text-align: right;">(2.OA.1)</p>

Name _____

2nd Grade Trimester 1 Assessment

19. Write the sum and difference for the related facts.

$$3 + 6 = \underline{\hspace{2cm}}$$

$$9 - 3 = \underline{\hspace{2cm}}$$

(2.OA.2)

20. Bob has 5 baskets. He puts 6 oranges in each basket. How many oranges are there in all? Show your work.

(2.OA.4)