

Name: _____ Date: _____

November/December



2nd Grade- SNOW DAY CHOICE BOARD

DIRECTIONS

1. CHOOSE AT LEAST ONE ACTIVITY FROM EACH COLUMN TO COMPLETE DURING TODAY'S SNOW DAY.
2. HAVE AN ADULT INITIAL EACH BOX THAT YOU HAVE COMPLETED.
3. TURN ALL COMPLETED WORK INTO YOUR TEACHER WHEN YOU RETURN TO SCHOOL.

MATH	READING	PHY ED/ MUSIC/ART	SPELLING	WRITING	FAMILY
<p>Spend 20 minutes on DXL Math.</p> <p>Initials: ____</p>	<p>Spend 20 minutes on DXL on Language Arts</p> <p>Initials: ____</p>	<p>Complete PE Snow Day Workout with Mrs. Sorenson</p> <p>Initials: ____</p>	<p>Practice writing words 3 times for each word.</p> <p>Initials: ____</p>	<p>Write about what you did on your snow day. (Write at least 5 sentences)</p> <p>Initials: ____</p>	<p>Clean your bedroom.</p> <p>Initials: ____</p>
<p>Practice addition/ subtraction facts for 10 minutes</p> <p>(Ideas: worksheet, flashcards, online game, or any way you choose)</p> <p>Initials: ____</p>	<p>Read to a family member, friend, or stuffed animal for 20 minutes.</p> <p>Title: _____</p> <p>Initials: ____</p>	<p>Choose one of the Music ELearning activities.</p> <p>Initials: ____</p>	<p>Use 5 spelling words. Write a complete sentence for each word.</p> <p>Initials: ____</p>	<p>Pick a box from the November/ December writing prompts. (Write at least 5 sentences)</p> <p>Initials: ____</p>	<p>Help with a family chore: (dishes, make beds, vacuum, dust, etc.)</p> <p>Initials: ____</p>
<p>Complete the 2 digit addition worksheet</p> <p>Initials: ____</p>	<p>Complete the fluency passage: (Read for 1 minute and record your score. Repeat for 2nd and 3rd readings. Answer the questions on the back)</p> <p>Initials: ____</p>	<p>Choose one of the Art ELearning activities.</p> <p>Initials: ____</p>	<p>Be creative- Surprise me!</p> <p>Initials: ____</p>	<p>Write a letter to a classmate or teacher. (Write at least 5 sentences)</p> <p>Initials: ____</p>	<p>Play a family game. (board game, hide & seek, cards, no technology)</p> <p>Initials: ____</p>

DXL login information: in assignment book cover (username+ @maes) example: jerickson@maes

Questions about today's assignment? Please contact your child's teacher through email. Thank you!

*If we have more than one Snow Day, it is okay to repeat an activity from the Choice Board!

Name: _____ Date: _____

January/February



2nd Grade- SNOW DAY CHOICE BOARD

DIRECTIONS

2. CHOOSE AT LEAST ONE ACTIVITY FROM EACH COLUMN TO COMPLETE DURING TODAY'S SNOW DAY.
2. HAVE AN ADULT INITIAL EACH BOX THAT YOU HAVE COMPLETED.
3. TURN ALL COMPLETED WORK INTO YOUR TEACHER WHEN YOU RETURN TO SCHOOL.

MATH	READING	PHY ED/ MUSIC/ART	SPELLING	WRITING	FAMILY
<p>Spend 20 minutes on DXL Math.</p> <p>Initials: ____</p>	<p>Spend 20 minutes on DXL on Language Arts</p> <p>Initials: ____</p>	<p>Complete PE Snow Day Workout with Mrs. Sorenson</p> <p>Initials: ____</p>	<p>Practice writing words 3 times for each word.</p> <p>Initials: ____</p>	<p>Write about what you did on your snow day. (Write at least 5 sentences)</p> <p>Initials: ____</p>	<p>Clean your bedroom.</p> <p>Initials: ____</p>
<p>Practice addition/ subtraction facts for 10 minutes</p> <p>(Ideas: worksheet, flashcards, online game, or any way you choose)</p> <p>Initials: ____</p>	<p>Read to a family member, friend, or stuffed animal for 20 minutes.</p> <p>Title: _____</p> <p>Initials: ____</p>	<p>Choose one of the Music ELearning activities.</p> <p>Initials: ____</p>	<p>Use 5 spelling words. Write a complete sentence for each word.</p> <p>Initials: ____</p>	<p>Pick a box from the January/ February writing prompts. (Write at least 5 sentences)</p> <p>Initials: ____</p>	<p>Help with a family chore: (dishes, make beds, vacuum, dust, etc.)</p> <p>Initials: ____</p>
<p>Complete the 2 digit addition worksheet</p> <p>Initials: ____</p>	<p>Complete the fluency passage: (Read for 1 minute and record your score. Repeat for 2nd and 3rd readings. Answer the questions on the back)</p> <p>Initials: ____</p>	<p>Choose one of the Art ELearning activities.</p> <p>Initials: ____</p>	<p>Be creative- Surprise me!</p> <p>Initials: ____</p>	<p>Write a letter to a classmate or teacher. (Write at least 5 sentences)</p> <p>Initials: ____</p>	<p>Play a family game. (board game, hide & seek, cards, no technology)</p> <p>Initials: ____</p>

DXL login Information: in assignment book cover (username+ @maes) example: jerlickson@maes

Questions about today's assignment? Please contact your child's teacher through email. Thank you!

*If we have more than one Snow Day, it is okay to repeat an activity from the Choice Board!

Name: _____ Date: _____

March/April



2nd Grade- SNOW DAY CHOICE BOARD

DIRECTIONS

1. CHOOSE AT LEAST ONE ACTIVITY FROM EACH COLUMN TO COMPLETE DURING TODAY'S SNOW DAY.
2. HAVE AN ADULT INITIAL EACH BOX THAT YOU HAVE COMPLETED.
3. TURN ALL COMPLETED WORK INTO YOUR TEACHER WHEN YOU RETURN TO SCHOOL.

MATH	READING	PHY ED/ MUSIC/ART	SPELLING	WRITING	FAMILY
<p>Spend 20 minutes on IXL Math.</p> <p>Initials: ____</p>	<p>Spend 20 minutes on IXL on Language Arts</p> <p>Initials: ____</p>	<p>Complete PE Snow Day Workout with Mrs. Sorenson</p> <p>Initials: ____</p>	<p>Practice writing words 3 times for each word.</p> <p>Initials: ____</p>	<p>Write about what you did on your snow day. (Write at least 5 sentences)</p> <p>Initials: ____</p>	<p>Clean your bedroom.</p> <p>Initials: ____</p>
<p>Practice addition/ subtraction facts for 10 minutes</p> <p>(Ideas: worksheet, flashcards, online game, or any way you choose)</p> <p>Initials: ____</p>	<p>Read to a family member, friend, or stuffed animal for 20 minutes.</p> <p>Title: _____</p> <p>Initials: ____</p>	<p>Choose one of the Music ELearning activities.</p> <p>Initials: ____</p>	<p>Use 5 spelling words. Write a complete sentence for each word.</p> <p>Initials: ____</p>	<p>Pick a box from the March/ April writing prompts. (Write at least 5 sentences)</p> <p>Initials: ____</p>	<p>Help with a family chore: (dishes, make beds, vacuum, dust, etc.)</p> <p>Initials: ____</p>
<p>Complete the 2 digit addition worksheet</p> <p>Initials: ____</p>	<p>Complete the fluency passage: (Read for 1 minute and record your score. Repeat for 2nd and 3rd readings. Answer the questions on the back)</p> <p>Initials: ____</p>	<p>Choose one of the Art ELearning activities.</p> <p>Initials: ____</p>	<p>Be creative- Surprise me!</p> <p>Initials: ____</p>	<p>Write a letter to a classmate or teacher. (Write at least 5 sentences)</p> <p>Initials: ____</p>	<p>Play a family game. (board game, hide & seek, cards, no technology)</p> <p>Initials: ____</p>

IXL login information: In assignment book cover (username+ @maes) example: jerickson@maes

Questions about today's assignment? Please contact your child's teacher through email. Thank you!

*If we have more than one Snow Day, It is okay to repeat an activity from the Choice Board!

Nemo

Score

1	2	3	4	5
---	---	---	---	---

A $\begin{array}{r} 5 \\ +1 \\ \hline \end{array}$ $\begin{array}{r} 2 \\ +1 \\ \hline \end{array}$ $\begin{array}{r} 8 \\ +5 \\ \hline \end{array}$ $\begin{array}{r} 4 \\ +8 \\ \hline \end{array}$ $\begin{array}{r} 1 \\ +3 \\ \hline \end{array}$ $\begin{array}{r} 9 \\ +9 \\ \hline \end{array}$ $\begin{array}{r} 7 \\ +0 \\ \hline \end{array}$ $\begin{array}{r} 0 \\ +2 \\ \hline \end{array}$ $\begin{array}{r} 8 \\ +9 \\ \hline \end{array}$ $\begin{array}{r} 3 \\ +6 \\ \hline \end{array}$

B $\begin{array}{r} 3 \\ +2 \end{array}$ $\begin{array}{r} 1 \\ +1 \end{array}$ $\begin{array}{r} 0 \\ +6 \end{array}$ $\begin{array}{r} 8 \\ +0 \end{array}$ $\begin{array}{r} 5 \\ +8 \end{array}$ $\begin{array}{r} 2 \\ +0 \end{array}$ $\begin{array}{r} 6 \\ +1 \end{array}$ $\begin{array}{r} 9 \\ +3 \end{array}$ $\begin{array}{r} 1 \\ +8 \end{array}$ $\begin{array}{r} 7 \\ +9 \end{array}$

C $\begin{array}{r} 1 \\ +8 \\ \hline \end{array}$ $\begin{array}{r} 7 \\ +1 \\ \hline \end{array}$ $\begin{array}{r} 3 \\ +5 \\ \hline \end{array}$ $\begin{array}{r} 1 \\ +6 \\ \hline \end{array}$ $\begin{array}{r} 6 \\ +9 \\ \hline \end{array}$ $\begin{array}{r} 3 \\ +1 \\ \hline \end{array}$ $\begin{array}{r} 8 \\ +8 \\ \hline \end{array}$ $\begin{array}{r} 0 \\ +7 \\ \hline \end{array}$ $\begin{array}{r} 4 \\ +7 \\ \hline \end{array}$ $\begin{array}{r} 5 \\ +0 \\ \hline \end{array}$

D. $\begin{array}{r} 0 \\ +8 \\ \hline \end{array}$ $\begin{array}{r} 3 \\ +9 \\ \hline \end{array}$ $\begin{array}{r} 9 \\ +5 \\ \hline \end{array}$ $\begin{array}{r} 2 \\ +5 \\ \hline \end{array}$ $\begin{array}{r} 7 \\ +8 \\ \hline \end{array}$ $\begin{array}{r} 1 \\ +0 \\ \hline \end{array}$ $\begin{array}{r} 5 \\ +5 \\ \hline \end{array}$ $\begin{array}{r} 6 \\ +6 \\ \hline \end{array}$ $\begin{array}{r} 4 \\ +3 \\ \hline \end{array}$ $\begin{array}{r} 0 \\ +4 \\ \hline \end{array}$

E $\begin{array}{r} 4 \\ +9 \\ \hline \end{array}$ $\begin{array}{r} 6 \\ +0 \\ \hline \end{array}$ $\begin{array}{r} 2 \\ +9 \\ \hline \end{array}$ $\begin{array}{r} 4 \\ +2 \\ \hline \end{array}$ $\begin{array}{r} 9 \\ +0 \\ \hline \end{array}$ $\begin{array}{r} 3 \\ +7 \\ \hline \end{array}$ $\begin{array}{r} 8 \\ +4 \\ \hline \end{array}$ $\begin{array}{r} 1 \\ +5 \\ \hline \end{array}$ $\begin{array}{r} 7 \\ +3 \\ \hline \end{array}$ $\begin{array}{r} 3 \\ +4 \\ \hline \end{array}$

F $\begin{array}{r} 2 \\ +6 \\ \hline \end{array}$ $\begin{array}{r} 5 \\ +7 \\ \hline \end{array}$ $\begin{array}{r} 3 \\ +8 \\ \hline \end{array}$ $\begin{array}{r} 6 \\ +2 \\ \hline \end{array}$ $\begin{array}{r} 0 \\ +1 \\ \hline \end{array}$ $\begin{array}{r} 7 \\ +2 \\ \hline \end{array}$ $\begin{array}{r} 2 \\ +4 \\ \hline \end{array}$ $\begin{array}{r} 9 \\ +8 \\ \hline \end{array}$ $\begin{array}{r} 5 \\ +4 \\ \hline \end{array}$ $\begin{array}{r} 2 \\ +8 \\ \hline \end{array}$

G. $\begin{array}{r} 3 \\ +3 \\ \hline \end{array}$ $\begin{array}{r} 0 \\ +3 \\ \hline \end{array}$ $\begin{array}{r} 1 \\ +2 \\ \hline \end{array}$ $\begin{array}{r} 6 \\ +5 \\ \hline \end{array}$ $\begin{array}{r} 3 \\ +0 \\ \hline \end{array}$ $\begin{array}{r} 5 \\ +3 \\ \hline \end{array}$ $\begin{array}{r} 8 \\ +3 \\ \hline \end{array}$ $\begin{array}{r} 1 \\ +7 \\ \hline \end{array}$ $\begin{array}{r} 7 \\ +7 \\ \hline \end{array}$ $\begin{array}{r} 5 \\ +9 \\ \hline \end{array}$

H $\begin{array}{r} 9 \\ +7 \\ \hline \end{array}$ $\begin{array}{r} 4 \\ +6 \\ \hline \end{array}$ $\begin{array}{r} 2 \\ +2 \\ \hline \end{array}$ $\begin{array}{r} 7 \\ +5 \\ \hline \end{array}$ $\begin{array}{r} 9 \\ +6 \\ \hline \end{array}$ $\begin{array}{r} 4 \\ +1 \\ \hline \end{array}$ $\begin{array}{r} 9 \\ +2 \\ \hline \end{array}$ $\begin{array}{r} 6 \\ +4 \\ \hline \end{array}$ $\begin{array}{r} 0 \\ +9 \\ \hline \end{array}$ $\begin{array}{r} 8 \\ +7 \\ \hline \end{array}$

4	8	5	8	1	4	7	0	9	6
<u>+0</u>	<u>+1</u>	<u>+2</u>	<u>+8</u>	<u>+4</u>	<u>+5</u>	<u>+6</u>	<u>+0</u>	<u>+4</u>	<u>+7</u>

J $\begin{array}{r} 6 \\ +3 \\ \hline \end{array}$ $\begin{array}{r} 0 \\ +5 \\ \hline \end{array}$ $\begin{array}{r} 8 \\ +8 \\ \hline \end{array}$ $\begin{array}{r} 5 \\ +6 \\ \hline \end{array}$ $\begin{array}{r} 2 \\ +7 \\ \hline \end{array}$ $\begin{array}{r} 9 \\ +1 \\ \hline \end{array}$ $\begin{array}{r} 7 \\ +4 \\ \hline \end{array}$ $\begin{array}{r} 4 \\ +4 \\ \hline \end{array}$ $\begin{array}{r} 8 \\ +2 \\ \hline \end{array}$ $\begin{array}{r} 2 \\ +3 \\ \hline \end{array}$

Subtraction Facts: Differences 0-18

Test 2 -

Name _____

Minutes				
1	2	3	4	5

Score

SUB.

Practice

A $\begin{array}{r} 8 \\ -1 \\ \hline \end{array}$ $\begin{array}{r} 4 \\ -2 \\ \hline \end{array}$ $\begin{array}{r} 16 \\ -7 \\ \hline \end{array}$ $\begin{array}{r} 7 \\ -1 \\ \hline \end{array}$ $\begin{array}{r} 9 \\ -3 \\ \hline \end{array}$ $\begin{array}{r} 13 \\ -4 \\ \hline \end{array}$ $\begin{array}{r} 10 \\ -2 \\ \hline \end{array}$ $\begin{array}{r} 5 \\ -4 \\ \hline \end{array}$ $\begin{array}{r} 7 \\ -7 \\ \hline \end{array}$ $\begin{array}{r} 2 \\ -2 \\ \hline \end{array}$

B $\begin{array}{r} 9 \\ -8 \\ \hline \end{array}$ $\begin{array}{r} 5 \\ -5 \\ \hline \end{array}$ $\begin{array}{r} 10 \\ -7 \\ \hline \end{array}$ $\begin{array}{r} 13 \\ -8 \\ \hline \end{array}$ $\begin{array}{r} 6 \\ -4 \\ \hline \end{array}$ $\begin{array}{r} 1 \\ -0 \\ \hline \end{array}$ $\begin{array}{r} 9 \\ -0 \\ \hline \end{array}$ $\begin{array}{r} 14 \\ -9 \\ \hline \end{array}$ $\begin{array}{r} 11 \\ -6 \\ \hline \end{array}$ $\begin{array}{r} 9 \\ -1 \\ \hline \end{array}$

C $\begin{array}{r} 12 \\ -9 \\ \hline \end{array}$ $\begin{array}{r} 8 \\ -0 \\ \hline \end{array}$ $\begin{array}{r} 0 \\ -0 \\ \hline \end{array}$ $\begin{array}{r} 13 \\ -8 \\ \hline \end{array}$ $\begin{array}{r} 7 \\ -6 \\ \hline \end{array}$ $\begin{array}{r} 12 \\ -4 \\ \hline \end{array}$ $\begin{array}{r} 8 \\ -5 \\ \hline \end{array}$ $\begin{array}{r} 4 \\ -1 \\ \hline \end{array}$ $\begin{array}{r} 11 \\ -9 \\ \hline \end{array}$ $\begin{array}{r} 6 \\ -1 \\ \hline \end{array}$

D $\begin{array}{r} 5 \\ -0 \\ \hline \end{array}$ $\begin{array}{r} 14 \\ -6 \\ \hline \end{array}$ $\begin{array}{r} 8 \\ -8 \\ \hline \end{array}$ $\begin{array}{r} 10 \\ -3 \\ \hline \end{array}$ $\begin{array}{r} 3 \\ -0 \\ \hline \end{array}$ $\begin{array}{r} 12 \\ -7 \\ \hline \end{array}$ $\begin{array}{r} 7 \\ -0 \\ \hline \end{array}$ $\begin{array}{r} 10 \\ -1 \\ \hline \end{array}$ $\begin{array}{r} 2 \\ -1 \\ \hline \end{array}$ $\begin{array}{r} 9 \\ -7 \\ \hline \end{array}$

E $\begin{array}{r} 11 \\ -7 \\ \hline \end{array}$ $\begin{array}{r} 6 \\ -0 \\ \hline \end{array}$ $\begin{array}{r} 9 \\ -4 \\ \hline \end{array}$ $\begin{array}{r} 4 \\ -0 \\ \hline \end{array}$ $\begin{array}{r} 10 \\ -6 \\ \hline \end{array}$ $\begin{array}{r} 5 \\ -3 \\ \hline \end{array}$ $\begin{array}{r} 15 \\ -8 \\ \hline \end{array}$ $\begin{array}{r} 4 \\ -4 \\ \hline \end{array}$ $\begin{array}{r} 10 \\ -9 \\ \hline \end{array}$ $\begin{array}{r} 8 \\ -4 \\ \hline \end{array}$

F $\begin{array}{r} 7 \\ -5 \\ \hline \end{array}$ $\begin{array}{r} 2 \\ -0 \\ \hline \end{array}$ $\begin{array}{r} 12 \\ -3 \\ \hline \end{array}$ $\begin{array}{r} 6 \\ -3 \\ \hline \end{array}$ $\begin{array}{r} 9 \\ -2 \\ \hline \end{array}$ $\begin{array}{r} 11 \\ -5 \\ \hline \end{array}$ $\begin{array}{r} 8 \\ -3 \\ \hline \end{array}$ $\begin{array}{r} 14 \\ -5 \\ \hline \end{array}$ $\begin{array}{r} 7 \\ -8 \\ \hline \end{array}$ $\begin{array}{r} 12 \\ -6 \\ \hline \end{array}$

G $\begin{array}{r} 10 \\ -8 \\ \hline \end{array}$ $\begin{array}{r} 6 \\ -8 \\ \hline \end{array}$ $\begin{array}{r} 14 \\ -8 \\ \hline \end{array}$ $\begin{array}{r} 11 \\ -2 \\ \hline \end{array}$ $\begin{array}{r} 3 \\ -2 \\ \hline \end{array}$ $\begin{array}{r} 13 \\ -5 \\ \hline \end{array}$ $\begin{array}{r} 9 \\ -6 \\ \hline \end{array}$ $\begin{array}{r} 1 \\ -1 \\ \hline \end{array}$ $\begin{array}{r} 16 \\ -9 \\ \hline \end{array}$ $\begin{array}{r} 11 \\ -3 \\ \hline \end{array}$

H $\begin{array}{r} 4 \\ -3 \\ \hline \end{array}$ $\begin{array}{r} 13 \\ -7 \\ \hline \end{array}$ $\begin{array}{r} 7 \\ -2 \\ \hline \end{array}$ $\begin{array}{r} 15 \\ -6 \\ \hline \end{array}$ $\begin{array}{r} 10 \\ -5 \\ \hline \end{array}$ $\begin{array}{r} 18 \\ -9 \\ \hline \end{array}$ $\begin{array}{r} 6 \\ -2 \\ \hline \end{array}$ $\begin{array}{r} 17 \\ -8 \\ \hline \end{array}$ $\begin{array}{r} 11 \\ -8 \\ \hline \end{array}$ $\begin{array}{r} 5 \\ -1 \\ \hline \end{array}$

I $\begin{array}{r} 16 \\ -8 \\ \hline \end{array}$ $\begin{array}{r} 8 \\ -2 \\ \hline \end{array}$ $\begin{array}{r} 10 \\ -4 \\ \hline \end{array}$ $\begin{array}{r} 15 \\ -9 \\ \hline \end{array}$ $\begin{array}{r} 5 \\ -2 \\ \hline \end{array}$ $\begin{array}{r} 8 \\ -8 \\ \hline \end{array}$ $\begin{array}{r} 13 \\ -9 \\ \hline \end{array}$ $\begin{array}{r} 9 \\ -9 \\ \hline \end{array}$ $\begin{array}{r} 14 \\ -7 \\ \hline \end{array}$ $\begin{array}{r} 12 \\ -8 \\ \hline \end{array}$

J $\begin{array}{r} 3 \\ -1 \\ \hline \end{array}$ $\begin{array}{r} 15 \\ -7 \\ \hline \end{array}$ $\begin{array}{r} 9 \\ -5 \\ \hline \end{array}$ $\begin{array}{r} 6 \\ -5 \\ \hline \end{array}$ $\begin{array}{r} 17 \\ -9 \\ \hline \end{array}$ $\begin{array}{r} 7 \\ -4 \\ \hline \end{array}$ $\begin{array}{r} 11 \\ -4 \\ \hline \end{array}$ $\begin{array}{r} 3 \\ -3 \\ \hline \end{array}$ $\begin{array}{r} 12 \\ -5 \\ \hline \end{array}$ $\begin{array}{r} 8 \\ -7 \\ \hline \end{array}$

Name _____


2-digit Addition
with regrouping

Sums Around The City

Directions: Match the key to the correct building by finding the sums.

$$\begin{array}{r} 37 \\ + 48 \\ \hline 85 \end{array}$$

BAKERY



Example

$$\begin{array}{r} 85 \\ + 75 \\ \hline \end{array}$$

GROCERY STORE



$$\begin{array}{r} 49 \\ + 18 \\ \hline \end{array}$$

BANK



$$\begin{array}{r} 67 \\ + 84 \\ \hline \end{array}$$

AIRPORT



$$\begin{array}{r} 17 \\ + 47 \\ \hline \end{array}$$

PIZZA SHOP



$$\begin{array}{r} 26 \\ + 49 \\ \hline \end{array}$$

LAUNDROMAT



$$\begin{array}{r} 45 \\ + 37 \\ \hline \end{array}$$

GAS STATION



$$\begin{array}{r} 27 \\ + 44 \\ \hline \end{array}$$

DENTIST



160

151

85

82

75

67

71

64



Friends 2-Digit Addition

Directions: Find the sums for each addition problem below.

A $\begin{array}{r} 34 \\ + 17 \\ \hline 51 \end{array}$	W $\begin{array}{r} 49 \\ + 24 \\ \hline \end{array}$	E $\begin{array}{r} 25 \\ + 37 \\ \hline \end{array}$
T $\begin{array}{r} 45 \\ + 26 \\ \hline \end{array}$	O $\begin{array}{r} 28 \\ + 28 \\ \hline \end{array}$	M $\begin{array}{r} 35 \\ + 19 \\ \hline \end{array}$
K $\begin{array}{r} 66 \\ + 14 \\ \hline \end{array}$	N $\begin{array}{r} 15 \\ + 17 \\ \hline \end{array}$	U $\begin{array}{r} 25 \\ + 16 \\ \hline \end{array}$
I $\begin{array}{r} 76 \\ + 14 \\ \hline \end{array}$	F $\begin{array}{r} 34 \\ + 27 \\ \hline \end{array}$	R $\begin{array}{r} 28 \\ + 17 \\ \hline \end{array}$

Directions: Use the letters from the toolboxes above to solve the secret message.


$\underline{\quad}$ $\underline{\quad}$ **A** $\underline{\quad}$ $\underline{\quad}$ $\underline{\quad}$ $\underline{\quad}$ $\underline{\quad}$ $\underline{\quad}$ $\underline{\quad}$
 71 62 51 54 73 56 45 80
 $\underline{\quad}$ $\underline{\quad}$ $\underline{\quad}$ $\underline{\quad}$
 61 41 32 90

Name _____

2-digit Addition
with regrouping

Regrouping With Robots

Directions: Solve each problem below. Then, use the letters on the gears to solve the message.



$$\begin{array}{r} 1 \\ 45 \\ + 38 \\ \hline 83 \end{array}$$

Example



$$\begin{array}{r} 29 \\ + 34 \\ \hline \end{array}$$



$$\begin{array}{r} 75 \\ + 27 \\ \hline \end{array}$$



$$\begin{array}{r} 58 \\ + 13 \\ \hline \end{array}$$



$$\begin{array}{r} 57 \\ + 43 \\ \hline \end{array}$$



$$\begin{array}{r} 74 \\ + 56 \\ \hline \end{array}$$



$$\begin{array}{r} 44 \\ + 98 \\ \hline \end{array}$$



$$\begin{array}{r} 19 \\ + 54 \\ \hline \end{array}$$



$$\begin{array}{r} 17 \\ + 35 \\ \hline \end{array}$$



$$\begin{array}{r} 46 \\ + 55 \\ \hline \end{array}$$



$$\begin{array}{r} 24 \\ + 57 \\ \hline \end{array}$$



$$\begin{array}{r} 19 \\ + 84 \\ \hline \end{array}$$




Directions: Use the letters from above to solve the secret message.

_____ S _____
102 73 130 100 71 142 101 83 103 63 81 52

Turkey Trot

Tom and Tina Turkey went for a walk on the farm. "Tomorrow is the Turkey Trot race and I really want to win it this year," Tom told his sister. "I know you do," replied Tina. "You can beat Timothy this year. You have been practicing!" "I can't wait!" Tom laughed. Sadly, he did not notice a rock in the path. He tripped, twisting his ankle. "Oh no," he wailed. "Now I won't be able to race!" "Don't worry," said Tina. "I will race in your place." The next morning, all the turkeys lined up to race while Tom watched from the side. Although it was close, Tina won by a beak. "Way to go Tina!" shouted Tom.

	1st	2nd	3rd
WRR			
Errors			



Comprehension Questions: Turkey Trot

1. What was the name of the race Tom wanted to win?

2. Who was Tom hoping to beat?

3. What happened to keep Tom from racing?

4. Who won the race?

5. How do you think Tom felt at the end of the race? Why?

Wacky Winter Weather

In the winter, the weather can get pretty wild! 9
The snow is pretty, but sometimes it can be 18
dangerous. When it snows a lot, it is difficult 27
for cars to drive safely. They can get stuck in 37
the snow, and need help getting out. It can also 47
be very windy in the winter. When it is windy on 58
a snowy day, it can be difficult to see because 68
of all the snow blowing around. Icy roads and 77
sidewalks are dangerous too. People can easily 84
slip and fall when they are walking and it is very 95
hard for cars to get around on the ice. Winter 105
weather is beautiful, but it can also be very 114
dangerous. 115

	1st	2nd	3rd
WRR			
Errors			



Comprehension Questions: Wacky Winter Weather

1. How can snow be dangerous for cars?

2. How do you think cars get out of the snow when they are stuck?

3. Why is windy weather dangerous in the winter?

4. What is another type of dangerous winter weather?

5. Do you like winter weather? Why or why not?

Wonderful Winter

Some people do not like winter weather. They 8
think that it is too cold, or too snowy, but I love 20
it! Yesterday it snowed a lot! I was so excited. 30
I called all of my friends and invited them to my 41
house. We spent the whole day outside! We 49
made a big snow fort and crawled inside. We 58
had a giant snowball fight that lasted for an 67
hour. We built the biggest snowman you have 75
ever seen. Most of my friends were cold and 84
tired but I still wanted to stay outside. I made 94
snow angels on the ground, and made huge piles 103
of snow that I jumped in. I love the wonderful 113
winter so much! 116

	1st	2nd	3rd
WRR			
Errors			



Comprehension Questions: Wonderful Winter

1. How does the child feel about winter?

2. What was the first thing the children did outside?

3. How long did the snowball fight last?

4. Why did the child's friends want to go inside?

5. What did the child do after their friends left?

Taking Care of Your Teeth

There are many things that you can do to help	10
take care of your teeth. One thing that you can	20
do is to brush regularly. You should brush your	29
teeth twice a day, for about two minutes each	38
time. This will keep you from getting cavities.	46
You should also go and see your dentist twice a	56
year. The dentist will clean your teeth with	64
special tools, and they will check them to make	73
sure they are healthy. You should also eat plenty	82
of healthy foods and drink milk to keep your	91
teeth strong. Too much sugar is bad for your	100
teeth, so make sure you brush after you have	109
candy or sweets!	112

	1st	2nd	3rd
WRR			
Errors			



Comprehension Questions: Taking Care of Your Teeth

1. How often should you brush your teeth?

2. What does your dentist do to take care of your teeth?

3. How often should you see the dentist?

4. Why do you think you should brush your teeth after you eat candy or sweets?

5. Why do you think it is so important to take good care of your teeth?

The Life Cycle of a Chicken

Everyone knows that chickens lay eggs, but	7
did you know that eggs are only one step in	17
the life cycle of a chicken? The life cycle	26
starts when a female chicken, called a hen,	34
lays an egg. The hen sits on her nest full of	45
eggs to keep them warm until they hatch.	53
Fluffy little baby chicks hatch out of the	61
eggs. The chicks grow for about three	68
months, until they reach adulthood. If the	75
adult chickens are females, they will lay eggs.	83
The hatch into chicks; the chicks grow into	91
chickens and the entire process starts over.	98

	1st	2nd	3rd
WRR			
Errors			



Comprehension Questions: The Life Cycle of a Chicken

1. What is the first step in a chicken's life cycle?

2. How does a hen take care of the chicks before they hatch?

3. How long does it take for chicks to reach adulthood?


4. How does the cycle happen again and again?

5. What other animal life cycle does this remind you of?

The Zoo Trip

My class had a field trip to the zoo. I was	11
excited because it is my favorite place to visit.	20
When we got to school, my teacher put us into	30
groups. I was in a group with my best friends.	40
We got on the bus and drove for a long time and	52
then we were finally there! The first thing we	61
went to see was the giraffes. They were eating	70
leaves off trees with their long tongues. Next	78
we saw the chimps. They were playful and fun	87
to watch. My favorite was the penguins. They	95
were diving into the icy water and swimming	103
around in their black and white suits. I love going	113
to the zoo!	116

	1st	2nd	3rd
WRR			
Errors			



Comprehension Questions: The Zoo Trip

1. Why was the child excited about the field trip?

2. What was the first thing the group saw?

3. Why do you think the teacher put the students into groups?










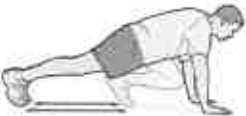


4. What was the child's favorite animal?

5. Why do you think the child said the penguins were wearing black and white suits?

Physical Education Workout from Home

Kindergarten, 1st, and 2nd Grade E - Learning Day

PE Student Workout: Do every exercise in each box. When you finish all of them you are done with your workout.

F (Frequency)	I (Intensity)	T (Time)	T (Type)
10 Jumping Jacks 	5 Push-ups 	10 Squats 	Run in Place for 20 seconds 
5 Sit-Ups 	Stand on 1 leg for 20 seconds 	10 Arm circles 	10 Second Rest 
6 Burpees 	10 Mountain Climbers 	10 Body Twists 	Run in Place for 20 seconds 

2nd Grade E - Learning Day Art Choices

- **Please choose one option. Each option should last around 20 minutes.**

***As long as an adult has initialed the Snow Day Choice Board, there is no need to return any of your creations to school.**

Color a page from a coloring book.

Make a collage with stickers.

Draw a picture of your family.

Draw a picture of your house.

Play a game of Pictionary

Draw a landscape or cityscape.

Draw a design for a \$3 bill.

Create a new logo for your favorite sports team.

Draw your "Dream Job".

Draw your "Dream Vacation".

Grab a piece of food from your fridge or pantry and draw it.

Reference a picture from a book or magazine and draw it.

Watch a "How to Draw" video and then complete the drawing.

20 minutes of "Free Art".

2nd Grade E - Learning Day Music Choices

***As long as an adult has initialed the Snow Day Choice Board, there is no need to return any of your creations to school.**

Sing a song about snow!

Write a rhythm composition and perform it for your family.

Explore our virtual classroom that you can access from your music folder in Seesaw.

Sing a song of your choice!

Writing Paper

Name _____

Writing Paper

Name _____

Blank writing area with horizontal lines.

Dear _____,

Your friend,

NOVEMBER

WRITING PROMPTS



- | | | | |
|---|---|--|--|
| 1 Write in complete sentences what you know about turkeys. | 2 Do you think corn is yummy or yucky? Give reasons why. | 3 What is your favorite holiday? Why is it your favorite? | 4 Write a letter to a veteran. Thank him/her for serving! |
| 5 I would be very thankful if I never have to _____ because... | 6 What is your favorite sport to watch or play? Why? | 7 Draw and describe your idea of the perfect meal. | 8 If you could eat dinner with anyone, who would it be? |
| 9 Imagine you are sailing on the Mayflower and write about it. | 10 What is your favorite kind of pie? Why is it your favorite? | 11 Do you think a turkey would make a good pet? Why? | 12 I jumped in a big pile of leaves and suddenly found... |
| 13 Write about a time when you felt stuffed. What did you eat? | 14 Who are you thankful for? Why do you feel that way? | 15 Write a funny story about a talking turkey. | 16 Do you think pumpkin pie is yummy or yucky? Why? |
| 17 Describe how you would escape if you were a turkey. | 18 Write about your favorite Thanksgiving Day foods. | 19 The turkey jumped out of the oven and said... | 20 Why is it important to be thankful for what you have? |

DECEMBER

WRITING PROMPTS



1 Describe what the abominable snowman would look like.	2 Draw and design a gingerbread house and write about it.	3 Describe the taste of hot chocolate. Do you like the taste?	4 Write a story about building toys with elves in the North Pole.
5 Write a story about a gingerbread man jumping out of the oven.	6 Would you rather live with a lot of snow or no snow?	7 If you were with Frosty the Snowman, what would you do?	8 What will you miss most about school during break?
9 What is your favorite holiday movie to watch? Why?	10 Would you want a reindeer as a pet? Why or why not?	11 Is it more fun to give or receive gifts? Why is it more fun?	12 Draw and design a new toy and write about how it works.
13 What is your favorite holiday food or treat? Why?	14 What holiday traditions does your family have?	15 Describe what you would pack for a trip to the North Pole.	16 What are the five things you want most for the holidays?
17 Draw and design a holiday cookie and write about the flavor.	18 Write about what you are going to do during break.	19 I woke up this morning and saw I looked like an elf...	20 Write about your favorite memory from this year.

JANUARY

WRITING PROMPTS



1 What are your top 3 New Year's resolutions for this year?

2 What are your favorite things about the winter time?

3 Which season do you like better... summer or winter? Why?

4 Write about your favorite things to do in the snow.

5 Write a story about a snowman that comes to life.

6 Describe the steps you take to make hot chocolate.

7 What are your favorite foods to eat on a cold day?

8 Describe the steps you take to build a snowman.

9 Would you want to live in an igloo? Why or why not?

10 Would you want a penguin as a pet? Why or why not?

11 Why is Dr. Martin Luther King Jr. an important person?

12 Write a detailed story about the best snowball fight ever.

13 I was skating on a frozen pond when suddenly...

14 A small snowflake lands on you and whispers "hello"...

15 Write a detailed story that takes place at the North Pole.

16 I woke up one day trapped in a snow globe and...

17 Write in complete sentences what you know about snow.

18 Would you want a reindeer as a pet? Why or why not?

19 Would you want to live in a gingerbread house?

20 What would you do if school was cancelled for snow?

FEBRUARY

WRITING PROMPTS



- | | | | |
|---|--|--|---|
| 1 Design your own football team and write about it. | 2 Do you want the groundhog to see his shadow? Why? | 3 Write all about an important African American. | 4 What is your favorite Valentine's candy? Why? |
| 5 Would you want to have Cupid's job? Why or why not? | 6 Cupid's wing is broken. How would you help him fly? | 7 Make a list of people you love and explain why you love them. | 8 Describe what makes someone a good friend. |
| 9 Write about what the word "love" means to you. | 10 Write a letter to your family and tell them why you love them. | 11 Describe the best Valentine's Day you have ever had. | 12 Create a new mascot for Valentine's Day. |
| 13 If you could meet the president, what would you say? | 14 What are 5 things you would do if you were the president? | 15 What do you think is the best way to show someone you love them? | 16 If you were a type of candy, what type of candy would you be? |
| 17 Write a detailed story about a time you lost a tooth. | 18 If you could have any pet, what pet would you get and why? | 19 Which is better: chocolate or candy hearts? Why? | 20 Make a list of ways you can keep your heart healthy. |

MARCH

WRITING PROMPTS



1 Are you looking forward to spring? Why or why not?

2 Why do you think it is important to read every day?

3 What is your favorite book you have read? Why?

4 Write a letter to a leprechaun to tell him to give you his gold.

5 Explain the steps you would take to catch a leprechaun.

6 Would you want to be a leprechaun? Why or why not?

7 Write a story about finding gold at the end of a rainbow.

8 Do you have a pair of lucky socks? Write about them.

9 What would you do if you found a big pot of gold?

10 What would you do if everything you touched turned green?

11 What would you do if you found a four-leaf clover?

12 Write a list of everything you know about rainbows.

13 Where would you hide your gold if you were a leprechaun?

14 What would you do if you were invisible for a day?

15 What are 3 things you can give away during spring cleaning?

16 Pretend you are a kite flying in the sky. What do you see?

17 What is something you can't wait to do when you are older?


18 Do you like to ride rollercoasters? Why or why not?

19 You find a note in a bottle in the ocean. What does it say?

20 Design a new pair of shoes and write about them.

APRIL

WRITING PROMPTS



1 Write about a funny trick someone has played on you.

2 What is your favorite thing about spring? Why?

3 Would you want a chick as a pet? Why or why not?

4 What do you think it would be like to be the Easter Bunny?

5 What would you do if you could be a butterfly for a day?

6 What would you do if you could stay up all night?

7 What is your favorite thing to do outside on a rainy day?

8 Describe what would be in the perfect Easter basket.

9 Would you want a rabbit as a pet? Why or why not?

10 Create a brand new flavor of jellybean and describe it.

11 One day it rained so hard outside that it started to flood...

12 Describe the steps you would take to plant a garden.

13 Write a story about a chocolate bunny that comes to life.

14 Where would you want to go for a spring vacation?

15 Write a story about a day it rained chocolate chips.

16 What is your favorite smell in the spring? Why?

17 What would you pack for a trip to the moon? Why?

18 What are the best things about being a kid? Why?

19 Imagine you are a bumblebee and write about your day.

20 If you became a superhero, what would you do?