
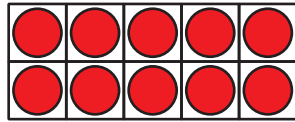


# Numbers 0–20: End-of-Unit Assessment

1. Draw 17 dots.


Use the 10-frame if it helps you.


2. a. How many dots are there?  
Write a number.





---

- b. How many dots are there?  
Write a number.




---


- c. How many fingers are there?  
Write a number.





---

3. Circle the 2 images that make 14 dots together.


A.




B.



C.



D.



E.



4. Find the number that makes each equation true.

a.  $10 + 2 = \underline{\hspace{2cm}}$

b.  $10 + 4 = \underline{\hspace{2cm}}$

c.  $7 + 10 = \underline{\hspace{2cm}}$