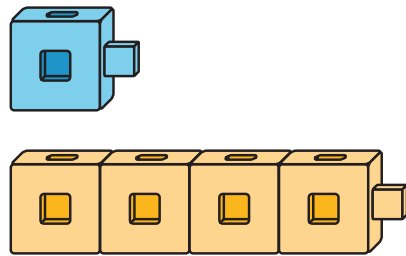


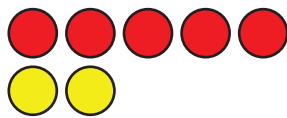
Composing and Decomposing Numbers to 10: End-of-Unit Assessment

1. Write an expression for each picture.

a.



b.



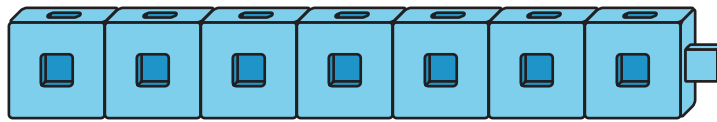
2. Write the number that makes 10 with each number.

a. 5 _____

b. 9 _____

c. 4 _____

3. Mai has a train of 7 connecting cubes.



She snaps the train into two pieces.

Show 1 way to snap the cubes.

Show a different way to snap the cubes.

4. Diego has 3 toy cars on the floor.

He has 5 more toy cars on his bed.

How many toy cars does Diego have altogether?

Show your thinking using drawings, numbers, or words.