







# Understanding Addition and Subtraction: End-of-Unit Assessment

1. How many shapes are there?



---

---

---

2. There are 3 stickers on the book.  
Then Jada puts 2 more stickers on the book.  
How many stickers are on the book now?

Show your thinking using drawings, numbers, words, or objects.

---

---

---

3. There are 6 kids playing in the park.  
2 of the kids leave the park to go home.  
How many kids are playing in the park now?

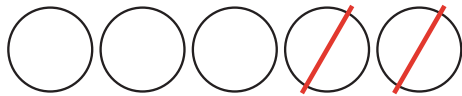
Show your thinking using drawings, numbers, words, or objects.

---


---

---

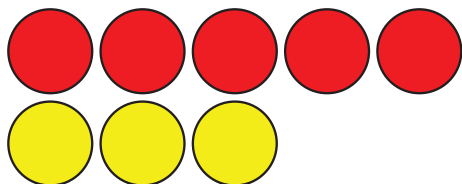
4. Draw a line to match each picture with the expression it shows.



$$3 + 4$$



$$5 + 3$$



$$5 - 2$$

5. Write the value of each expression.

a.  $2 + 3$  \_\_\_\_\_  
 \_\_\_\_\_  
 \_\_\_\_\_

b.  $8 - 1$  \_\_\_\_\_  
 \_\_\_\_\_  
 \_\_\_\_\_

c.  $3 + 0$  \_\_\_\_\_  
 \_\_\_\_\_  
 \_\_\_\_\_